



Determina quale lettera rappresenta graficamente la somma numerica.

1)  $\frac{9}{12} + \frac{1}{12}$

3)  $\frac{9}{10} + \frac{3}{10}$

5)  $\frac{1}{5} + \frac{1}{5}$

7)  $\frac{2}{3} + \frac{2}{3}$

9)  $\frac{4}{8} + \frac{3}{8}$

11)  $\frac{4}{12} + \frac{4}{12}$

13)  $\frac{3}{10} + \frac{4}{10}$

2)  $\frac{4}{6} + \frac{4}{6}$

4)  $\frac{6}{10} + \frac{3}{10}$

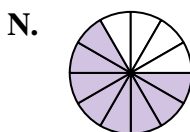
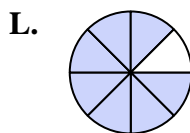
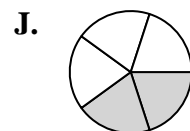
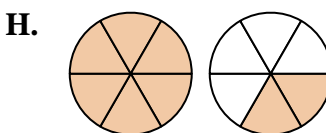
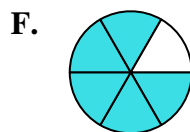
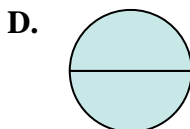
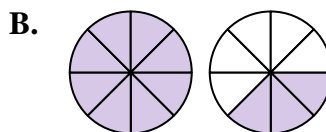
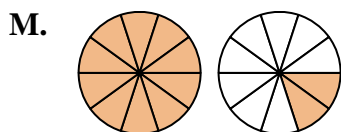
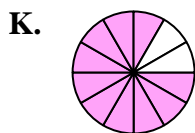
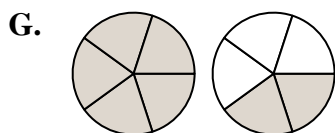
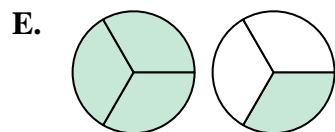
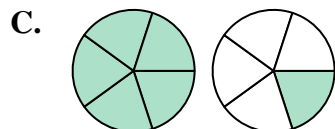
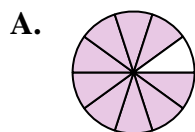
6)  $\frac{4}{5} + \frac{3}{5}$

8)  $\frac{2}{5} + \frac{4}{5}$

10)  $\frac{5}{8} + \frac{6}{8}$

12)  $\frac{2}{6} + \frac{3}{6}$

14)  $\frac{1}{2} + \frac{1}{2}$

**Risposte**

1. \_\_\_\_\_

2. \_\_\_\_\_

3. \_\_\_\_\_

4. \_\_\_\_\_

5. \_\_\_\_\_

6. \_\_\_\_\_

7. \_\_\_\_\_

8. \_\_\_\_\_

9. \_\_\_\_\_

10. \_\_\_\_\_

11. \_\_\_\_\_

12. \_\_\_\_\_

13. \_\_\_\_\_

14. \_\_\_\_\_



Determina quale lettera rappresenta graficamente la somma numerica.

1)  $\frac{9}{12} + \frac{1}{12}$

3)  $\frac{9}{10} + \frac{3}{10}$

5)  $\frac{1}{5} + \frac{1}{5}$

7)  $\frac{2}{3} + \frac{2}{3}$

9)  $\frac{4}{8} + \frac{3}{8}$

11)  $\frac{4}{12} + \frac{4}{12}$

13)  $\frac{3}{10} + \frac{4}{10}$

2)  $\frac{4}{6} + \frac{4}{6}$

4)  $\frac{6}{10} + \frac{3}{10}$

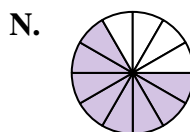
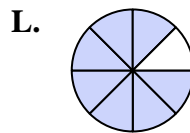
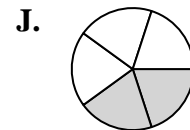
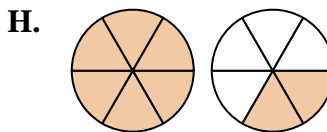
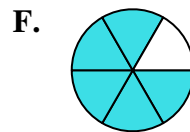
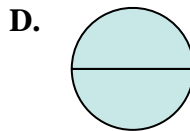
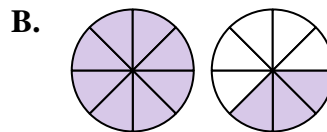
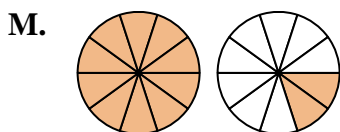
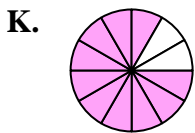
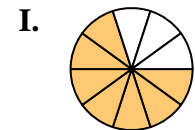
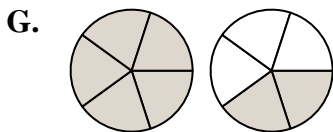
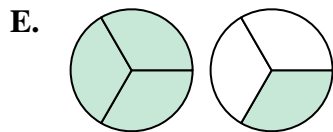
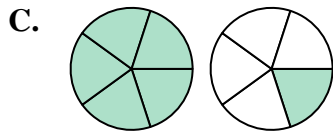
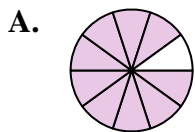
6)  $\frac{4}{5} + \frac{3}{5}$

8)  $\frac{2}{5} + \frac{4}{5}$

10)  $\frac{5}{8} + \frac{6}{8}$

12)  $\frac{2}{6} + \frac{3}{6}$

14)  $\frac{1}{2} + \frac{1}{2}$

**Risposte**

1. **K**  $\frac{10}{12}$

2. **H**  $1\frac{2}{6}$

3. **M**  $1\frac{2}{10}$

4. **A**  $\frac{9}{10}$

5. **J**  $\frac{2}{5}$

6. **G**  $1\frac{2}{5}$

7. **E**  $1\frac{1}{3}$

8. **C**  $1\frac{1}{5}$

9. **L**  $\frac{7}{8}$

10. **B**  $1\frac{3}{8}$

11. **N**  $\frac{8}{12}$

12. **F**  $\frac{5}{6}$

13. **I**  $\frac{7}{10}$

14. **D**  $\frac{2}{2}$