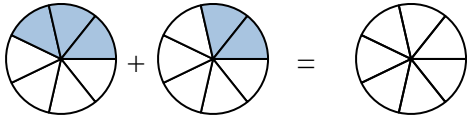




Scrivi numericamente la frazione rappresentata.

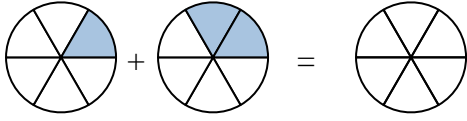
Risposte

Es)



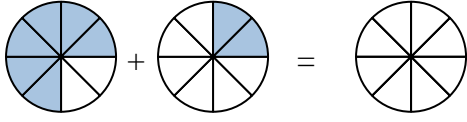
Es. $\frac{3}{7}$ $\frac{2}{7}$ $\frac{5}{7}$

1)



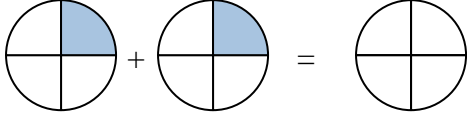
1. _____

2)



2. _____

3)



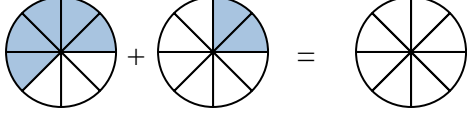
3. _____

4)



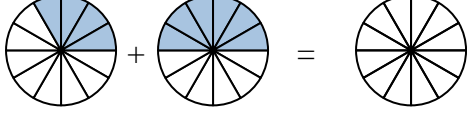
4. _____

5)



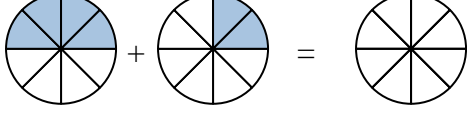
5. _____

6)



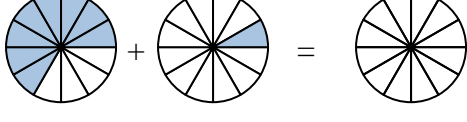
6. _____

7)



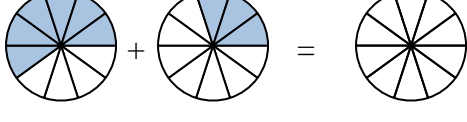
7. _____

8)



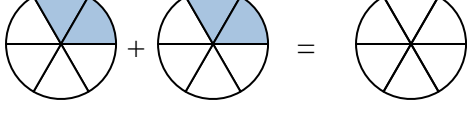
8. _____

9)



9. _____

10)

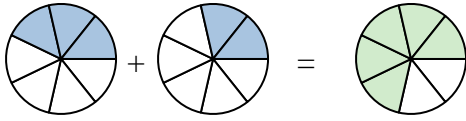


10. _____

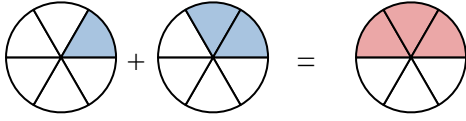


Scrivi numericamente la frazione rappresentata.

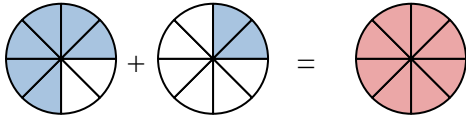
Es)



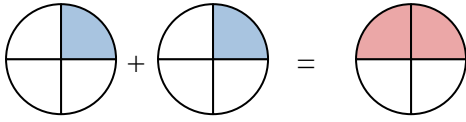
1)



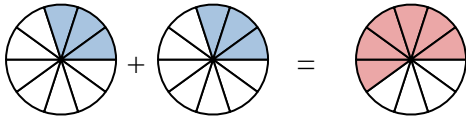
2)



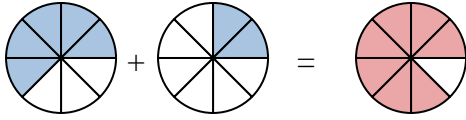
3)



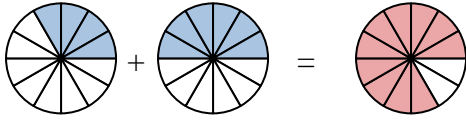
4)



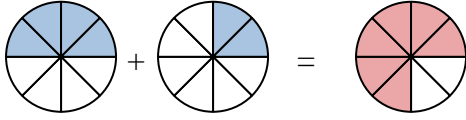
5)



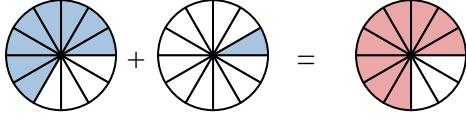
6)



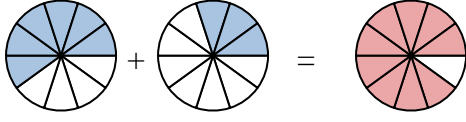
7)



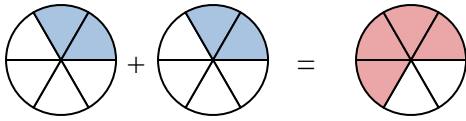
8)



9)



10)

**Risposte**Es. $\frac{3}{7}$ $\frac{2}{7}$ $\frac{5}{7}$ 1. $\frac{1}{6}$ $\frac{2}{6}$ $\frac{3}{6}$ 2. $\frac{6}{8}$ $\frac{2}{8}$ $\frac{8}{8}$ 3. $\frac{1}{4}$ $\frac{1}{4}$ $\frac{2}{4}$ 4. $\frac{3}{10}$ $\frac{3}{10}$ $\frac{6}{10}$ 5. $\frac{5}{8}$ $\frac{2}{8}$ $\frac{7}{8}$ 6. $\frac{4}{12}$ $\frac{6}{12}$ $\frac{10}{12}$ 7. $\frac{4}{8}$ $\frac{2}{8}$ $\frac{6}{8}$ 8. $\frac{8}{12}$ $\frac{1}{12}$ $\frac{9}{12}$ 9. $\frac{6}{10}$ $\frac{3}{10}$ $\frac{9}{10}$ 10. $\frac{2}{6}$ $\frac{2}{6}$ $\frac{4}{6}$