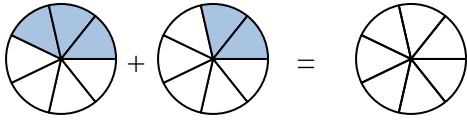




Scrivi numericamente la frazione rappresentata.

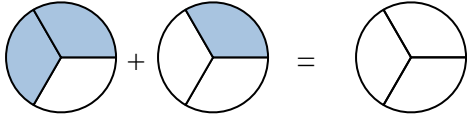
Risposte

Es)



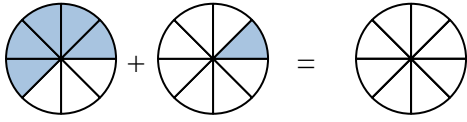
Es. $\frac{3}{7}$ $\frac{2}{7}$ $\frac{5}{7}$

1)



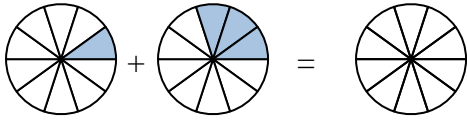
1. _____

2)



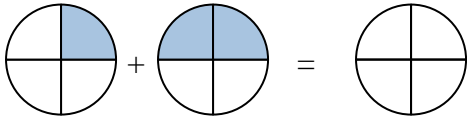
2. _____

3)



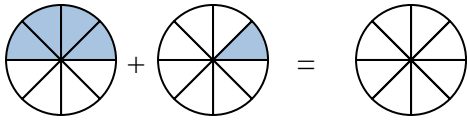
3. _____

4)



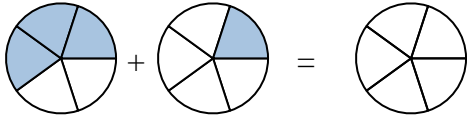
4. _____

5)



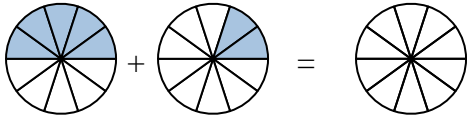
5. _____

6)



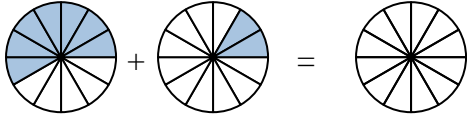
6. _____

7)



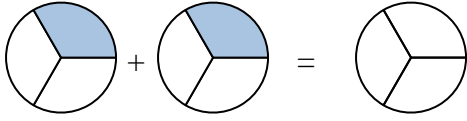
7. _____

8)



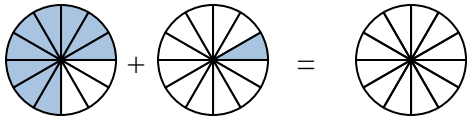
8. _____

9)



9. _____

10)

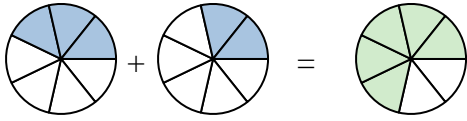


10. _____

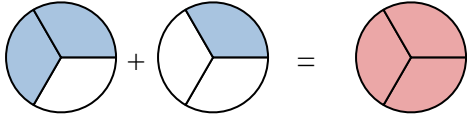


Scrivi numericamente la frazione rappresentata.

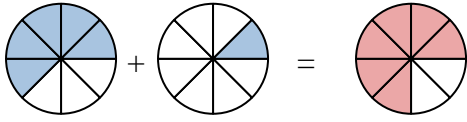
Es)



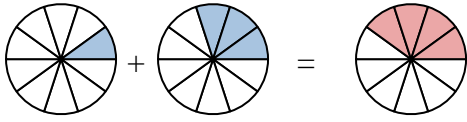
1)



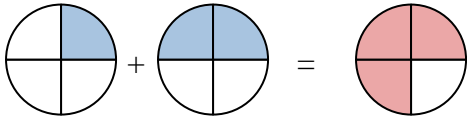
2)



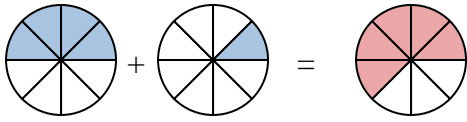
3)



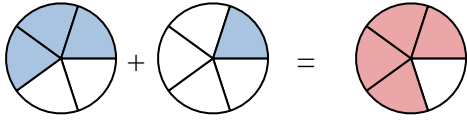
4)



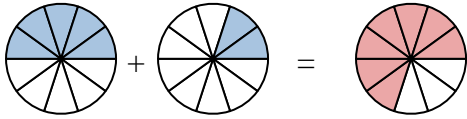
5)



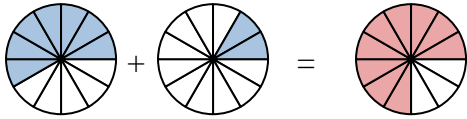
6)



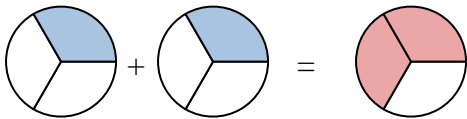
7)



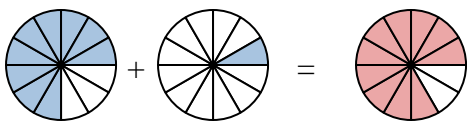
8)



9)



10)

**Risposte**

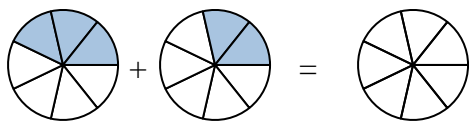
Es.	$\frac{3}{7}$	$\frac{2}{7}$	$\frac{5}{7}$
1.	$\frac{2}{3}$	$\frac{1}{3}$	$\frac{3}{3}$
2.	$\frac{5}{8}$	$\frac{1}{8}$	$\frac{6}{8}$
3.	$\frac{1}{10}$	$\frac{3}{10}$	$\frac{4}{10}$
4.	$\frac{1}{4}$	$\frac{2}{4}$	$\frac{3}{4}$
5.	$\frac{4}{8}$	$\frac{1}{8}$	$\frac{5}{8}$
6.	$\frac{3}{5}$	$\frac{1}{5}$	$\frac{4}{5}$
7.	$\frac{5}{10}$	$\frac{2}{10}$	$\frac{7}{10}$
8.	$\frac{7}{12}$	$\frac{2}{12}$	$\frac{9}{12}$
9.	$\frac{1}{3}$	$\frac{1}{3}$	$\frac{2}{3}$
10.	$\frac{9}{12}$	$\frac{1}{12}$	$\frac{10}{12}$



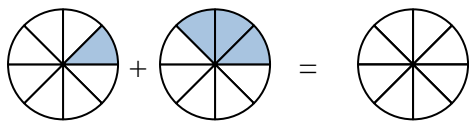
Scrivi numericamente la frazione rappresentata.

Risposte

Es)

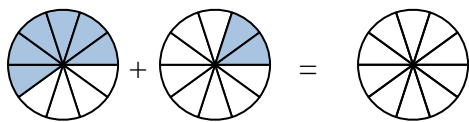
Es. $\frac{3}{7}$ $\frac{2}{7}$ $\frac{5}{7}$

1)



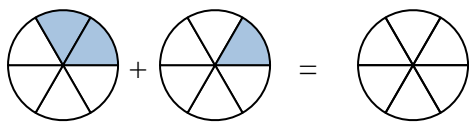
1. _____

2)



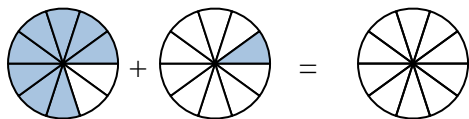
2. _____

3)



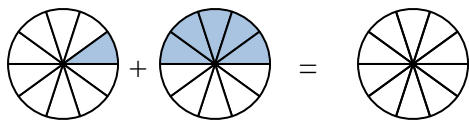
3. _____

4)



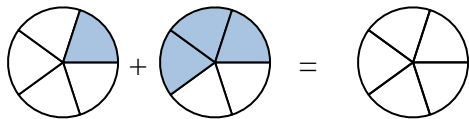
4. _____

5)



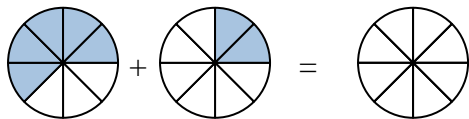
5. _____

6)



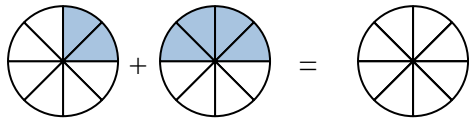
6. _____

7)



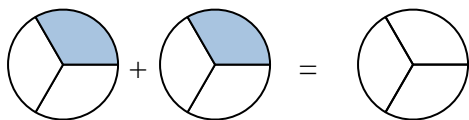
7. _____

8)



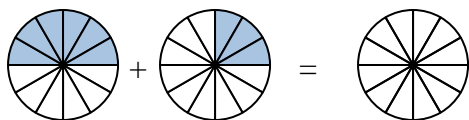
8. _____

9)

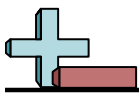


9. _____

10)

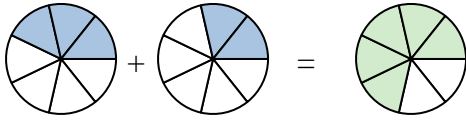


10. _____

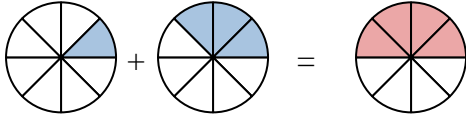


Scrivi numericamente la frazione rappresentata.

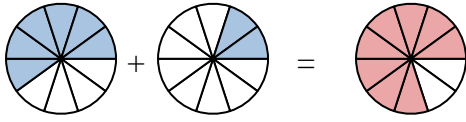
Es)



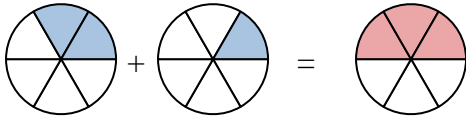
1)



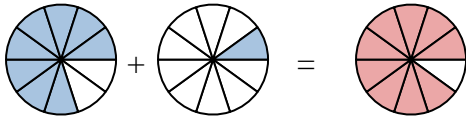
2)



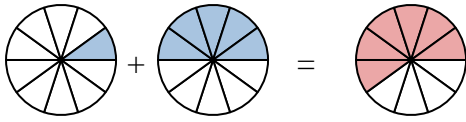
3)



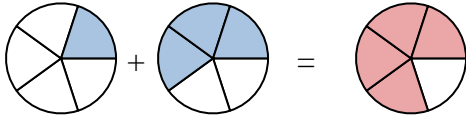
4)



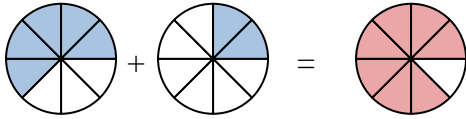
5)



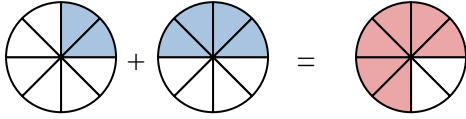
6)



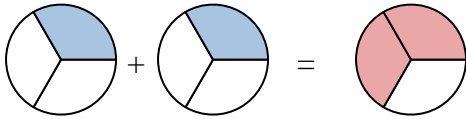
7)



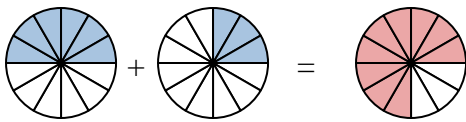
8)

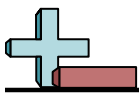


9)



10)

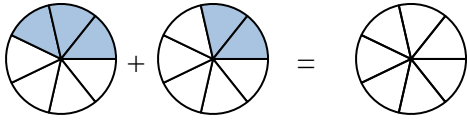
**Risposte**Es. $\frac{3}{7}$ $\frac{2}{7}$ $\frac{5}{7}$ 1. $\frac{1}{8}$ $\frac{3}{8}$ $\frac{4}{8}$ 2. $\frac{6}{10}$ $\frac{2}{10}$ $\frac{8}{10}$ 3. $\frac{2}{6}$ $\frac{1}{6}$ $\frac{3}{6}$ 4. $\frac{8}{10}$ $\frac{1}{10}$ $\frac{9}{10}$ 5. $\frac{1}{10}$ $\frac{5}{10}$ $\frac{6}{10}$ 6. $\frac{1}{5}$ $\frac{3}{5}$ $\frac{4}{5}$ 7. $\frac{5}{8}$ $\frac{2}{8}$ $\frac{7}{8}$ 8. $\frac{2}{8}$ $\frac{4}{8}$ $\frac{6}{8}$ 9. $\frac{1}{3}$ $\frac{1}{3}$ $\frac{2}{3}$ 10. $\frac{6}{12}$ $\frac{3}{12}$ $\frac{9}{12}$



Scrivi numericamente la frazione rappresentata.

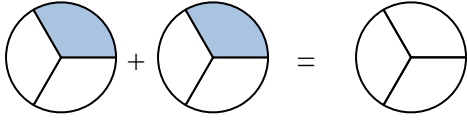
Risposte

Es)



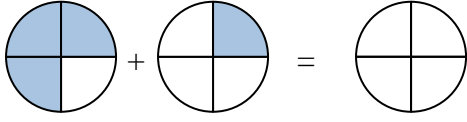
Es. $\frac{3}{7}$ $\frac{2}{7}$ $\frac{5}{7}$

1)



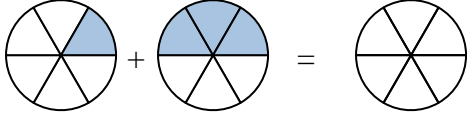
1. _____

2)



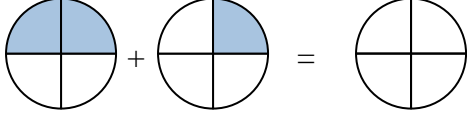
2. _____

3)



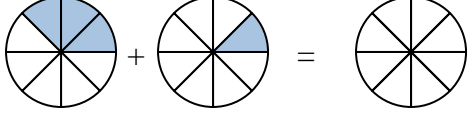
3. _____

4)



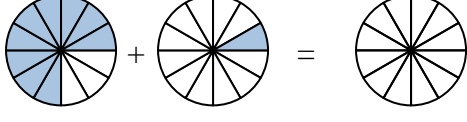
4. _____

5)



5. _____

6)



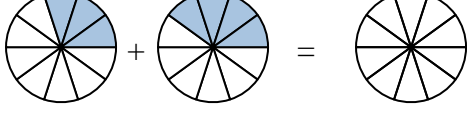
6. _____

7)



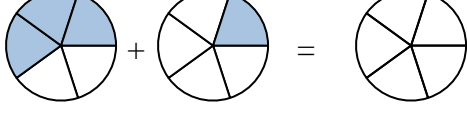
7. _____

8)



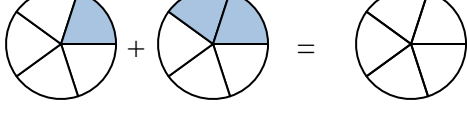
8. _____

9)

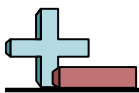


9. _____

10)

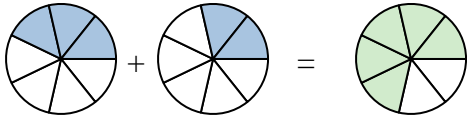


10. _____

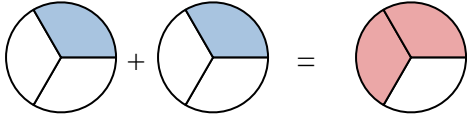


Scrivi numericamente la frazione rappresentata.

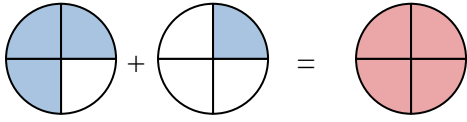
Es)



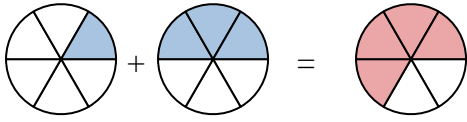
1)



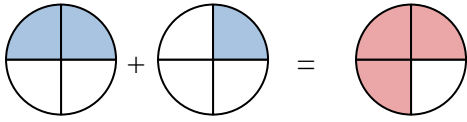
2)



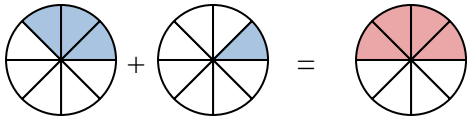
3)



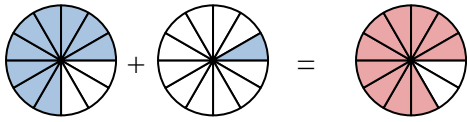
4)



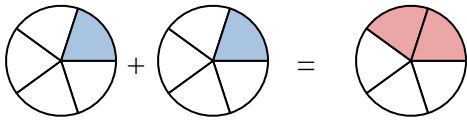
5)



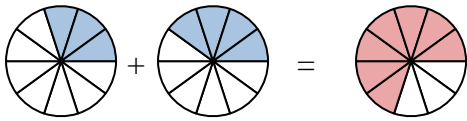
6)



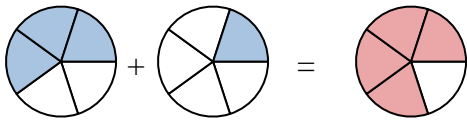
7)



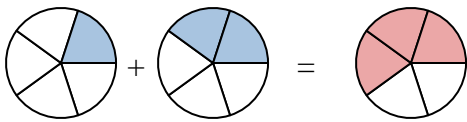
8)



9)



10)



Risposte

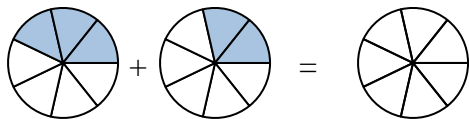
Es.	$\frac{3}{7}$	$\frac{2}{7}$	$\frac{5}{7}$
1.	$\frac{1}{3}$	$\frac{1}{3}$	$\frac{2}{3}$
2.	$\frac{3}{4}$	$\frac{1}{4}$	$\frac{4}{4}$
3.	$\frac{1}{6}$	$\frac{3}{6}$	$\frac{4}{6}$
4.	$\frac{2}{4}$	$\frac{1}{4}$	$\frac{3}{4}$
5.	$\frac{3}{8}$	$\frac{1}{8}$	$\frac{4}{8}$
6.	$\frac{9}{12}$	$\frac{1}{12}$	$\frac{10}{12}$
7.	$\frac{1}{5}$	$\frac{1}{5}$	$\frac{2}{5}$
8.	$\frac{3}{10}$	$\frac{4}{10}$	$\frac{7}{10}$
9.	$\frac{3}{5}$	$\frac{1}{5}$	$\frac{4}{5}$
10.	$\frac{1}{5}$	$\frac{2}{5}$	$\frac{3}{5}$



Scrivi numericamente la frazione rappresentata.

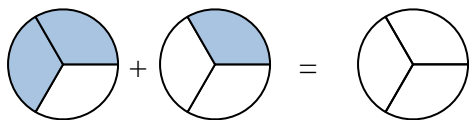
Risposte

Es)



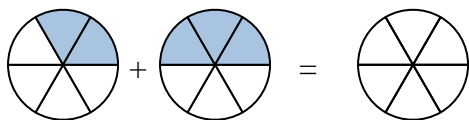
Es. $\frac{3}{7}$ $\frac{2}{7}$ $\frac{5}{7}$

1)



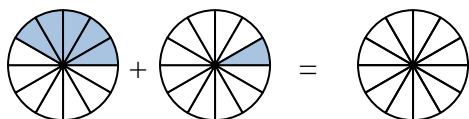
1. _____

2)



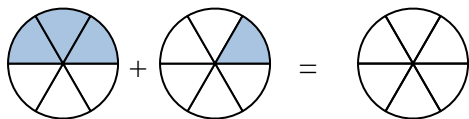
2. _____

3)



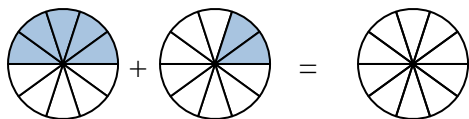
3. _____

4)



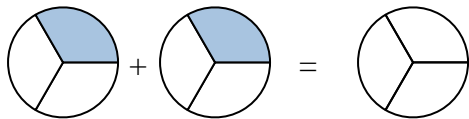
4. _____

5)



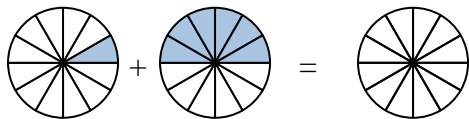
5. _____

6)



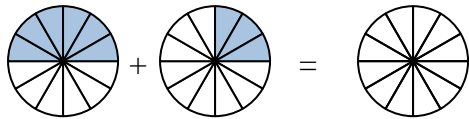
6. _____

7)



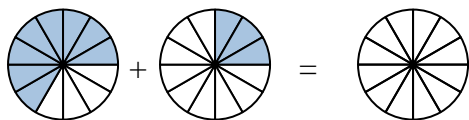
7. _____

8)



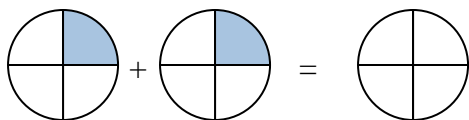
8. _____

9)



9. _____

10)

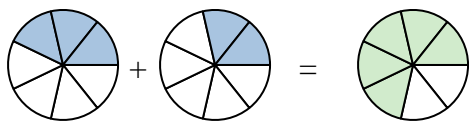


10. _____

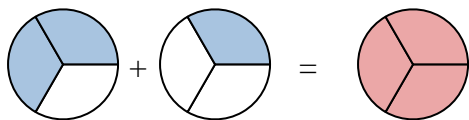


Scrivi numericamente la frazione rappresentata.

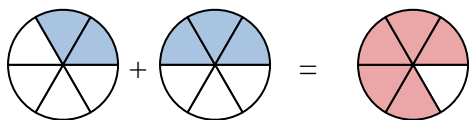
Es)



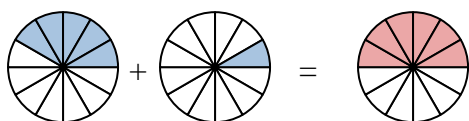
1)



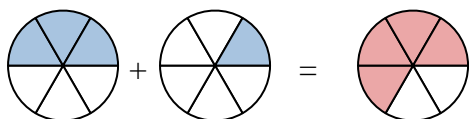
2)



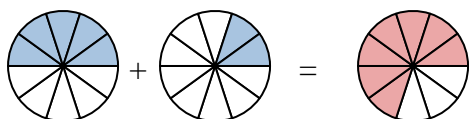
3)



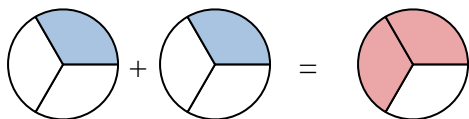
4)



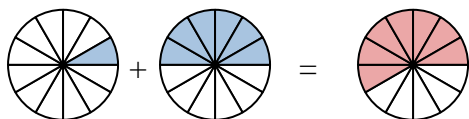
5)



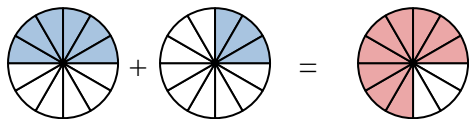
6)



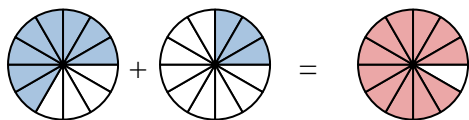
7)



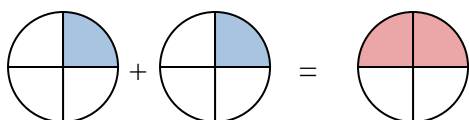
8)



9)



10)

**Risposte**

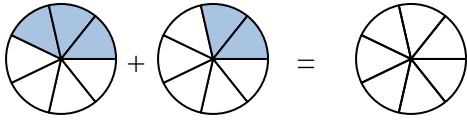
Es.	$\frac{3}{7}$	$\frac{2}{7}$	$\frac{5}{7}$
1.	$\frac{2}{3}$	$\frac{1}{3}$	$\frac{3}{3}$
2.	$\frac{2}{6}$	$\frac{3}{6}$	$\frac{5}{6}$
3.	$\frac{5}{12}$	$\frac{1}{12}$	$\frac{6}{12}$
4.	$\frac{3}{6}$	$\frac{1}{6}$	$\frac{4}{6}$
5.	$\frac{5}{10}$	$\frac{2}{10}$	$\frac{7}{10}$
6.	$\frac{1}{3}$	$\frac{1}{3}$	$\frac{2}{3}$
7.	$\frac{1}{12}$	$\frac{6}{12}$	$\frac{7}{12}$
8.	$\frac{6}{12}$	$\frac{3}{12}$	$\frac{9}{12}$
9.	$\frac{8}{12}$	$\frac{3}{12}$	$\frac{11}{12}$
10.	$\frac{1}{4}$	$\frac{1}{4}$	$\frac{2}{4}$



Scrivi numericamente la frazione rappresentata.

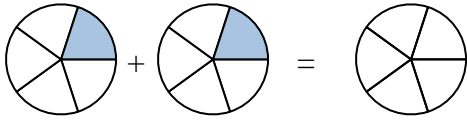
Risposte

Es)



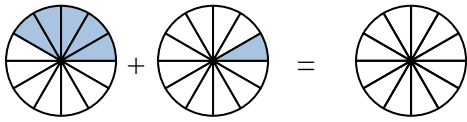
Es. $\frac{3}{7}$ $\frac{2}{7}$ $\frac{5}{7}$

1)



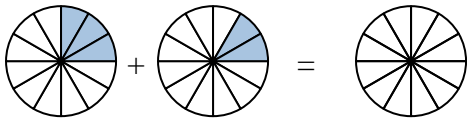
1. _____

2)



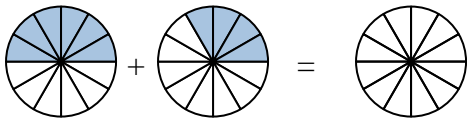
2. _____

3)



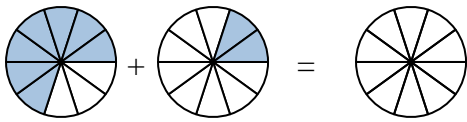
3. _____

4)



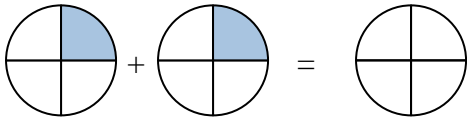
4. _____

5)



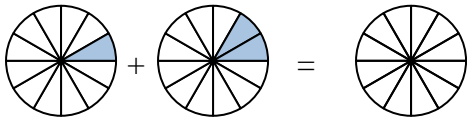
5. _____

6)



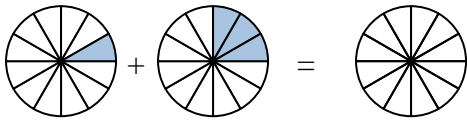
6. _____

7)



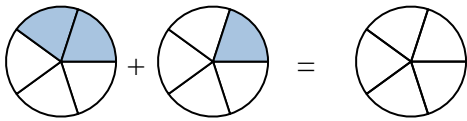
7. _____

8)



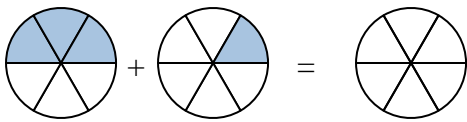
8. _____

9)



9. _____

10)

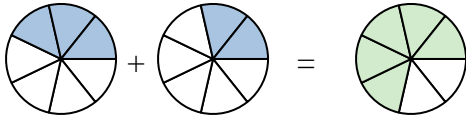


10. _____

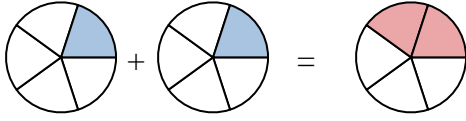


Scrivi numericamente la frazione rappresentata.

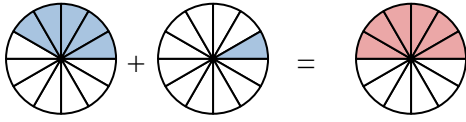
Es)



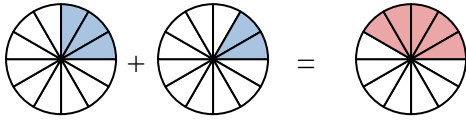
1)



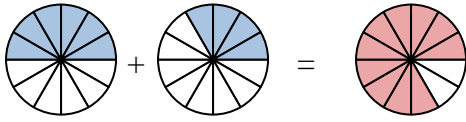
2)



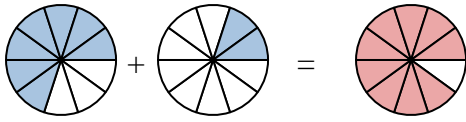
3)



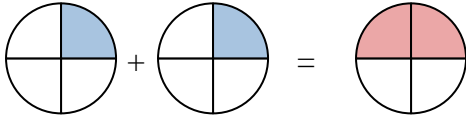
4)



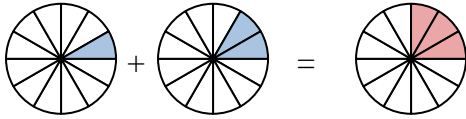
5)



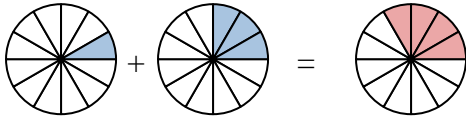
6)



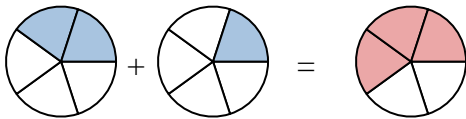
7)



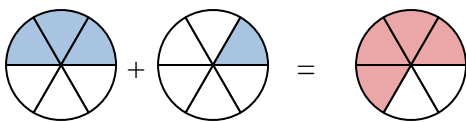
8)



9)



10)

**Risposte**

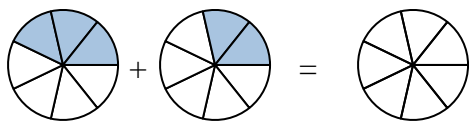
Es.	$\frac{3}{7}$	$\frac{2}{7}$	$\frac{5}{7}$
1.	$\frac{1}{5}$	$\frac{1}{5}$	$\frac{2}{5}$
2.	$\frac{5}{12}$	$\frac{1}{12}$	$\frac{6}{12}$
3.	$\frac{3}{12}$	$\frac{2}{12}$	$\frac{5}{12}$
4.	$\frac{6}{12}$	$\frac{4}{12}$	$\frac{10}{12}$
5.	$\frac{7}{10}$	$\frac{2}{10}$	$\frac{9}{10}$
6.	$\frac{1}{4}$	$\frac{1}{4}$	$\frac{2}{4}$
7.	$\frac{1}{12}$	$\frac{2}{12}$	$\frac{3}{12}$
8.	$\frac{1}{12}$	$\frac{3}{12}$	$\frac{4}{12}$
9.	$\frac{2}{5}$	$\frac{1}{5}$	$\frac{3}{5}$
10.	$\frac{3}{6}$	$\frac{1}{6}$	$\frac{4}{6}$



Scrivi numericamente la frazione rappresentata.

Risposte

Es)



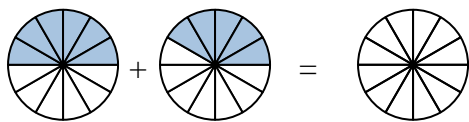
Es. $\frac{3}{7}$ $\frac{2}{7}$ $\frac{5}{7}$

1)



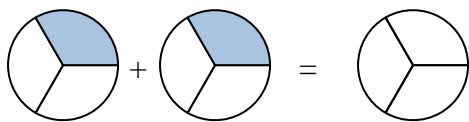
1. _____

2)



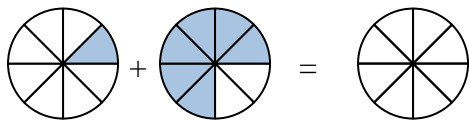
2. _____

3)



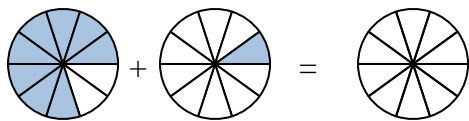
3. _____

4)



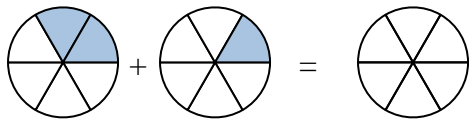
4. _____

5)



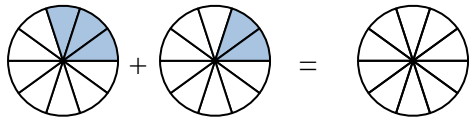
5. _____

6)



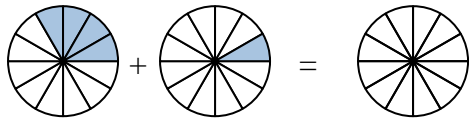
6. _____

7)



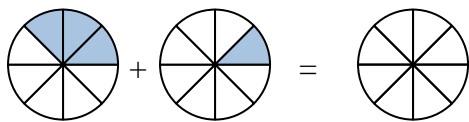
7. _____

8)



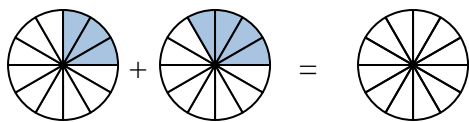
8. _____

9)



9. _____

10)

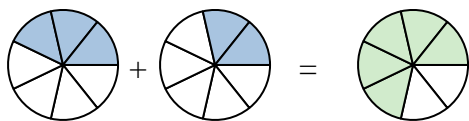


10. _____



Scrivi numericamente la frazione rappresentata.

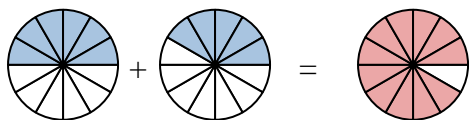
Es)



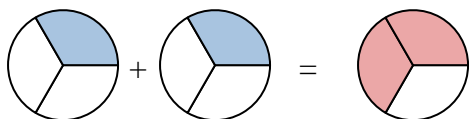
1)



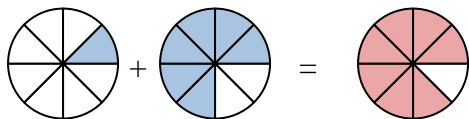
2)



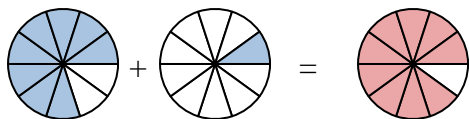
3)



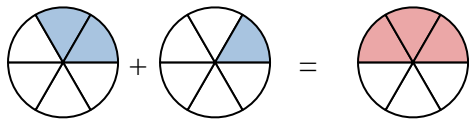
4)



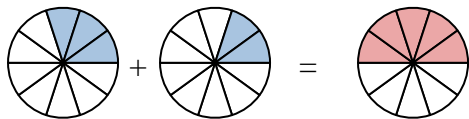
5)



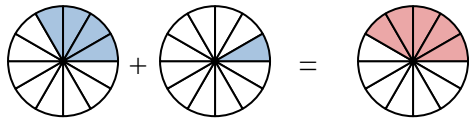
6)



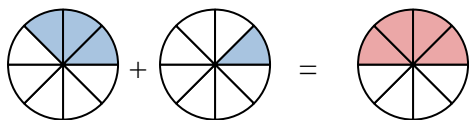
7)



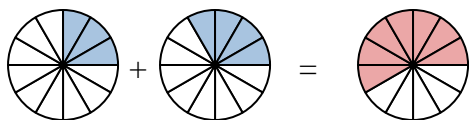
8)



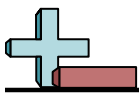
9)



10)

**Risposte**

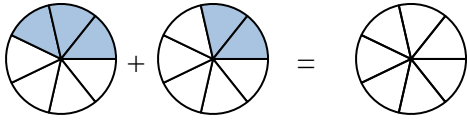
Es.	$\frac{3}{7}$	$\frac{2}{7}$	$\frac{5}{7}$
1.	$\frac{2}{5}$	$\frac{2}{5}$	$\frac{4}{5}$
2.	$\frac{6}{12}$	$\frac{5}{12}$	$\frac{11}{12}$
3.	$\frac{1}{3}$	$\frac{1}{3}$	$\frac{2}{3}$
4.	$\frac{1}{8}$	$\frac{6}{8}$	$\frac{7}{8}$
5.	$\frac{8}{10}$	$\frac{1}{10}$	$\frac{9}{10}$
6.	$\frac{2}{6}$	$\frac{1}{6}$	$\frac{3}{6}$
7.	$\frac{3}{10}$	$\frac{2}{10}$	$\frac{5}{10}$
8.	$\frac{4}{12}$	$\frac{1}{12}$	$\frac{5}{12}$
9.	$\frac{3}{8}$	$\frac{1}{8}$	$\frac{4}{8}$
10.	$\frac{3}{12}$	$\frac{4}{12}$	$\frac{7}{12}$



Scrivi numericamente la frazione rappresentata.

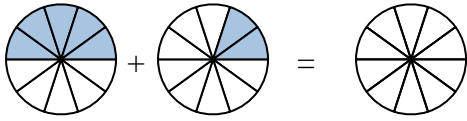
Risposte

Es)



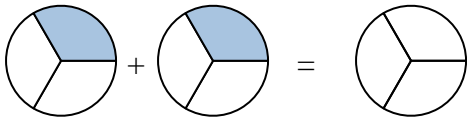
Es. $\frac{3}{7}$ $\frac{2}{7}$ $\frac{5}{7}$

1)



1. _____

2)



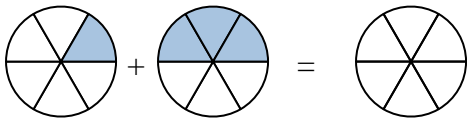
2. _____

3)



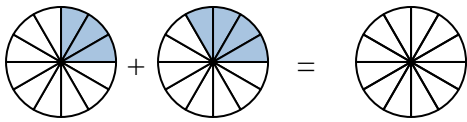
3. _____

4)



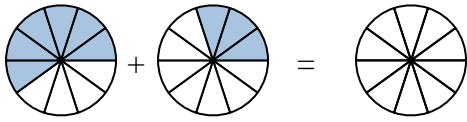
4. _____

5)



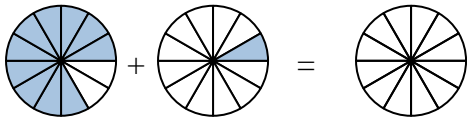
5. _____

6)



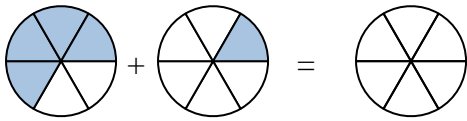
6. _____

7)



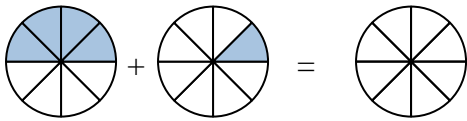
7. _____

8)



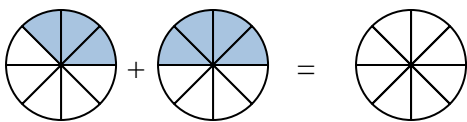
8. _____

9)



9. _____

10)

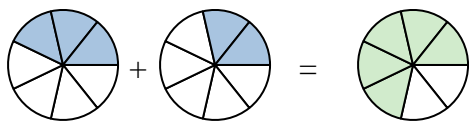


10. _____

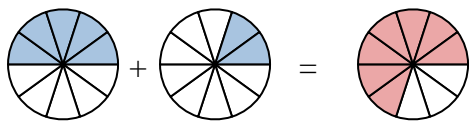


Scrivi numericamente la frazione rappresentata.

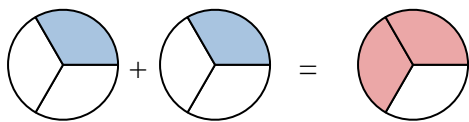
Es)



1)



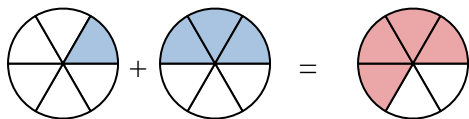
2)



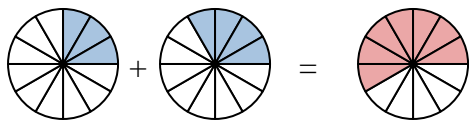
3)



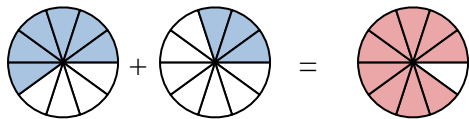
4)



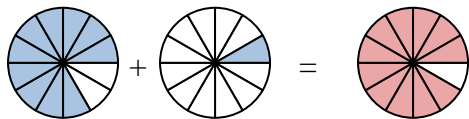
5)



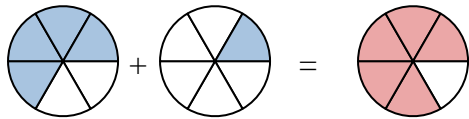
6)



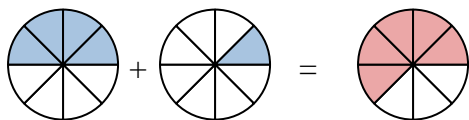
7)



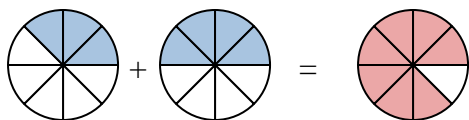
8)



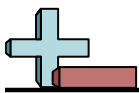
9)



10)

**Risposte**

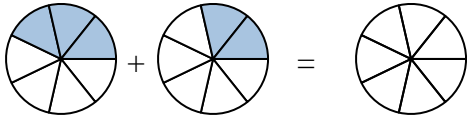
Es.	$\frac{3}{7}$	$\frac{2}{7}$	$\frac{5}{7}$
1.	$\frac{5}{10}$	$\frac{2}{10}$	$\frac{7}{10}$
2.	$\frac{1}{3}$	$\frac{1}{3}$	$\frac{2}{3}$
3.	$\frac{2}{5}$	$\frac{2}{5}$	$\frac{4}{5}$
4.	$\frac{1}{6}$	$\frac{3}{6}$	$\frac{4}{6}$
5.	$\frac{3}{12}$	$\frac{4}{12}$	$\frac{7}{12}$
6.	$\frac{6}{10}$	$\frac{3}{10}$	$\frac{9}{10}$
7.	$\frac{10}{12}$	$\frac{1}{12}$	$\frac{11}{12}$
8.	$\frac{4}{6}$	$\frac{1}{6}$	$\frac{5}{6}$
9.	$\frac{4}{8}$	$\frac{1}{8}$	$\frac{5}{8}$
10.	$\frac{3}{8}$	$\frac{4}{8}$	$\frac{7}{8}$



Scrivi numericamente la frazione rappresentata.

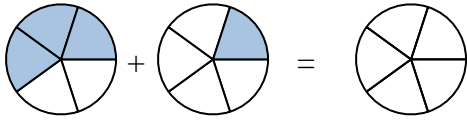
Risposte

Es)



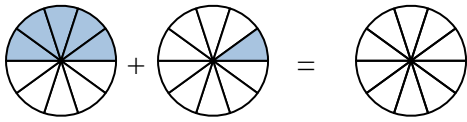
Es. $\frac{3}{7}$ $\frac{2}{7}$ $\frac{5}{7}$

1)



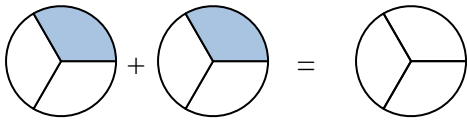
1. _____

2)



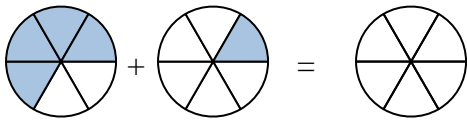
2. _____

3)



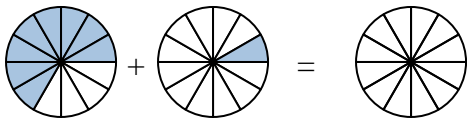
3. _____

4)



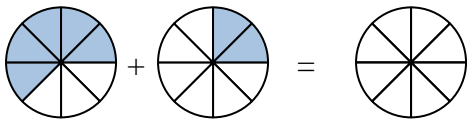
4. _____

5)



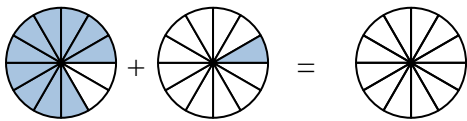
5. _____

6)



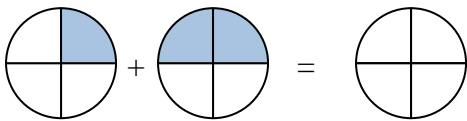
6. _____

7)



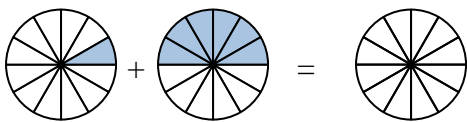
7. _____

8)



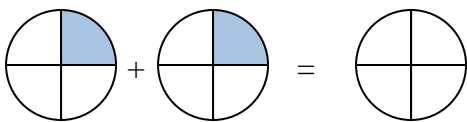
8. _____

9)



9. _____

10)

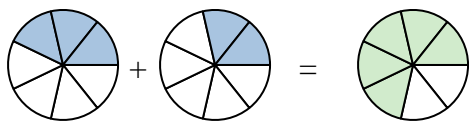


10. _____

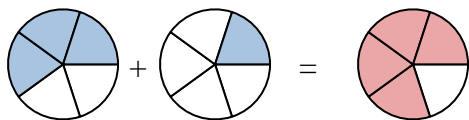


Scrivi numericamente la frazione rappresentata.

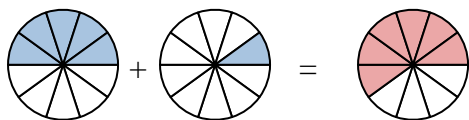
Es)



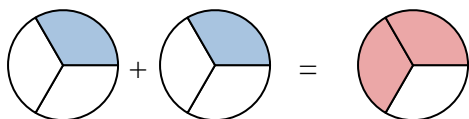
1)



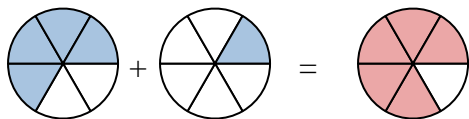
2)



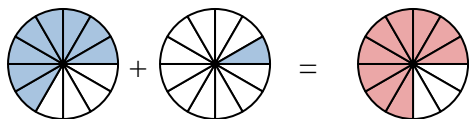
3)



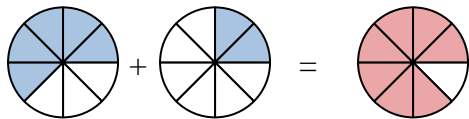
4)



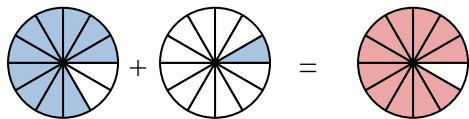
5)



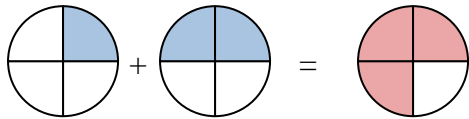
6)



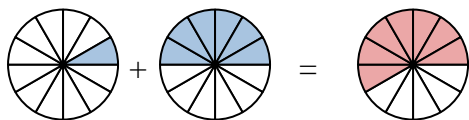
7)



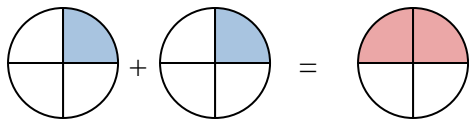
8)



9)



10)

**Risposte**

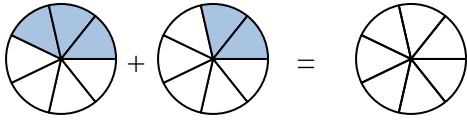
Es.	$\frac{3}{7}$	$\frac{2}{7}$	$\frac{5}{7}$
1.	$\frac{3}{5}$	$\frac{1}{5}$	$\frac{4}{5}$
2.	$\frac{5}{10}$	$\frac{1}{10}$	$\frac{6}{10}$
3.	$\frac{1}{3}$	$\frac{1}{3}$	$\frac{2}{3}$
4.	$\frac{4}{6}$	$\frac{1}{6}$	$\frac{5}{6}$
5.	$\frac{8}{12}$	$\frac{1}{12}$	$\frac{9}{12}$
6.	$\frac{5}{8}$	$\frac{2}{8}$	$\frac{7}{8}$
7.	$\frac{10}{12}$	$\frac{1}{12}$	$\frac{11}{12}$
8.	$\frac{1}{4}$	$\frac{2}{4}$	$\frac{3}{4}$
9.	$\frac{1}{12}$	$\frac{6}{12}$	$\frac{7}{12}$
10.	$\frac{1}{4}$	$\frac{1}{4}$	$\frac{2}{4}$



Scrivi numericamente la frazione rappresentata.

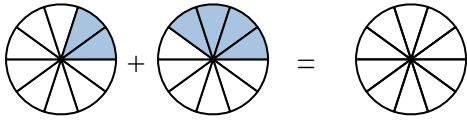
Risposte

Es)



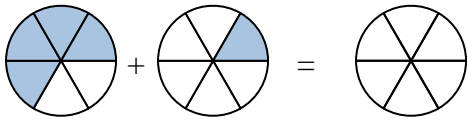
Es. $\frac{3}{7}$ $\frac{2}{7}$ $\frac{5}{7}$

1)



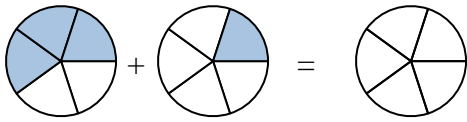
1. _____

2)



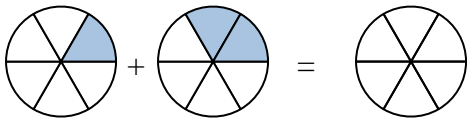
2. _____

3)



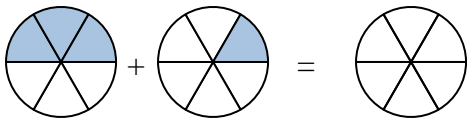
3. _____

4)



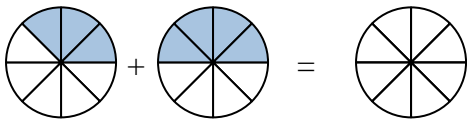
4. _____

5)



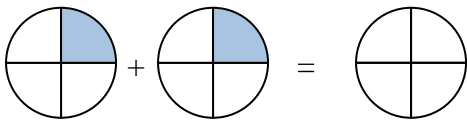
5. _____

6)



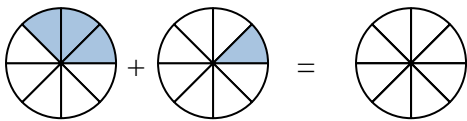
6. _____

7)



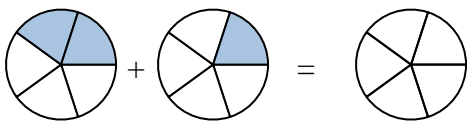
7. _____

8)



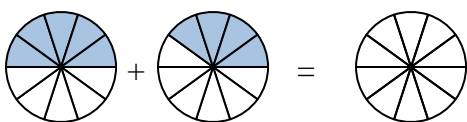
8. _____

9)



9. _____

10)

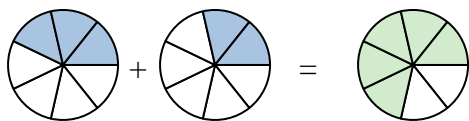


10. _____

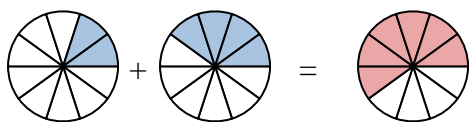


Scrivi numericamente la frazione rappresentata.

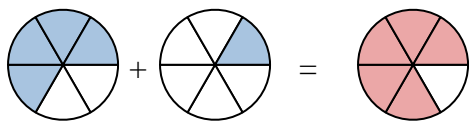
Es)



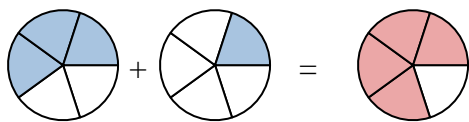
1)



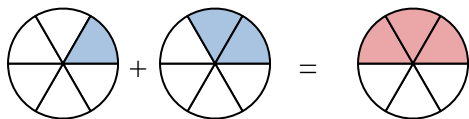
2)



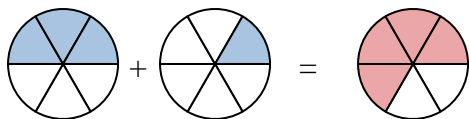
3)



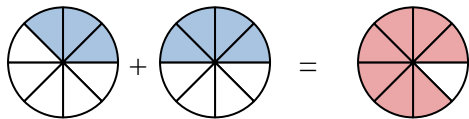
4)



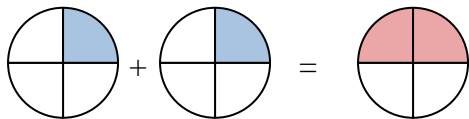
5)



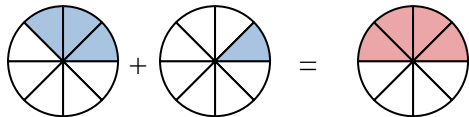
6)



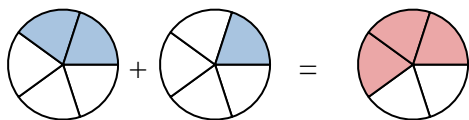
7)



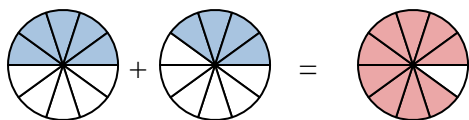
8)



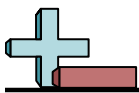
9)



10)

**Risposte**

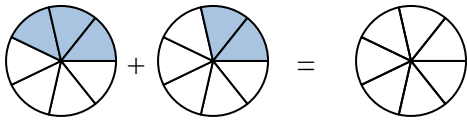
Es.	$\frac{3}{7}$	$\frac{2}{7}$	$\frac{5}{7}$
1.	$\frac{2}{10}$	$\frac{4}{10}$	$\frac{6}{10}$
2.	$\frac{4}{6}$	$\frac{1}{6}$	$\frac{5}{6}$
3.	$\frac{3}{5}$	$\frac{1}{5}$	$\frac{4}{5}$
4.	$\frac{1}{6}$	$\frac{2}{6}$	$\frac{3}{6}$
5.	$\frac{3}{6}$	$\frac{1}{6}$	$\frac{4}{6}$
6.	$\frac{3}{8}$	$\frac{4}{8}$	$\frac{7}{8}$
7.	$\frac{1}{4}$	$\frac{1}{4}$	$\frac{2}{4}$
8.	$\frac{3}{8}$	$\frac{1}{8}$	$\frac{4}{8}$
9.	$\frac{2}{5}$	$\frac{1}{5}$	$\frac{3}{5}$
10.	$\frac{5}{10}$	$\frac{4}{10}$	$\frac{9}{10}$



Scrivi numericamente la frazione rappresentata.

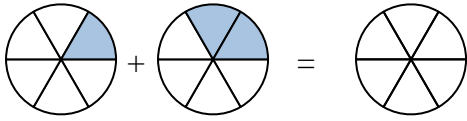
Risposte

Es)



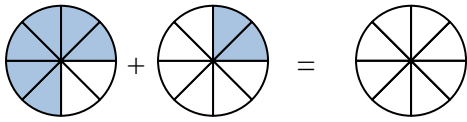
Es. $\frac{3}{7}$ $\frac{2}{7}$ $\frac{5}{7}$

1)



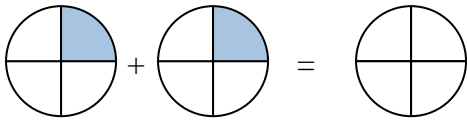
1. _____

2)



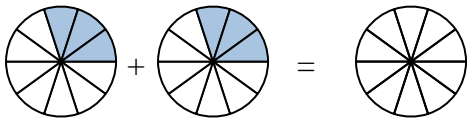
2. _____

3)



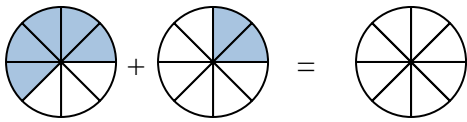
3. _____

4)



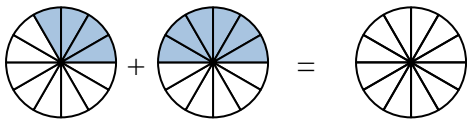
4. _____

5)



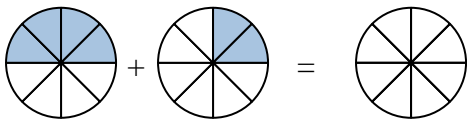
5. _____

6)



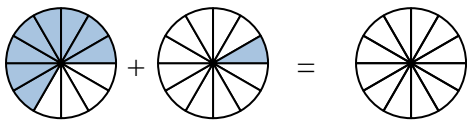
6. _____

7)



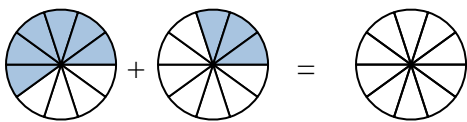
7. _____

8)



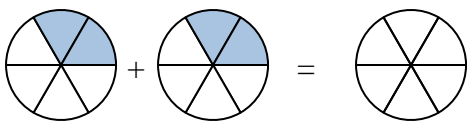
8. _____

9)



9. _____

10)

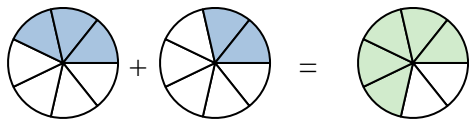


10. _____

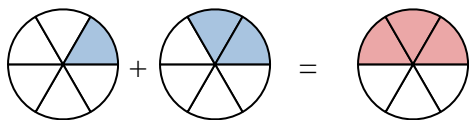


Scrivi numericamente la frazione rappresentata.

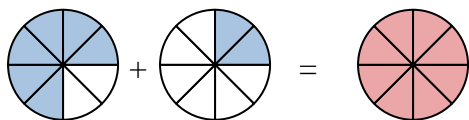
Es)



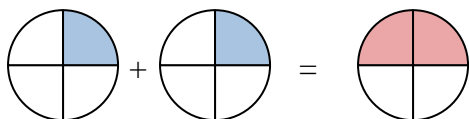
1)



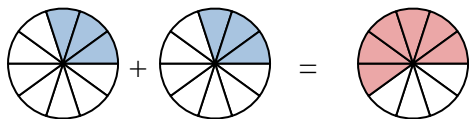
2)



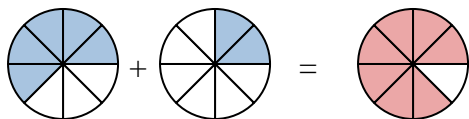
3)



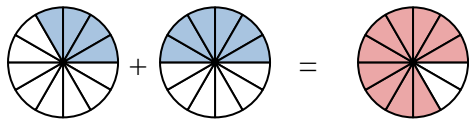
4)



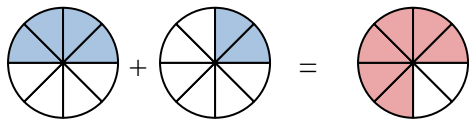
5)



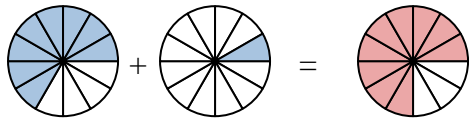
6)



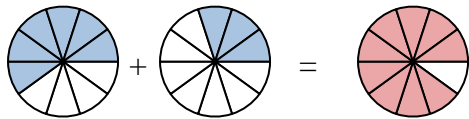
7)



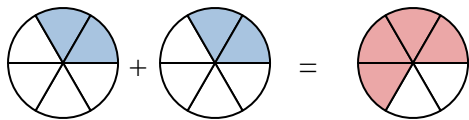
8)



9)



10)

**Risposte**Es. $\frac{3}{7}$ $\frac{2}{7}$ $\frac{5}{7}$ 1. $\frac{1}{6}$ $\frac{2}{6}$ $\frac{3}{6}$ 2. $\frac{6}{8}$ $\frac{2}{8}$ $\frac{8}{8}$ 3. $\frac{1}{4}$ $\frac{1}{4}$ $\frac{2}{4}$ 4. $\frac{3}{10}$ $\frac{3}{10}$ $\frac{6}{10}$ 5. $\frac{5}{8}$ $\frac{2}{8}$ $\frac{7}{8}$ 6. $\frac{4}{12}$ $\frac{6}{12}$ $\frac{10}{12}$ 7. $\frac{4}{8}$ $\frac{2}{8}$ $\frac{6}{8}$ 8. $\frac{8}{12}$ $\frac{1}{12}$ $\frac{9}{12}$ 9. $\frac{6}{10}$ $\frac{3}{10}$ $\frac{9}{10}$ 10. $\frac{2}{6}$ $\frac{2}{6}$ $\frac{4}{6}$