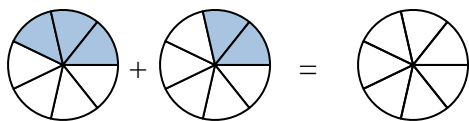


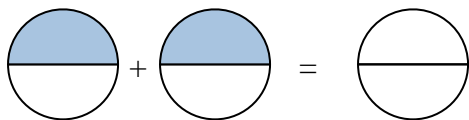


Scrivi numericamente la frazione rappresentata.

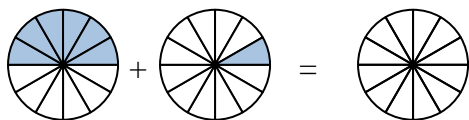
Es)



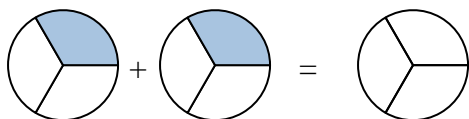
1)



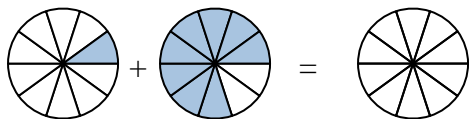
2)



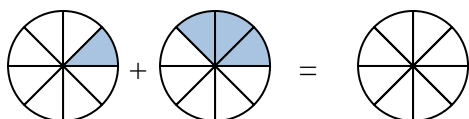
3)



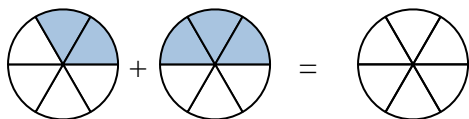
4)



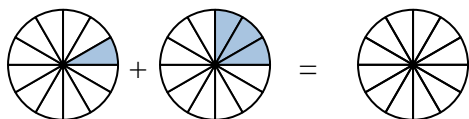
5)



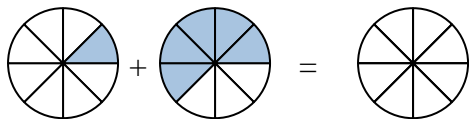
6)



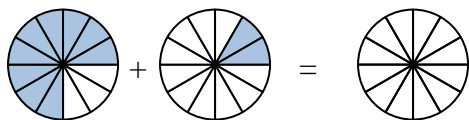
7)



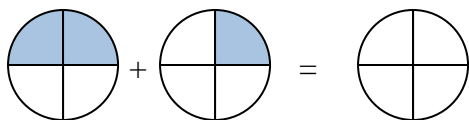
8)



9)



10)



Risposte

Es. $\frac{3}{7}$ $\frac{2}{7}$ $\frac{5}{7}$

1. _____

2. _____

3. _____

4. _____

5. _____

6. _____

7. _____

8. _____

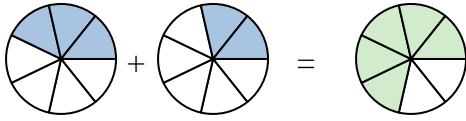
9. _____

10. _____

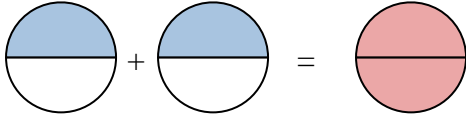


Scrivi numericamente la frazione rappresentata.

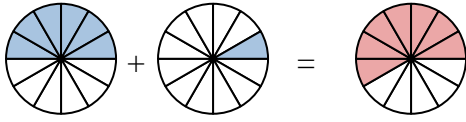
Es)



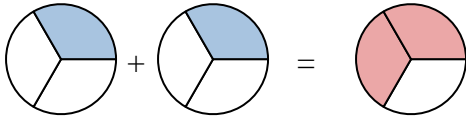
1)



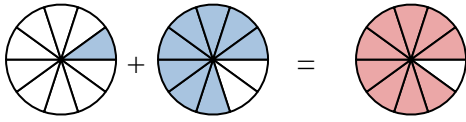
2)



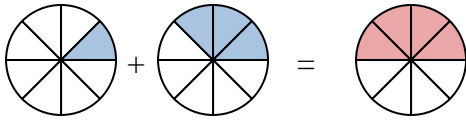
3)



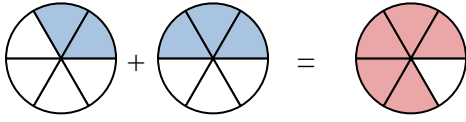
4)



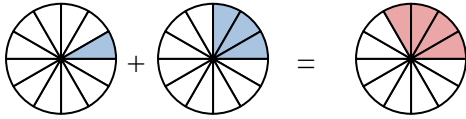
5)



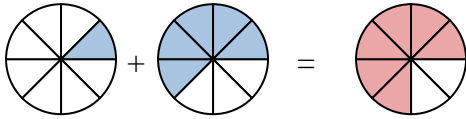
6)



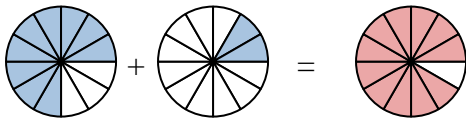
7)



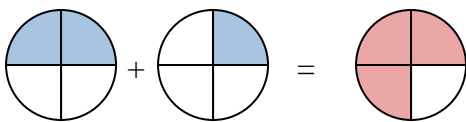
8)



9)



10)

**Risposte**

Es.	$\frac{3}{7}$	$\frac{2}{7}$	$\frac{5}{7}$
1.	$\frac{1}{2}$	$\frac{1}{2}$	$\frac{2}{2}$
2.	$\frac{6}{12}$	$\frac{1}{12}$	$\frac{7}{12}$
3.	$\frac{1}{3}$	$\frac{1}{3}$	$\frac{2}{3}$
4.	$\frac{1}{10}$	$\frac{8}{10}$	$\frac{9}{10}$
5.	$\frac{1}{8}$	$\frac{3}{8}$	$\frac{4}{8}$
6.	$\frac{2}{6}$	$\frac{3}{6}$	$\frac{5}{6}$
7.	$\frac{1}{12}$	$\frac{3}{12}$	$\frac{4}{12}$
8.	$\frac{1}{8}$	$\frac{5}{8}$	$\frac{6}{8}$
9.	$\frac{9}{12}$	$\frac{2}{12}$	$\frac{11}{12}$
10.	$\frac{2}{4}$	$\frac{1}{4}$	$\frac{3}{4}$