



Collega ogni equazione alla sua risposta corretta e scrivi la risposta.

Risposte

Es) $\frac{1}{4} + \frac{1}{4}$

Es. **I**

1) $\frac{1}{10} + \frac{1}{10} + \frac{1}{10} + \frac{1}{10} + \frac{1}{10} + \frac{1}{10} + \frac{1}{10}$



1. _____

2) $\frac{1}{5} + \frac{1}{5}$



2. _____

3) $\frac{1}{5} + \frac{1}{5} + \frac{1}{5}$




3. _____

4) $\frac{1}{8} + \frac{1}{8}$



4. _____

5) $\frac{1}{10} + \frac{1}{10} + \frac{1}{10} + \frac{1}{10} + \frac{1}{10}$



5. _____

6) $\frac{1}{3} + \frac{1}{3}$




6. _____

7) $\frac{1}{10} + \frac{1}{10} + \frac{1}{10} + \frac{1}{10}$



7. _____

8) $\frac{1}{4} + \frac{1}{4} + \frac{1}{4}$



8. _____

9) $\frac{1}{12} + \frac{1}{12}$




9. _____

10) $\frac{1}{8} + \frac{1}{8} + \frac{1}{8} + \frac{1}{8} + \frac{1}{8} + \frac{1}{8}$



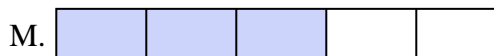
10. _____

11) $\frac{1}{12} + \frac{1}{12} + \frac{1}{12} + \frac{1}{12}$



11. _____

12) $\frac{1}{6} + \frac{1}{6} + \frac{1}{6}$



12. _____

13) $\frac{1}{5} + \frac{1}{5} + \frac{1}{5} + \frac{1}{5}$




13. _____

14) $\frac{1}{8} + \frac{1}{8} + \frac{1}{8} + \frac{1}{8}$



14. _____

15) $\frac{1}{10} + \frac{1}{10} + \frac{1}{10}$



15. _____



Collega ogni equazione alla sua risposta corretta e scrivi la risposta.


Es) $\frac{1}{4} + \frac{1}{4}$



1) $\frac{1}{10} + \frac{1}{10} + \frac{1}{10} + \frac{1}{10} + \frac{1}{10} + \frac{1}{10} + \frac{1}{10}$




2) $\frac{1}{5} + \frac{1}{5}$



3) $\frac{1}{5} + \frac{1}{5} + \frac{1}{5}$



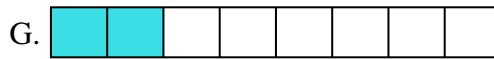
4) $\frac{1}{8} + \frac{1}{8}$




5) $\frac{1}{10} + \frac{1}{10} + \frac{1}{10} + \frac{1}{10} + \frac{1}{10}$




6) $\frac{1}{3} + \frac{1}{3}$



7) $\frac{1}{10} + \frac{1}{10} + \frac{1}{10} + \frac{1}{10}$




8) $\frac{1}{4} + \frac{1}{4} + \frac{1}{4}$



9) $\frac{1}{12} + \frac{1}{12}$




10) $\frac{1}{8} + \frac{1}{8} + \frac{1}{8} + \frac{1}{8} + \frac{1}{8} + \frac{1}{8}$



11) $\frac{1}{12} + \frac{1}{12} + \frac{1}{12} + \frac{1}{12}$



12) $\frac{1}{6} + \frac{1}{6} + \frac{1}{6}$




13) $\frac{1}{5} + \frac{1}{5} + \frac{1}{5} + \frac{1}{5}$



14) $\frac{1}{8} + \frac{1}{8} + \frac{1}{8} + \frac{1}{8}$



15) $\frac{1}{10} + \frac{1}{10} + \frac{1}{10}$

**Risposte**Es. I1. L2. K3. M4. G5. E6. N7. J8. A9. D10. C11. H12. B13. P14. O15. F