



Collega ogni equazione alla sua risposta corretta e scrivi la risposta.

Risposte

Es) $\frac{1}{4} + \frac{1}{4} + \frac{1}{4}$

Es. **N**

1) $\frac{1}{8} + \frac{1}{8} + \frac{1}{8} + \frac{1}{8} + \frac{1}{8} + \frac{1}{8} + \frac{1}{8}$



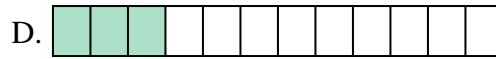
1. _____

2) $\frac{1}{10} + \frac{1}{10} + \frac{1}{10}$




2. _____

3) $\frac{1}{6} + \frac{1}{6} + \frac{1}{6} + \frac{1}{6}$




3. _____

4) $\frac{1}{10} + \frac{1}{10} + \frac{1}{10} + \frac{1}{10} + \frac{1}{10} + \frac{1}{10} + \frac{1}{10}$



4. _____

5) $\frac{1}{8} + \frac{1}{8} + \frac{1}{8}$




5. _____

6) $\frac{1}{12} + \frac{1}{12} + \frac{1}{12} + \frac{1}{12} + \frac{1}{12} + \frac{1}{12}$



6. _____

7) $\frac{1}{5} + \frac{1}{5} + \frac{1}{5}$



7. _____

8) $\frac{1}{3} + \frac{1}{3}$




8. _____

9) $\frac{1}{5} + \frac{1}{5} + \frac{1}{5} + \frac{1}{5}$



9. _____

10) $\frac{1}{12} + \frac{1}{12} + \frac{1}{12}$



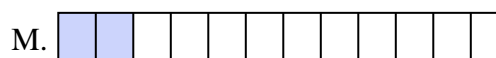
10. _____

11) $\frac{1}{10} + \frac{1}{10} + \frac{1}{10} + \frac{1}{10} + \frac{1}{10} + \frac{1}{10}$



11. _____

12) $\frac{1}{12} + \frac{1}{12}$



12. _____

13) $\frac{1}{10} + \frac{1}{10}$



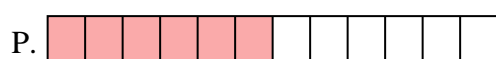
13. _____

14) $\frac{1}{6} + \frac{1}{6} + \frac{1}{6}$



14. _____

15) $\frac{1}{8} + \frac{1}{8} + \frac{1}{8} + \frac{1}{8} + \frac{1}{8} + \frac{1}{8}$




15. _____



Collega ogni equazione alla sua risposta corretta e scrivi la risposta.

Es) $\frac{1}{4} + \frac{1}{4} + \frac{1}{4}$



1) $\frac{1}{8} + \frac{1}{8} + \frac{1}{8} + \frac{1}{8} + \frac{1}{8} + \frac{1}{8} + \frac{1}{8}$




2) $\frac{1}{10} + \frac{1}{10} + \frac{1}{10}$



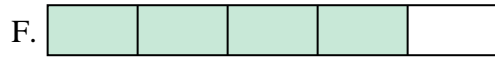
3) $\frac{1}{6} + \frac{1}{6} + \frac{1}{6} + \frac{1}{6}$



4) $\frac{1}{10} + \frac{1}{10} + \frac{1}{10} + \frac{1}{10} + \frac{1}{10} + \frac{1}{10} + \frac{1}{10}$



5) $\frac{1}{8} + \frac{1}{8} + \frac{1}{8}$



6) $\frac{1}{12} + \frac{1}{12} + \frac{1}{12} + \frac{1}{12} + \frac{1}{12} + \frac{1}{12}$




7) $\frac{1}{5} + \frac{1}{5} + \frac{1}{5}$




8) $\frac{1}{3} + \frac{1}{3}$



9) $\frac{1}{5} + \frac{1}{5} + \frac{1}{5} + \frac{1}{5}$



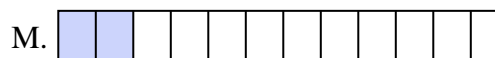
10) $\frac{1}{12} + \frac{1}{12} + \frac{1}{12}$



11) $\frac{1}{10} + \frac{1}{10} + \frac{1}{10} + \frac{1}{10} + \frac{1}{10} + \frac{1}{10}$




12) $\frac{1}{12} + \frac{1}{12}$




13) $\frac{1}{10} + \frac{1}{10}$



14) $\frac{1}{6} + \frac{1}{6} + \frac{1}{6}$



15) $\frac{1}{8} + \frac{1}{8} + \frac{1}{8} + \frac{1}{8} + \frac{1}{8} + \frac{1}{8}$

**Risposte**Es. N 1. J 2. G 3. E 4. K 5. O 6. P 7. H 8. C 9. F 10. D 11. I 12. M 13. B 14. L 15. A