



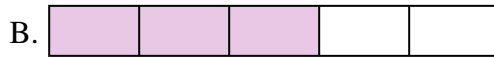
Collega ogni equazione alla sua risposta corretta e scrivi la risposta.

Risposte

Es) $\frac{1}{10} + \frac{1}{10}$



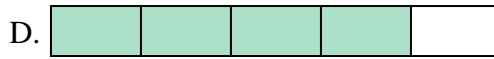
1) $\frac{1}{5} + \frac{1}{5} + \frac{1}{5}$




2) $\frac{1}{10} + \frac{1}{10} + \frac{1}{10} + \frac{1}{10} + \frac{1}{10} + \frac{1}{10}$



3) $\frac{1}{8} + \frac{1}{8} + \frac{1}{8}$



4) $\frac{1}{6} + \frac{1}{6} + \frac{1}{6} + \frac{1}{6} + \frac{1}{6}$



5) $\frac{1}{4} + \frac{1}{4}$




6) $\frac{1}{3} + \frac{1}{3}$



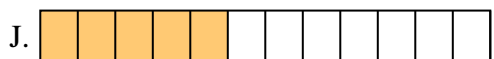
7) $\frac{1}{12} + \frac{1}{12} + \frac{1}{12} + \frac{1}{12} + \frac{1}{12}$



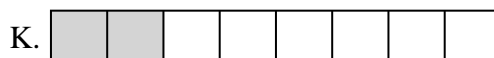
8) $\frac{1}{10} + \frac{1}{10} + \frac{1}{10} + \frac{1}{10} + \frac{1}{10} + \frac{1}{10} + \frac{1}{10}$



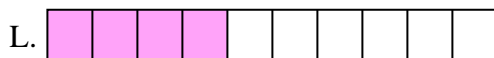
9) $\frac{1}{8} + \frac{1}{8}$




10) $\frac{1}{10} + \frac{1}{10} + \frac{1}{10} + \frac{1}{10}$



11) $\frac{1}{10} + \frac{1}{10} + \frac{1}{10} + \frac{1}{10} + \frac{1}{10}$




12) $\frac{1}{5} + \frac{1}{5} + \frac{1}{5} + \frac{1}{5}$




13) $\frac{1}{4} + \frac{1}{4} + \frac{1}{4}$



14) $\frac{1}{6} + \frac{1}{6} + \frac{1}{6} + \frac{1}{6}$



15) $\frac{1}{12} + \frac{1}{12} + \frac{1}{12} + \frac{1}{12}$

Es. **G**

1. _____

2. _____

3. _____

4. _____

5. _____

6. _____

7. _____

8. _____

9. _____

10. _____

11. _____

12. _____

13. _____

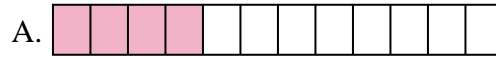
14. _____

15. _____




Collega ogni equazione alla sua risposta corretta e scrivi la risposta.

Es) $\frac{1}{10} + \frac{1}{10}$



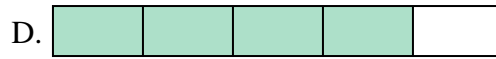
1) $\frac{1}{5} + \frac{1}{5} + \frac{1}{5}$



2) $\frac{1}{10} + \frac{1}{10} + \frac{1}{10} + \frac{1}{10} + \frac{1}{10} + \frac{1}{10}$




3) $\frac{1}{8} + \frac{1}{8} + \frac{1}{8}$



4) $\frac{1}{6} + \frac{1}{6} + \frac{1}{6} + \frac{1}{6} + \frac{1}{6}$



5) $\frac{1}{4} + \frac{1}{4}$




6) $\frac{1}{3} + \frac{1}{3}$



7) $\frac{1}{12} + \frac{1}{12} + \frac{1}{12} + \frac{1}{12} + \frac{1}{12}$




8) $\frac{1}{10} + \frac{1}{10} + \frac{1}{10} + \frac{1}{10} + \frac{1}{10} + \frac{1}{10} + \frac{1}{10}$



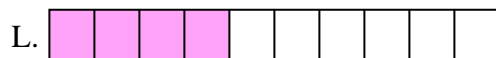
9) $\frac{1}{8} + \frac{1}{8}$




10) $\frac{1}{10} + \frac{1}{10} + \frac{1}{10} + \frac{1}{10}$



11) $\frac{1}{10} + \frac{1}{10} + \frac{1}{10} + \frac{1}{10} + \frac{1}{10}$




12) $\frac{1}{5} + \frac{1}{5} + \frac{1}{5} + \frac{1}{5}$




13) $\frac{1}{4} + \frac{1}{4} + \frac{1}{4}$



14) $\frac{1}{6} + \frac{1}{6} + \frac{1}{6} + \frac{1}{6}$



15) $\frac{1}{12} + \frac{1}{12} + \frac{1}{12} + \frac{1}{12}$

**Risposte**Es. **G** 1. **B** 2. **E** 3. **N** 4. **I** 5. **C** 6. **H** 7. **J** 8. **O** 9. **K** 10. **L** 11. **M** 12. **D** 13. **F** 14. **P** 15. **A**