



Collega ogni equazione alla sua risposta corretta e scrivi la risposta.

**Risposte**


Es)  $\frac{1}{12} + \frac{1}{12} + \frac{1}{12} + \frac{1}{12} + \frac{1}{12} + \frac{1}{12}$



1)  $\frac{1}{6} + \frac{1}{6} + \frac{1}{6}$



2)  $\frac{1}{8} + \frac{1}{8} + \frac{1}{8} + \frac{1}{8} + \frac{1}{8} + \frac{1}{8}$




3)  $\frac{1}{6} + \frac{1}{6} + \frac{1}{6} + \frac{1}{6}$



4)  $\frac{1}{4} + \frac{1}{4} + \frac{1}{4}$



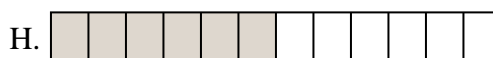
5)  $\frac{1}{12} + \frac{1}{12} + \frac{1}{12} + \frac{1}{12}$



6)  $\frac{1}{5} + \frac{1}{5}$



7)  $\frac{1}{8} + \frac{1}{8}$



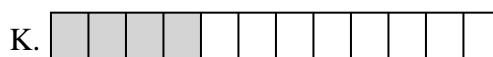
8)  $\frac{1}{3} + \frac{1}{3}$



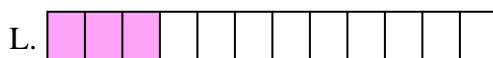
9)  $\frac{1}{5} + \frac{1}{5} + \frac{1}{5} + \frac{1}{5}$




10)  $\frac{1}{4} + \frac{1}{4}$



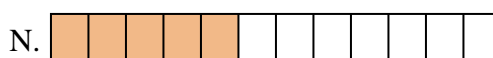
11)  $\frac{1}{10} + \frac{1}{10} + \frac{1}{10} + \frac{1}{10} + \frac{1}{10}$




12)  $\frac{1}{12} + \frac{1}{12} + \frac{1}{12} + \frac{1}{12} + \frac{1}{12}$



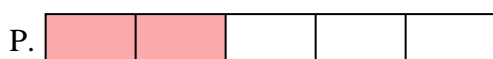
13)  $\frac{1}{6} + \frac{1}{6} + \frac{1}{6} + \frac{1}{6} + \frac{1}{6}$



14)  $\frac{1}{12} + \frac{1}{12} + \frac{1}{12}$



15)  $\frac{1}{8} + \frac{1}{8} + \frac{1}{8} + \frac{1}{8} + \frac{1}{8} + \frac{1}{8} + \frac{1}{8}$

Es. **H**

1. \_\_\_\_\_

2. \_\_\_\_\_

3. \_\_\_\_\_

4. \_\_\_\_\_

5. \_\_\_\_\_

6. \_\_\_\_\_

7. \_\_\_\_\_

8. \_\_\_\_\_

9. \_\_\_\_\_

10. \_\_\_\_\_

11. \_\_\_\_\_

12. \_\_\_\_\_

13. \_\_\_\_\_

14. \_\_\_\_\_

15. \_\_\_\_\_



Collega ogni equazione alla sua risposta corretta e scrivi la risposta.


Es)  $\frac{1}{12} + \frac{1}{12} + \frac{1}{12} + \frac{1}{12} + \frac{1}{12} + \frac{1}{12}$




1)  $\frac{1}{6} + \frac{1}{6} + \frac{1}{6}$




2)  $\frac{1}{8} + \frac{1}{8} + \frac{1}{8} + \frac{1}{8} + \frac{1}{8} + \frac{1}{8}$




3)  $\frac{1}{6} + \frac{1}{6} + \frac{1}{6} + \frac{1}{6}$



4)  $\frac{1}{4} + \frac{1}{4} + \frac{1}{4}$



5)  $\frac{1}{12} + \frac{1}{12} + \frac{1}{12} + \frac{1}{12}$



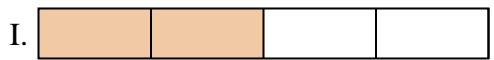
6)  $\frac{1}{5} + \frac{1}{5}$




7)  $\frac{1}{8} + \frac{1}{8}$



8)  $\frac{1}{3} + \frac{1}{3}$



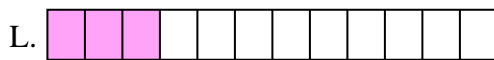
9)  $\frac{1}{5} + \frac{1}{5} + \frac{1}{5} + \frac{1}{5}$




10)  $\frac{1}{4} + \frac{1}{4}$



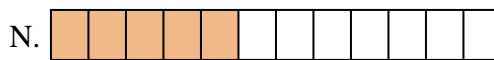
11)  $\frac{1}{10} + \frac{1}{10} + \frac{1}{10} + \frac{1}{10} + \frac{1}{10}$



12)  $\frac{1}{12} + \frac{1}{12} + \frac{1}{12} + \frac{1}{12} + \frac{1}{12}$



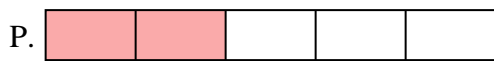
13)  $\frac{1}{6} + \frac{1}{6} + \frac{1}{6} + \frac{1}{6} + \frac{1}{6}$



14)  $\frac{1}{12} + \frac{1}{12} + \frac{1}{12}$



15)  $\frac{1}{8} + \frac{1}{8} + \frac{1}{8} + \frac{1}{8} + \frac{1}{8} + \frac{1}{8} + \frac{1}{8}$

**Risposte**Es.     **H**    1.     **A**    2.     **O**    3.     **J**    4.     **E**    5.     **K**    6.     **P**    7.     **F**    8.     **D**    9.     **M**    10.     **I**    11.     **C**    12.     **N**    13.     **G**    14.     **L**    15.     **B**