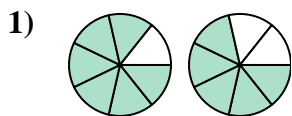


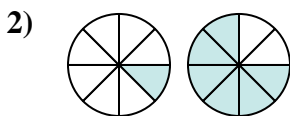


Determina quale lettera esprime correttamente la relazione tra i grafici.

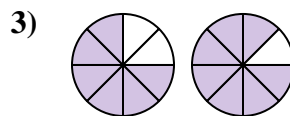
Risposte



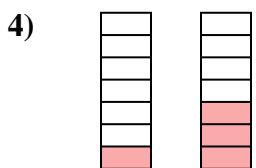
- A. $\frac{6}{7} > \frac{5}{7}$
- B. $\frac{6}{1} < \frac{5}{2}$
- C. $\frac{7}{6} > \frac{7}{5}$
- D. $\frac{1}{6} > \frac{2}{5}$



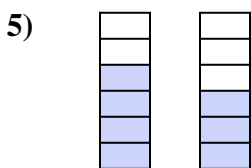
- A. $\frac{1}{7} < \frac{6}{2}$
- B. $\frac{1}{8} < \frac{6}{8}$
- C. $\frac{7}{1} > \frac{2}{6}$
- D. $\frac{1}{7} > \frac{6}{2}$



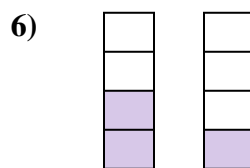
- A. $\frac{6}{2} > \frac{7}{1}$
- B. $\frac{6}{2} < \frac{7}{1}$
- C. $\frac{6}{8} < \frac{7}{8}$
- D. $\frac{6}{8} > \frac{7}{8}$



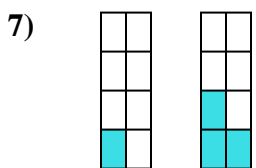
- A. $\frac{1}{7} < \frac{3}{7}$
- B. $\frac{1}{6} < \frac{3}{4}$
- C. $\frac{6}{1} > \frac{4}{3}$
- D. $\frac{1}{6} > \frac{3}{4}$



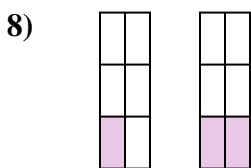
- A. $\frac{6}{4} > \frac{6}{3}$
- B. $\frac{4}{6} < \frac{3}{6}$
- C. $\frac{2}{4} < \frac{3}{3}$
- D. $\frac{4}{6} > \frac{3}{6}$



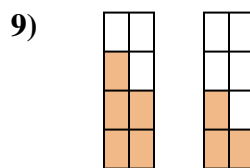
- A. $\frac{2}{4} > \frac{1}{4}$
- B. $\frac{4}{2} > \frac{4}{1}$
- C. $\frac{2}{2} < \frac{1}{3}$
- D. $\frac{2}{2} > \frac{3}{1}$



- A. $\frac{7}{1} > \frac{5}{3}$
- B. $\frac{8}{1} > \frac{8}{3}$
- C. $\frac{1}{8} > \frac{3}{8}$
- D. $\frac{1}{8} < \frac{3}{8}$



- A. $\frac{5}{1} < \frac{4}{2}$
- B. $\frac{1}{6} > \frac{2}{6}$
- C. $\frac{1}{6} < \frac{2}{6}$
- D. $\frac{5}{1} > \frac{4}{2}$

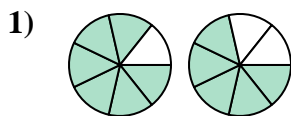


- A. $\frac{5}{3} < \frac{3}{5}$
- B. $\frac{5}{3} > \frac{3}{5}$
- C. $\frac{5}{8} > \frac{3}{8}$
- D. $\frac{3}{5} < \frac{5}{3}$

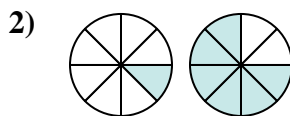
- 1. _____
- 2. _____
- 3. _____
- 4. _____
- 5. _____
- 6. _____
- 7. _____
- 8. _____
- 9. _____



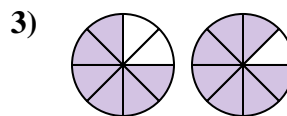
Determina quale lettera esprime correttamente la relazione tra i grafici.



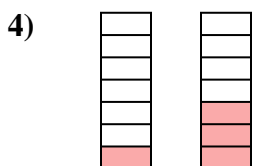
- A. $\frac{6}{7} > \frac{5}{7}$
 B. $\frac{6}{1} < \frac{5}{2}$
 C. $\frac{7}{6} > \frac{7}{5}$
 D. $\frac{1}{6} > \frac{2}{5}$



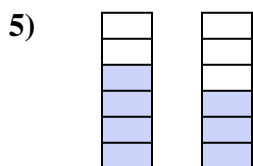
- A. $\frac{1}{7} < \frac{6}{2}$
 B. $\frac{1}{8} < \frac{6}{8}$
 C. $\frac{7}{1} > \frac{2}{6}$
 D. $\frac{1}{7} > \frac{6}{2}$



- A. $\frac{6}{2} > \frac{7}{1}$
 B. $\frac{6}{2} < \frac{7}{1}$
 C. $\frac{6}{8} < \frac{7}{8}$
 D. $\frac{6}{8} > \frac{7}{8}$



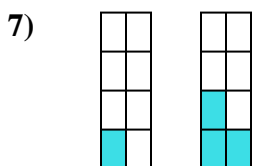
- A. $\frac{1}{7} < \frac{3}{7}$
 B. $\frac{1}{6} < \frac{3}{4}$
 C. $\frac{6}{1} > \frac{4}{3}$
 D. $\frac{1}{6} > \frac{3}{4}$



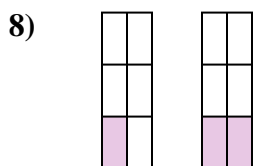
- A. $\frac{6}{4} > \frac{6}{3}$
 B. $\frac{4}{6} < \frac{3}{6}$
 C. $\frac{2}{4} < \frac{3}{3}$
 D. $\frac{4}{6} > \frac{3}{6}$



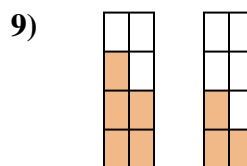
- A. $\frac{2}{4} > \frac{1}{4}$
 B. $\frac{4}{2} > \frac{4}{1}$
 C. $\frac{2}{2} < \frac{1}{3}$
 D. $\frac{2}{2} > \frac{3}{1}$



- A. $\frac{7}{1} > \frac{5}{3}$
 B. $\frac{8}{1} > \frac{8}{3}$
 C. $\frac{1}{8} > \frac{3}{8}$
 D. $\frac{1}{8} < \frac{3}{8}$



- A. $\frac{5}{1} < \frac{4}{2}$
 B. $\frac{1}{6} > \frac{2}{6}$
 C. $\frac{1}{6} < \frac{2}{6}$
 D. $\frac{5}{1} > \frac{4}{2}$



- A. $\frac{5}{3} < \frac{3}{5}$
 B. $\frac{5}{3} > \frac{3}{5}$
 C. $\frac{5}{8} > \frac{3}{8}$
 D. $\frac{3}{5} < \frac{5}{3}$

Risposte1. **A**2. **B**3. **C**4. **A**5. **D**6. **A**7. **D**8. **C**9. **C**