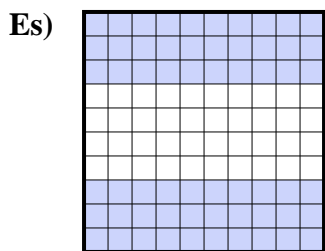
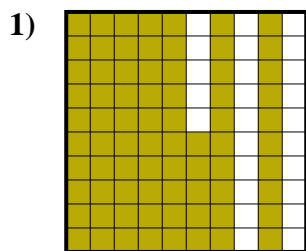




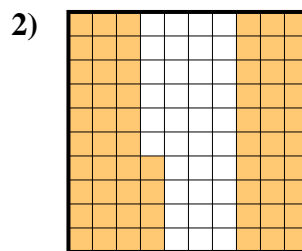
Determina il valore sotto forma di frazione, decimale e percentuale.



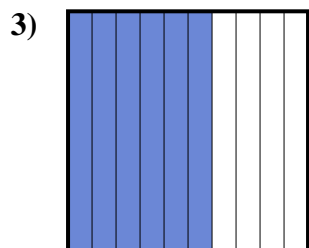
Frazione $\frac{60}{100}$
 Decimale $0,60$
 Percentuale 60



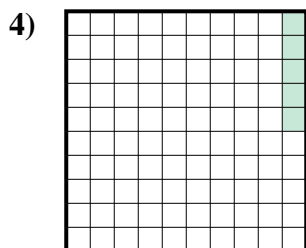
Frazione $\frac{75}{100}$
 Decimale $0,75$
 Percentuale 75



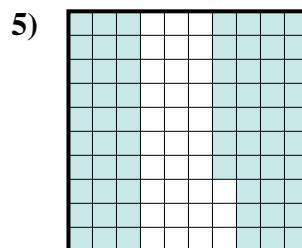
Frazione $\frac{64}{100}$
 Decimale $0,64$
 Percentuale 64



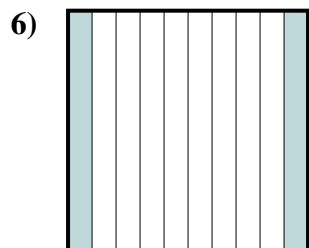
Frazione $\frac{6}{10}$
 Decimale $0,6$
 Percentuale 60



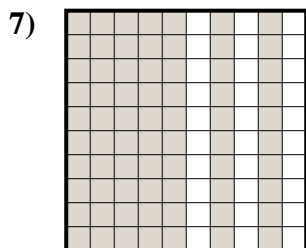
Frazione $\frac{5}{100}$
 Decimale $0,05$
 Percentuale 5



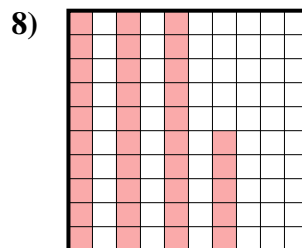
Frazione $\frac{67}{100}$
 Decimale $0,67$
 Percentuale 67




Frazione $\frac{2}{10}$
 Decimale $0,2$
 Percentuale 20



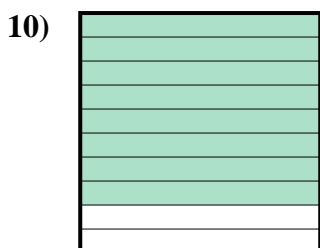
Frazione $\frac{70}{100}$
 Decimale $0,70$
 Percentuale 70



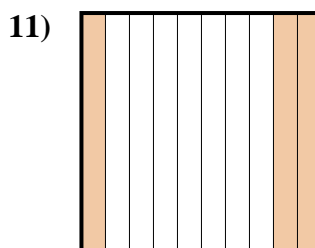
Frazione $\frac{35}{100}$
 Decimale $0,35$
 Percentuale 35



Frazione $\frac{9}{10}$
 Decimale $0,9$
 Percentuale 90



Frazione $\frac{8}{10}$
 Decimale $0,8$
 Percentuale 80



Frazione $\frac{3}{10}$
 Decimale $0,3$
 Percentuale 30

Risposte

- Es. $\frac{60}{100}$ **0,60** **60%**
 1. $\frac{75}{100}$ **0,75** **75%**
 2. $\frac{64}{100}$ **0,64** **64%**
 3. $\frac{6}{10}$ **0,6** **60%**
 4. $\frac{5}{100}$ **0,05** **5%**
 5. $\frac{67}{100}$ **0,67** **67%**
 6. $\frac{2}{10}$ **0,2** **20%**
 7. $\frac{70}{100}$ **0,70** **70%**
 8. $\frac{35}{100}$ **0,35** **35%**
 9. $\frac{9}{10}$ **0,9** **90%**
 10. $\frac{8}{10}$ **0,8** **80%**
 11. $\frac{3}{10}$ **0,3** **30%**