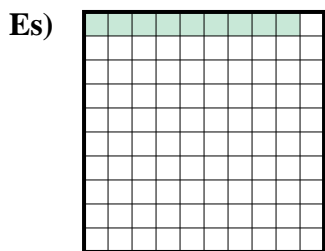
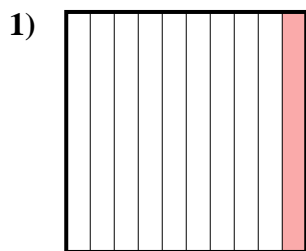




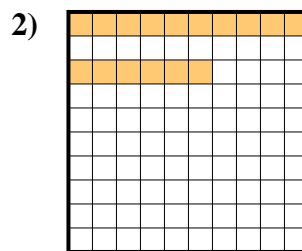
Determina il valore sotto forma di frazione, decimale e percentuale.



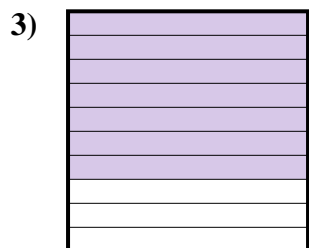
Frazione $\frac{9}{100}$
 Decimale $0,09$
 Percentuale 9



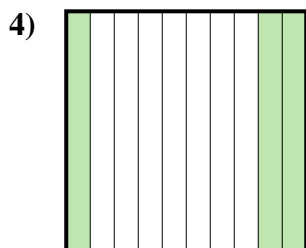
Frazione $\frac{1}{10}$
 Decimale $0,1$
 Percentuale 10



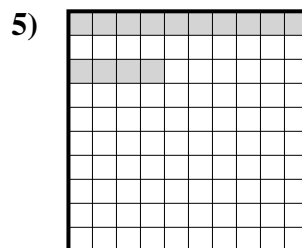
Frazione $\frac{16}{100}$
 Decimale $0,16$
 Percentuale 16



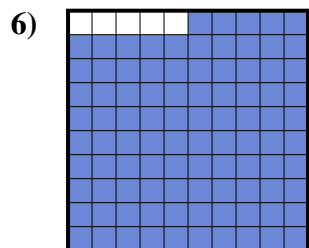
Frazione $\frac{7}{10}$
 Decimale $0,7$
 Percentuale 70



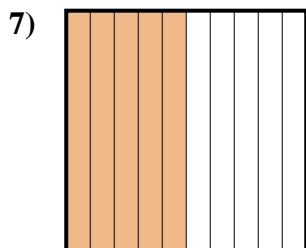
Frazione $\frac{3}{10}$
 Decimale $0,3$
 Percentuale 30



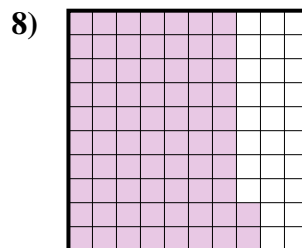
Frazione $\frac{14}{100}$
 Decimale $0,14$
 Percentuale 14




Frazione $\frac{95}{100}$
 Decimale $0,95$
 Percentuale 95



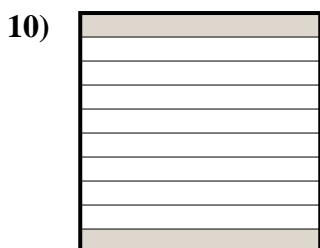
Frazione $\frac{5}{10}$
 Decimale $0,5$
 Percentuale 50



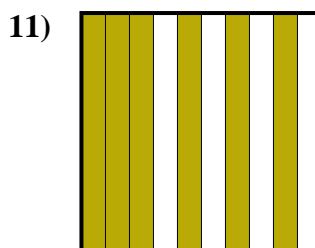
Frazione $\frac{72}{100}$
 Decimale $0,72$
 Percentuale 72



Frazione $\frac{4}{10}$
 Decimale $0,4$
 Percentuale 40



Frazione $\frac{2}{10}$
 Decimale $0,2$
 Percentuale 20



Frazione $\frac{6}{10}$
 Decimale $0,6$
 Percentuale 60

Risposte

Es.	$\frac{9}{100}$	0,09	9%
1.	$\frac{1}{10}$	0,1	10%
2.	$\frac{16}{100}$	0,16	16%
3.	$\frac{7}{10}$	0,7	70%
4.	$\frac{3}{10}$	0,3	30%
5.	$\frac{14}{100}$	0,14	14%
6.	$\frac{95}{100}$	0,95	95%
7.	$\frac{5}{10}$	0,5	50%
8.	$\frac{72}{100}$	0,72	72%
9.	$\frac{4}{10}$	0,4	40%
10.	$\frac{2}{10}$	0,2	20%
11.	$\frac{6}{10}$	0,6	60%