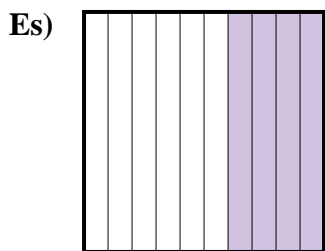
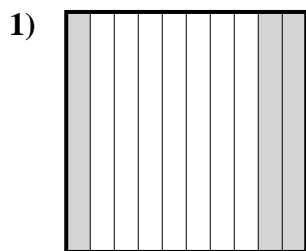




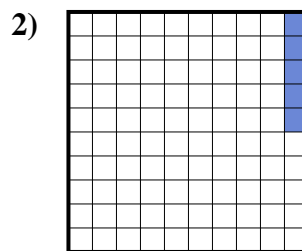
Determina il valore sotto forma di frazione, decimale e percentuale.



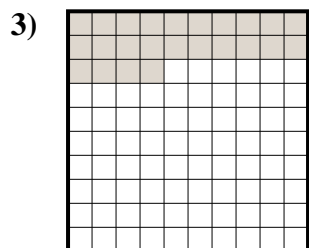
Frazione $\frac{4}{10}$
 Decimale 0,4
 Percentuale 40



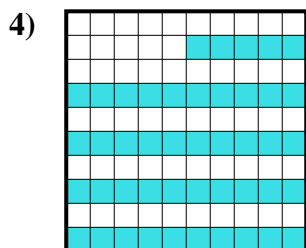
Frazione _____
 Decimale _____
 Percentuale _____



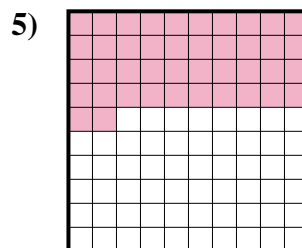
Frazione _____
 Decimale _____
 Percentuale _____




Frazione _____
 Decimale _____
 Percentuale _____




Frazione _____
 Decimale _____
 Percentuale _____



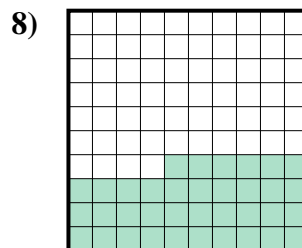
Frazione _____
 Decimale _____
 Percentuale _____



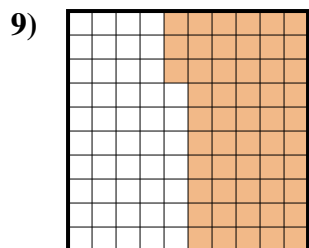
Frazione _____
 Decimale _____
 Percentuale _____



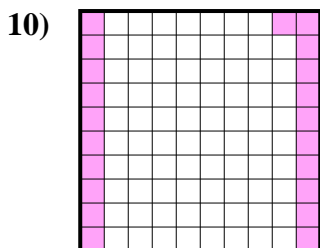
Frazione _____
 Decimale _____
 Percentuale _____



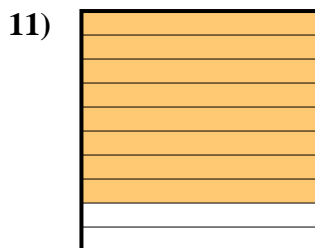
Frazione _____
 Decimale _____
 Percentuale _____



Frazione _____
 Decimale _____
 Percentuale _____



Frazione _____
 Decimale _____
 Percentuale _____



Frazione _____
 Decimale _____
 Percentuale _____

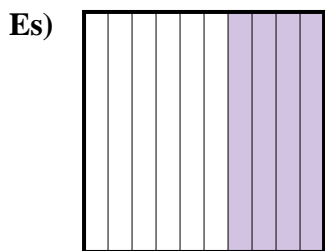
Risposte

Es. $\frac{4}{10}$ 0,4 40%

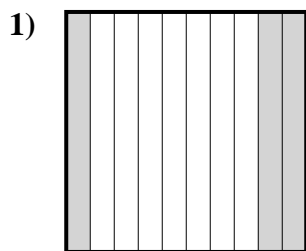
- 1. _____
- 2. _____
- 3. _____
- 4. _____
- 5. _____
- 6. _____
- 7. _____
- 8. _____
- 9. _____
- 10. _____
- 11. _____



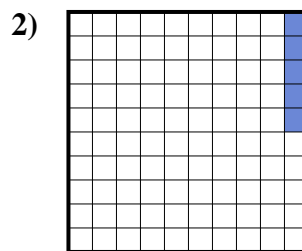
Determina il valore sotto forma di frazione, decimale e percentuale.



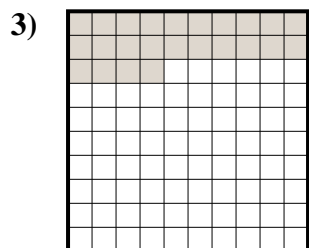
Frazione $\frac{4}{10}$
 Decimale $0,4$
 Percentuale 40



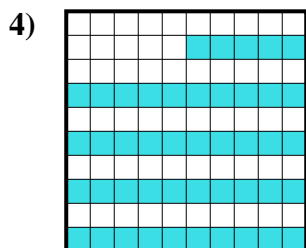
Frazione $\frac{3}{10}$
 Decimale $0,3$
 Percentuale 30



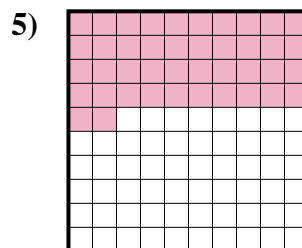
Frazione $\frac{5}{100}$
 Decimale $0,05$
 Percentuale 5




Frazione $\frac{24}{100}$
 Decimale $0,24$
 Percentuale 24




Frazione $\frac{45}{100}$
 Decimale $0,45$
 Percentuale 45



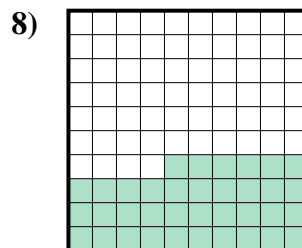
Frazione $\frac{42}{100}$
 Decimale $0,42$
 Percentuale 42



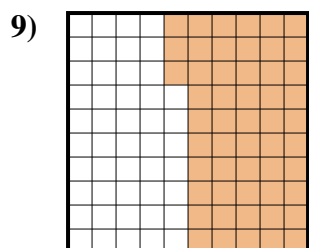
Frazione $\frac{2}{10}$
 Decimale $0,2$
 Percentuale 20



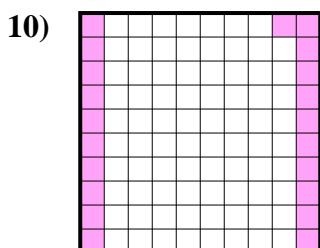
Frazione $\frac{1}{10}$
 Decimale $0,1$
 Percentuale 10



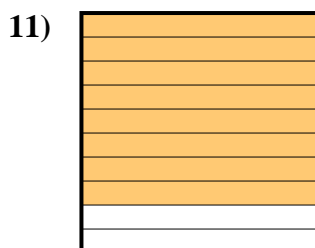
Frazione $\frac{36}{100}$
 Decimale $0,36$
 Percentuale 36



Frazione $\frac{53}{100}$
 Decimale $0,53$
 Percentuale 53



Frazione $\frac{21}{100}$
 Decimale $0,21$
 Percentuale 21



Frazione $\frac{8}{10}$
 Decimale $0,8$
 Percentuale 80

Risposte

- Es. $\frac{4}{10}$ $0,4$ 40%
 1. $\frac{3}{10}$ $0,3$ 30%
 2. $\frac{5}{100}$ $0,05$ 5%
 3. $\frac{24}{100}$ $0,24$ 24%
 4. $\frac{45}{100}$ $0,45$ 45%
 5. $\frac{42}{100}$ $0,42$ 42%
 6. $\frac{2}{10}$ $0,2$ 20%
 7. $\frac{1}{10}$ $0,1$ 10%
 8. $\frac{36}{100}$ $0,36$ 36%
 9. $\frac{53}{100}$ $0,53$ 53%
 10. $\frac{21}{100}$ $0,21$ 21%
 11. $\frac{8}{10}$ $0,8$ 80%