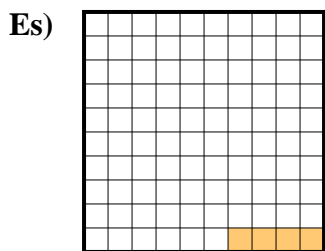


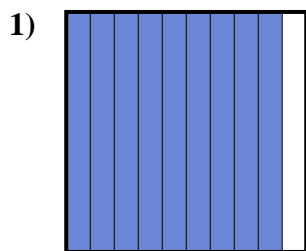





Determina il valore sotto forma di frazione, decimale e percentuale.




Frazione  $\frac{4}{100}$   
 Decimale  $0,04$   
 Percentuale  $4$




Frazione  $\frac{9}{10}$   
 Decimale  $0,9$   
 Percentuale  $90$



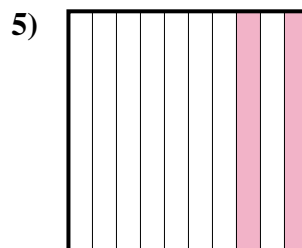
Frazione  $\frac{8}{10}$   
 Decimale  $0,8$   
 Percentuale  $80$



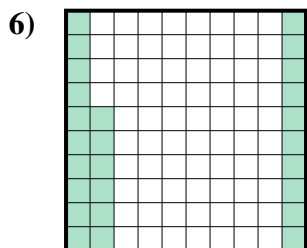
Frazione  $\frac{3}{10}$   
 Decimale  $0,3$   
 Percentuale  $30$



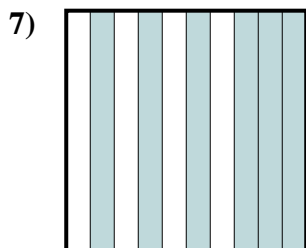
Frazione  $\frac{24}{100}$   
 Decimale  $0,24$   
 Percentuale  $24$



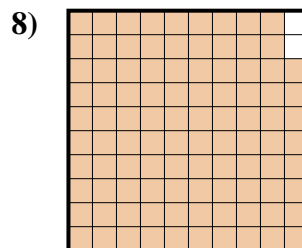
Frazione  $\frac{2}{10}$   
 Decimale  $0,2$   
 Percentuale  $20$



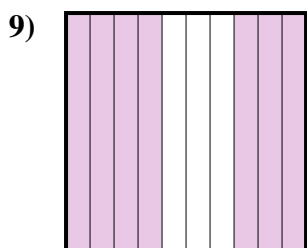
Frazione  $\frac{26}{100}$   
 Decimale  $0,26$   
 Percentuale  $26$



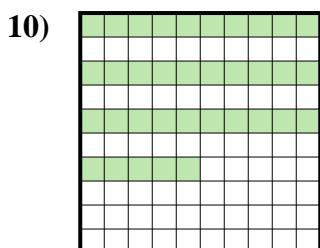
Frazione  $\frac{6}{10}$   
 Decimale  $0,6$   
 Percentuale  $60$



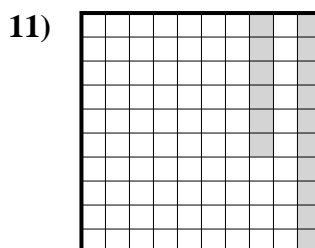
Frazione  $\frac{98}{100}$   
 Decimale  $0,98$   
 Percentuale  $98$



Frazione  $\frac{7}{10}$   
 Decimale  $0,7$   
 Percentuale  $70$



Frazione  $\frac{35}{100}$   
 Decimale  $0,35$   
 Percentuale  $35$



Frazione  $\frac{16}{100}$   
 Decimale  $0,16$   
 Percentuale  $16$

**Risposte**

Es.	$\frac{4}{100}$	<b>0,04</b>	<b>4%</b>
1.	$\frac{9}{10}$	<b>0,9</b>	<b>90%</b>
2.	$\frac{8}{10}$	<b>0,8</b>	<b>80%</b>
3.	$\frac{3}{10}$	<b>0,3</b>	<b>30%</b>
4.	$\frac{24}{100}$	<b>0,24</b>	<b>24%</b>
5.	$\frac{2}{10}$	<b>0,2</b>	<b>20%</b>
6.	$\frac{26}{100}$	<b>0,26</b>	<b>26%</b>
7.	$\frac{6}{10}$	<b>0,6</b>	<b>60%</b>
8.	$\frac{98}{100}$	<b>0,98</b>	<b>98%</b>
9.	$\frac{7}{10}$	<b>0,7</b>	<b>70%</b>
10.	$\frac{35}{100}$	<b>0,35</b>	<b>35%</b>
11.	$\frac{16}{100}$	<b>0,16</b>	<b>16%</b>