





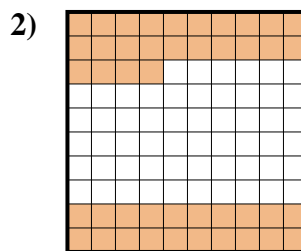
Determina il valore sotto forma di frazione, decimale e percentuale.



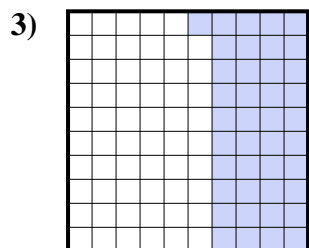
Frazione $\frac{9}{10}$
 Decimale $0,9$
 Percentuale 90




Frazione $\frac{2}{10}$
 Decimale $0,2$
 Percentuale 20



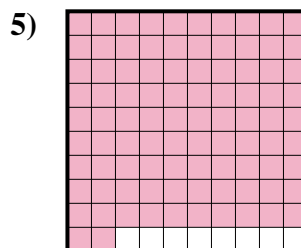
Frazione $\frac{44}{100}$
 Decimale $0,44$
 Percentuale 44



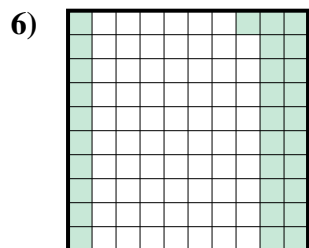
Frazione $\frac{41}{100}$
 Decimale $0,41$
 Percentuale 41



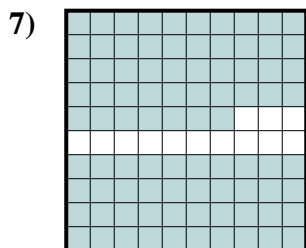
Frazione $\frac{6}{10}$
 Decimale $0,6$
 Percentuale 60



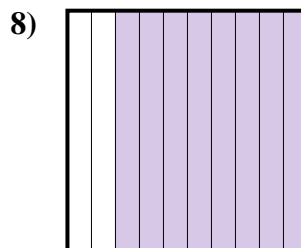
Frazione $\frac{92}{100}$
 Decimale $0,92$
 Percentuale 92



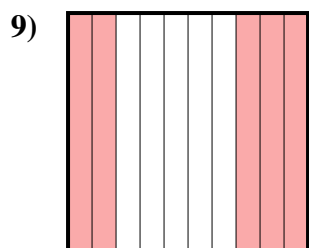
Frazione $\frac{31}{100}$
 Decimale $0,31$
 Percentuale 31



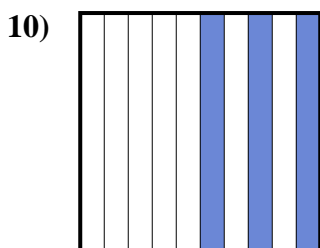
Frazione $\frac{87}{100}$
 Decimale $0,87$
 Percentuale 87



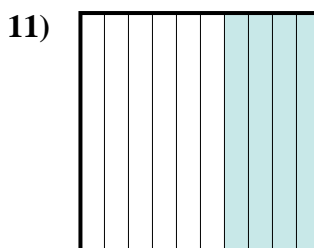
Frazione $\frac{8}{10}$
 Decimale $0,8$
 Percentuale 80



Frazione $\frac{5}{10}$
 Decimale $0,5$
 Percentuale 50



Frazione $\frac{3}{10}$
 Decimale $0,3$
 Percentuale 30



Frazione $\frac{4}{10}$
 Decimale $0,4$
 Percentuale 40

Risposte

Es.	$\frac{9}{10}$	0,9	90%
1.	$\frac{2}{10}$	0,2	20%
2.	$\frac{44}{100}$	0,44	44%
3.	$\frac{41}{100}$	0,41	41%
4.	$\frac{6}{10}$	0,6	60%
5.	$\frac{92}{100}$	0,92	92%
6.	$\frac{31}{100}$	0,31	31%
7.	$\frac{87}{100}$	0,87	87%
8.	$\frac{8}{10}$	0,8	80%
9.	$\frac{5}{10}$	0,5	50%
10.	$\frac{3}{10}$	0,3	30%
11.	$\frac{4}{10}$	0,4	40%