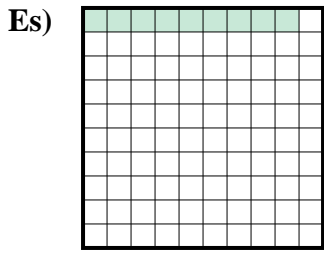


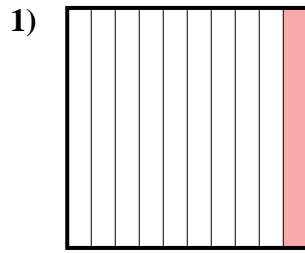


Determina il valore sotto forma di frazione, decimale e percentuale.

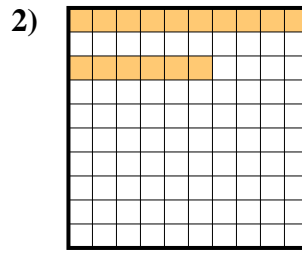
Risposte



Frazione $\frac{9}{100}$
 Decimale 0,09
 Percentuale 9



Frazione _____
 Decimale _____
 Percentuale _____



Frazione _____
 Decimale _____
 Percentuale _____

Es. $\frac{9}{100}$ 0,09 9%

1. _____

2. _____

3. _____

4. _____

5. _____

6. _____

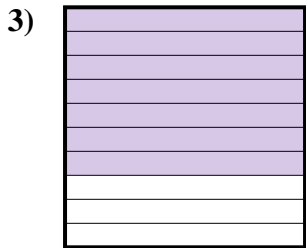
7. _____

8. _____

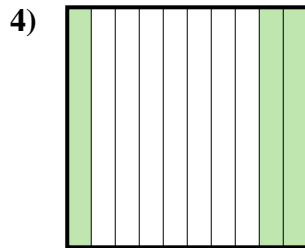
9. _____

10. _____

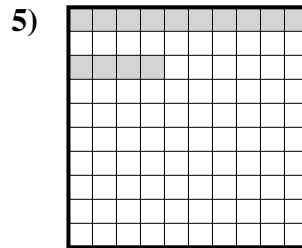
11. _____



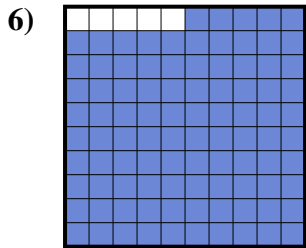
Frazione _____
 Decimale _____
 Percentuale _____



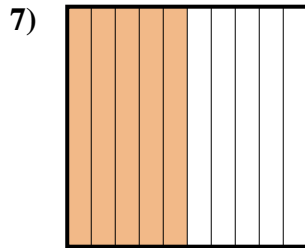
Frazione _____
 Decimale _____
 Percentuale _____



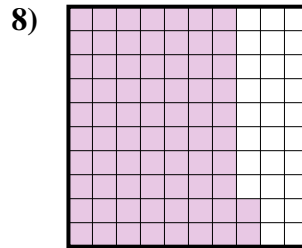
Frazione _____
 Decimale _____
 Percentuale _____




Frazione _____
 Decimale _____
 Percentuale _____



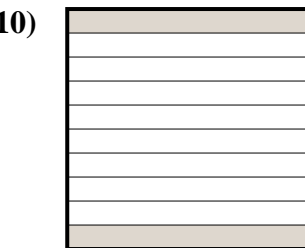
Frazione _____
 Decimale _____
 Percentuale _____



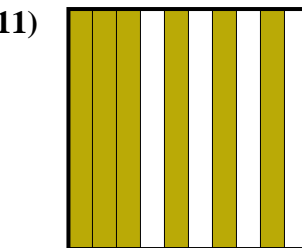
Frazione _____
 Decimale _____
 Percentuale _____



Frazione _____
 Decimale _____
 Percentuale _____



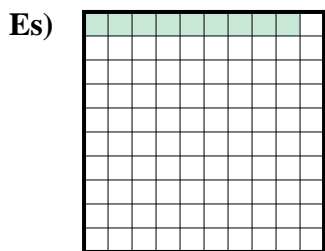
Frazione _____
 Decimale _____
 Percentuale _____



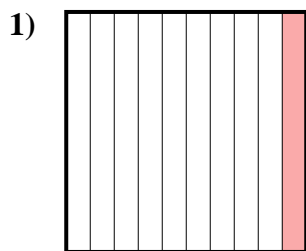
Frazione _____
 Decimale _____
 Percentuale _____



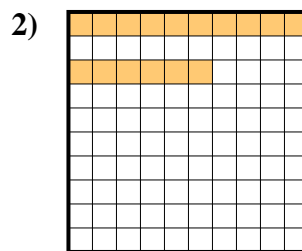
Determina il valore sotto forma di frazione, decimale e percentuale.



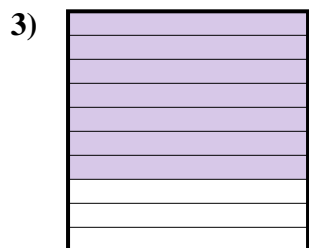
Frazione $\frac{9}{100}$
 Decimale $0,09$
 Percentuale 9



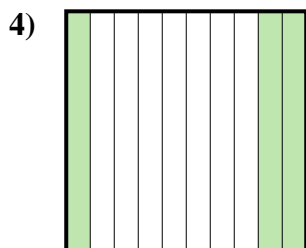
Frazione $\frac{1}{10}$
 Decimale $0,1$
 Percentuale 10



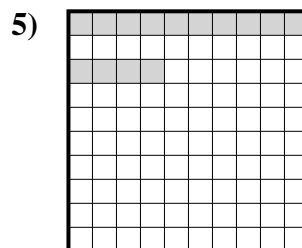
Frazione $\frac{16}{100}$
 Decimale $0,16$
 Percentuale 16



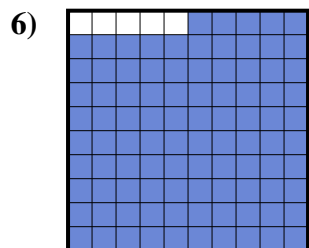
Frazione $\frac{7}{10}$
 Decimale $0,7$
 Percentuale 70



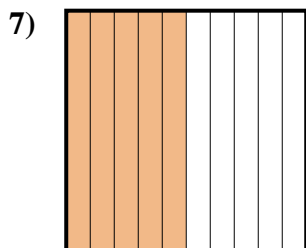
Frazione $\frac{3}{10}$
 Decimale $0,3$
 Percentuale 30



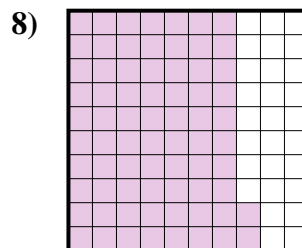
Frazione $\frac{14}{100}$
 Decimale $0,14$
 Percentuale 14




Frazione $\frac{95}{100}$
 Decimale $0,95$
 Percentuale 95



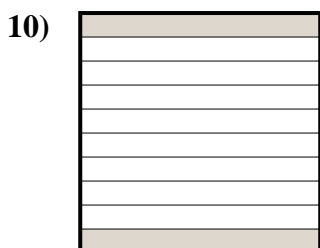
Frazione $\frac{5}{10}$
 Decimale $0,5$
 Percentuale 50



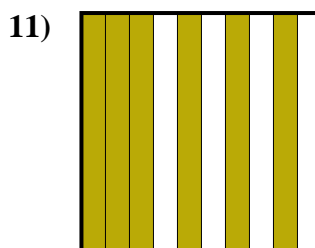
Frazione $\frac{72}{100}$
 Decimale $0,72$
 Percentuale 72



Frazione $\frac{4}{10}$
 Decimale $0,4$
 Percentuale 40



Frazione $\frac{2}{10}$
 Decimale $0,2$
 Percentuale 20



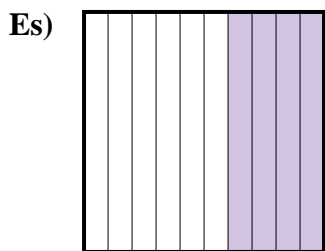
Frazione $\frac{6}{10}$
 Decimale $0,6$
 Percentuale 60

Risposte

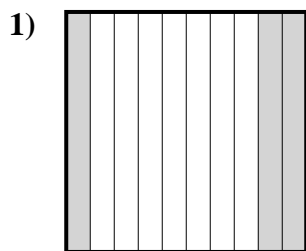
Es.	$\frac{9}{100}$	0,09	9%
1.	$\frac{1}{10}$	0,1	10%
2.	$\frac{16}{100}$	0,16	16%
3.	$\frac{7}{10}$	0,7	70%
4.	$\frac{3}{10}$	0,3	30%
5.	$\frac{14}{100}$	0,14	14%
6.	$\frac{95}{100}$	0,95	95%
7.	$\frac{5}{10}$	0,5	50%
8.	$\frac{72}{100}$	0,72	72%
9.	$\frac{4}{10}$	0,4	40%
10.	$\frac{2}{10}$	0,2	20%
11.	$\frac{6}{10}$	0,6	60%



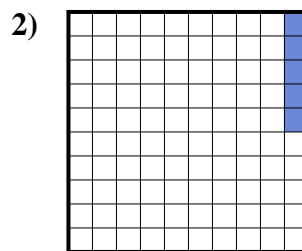
Determina il valore sotto forma di frazione, decimale e percentuale.



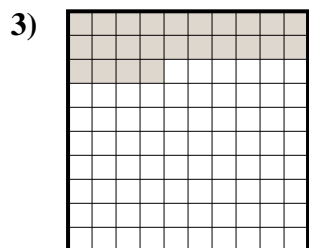
Frazione $\frac{4}{10}$
 Decimale $0,4$
 Percentuale 40



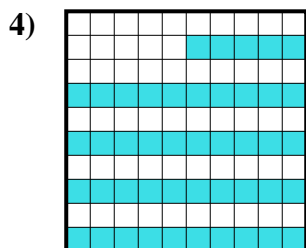
Frazione $\frac{3}{10}$
 Decimale $0,3$
 Percentuale 30



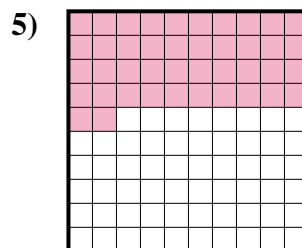
Frazione $\frac{5}{100}$
 Decimale $0,05$
 Percentuale 5




Frazione $\frac{24}{100}$
 Decimale $0,24$
 Percentuale 24




Frazione $\frac{45}{100}$
 Decimale $0,45$
 Percentuale 45



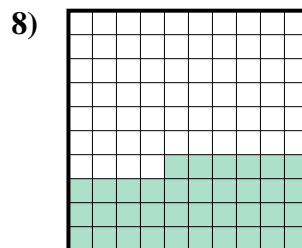
Frazione $\frac{42}{100}$
 Decimale $0,42$
 Percentuale 42



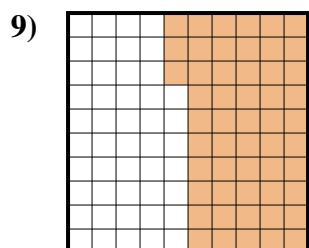
Frazione $\frac{2}{10}$
 Decimale $0,2$
 Percentuale 20



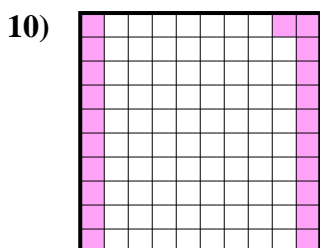
Frazione $\frac{1}{10}$
 Decimale $0,1$
 Percentuale 10



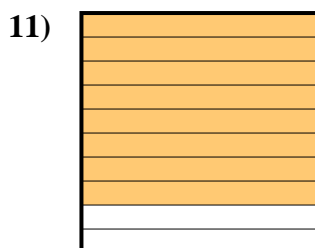
Frazione $\frac{36}{100}$
 Decimale $0,36$
 Percentuale 36



Frazione $\frac{53}{100}$
 Decimale $0,53$
 Percentuale 53



Frazione $\frac{21}{100}$
 Decimale $0,21$
 Percentuale 21



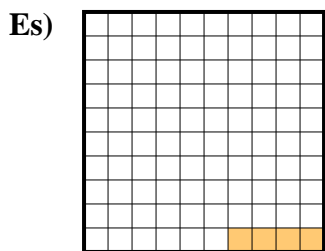
Frazione $\frac{8}{10}$
 Decimale $0,8$
 Percentuale 80

Risposte

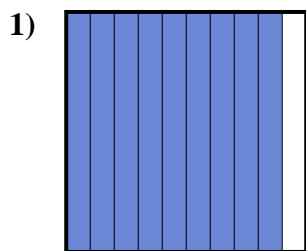
- Es. $\frac{4}{10}$ $0,4$ 40%
 1. $\frac{3}{10}$ $0,3$ 30%
 2. $\frac{5}{100}$ $0,05$ 5%
 3. $\frac{24}{100}$ $0,24$ 24%
 4. $\frac{45}{100}$ $0,45$ 45%
 5. $\frac{42}{100}$ $0,42$ 42%
 6. $\frac{2}{10}$ $0,2$ 20%
 7. $\frac{1}{10}$ $0,1$ 10%
 8. $\frac{36}{100}$ $0,36$ 36%
 9. $\frac{53}{100}$ $0,53$ 53%
 10. $\frac{21}{100}$ $0,21$ 21%
 11. $\frac{8}{10}$ $0,8$ 80%




Determina il valore sotto forma di frazione, decimale e percentuale.




Frazione $\frac{4}{100}$
 Decimale $0,04$
 Percentuale 4



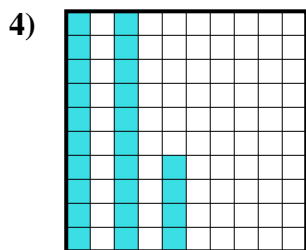
Frazione $\frac{9}{10}$
 Decimale $0,9$
 Percentuale 90



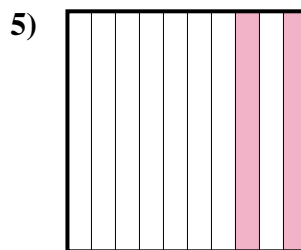
Frazione $\frac{8}{10}$
 Decimale $0,8$
 Percentuale 80



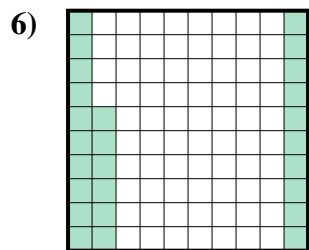
Frazione $\frac{3}{10}$
 Decimale $0,3$
 Percentuale 30



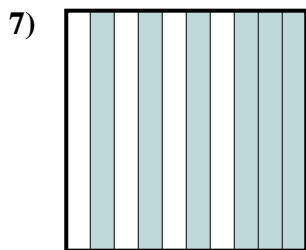
Frazione $\frac{24}{100}$
 Decimale $0,24$
 Percentuale 24



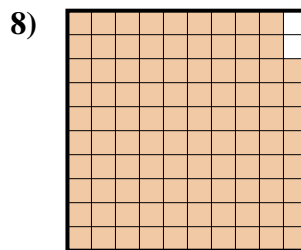
Frazione $\frac{2}{10}$
 Decimale $0,2$
 Percentuale 20



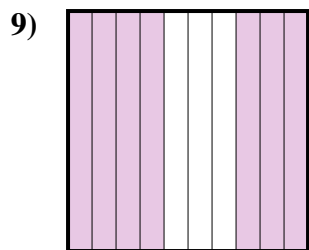
Frazione $\frac{26}{100}$
 Decimale $0,26$
 Percentuale 26



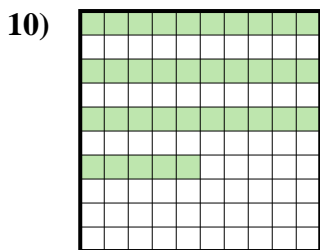
Frazione $\frac{6}{10}$
 Decimale $0,6$
 Percentuale 60



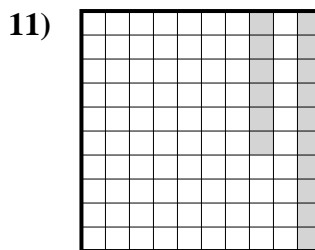
Frazione $\frac{98}{100}$
 Decimale $0,98$
 Percentuale 98



Frazione $\frac{7}{10}$
 Decimale $0,7$
 Percentuale 70



Frazione $\frac{35}{100}$
 Decimale $0,35$
 Percentuale 35



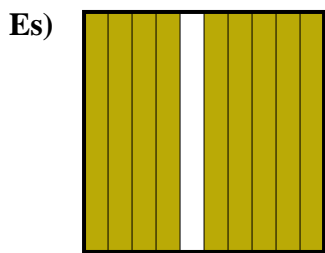
Frazione $\frac{16}{100}$
 Decimale $0,16$
 Percentuale 16

Risposte

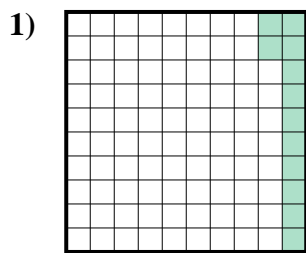
Es.	$\frac{4}{100}$	0,04	4%
1.	$\frac{9}{10}$	0,9	90%
2.	$\frac{8}{10}$	0,8	80%
3.	$\frac{3}{10}$	0,3	30%
4.	$\frac{24}{100}$	0,24	24%
5.	$\frac{2}{10}$	0,2	20%
6.	$\frac{26}{100}$	0,26	26%
7.	$\frac{6}{10}$	0,6	60%
8.	$\frac{98}{100}$	0,98	98%
9.	$\frac{7}{10}$	0,7	70%
10.	$\frac{35}{100}$	0,35	35%
11.	$\frac{16}{100}$	0,16	16%



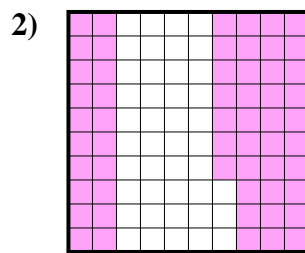
Determina il valore sotto forma di frazione, decimale e percentuale.



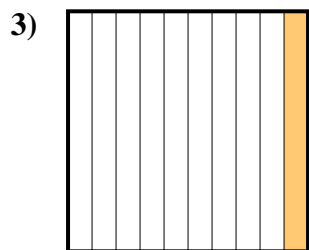
Frazione $\frac{9}{10}$
 Decimale $0,9$
 Percentuale 90



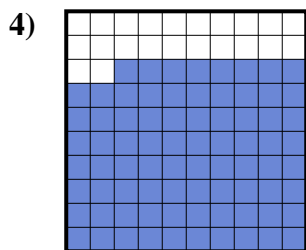
Frazione $\frac{12}{100}$
 Decimale $0,12$
 Percentuale 12



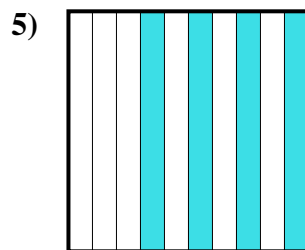
Frazione $\frac{57}{100}$
 Decimale $0,57$
 Percentuale 57



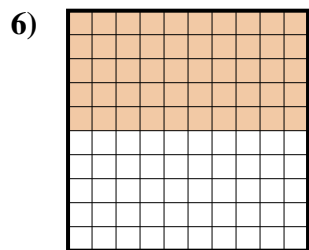
Frazione $\frac{1}{10}$
 Decimale $0,1$
 Percentuale 10



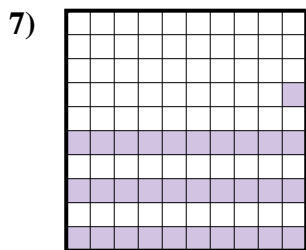
Frazione $\frac{78}{100}$
 Decimale $0,78$
 Percentuale 78



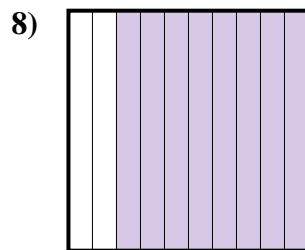
Frazione $\frac{4}{10}$
 Decimale $0,4$
 Percentuale 40



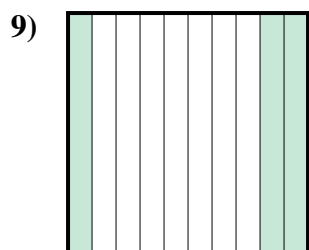
Frazione $\frac{50}{100}$
 Decimale $0,50$
 Percentuale 50



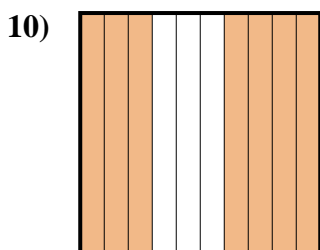
Frazione $\frac{31}{100}$
 Decimale $0,31$
 Percentuale 31



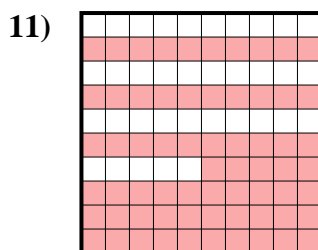
Frazione $\frac{8}{10}$
 Decimale $0,8$
 Percentuale 80



Frazione $\frac{3}{10}$
 Decimale $0,3$
 Percentuale 30



Frazione $\frac{7}{10}$
 Decimale $0,7$
 Percentuale 70



Frazione $\frac{65}{100}$
 Decimale $0,65$
 Percentuale 65

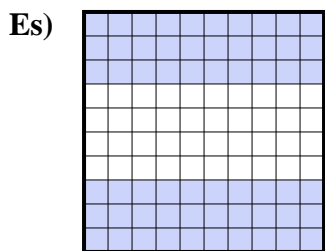
Risposte

- Es. $\frac{9}{10}$ **0,9** **90%**
 1. $\frac{12}{100}$ **0,12** **12%**
 2. $\frac{57}{100}$ **0,57** **57%**
 3. $\frac{1}{10}$ **0,1** **10%**
 4. $\frac{78}{100}$ **0,78** **78%**
 5. $\frac{4}{10}$ **0,4** **40%**
 6. $\frac{50}{100}$ **0,50** **50%**
 7. $\frac{31}{100}$ **0,31** **31%**
 8. $\frac{8}{10}$ **0,8** **80%**
 9. $\frac{3}{10}$ **0,3** **30%**
 10. $\frac{7}{10}$ **0,7** **70%**
 11. $\frac{65}{100}$ **0,65** **65%**

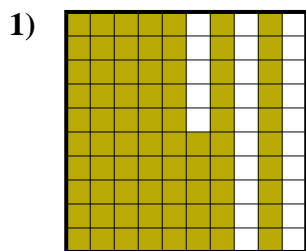


Determina il valore sotto forma di frazione, decimale e percentuale.

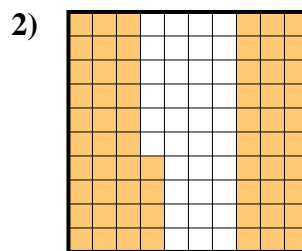
Risposte



Frazione $\frac{60}{100}$
 Decimale 0,60
 Percentuale 60



Frazione _____
 Decimale _____
 Percentuale _____



Frazione _____
 Decimale _____
 Percentuale _____

Es. $\frac{60}{100}$ **0,60** **60%**

1. _____

2. _____

3. _____

4. _____

5. _____

6. _____

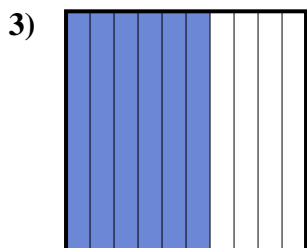
7. _____

8. _____

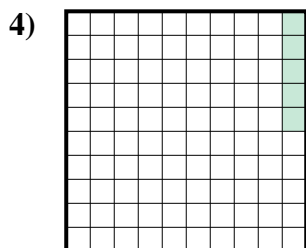
9. _____

10. _____

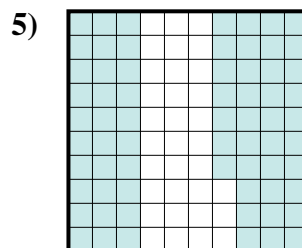
11. _____



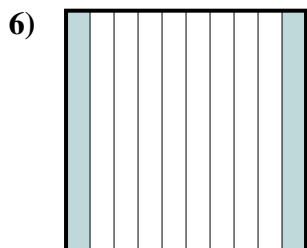
Frazione _____
 Decimale _____
 Percentuale _____



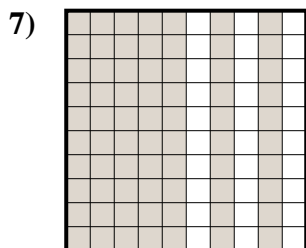
Frazione _____
 Decimale _____
 Percentuale _____



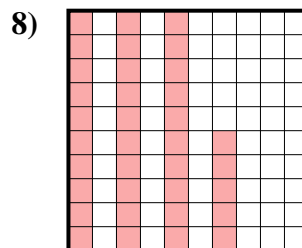
Frazione _____
 Decimale _____
 Percentuale _____



Frazione _____
 Decimale _____
 Percentuale _____



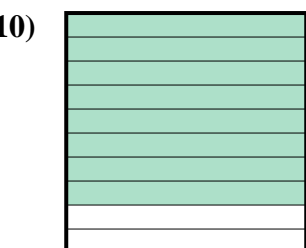
Frazione _____
 Decimale _____
 Percentuale _____



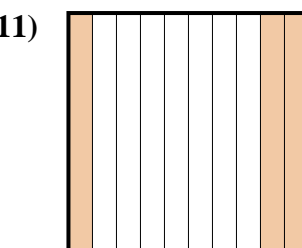
Frazione _____
 Decimale _____
 Percentuale _____



Frazione _____
 Decimale _____
 Percentuale _____



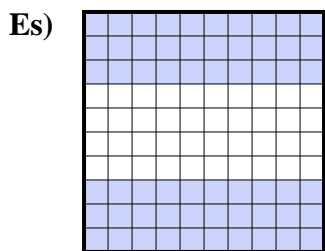
Frazione _____
 Decimale _____
 Percentuale _____



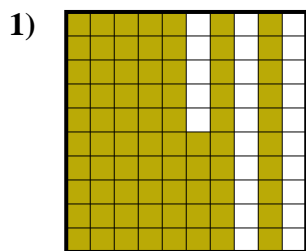
Frazione _____
 Decimale _____
 Percentuale _____



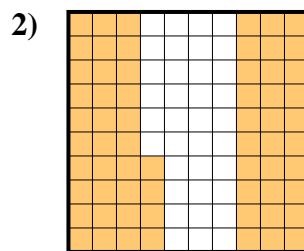
Determina il valore sotto forma di frazione, decimale e percentuale.



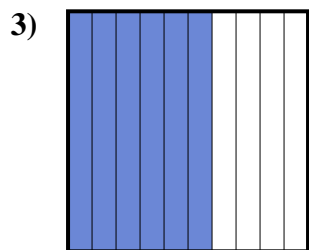
Frazione $\frac{60}{100}$
 Decimale $0,60$
 Percentuale 60



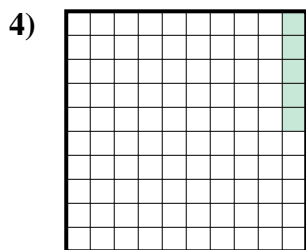
Frazione $\frac{75}{100}$
 Decimale $0,75$
 Percentuale 75



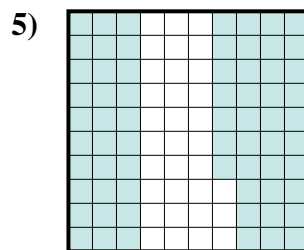
Frazione $\frac{64}{100}$
 Decimale $0,64$
 Percentuale 64



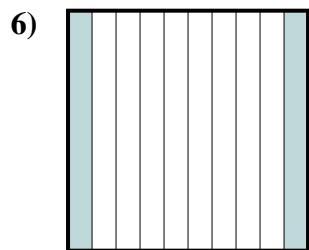
Frazione $\frac{6}{10}$
 Decimale $0,6$
 Percentuale 60



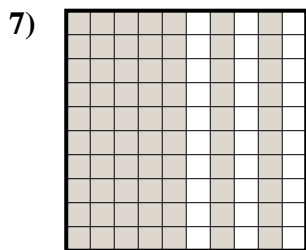
Frazione $\frac{5}{100}$
 Decimale $0,05$
 Percentuale 5



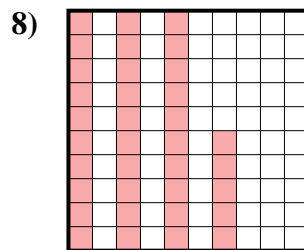
Frazione $\frac{67}{100}$
 Decimale $0,67$
 Percentuale 67



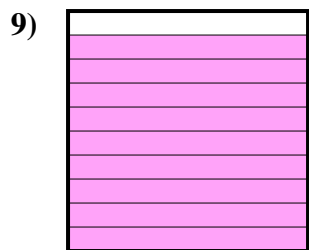
Frazione $\frac{2}{10}$
 Decimale $0,2$
 Percentuale 20




Frazione $\frac{70}{100}$
 Decimale $0,70$
 Percentuale 70



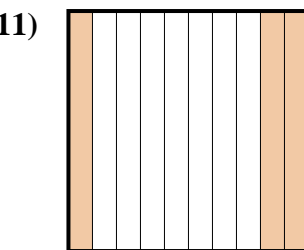
Frazione $\frac{35}{100}$
 Decimale $0,35$
 Percentuale 35



Frazione $\frac{9}{10}$
 Decimale $0,9$
 Percentuale 90



Frazione $\frac{8}{10}$
 Decimale $0,8$
 Percentuale 80



Frazione $\frac{3}{10}$
 Decimale $0,3$
 Percentuale 30

Risposte

- Es. $\frac{60}{100}$ **0,60** **60%**
 1. $\frac{75}{100}$ **0,75** **75%**
 2. $\frac{64}{100}$ **0,64** **64%**
 3. $\frac{6}{10}$ **0,6** **60%**
 4. $\frac{5}{100}$ **0,05** **5%**
 5. $\frac{67}{100}$ **0,67** **67%**
 6. $\frac{2}{10}$ **0,2** **20%**
 7. $\frac{70}{100}$ **0,70** **70%**
 8. $\frac{35}{100}$ **0,35** **35%**
 9. $\frac{9}{10}$ **0,9** **90%**
 10. $\frac{8}{10}$ **0,8** **80%**
 11. $\frac{3}{10}$ **0,3** **30%**