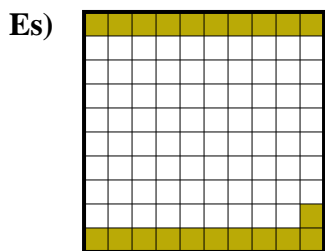
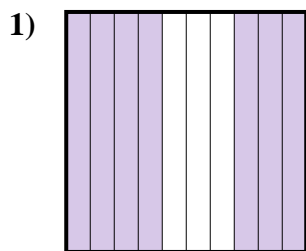




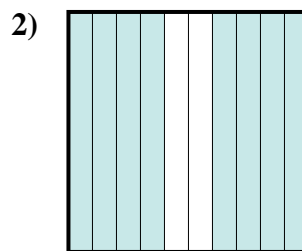
Determina il valore sotto forma di frazione, decimale e percentuale.



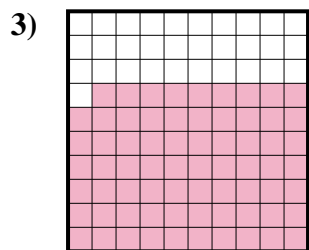
Frazione $\frac{21}{100}$
 Decimale $0,21$
 Percentuale 21



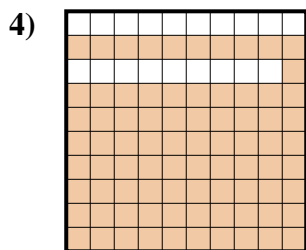
Frazione $\frac{7}{10}$
 Decimale $0,7$
 Percentuale 70



Frazione $\frac{8}{10}$
 Decimale $0,8$
 Percentuale 80




Frazione $\frac{69}{100}$
 Decimale $0,69$
 Percentuale 69



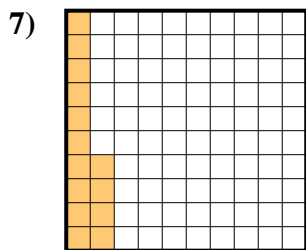
Frazione $\frac{81}{100}$
 Decimale $0,81$
 Percentuale 81



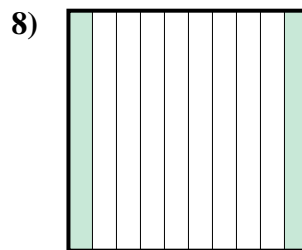
Frazione $\frac{4}{10}$
 Decimale $0,4$
 Percentuale 40



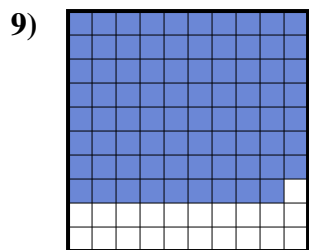
Frazione $\frac{9}{10}$
 Decimale $0,9$
 Percentuale 90



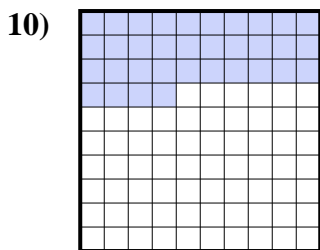
Frazione $\frac{14}{100}$
 Decimale $0,14$
 Percentuale 14



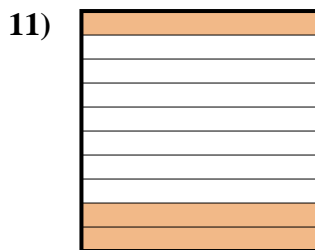
Frazione $\frac{2}{10}$
 Decimale $0,2$
 Percentuale 20



Frazione $\frac{79}{100}$
 Decimale $0,79$
 Percentuale 79



Frazione $\frac{34}{100}$
 Decimale $0,34$
 Percentuale 34



Frazione $\frac{3}{10}$
 Decimale $0,3$
 Percentuale 30

Risposte

Es.	$\frac{21}{100}$	0,21	21%
1.	$\frac{7}{10}$	0,7	70%
2.	$\frac{8}{10}$	0,8	80%
3.	$\frac{69}{100}$	0,69	69%
4.	$\frac{81}{100}$	0,81	81%
5.	$\frac{4}{10}$	0,4	40%
6.	$\frac{9}{10}$	0,9	90%
7.	$\frac{14}{100}$	0,14	14%
8.	$\frac{2}{10}$	0,2	20%
9.	$\frac{79}{100}$	0,79	79%
10.	$\frac{34}{100}$	0,34	34%
11.	$\frac{3}{10}$	0,3	30%