



Risolvi ogni problema, sciogliendo le frazioni. Il primo è un esempio.

RisposteEs) $2:\frac{1}{6} = ?$ Vale a dire: Quanti $\frac{1}{6}$ ci sono in 2 interi?

1 Intero						1 Intero					

1) $5:\frac{1}{3} =$

1 Intero	1 Intero	1 Intero	1 Intero	1 Intero

2) $5:\frac{1}{5} =$

1 Intero	1 Intero	1 Intero	1 Intero	1 Intero

3) $3:\frac{1}{5} =$

1 Intero	1 Intero	1 Intero

4) $4:\frac{1}{7} =$

1 Intero	1 Intero	1 Intero	1 Intero

5) $2:\frac{1}{7} =$

1 Intero	1 Intero

6) $5:\frac{1}{4} =$

1 Intero	1 Intero	1 Intero	1 Intero	1 Intero

7) $4:\frac{1}{3} =$

1 Intero	1 Intero	1 Intero	1 Intero

8) $4:\frac{1}{4} =$

1 Intero	1 Intero	1 Intero	1 Intero

9) $3:\frac{1}{3} =$

1 Intero	1 Intero	1 Intero

Es. **12**

1. _____

2. _____

3. _____

4. _____

5. _____

6. _____


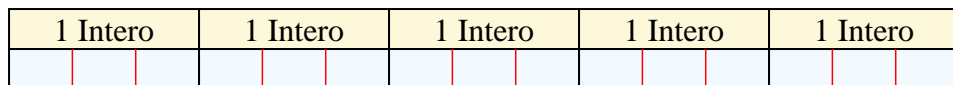
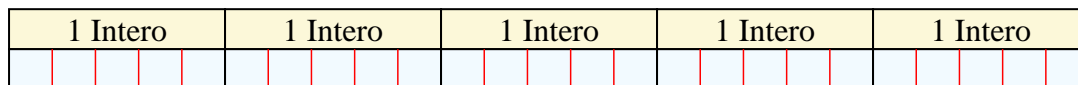
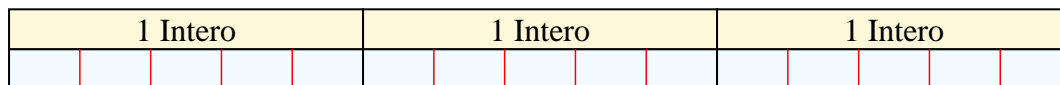
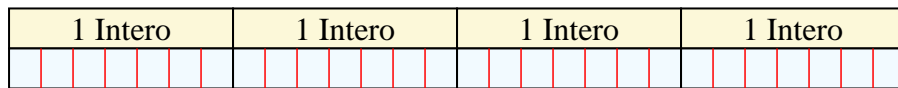
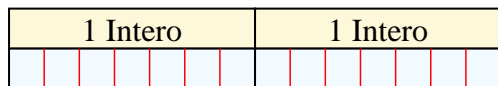
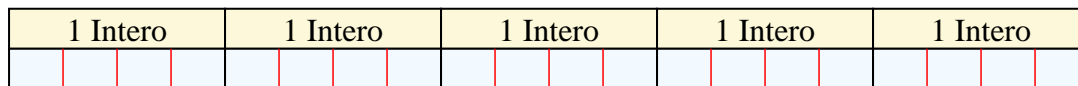
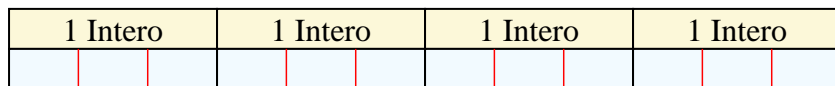
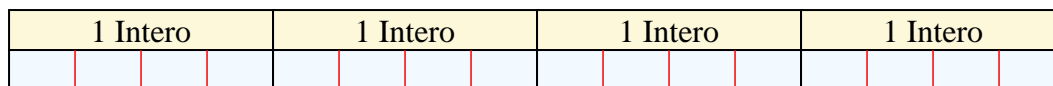
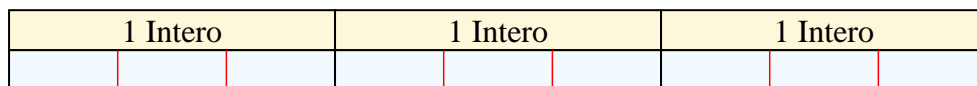
7. _____

8. _____

9. _____



Risolvi ogni problema, sciogliendo le frazioni. Il primo è un esempio.

RisposteEs) $2:\frac{1}{6} = ?$ Vale a dire: Quanti $\frac{1}{6}$ ci sono in 2 interi?Es. 121) $5:\frac{1}{3} =$ Vale a dire: Quanti $\frac{1}{3}$ ci sono in 5 interi?1. 152) $5:\frac{1}{5} =$ Vale a dire: Quanti $\frac{1}{5}$ ci sono in 5 interi?2. 253) $3:\frac{1}{5} =$ Vale a dire: Quanti $\frac{1}{5}$ ci sono in 3 interi?3. 154) $4:\frac{1}{7} =$ Vale a dire: Quanti $\frac{1}{7}$ ci sono in 4 interi?4. 285) $2:\frac{1}{7} =$ Vale a dire: Quanti $\frac{1}{7}$ ci sono in 2 interi?5. 146) $5:\frac{1}{4} =$ Vale a dire: Quanti $\frac{1}{4}$ ci sono in 5 interi?6. 207) $4:\frac{1}{3} =$ Vale a dire: Quanti $\frac{1}{3}$ ci sono in 4 interi?7. 128) $4:\frac{1}{4} =$ Vale a dire: Quanti $\frac{1}{4}$ ci sono in 4 interi?8. 169) $3:\frac{1}{3} =$ Vale a dire: Quanti $\frac{1}{3}$ ci sono in 3 interi?9. 9