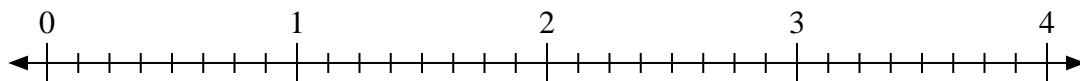




Usa la linea numerata per risolvere ogni problema.

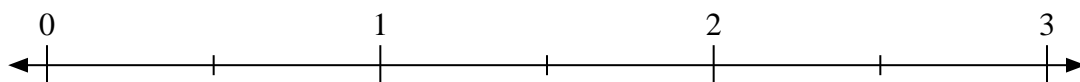
1) $2:\frac{1}{8}$



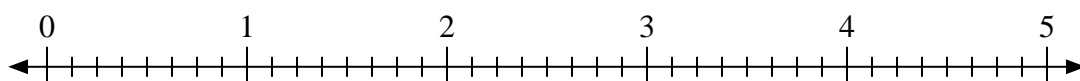
2) $2:\frac{2}{3}$



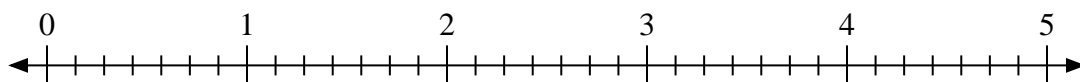
3) $2:\frac{1}{2}$



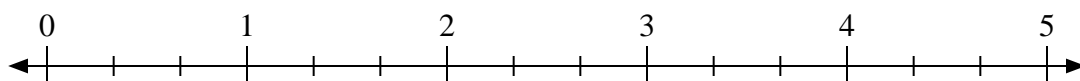
4) $3:\frac{5}{8}$



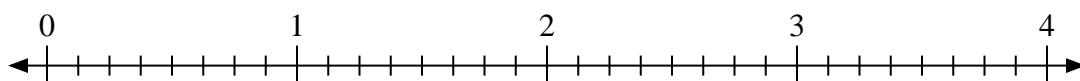
5) $2:\frac{6}{7}$



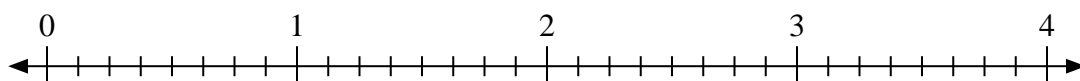
6) $4:\frac{1}{3}$



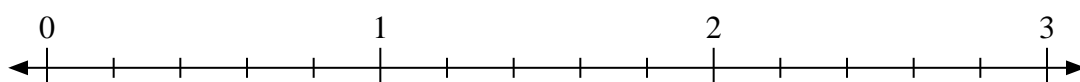
7) $2:\frac{3}{8}$



8) $2:\frac{2}{8}$



9) $2:\frac{3}{5}$

**Risposte**

1. _____

2. _____

3. _____

4. _____

5. _____

6. _____

7. _____

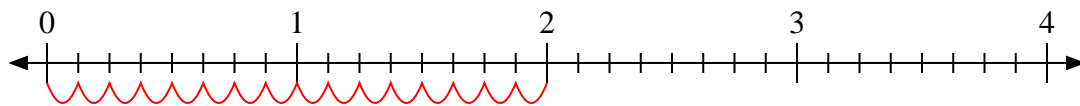
8. _____

9. _____

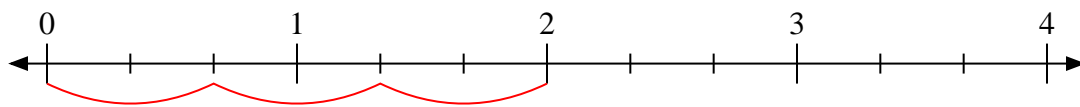


Usa la linea numerata per risolvere ogni problema.

1) $2 : \frac{1}{8}$



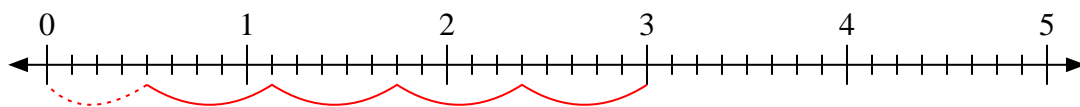
2) $2 : \frac{2}{3}$



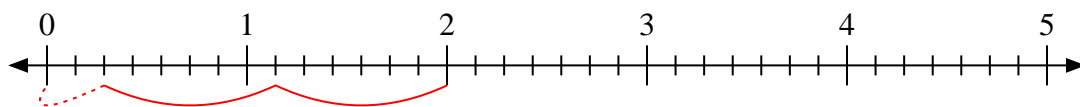
3) $2 : \frac{1}{2}$



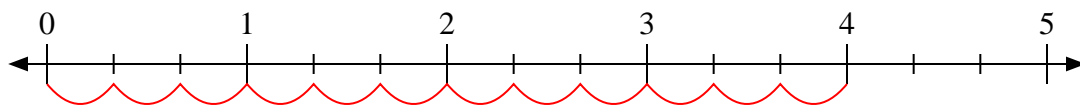
4) $3 : \frac{5}{8}$



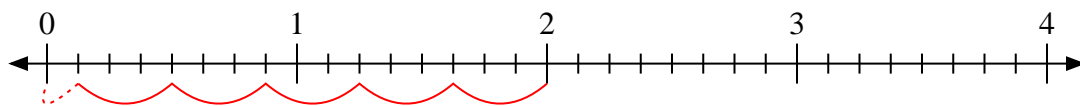
5) $2 : \frac{6}{7}$



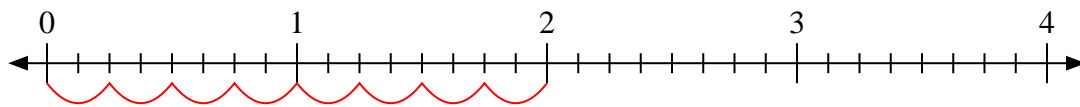
6) $4 : \frac{1}{3}$



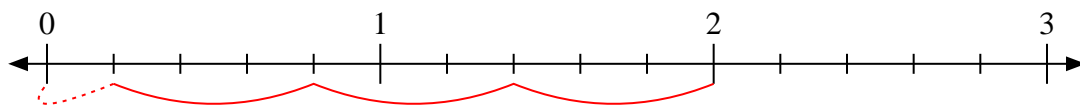
7) $2 : \frac{3}{8}$



8) $2 : \frac{2}{8}$



9) $2 : \frac{3}{5}$

**Risposte**1. 162. 33. 44. $4 \frac{4}{5}$ 5. $2 \frac{2}{6}$ 6. 127. $5 \frac{1}{3}$ 8. 89. $3 \frac{1}{3}$