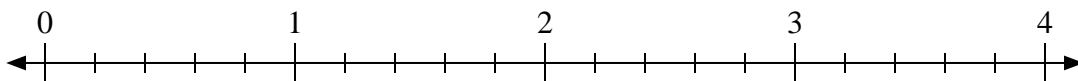


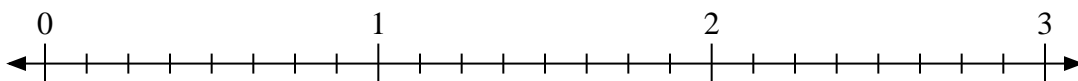


Usa la linea numerata per risolvere ogni problema.

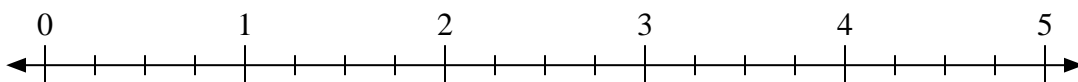
1) $3:\frac{3}{5}$



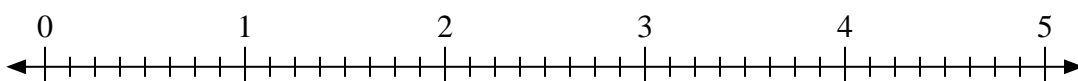
2) $3:\frac{7}{8}$



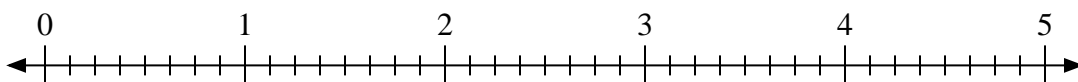
3) $2:\frac{1}{4}$




4) $4:\frac{6}{8}$



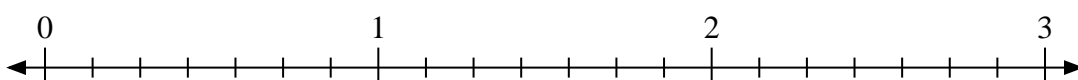
5) $2:\frac{7}{8}$



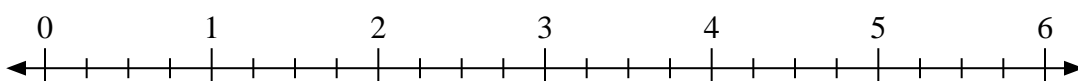
6) $2:\frac{1}{3}$



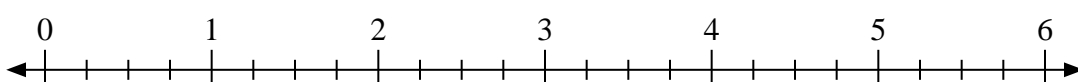
7) $3:\frac{4}{7}$



8) $5:\frac{3}{4}$



9) $6:\frac{3}{4}$

**Risposte**

1. _____

2. _____

3. _____

4. _____

5. _____

6. _____

7. _____

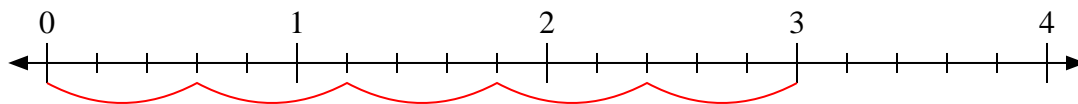
8. _____

9. _____

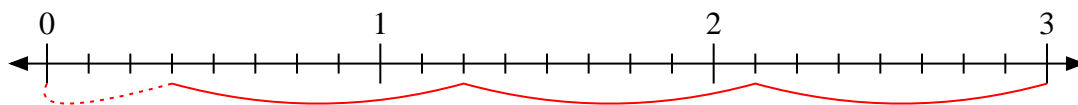


Usa la linea numerata per risolvere ogni problema.

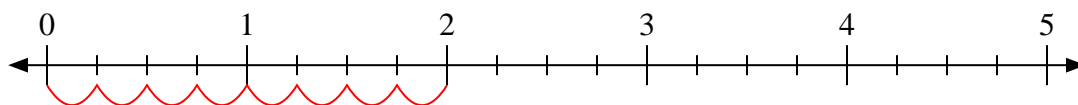
1) $3:\frac{3}{5}$



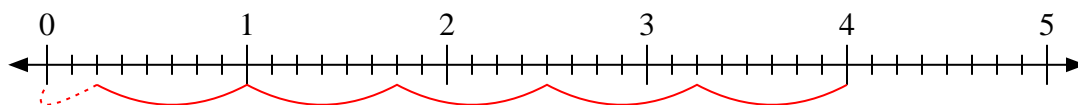
2) $3:\frac{7}{8}$



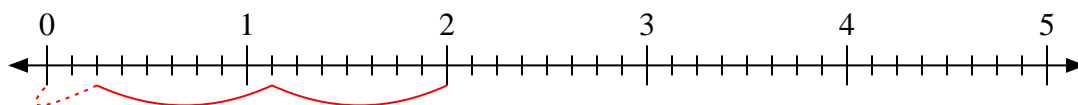
3) $2:\frac{1}{4}$



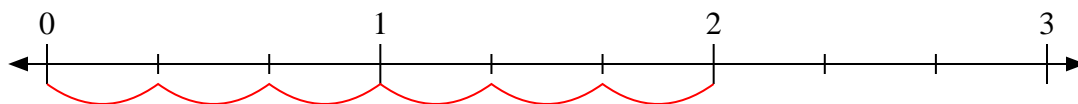
4) $4:\frac{6}{8}$



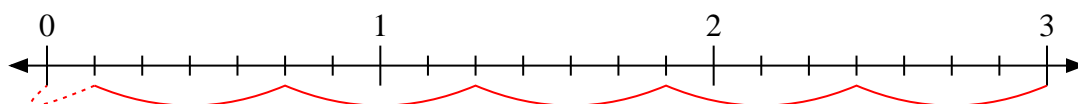
5) $2:\frac{7}{8}$



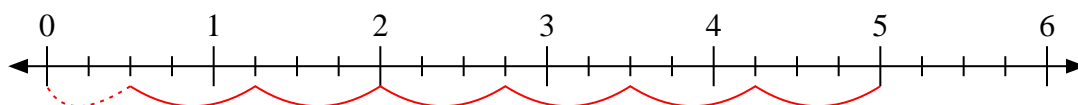
6) $2:\frac{1}{3}$



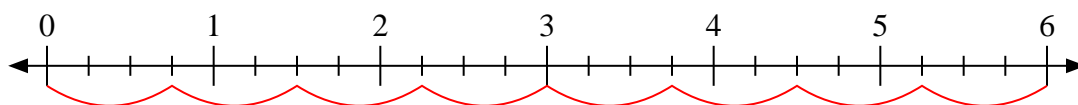
7) $3:\frac{4}{7}$



8) $5:\frac{3}{4}$



9) $6:\frac{3}{4}$

**Risposte**1. 52. $3\frac{3}{7}$ 3. 84. $5\frac{2}{6}$ 5. $2\frac{2}{7}$ 6. 67. $5\frac{1}{4}$ 8. $6\frac{2}{3}$ 9. 8