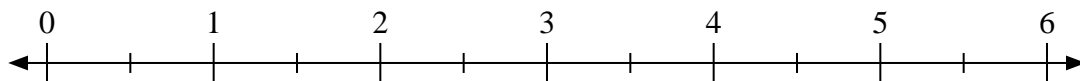




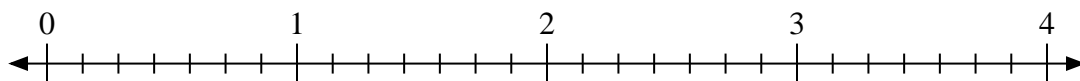
Usa la linea numerata per risolvere ogni problema.

Risposte

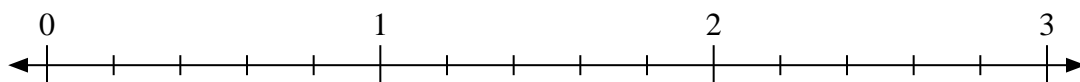
1) $5:\frac{1}{2}$



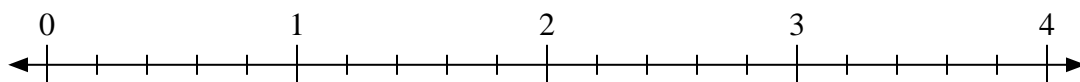
2) $4:\frac{4}{7}$



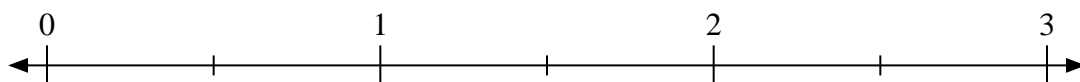
3) $3:\frac{1}{5}$



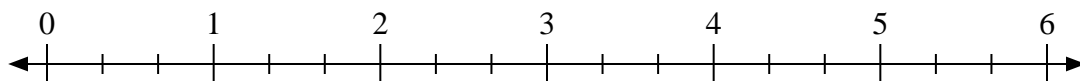
4) $2:\frac{2}{5}$



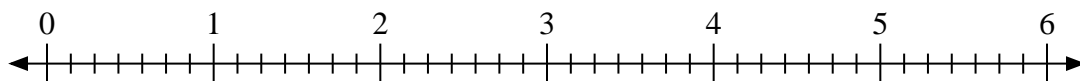
5) $2:\frac{1}{2}$



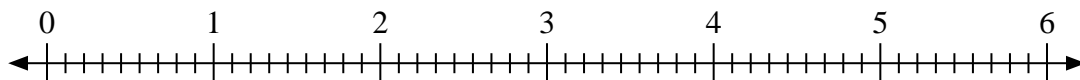
6) $3:\frac{2}{3}$



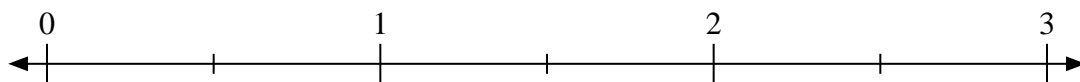
7) $2:\frac{2}{7}$



8) $2:\frac{4}{9}$



9) $3:\frac{1}{2}$



1. _____

2. _____

3. _____

4. _____

5. _____

6. _____

7. _____

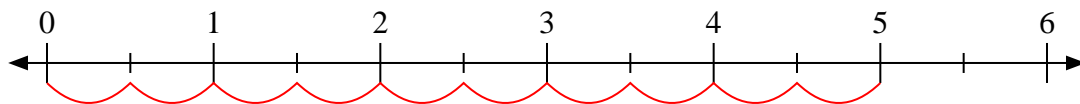
8. _____

9. _____

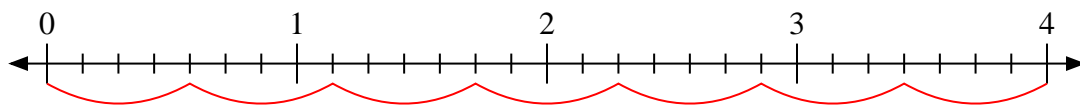


Usa la linea numerata per risolvere ogni problema.

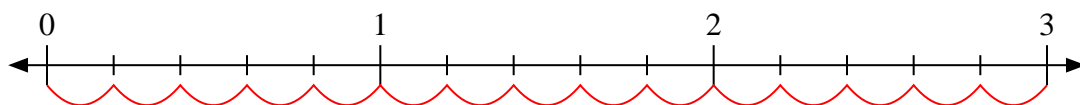
1) $5 : \frac{1}{2}$



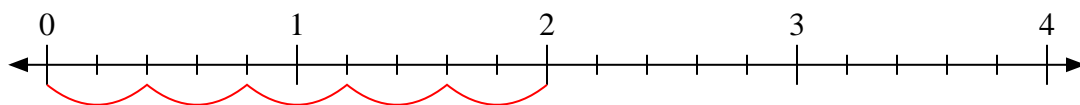
2) $4 : \frac{4}{7}$



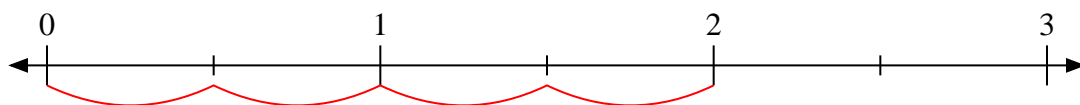
3) $3 : \frac{1}{5}$



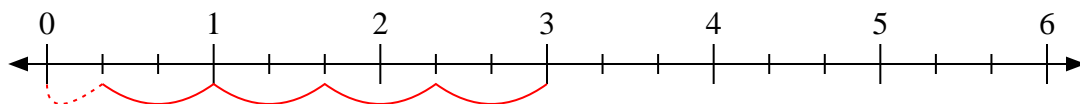
4) $2 : \frac{2}{5}$



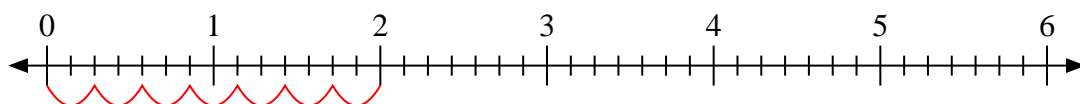
5) $2 : \frac{1}{2}$



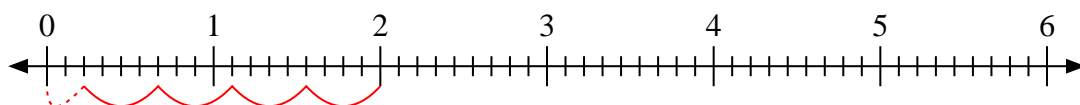
6) $3 : \frac{2}{3}$



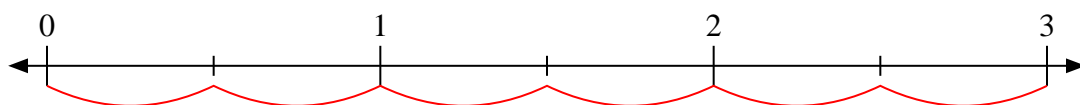
7) $2 : \frac{2}{7}$



8) $2 : \frac{4}{9}$



9) $3 : \frac{1}{2}$

**Risposte**1. 102. 73. 154. 55. 46. $4\frac{1}{2}$ 7. 78. $4\frac{2}{4}$ 9. 6