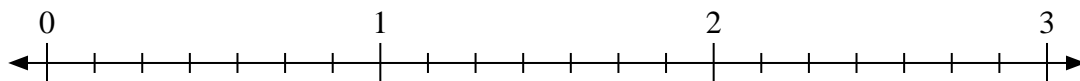


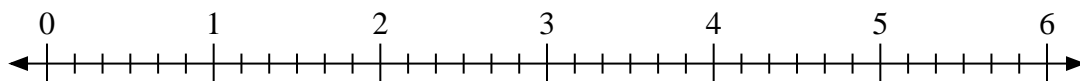


Usa la linea numerata per risolvere ogni problema.

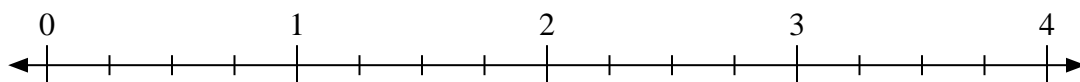
1) $2:\frac{3}{7}$



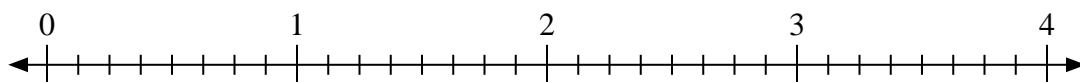
2) $6:\frac{3}{6}$



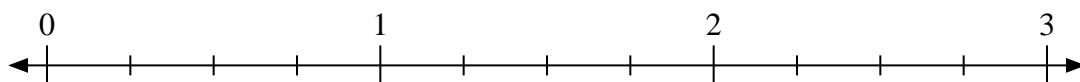
3) $2:\frac{1}{4}$



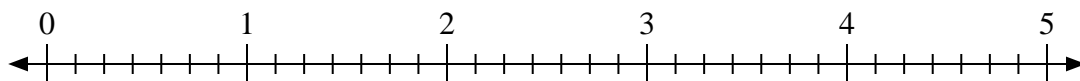
4) $2:\frac{2}{8}$



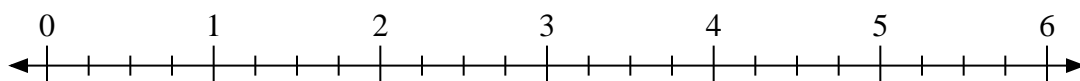
5) $3:\frac{2}{4}$



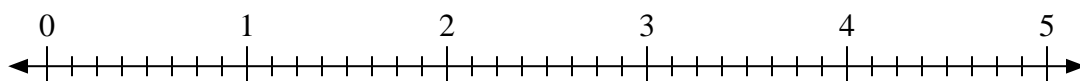
6) $5:\frac{4}{7}$



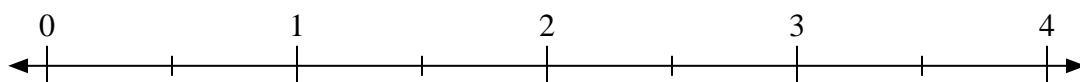
7) $6:\frac{1}{4}$



8) $5:\frac{5}{8}$



9) $3:\frac{1}{2}$

**Risposte**

1. _____

2. _____

3. _____

4. _____

5. _____

6. _____

7. _____

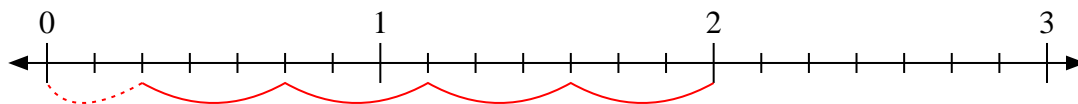
8. _____

9. _____

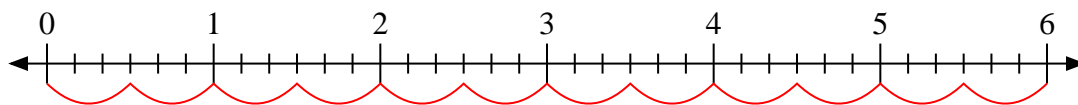


Usa la linea numerata per risolvere ogni problema.

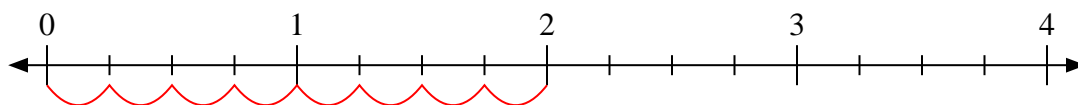
1) $2:\frac{3}{7}$



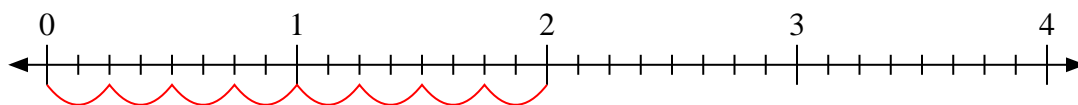
2) $6:\frac{3}{6}$



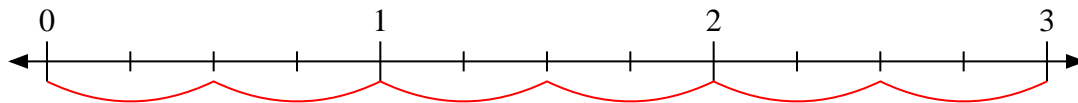
3) $2:\frac{1}{4}$



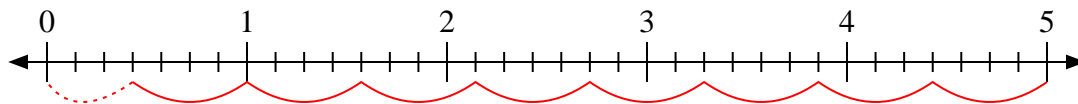
4) $2:\frac{2}{8}$



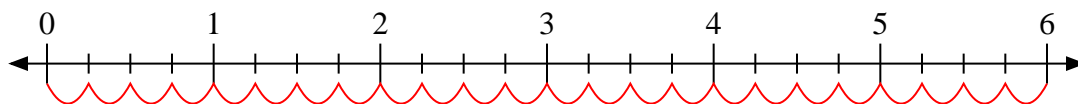
5) $3:\frac{2}{4}$



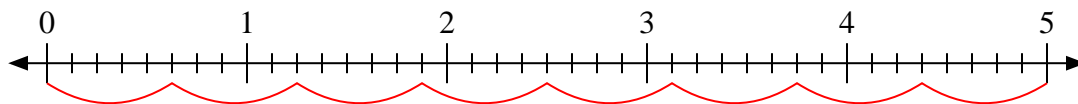
6) $5:\frac{4}{7}$



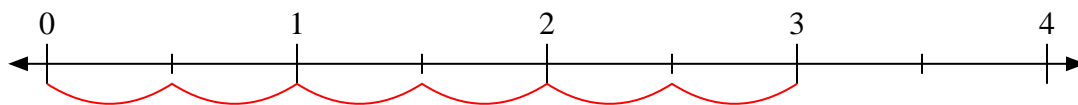
7) $6:\frac{1}{4}$



8) $5:\frac{5}{8}$



9) $3:\frac{1}{2}$

**Risposte**

1. 4 $\frac{2}{3}$

2. 12

3. 8

4. 8

5. 6

6. 8 $\frac{3}{4}$

7. 24

8. 8

9. 6