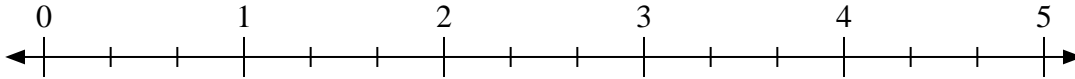




Usa la linea numerata per risolvere ogni problema.


Risposte

1) $2:\frac{2}{3}$



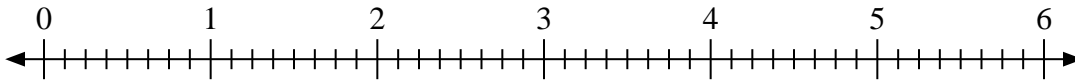
1. _____

2) $2:\frac{1}{3}$



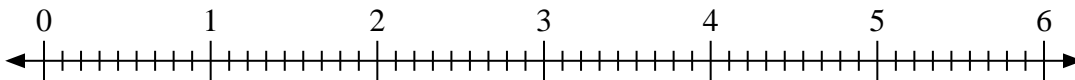
2. _____

3) $4:\frac{3}{8}$



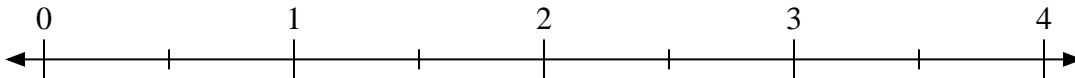
3. _____

4) $6:\frac{8}{9}$



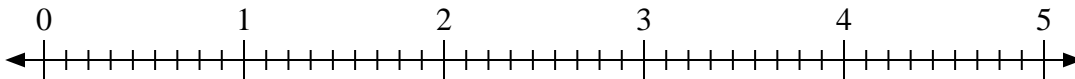
4. _____

5) $2:\frac{1}{2}$



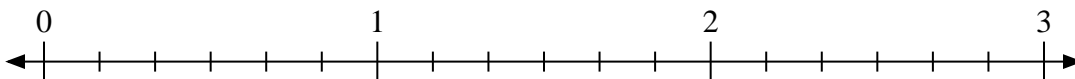
5. _____

6) $3:\frac{8}{9}$



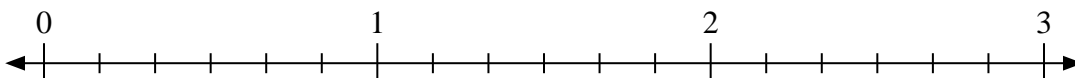
6. _____

7) $2:\frac{3}{6}$



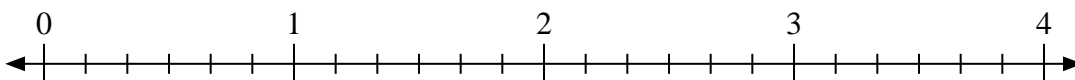
7. _____

8) $2:\frac{4}{6}$



8. _____

9) $3:\frac{5}{6}$

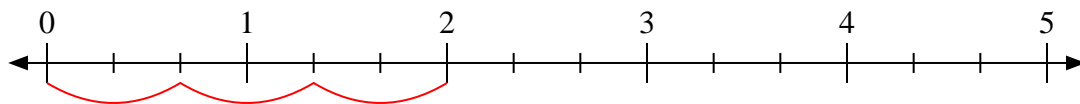


9. _____

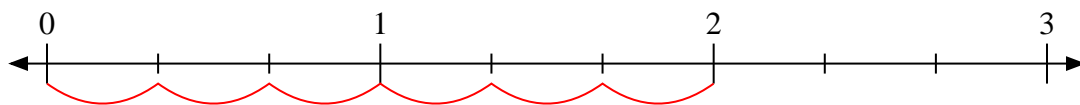


Usa la linea numerata per risolvere ogni problema.

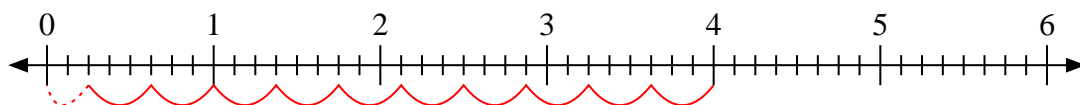
1) $2 : \frac{2}{3}$



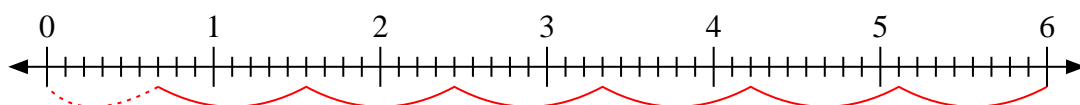
2) $2 : \frac{1}{3}$



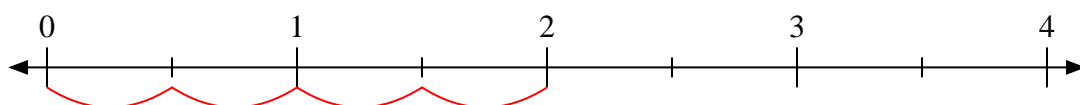
3) $4 : \frac{3}{8}$



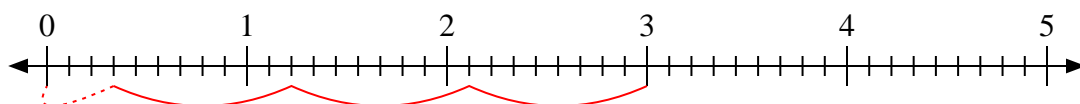
4) $6 : \frac{8}{9}$



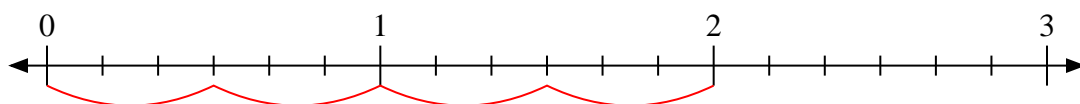
5) $2 : \frac{1}{2}$



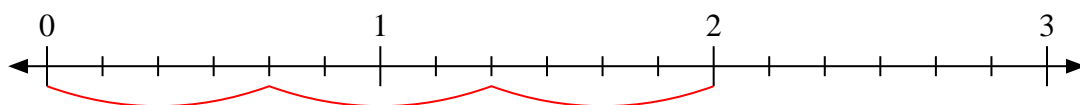
6) $3 : \frac{8}{9}$



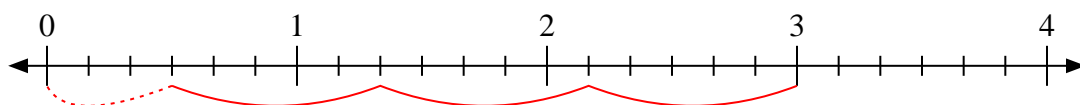
7) $2 : \frac{3}{6}$



8) $2 : \frac{4}{6}$



9) $3 : \frac{5}{6}$

**Risposte**1. 32. 63. $10 \frac{2}{3}$ 4. $6 \frac{6}{8}$ 5. 46. $3 \frac{3}{8}$ 7. 48. 39. $3 \frac{3}{5}$