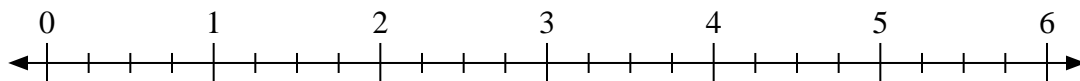


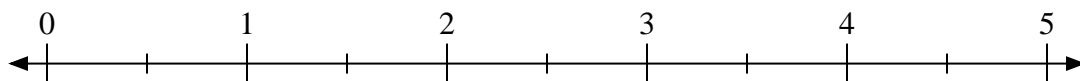


Usa la linea numerata per risolvere ogni problema.

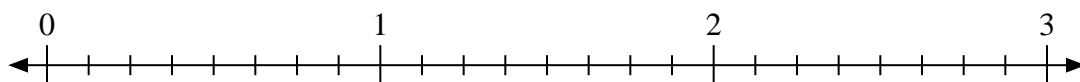
1) $6:\frac{3}{4}$



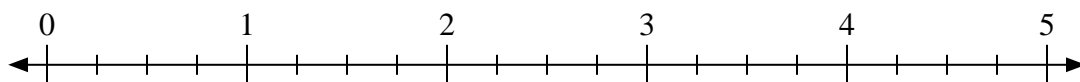
2) $5:\frac{1}{2}$



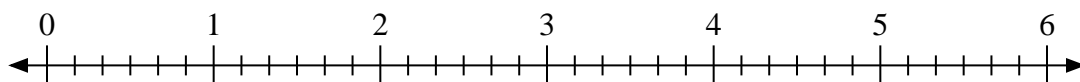
3) $3:\frac{6}{8}$



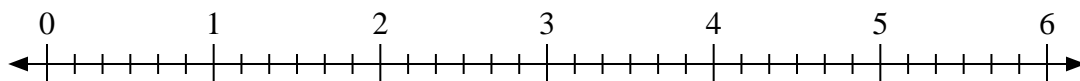
4) $3:\frac{3}{4}$



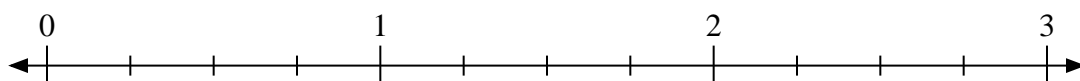
5) $6:\frac{3}{6}$




6) $5:\frac{1}{6}$



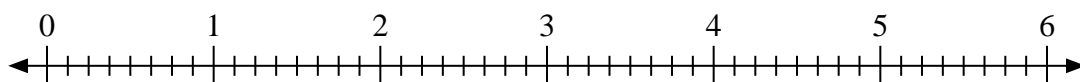
7) $3:\frac{1}{4}$



8) $3:\frac{2}{3}$



9) $3:\frac{3}{8}$



Risposte

1. _____

2. _____

3. _____

4. _____

5. _____

6. _____

7. _____

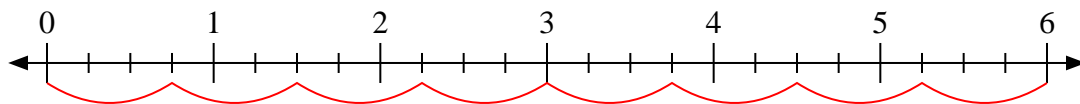
8. _____

9. _____

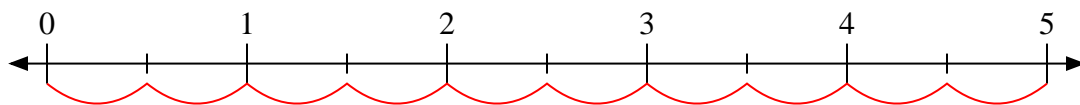


Usa la linea numerata per risolvere ogni problema.

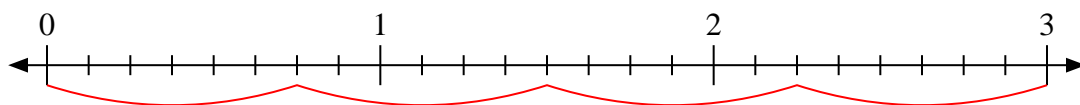
1) $6:\frac{3}{4}$



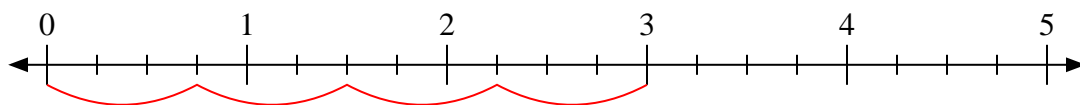
2) $5:\frac{1}{2}$



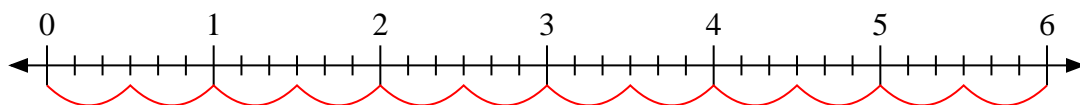
3) $3:\frac{6}{8}$



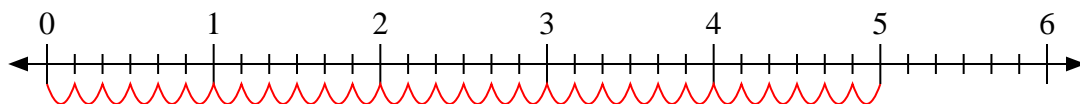
4) $3:\frac{3}{4}$



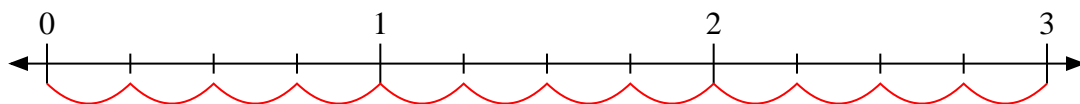
5) $6:\frac{3}{6}$



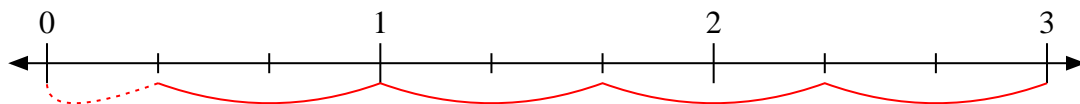
6) $5:\frac{1}{6}$



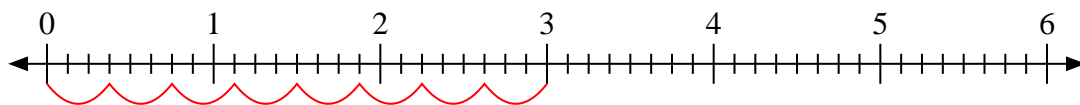
7) $3:\frac{1}{4}$



8) $3:\frac{2}{3}$



9) $3:\frac{3}{8}$

**Risposte**1. 82. 103. 44. 45. 126. 307. 128. $4\frac{1}{2}$ 9. 8