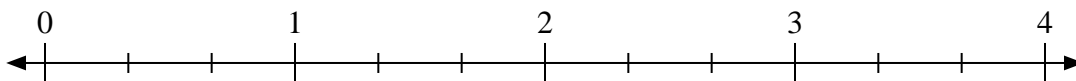




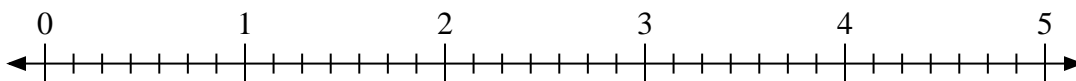
Usa la linea numerata per risolvere ogni problema.

Risposte

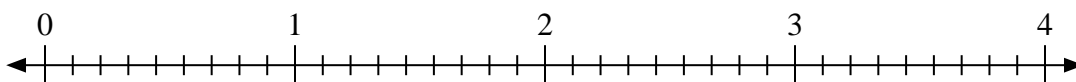
1) $2:\frac{2}{3}$



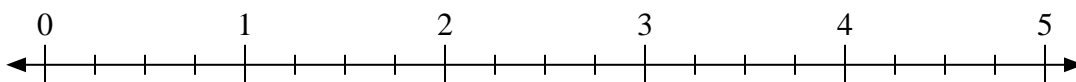
2) $4:\frac{1}{7}$



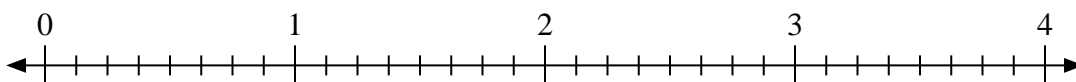
3) $3:\frac{8}{9}$



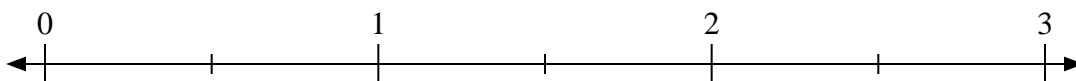
4) $4:\frac{1}{4}$



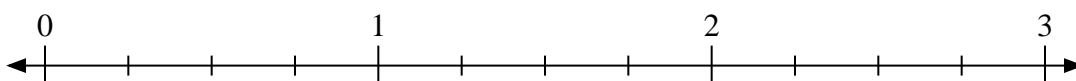
5) $4:\frac{6}{8}$



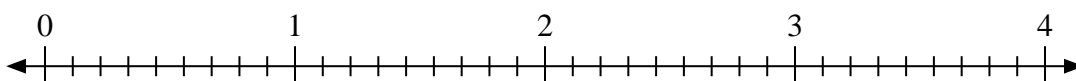
6) $3:\frac{1}{2}$



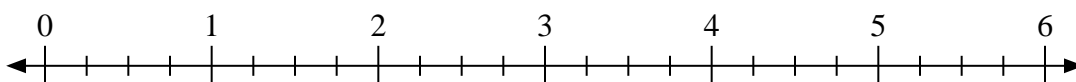
7) $2:\frac{3}{4}$



8) $2:\frac{4}{9}$



9) $4:\frac{1}{4}$



1. _____

2. _____

3. _____

4. _____

5. _____

6. _____

7. _____

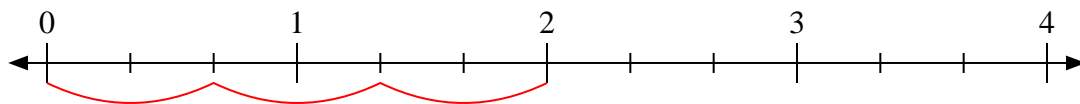
8. _____

9. _____

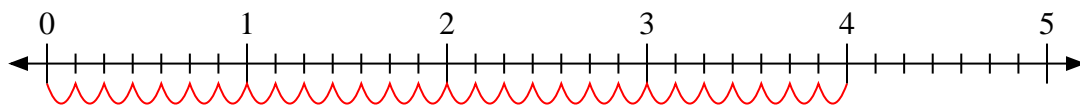


Usa la linea numerata per risolvere ogni problema.

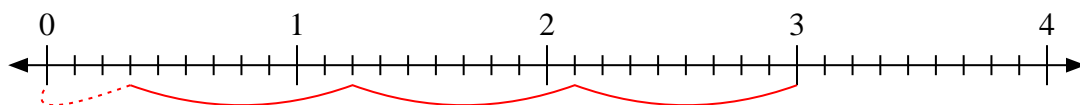
1) $2 : \frac{2}{3}$



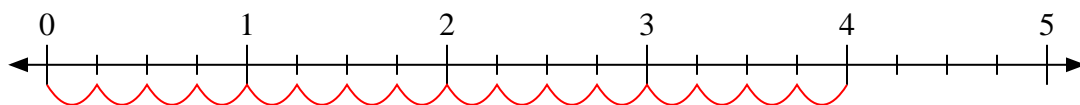
2) $4 : \frac{1}{7}$



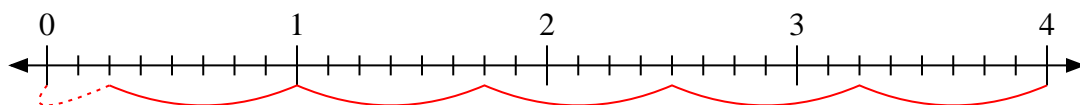
3) $3 : \frac{8}{9}$



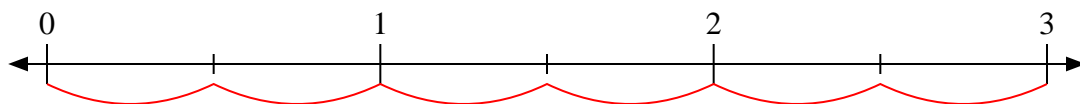
4) $4 : \frac{1}{4}$



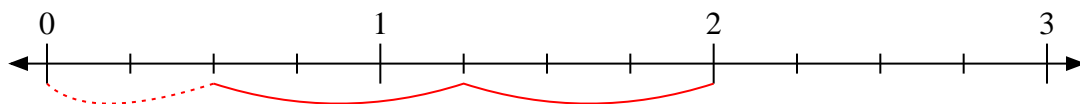
5) $4 : \frac{6}{8}$



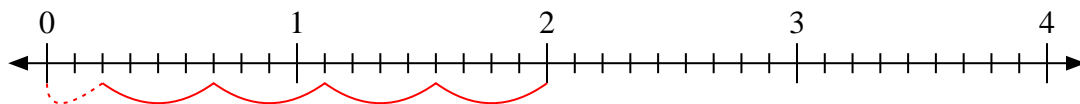
6) $3 : \frac{1}{2}$



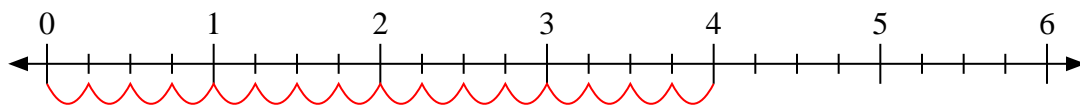
7) $2 : \frac{3}{4}$



8) $2 : \frac{4}{9}$



9) $4 : \frac{1}{4}$

**Risposte**1. 32. 283. $3 \frac{3}{8}$ 4. 165. $5 \frac{2}{6}$ 6. 67. $2 \frac{2}{3}$ 8. $4 \frac{2}{4}$ 9. 16