




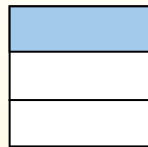
Usa lo schema per mostrare come si dividono una frazione e un numero intero.

$\frac{1}{3} \div 4 = ?$



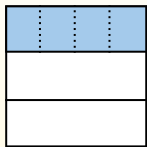
Para resolverlo, comience con un todo.

Divida el conjunto en 3 piezas y complete 1 sección.



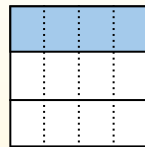
Ahora puedes ver el tamaño de $\frac{1}{3}$

Em seguida, divide a $\frac{1}{3}$ em 4 grupos.



Esto muestra el tamaño de cada pieza.

Para calcular el tamaño de cada pieza en comparación con el conjunto, divide el conjunto en 4 grupos.



Each piece is $\frac{1}{12}$ of the whole.


Or:

$\frac{1}{3} \div 4 = \frac{1}{12}$


Risposte

1. _____
2. _____
3. _____
4. _____
5. _____
6. _____
7. _____
8. _____
9. _____
10. _____
11. _____
12. _____


1) $\frac{1}{6} : 5 =$




2) $\frac{1}{7} : 9 =$




3) $\frac{1}{4} : 9 =$




4) $\frac{1}{8} : 7 =$



5) $\frac{1}{4} : 7 =$




6) $\frac{1}{6} : 7 =$




7) $\frac{1}{5} : 5 =$




8) $\frac{1}{9} : 9 =$



9) $\frac{1}{8} : 4 =$



10) $\frac{1}{6} : 6 =$



11) $\frac{1}{2} : 3 =$




12) $\frac{1}{3} : 2 =$





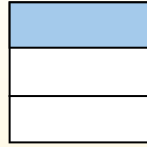
Usa lo schema per mostrare come si dividono una frazione e un numero intero.

$\frac{1}{3} \div 4 = ?$



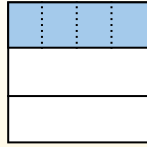
Para resolverlo, comience con un todo.

Divida el conjunto en 3 piezas y complete 1 sección.



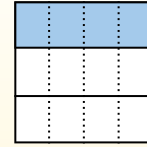
Ahora puedes ver el tamaño de $\frac{1}{3}$

Em seguida, divide a $\frac{1}{3}$ em 4 grupos.



Esto muestra el tamaño de cada pieza.

Para calcular el tamaño de cada pieza en comparación con el conjunto, divide el conjunto en 4 grupos.



Each piece is $\frac{1}{12}$ of the whole.

Or:
 $\frac{1}{3} \div 4 = \frac{1}{12}$

Risposte

1. $\frac{1}{30}$

2. $\frac{1}{63}$

3. $\frac{1}{36}$

4. $\frac{1}{56}$

5. $\frac{1}{28}$

6. $\frac{1}{42}$

7. $\frac{1}{25}$

8. $\frac{1}{81}$

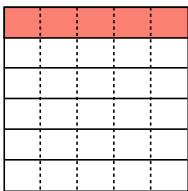
9. $\frac{1}{32}$

10. $\frac{1}{36}$

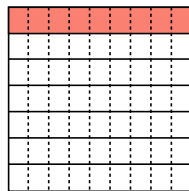
11. $\frac{1}{6}$

12. $\frac{1}{6}$

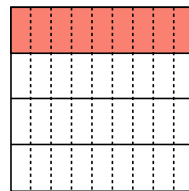
1) $\frac{1}{6} : 5 =$



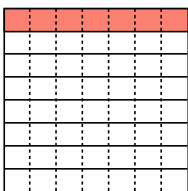
2) $\frac{1}{7} : 9 =$



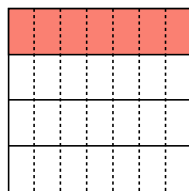
3) $\frac{1}{4} : 9 =$



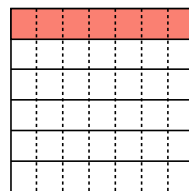
4) $\frac{1}{8} : 7 =$



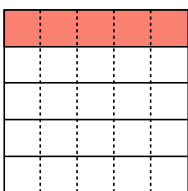
5) $\frac{1}{4} : 7 =$



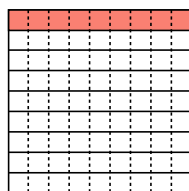
6) $\frac{1}{6} : 7 =$



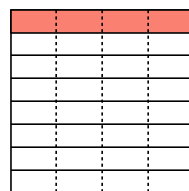
7) $\frac{1}{5} : 5 =$



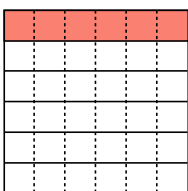
8) $\frac{1}{9} : 9 =$



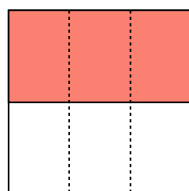
9) $\frac{1}{8} : 4 =$



10) $\frac{1}{6} : 6 =$



11) $\frac{1}{2} : 3 =$



12) $\frac{1}{3} : 2 =$

