




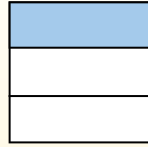
Usa lo schema per mostrare come si dividono una frazione e un numero intero.

$$\frac{1}{3} \div 4 = ?$$



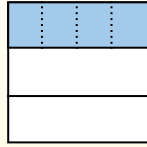
Para resolverlo, comience con un todo.

Divida el conjunto en 3 piezas y complete 1 sección.



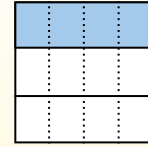
Ahora puedes ver el tamaño de  $\frac{1}{3}$

Em seguida, divide a  $\frac{1}{3}$  em 4 grupos.



Esto muestra el tamaño de cada pieza.

Para calcular el tamaño de cada pieza en comparación con el conjunto, divide el conjunto en 4 grupos.



Each piece is  $\frac{1}{12}$  of the whole.


Or:

$$\frac{1}{3} \div 4 = \frac{1}{12}$$

**Risposte**

1. \_\_\_\_\_
2. \_\_\_\_\_
3. \_\_\_\_\_
4. \_\_\_\_\_
5. \_\_\_\_\_
6. \_\_\_\_\_
7. \_\_\_\_\_
8. \_\_\_\_\_
9. \_\_\_\_\_
10. \_\_\_\_\_
11. \_\_\_\_\_
12. \_\_\_\_\_


1)  $\frac{1}{3} : 3 =$




2)  $\frac{1}{6} : 7 =$




3)  $\frac{1}{8} : 6 =$




4)  $\frac{1}{4} : 4 =$




5)  $\frac{1}{6} : 5 =$



6)  $\frac{1}{2} : 4 =$




7)  $\frac{1}{2} : 3 =$




8)  $\frac{1}{9} : 4 =$




9)  $\frac{1}{9} : 3 =$




10)  $\frac{1}{3} : 2 =$



11)  $\frac{1}{3} : 5 =$




12)  $\frac{1}{8} : 9 =$





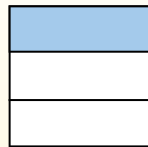
Usa lo schema per mostrare come si dividono una frazione e un numero intero.

$\frac{1}{3} \div 4 = ?$



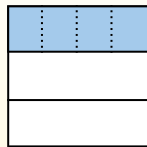
Para resolverlo, comience con un todo.

Divida el conjunto en 3 piezas y complete 1 sección.



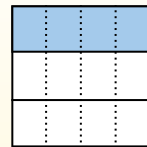
Ahora puedes ver el tamaño de  $\frac{1}{3}$

Em seguida, divide a  $\frac{1}{3}$  em 4 grupos.



Esto muestra el tamaño de cada pieza.

Para calcular el tamaño de cada pieza en comparación con el conjunto, divide el conjunto en 4 grupos.



Each piece is  $\frac{1}{12}$  of the whole.

Or:

$\frac{1}{3} \div 4 = \frac{1}{12}$

**Risposte**

1.  $\frac{1}{9}$

2.  $\frac{1}{42}$

3.  $\frac{1}{48}$

4.  $\frac{1}{16}$

5.  $\frac{1}{30}$

6.  $\frac{1}{8}$

7.  $\frac{1}{6}$

8.  $\frac{1}{36}$

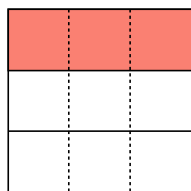
9.  $\frac{1}{27}$

10.  $\frac{1}{6}$

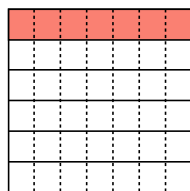
11.  $\frac{1}{15}$

12.  $\frac{1}{72}$

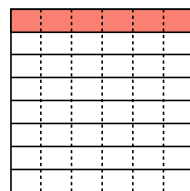
1)  $\frac{1}{3} : 3 =$



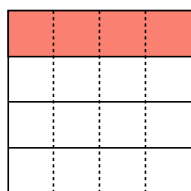
2)  $\frac{1}{6} : 7 =$



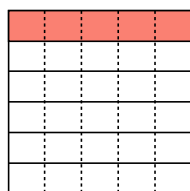
3)  $\frac{1}{8} : 6 =$



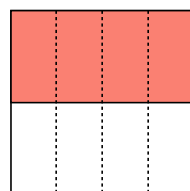
4)  $\frac{1}{4} : 4 =$



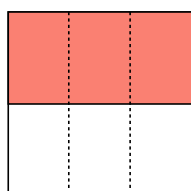
5)  $\frac{1}{6} : 5 =$



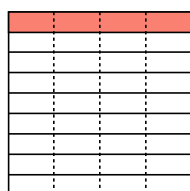
6)  $\frac{1}{2} : 4 =$



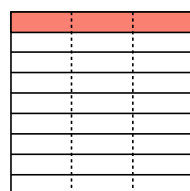
7)  $\frac{1}{2} : 3 =$



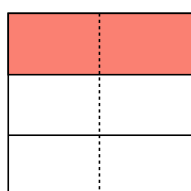
8)  $\frac{1}{9} : 4 =$



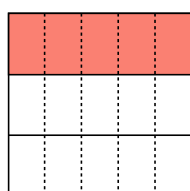
9)  $\frac{1}{9} : 3 =$



10)  $\frac{1}{3} : 2 =$



11)  $\frac{1}{3} : 5 =$



12)  $\frac{1}{8} : 9 =$

