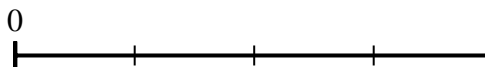
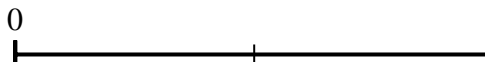




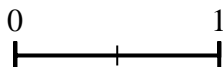
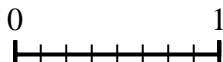
Usa le linee numerate per rispondere alle domande.

Risposte

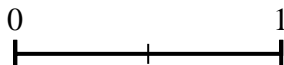

- 1) Secondo la linea numerica mostrata, qual è la frazione equivalente di $\frac{2}{2}$?



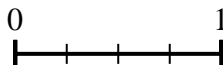
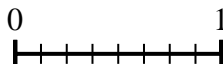
- 2) Secondo la linea numerica mostrata, qual è la frazione equivalente di $\frac{4}{8}$?





- 3) Secondo la linea numerica mostrata, qual è la frazione equivalente di $\frac{8}{8}$?




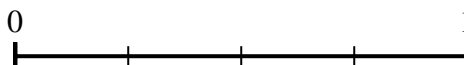
- 4) Secondo la linea numerica mostrata, qual è la frazione equivalente di $\frac{8}{4}$?





- 5) Secondo la linea numerica mostrata, qual è la frazione equivalente di $\frac{0}{2}$?




- 6) Secondo la linea numerica mostrata, qual è la frazione equivalente di $\frac{2}{4}$?



- 7) Secondo la linea numerica mostrata, qual è la frazione equivalente di $\frac{3}{6}$?



- 8) Secondo la linea numerica mostrata, qual è la frazione equivalente di $\frac{2}{3}$?

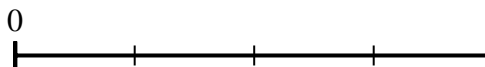
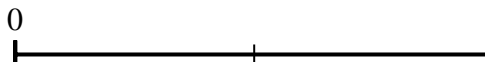


1. _____
2. _____
3. _____
4. _____
5. _____
6. _____
7. _____
8. _____

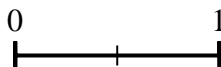



Usa le linee numerate per rispondere alle domande.

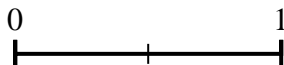

- 1) Secondo la linea numerica mostrata, qual è la frazione equivalente di $\frac{2}{2}$?



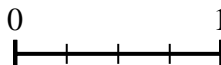
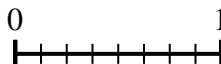
- 2) Secondo la linea numerica mostrata, qual è la frazione equivalente di $\frac{4}{8}$?





- 3) Secondo la linea numerica mostrata, qual è la frazione equivalente di $\frac{8}{8}$?




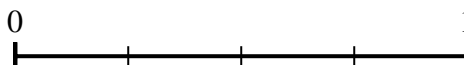
- 4) Secondo la linea numerica mostrata, qual è la frazione equivalente di $\frac{8}{8}$?



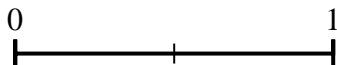
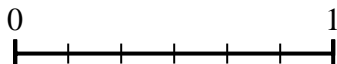
- 5) Secondo la linea numerica mostrata, qual è la frazione equivalente di $\frac{0}{2}$?



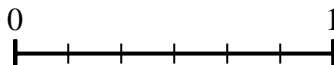
- 6) Secondo la linea numerica mostrata, qual è la frazione equivalente di $\frac{2}{4}$?



- 7) Secondo la linea numerica mostrata, qual è la frazione equivalente di $\frac{3}{6}$?



- 8) Secondo la linea numerica mostrata, qual è la frazione equivalente di $\frac{2}{3}$?

**Risposte**

1. $\frac{4}{4}$

2. $\frac{1}{2}$

3. $\frac{2}{2}$

4. $\frac{4}{4}$

5. $\frac{0}{6}$

6. $\frac{4}{8}$

7. $\frac{1}{2}$

8. $\frac{4}{6}$