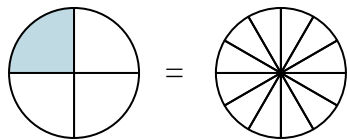


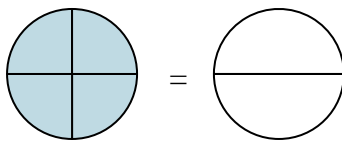


Colora la rappresentazione grafica per trovare la frazione equivalente.

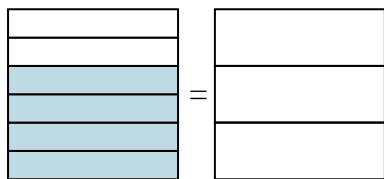
Es)  $\frac{1}{4} = \frac{3}{12}$



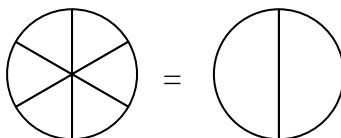
1)  $\frac{4}{4} =$



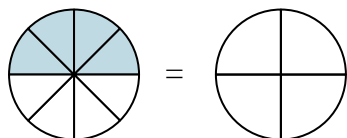
2)  $\frac{4}{6} =$



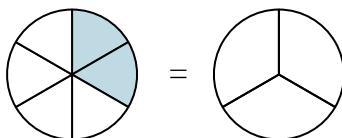
3)  $\frac{0}{6} =$



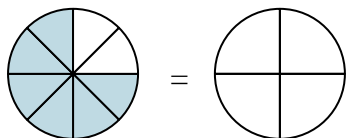
4)  $\frac{4}{8} =$



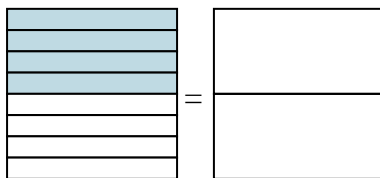
5)  $\frac{2}{6} =$



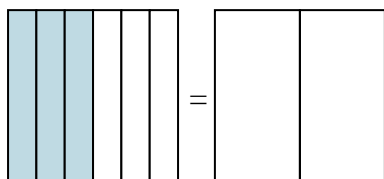
6)  $\frac{6}{8} =$



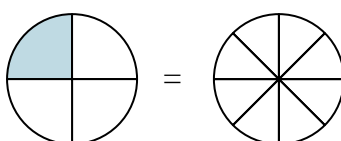
7)  $\frac{4}{8} =$



8)  $\frac{3}{6} =$



9)  $\frac{1}{4} =$



**Risposte**

Es.  $\frac{3}{12}$

1. \_\_\_\_\_

2. \_\_\_\_\_

3. \_\_\_\_\_

4. \_\_\_\_\_

5. \_\_\_\_\_

6. \_\_\_\_\_

7. \_\_\_\_\_

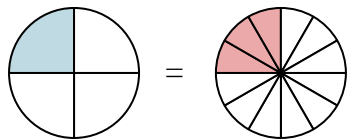
8. \_\_\_\_\_

9. \_\_\_\_\_

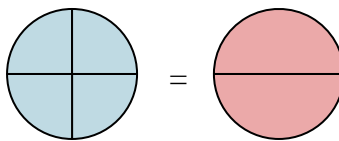


Colora la rappresentazione grafica per trovare la frazione equivalente.

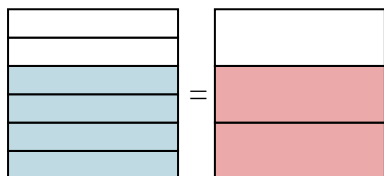
Es)  $\frac{1}{4} = \frac{3}{12}$



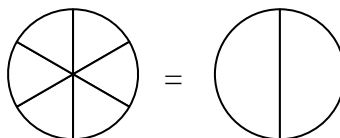
1)  $\frac{4}{4} = \frac{2}{2}$



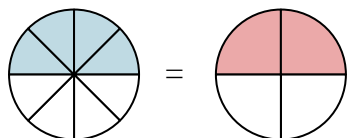
2)  $\frac{4}{6} = \frac{2}{3}$



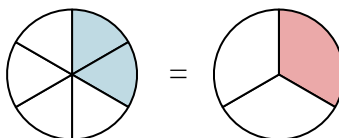
3)  $\frac{0}{6} = \frac{0}{2}$



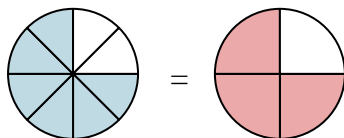
4)  $\frac{4}{8} = \frac{2}{4}$



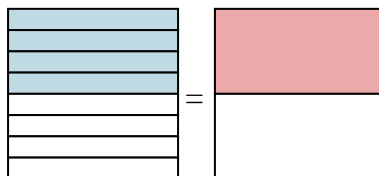
5)  $\frac{2}{6} = \frac{1}{3}$



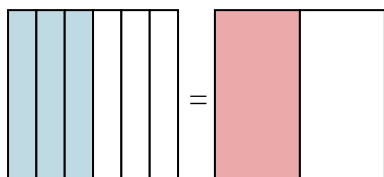
6)  $\frac{6}{8} = \frac{3}{4}$



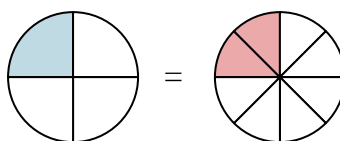
7)  $\frac{4}{8} = \frac{1}{2}$



8)  $\frac{3}{6} = \frac{1}{2}$



9)  $\frac{1}{4} = \frac{2}{8}$

**Risposte**

Es.  $\frac{3}{12}$

1.  $\frac{2}{2}$

2.  $\frac{2}{3}$

3.  $\frac{0}{2}$

4.  $\frac{2}{4}$

5.  $\frac{1}{3}$

6.  $\frac{3}{4}$

7.  $\frac{1}{2}$

8.  $\frac{1}{2}$

9.  $\frac{2}{8}$