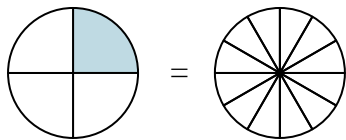


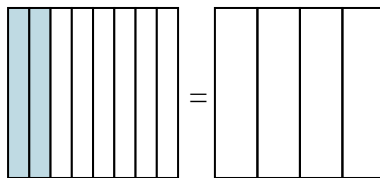


Colora la rappresentazione grafica per trovare la frazione equivalente.

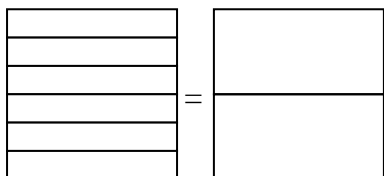
Es)  $\frac{1}{4} = \frac{3}{12}$



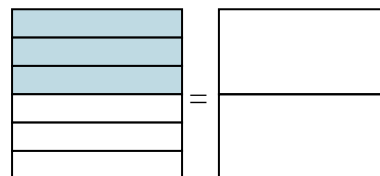
1)  $\frac{2}{8} =$



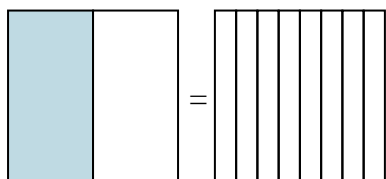
2)  $\frac{0}{6} =$



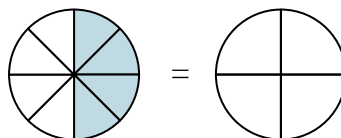
3)  $\frac{3}{6} =$



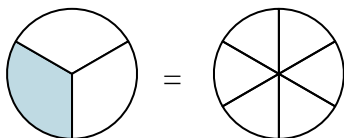
4)  $\frac{1}{2} =$



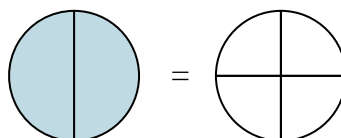
5)  $\frac{4}{8} =$



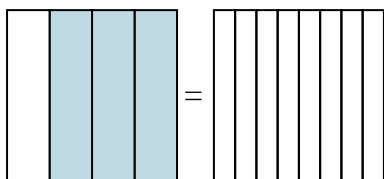
6)  $\frac{1}{3} =$



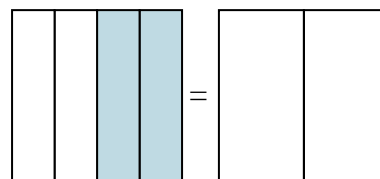
7)  $\frac{2}{2} =$



8)  $\frac{3}{4} =$



9)  $\frac{2}{4} =$

**Risposte**Es.  $\frac{3}{12}$ 

1. \_\_\_\_\_

2. \_\_\_\_\_

3. \_\_\_\_\_

4. \_\_\_\_\_

5. \_\_\_\_\_

6. \_\_\_\_\_

7. \_\_\_\_\_

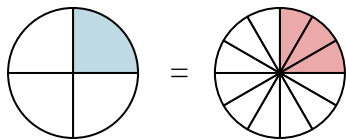
8. \_\_\_\_\_

9. \_\_\_\_\_

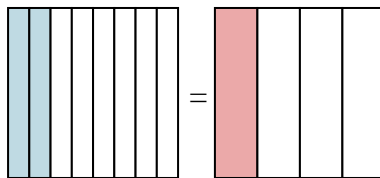


Colora la rappresentazione grafica per trovare la frazione equivalente.

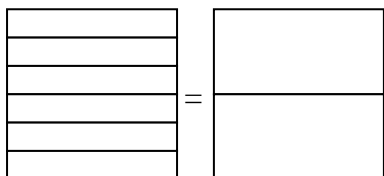
Es)  $\frac{1}{4} = \frac{3}{12}$



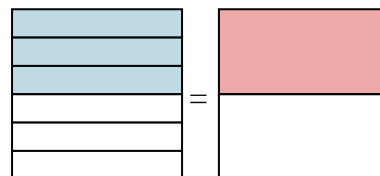
1)  $\frac{2}{8} = \frac{1}{4}$



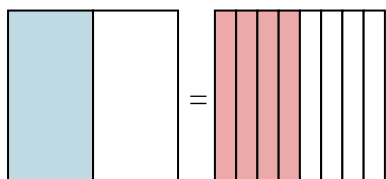
2)  $\frac{0}{6} = \frac{0}{2}$



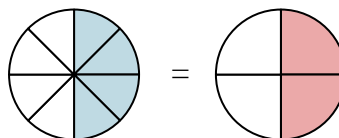
3)  $\frac{3}{6} = \frac{1}{2}$



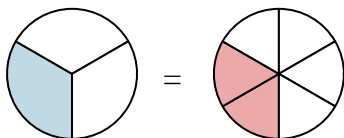
4)  $\frac{1}{2} = \frac{4}{8}$



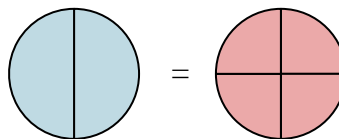
5)  $\frac{4}{8} = \frac{2}{4}$



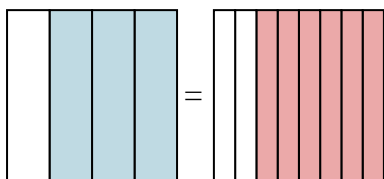
6)  $\frac{1}{3} = \frac{2}{6}$



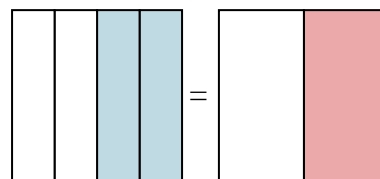
7)  $\frac{2}{2} = \frac{4}{4}$



8)  $\frac{3}{4} = \frac{6}{8}$



9)  $\frac{2}{4} = \frac{1}{2}$

**Risposte**

Es.  $\frac{3}{12}$

1.  $\frac{1}{4}$

2.  $\frac{0}{2}$

3.  $\frac{1}{2}$

4.  $\frac{4}{8}$

5.  $\frac{2}{4}$

6.  $\frac{2}{6}$

7.  $\frac{4}{4}$

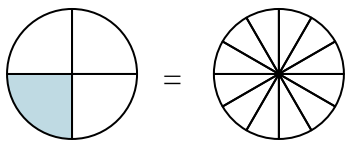
8.  $\frac{6}{8}$

9.  $\frac{1}{2}$

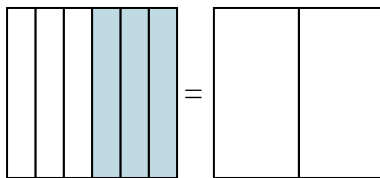


Colora la rappresentazione grafica per trovare la frazione equivalente.

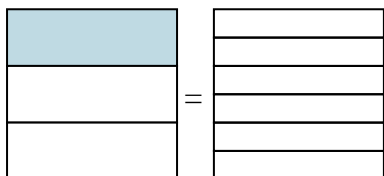
Es)  $\frac{1}{4} = \frac{3}{12}$



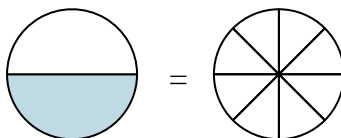
1)  $\frac{3}{6} =$



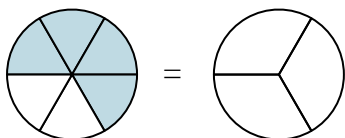
2)  $\frac{1}{3} =$



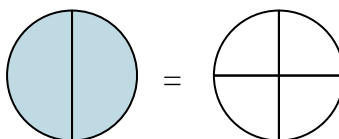
3)  $\frac{1}{2} =$



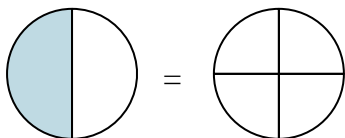
4)  $\frac{4}{6} =$



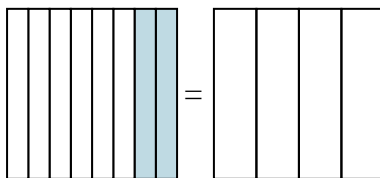
5)  $\frac{2}{2} =$



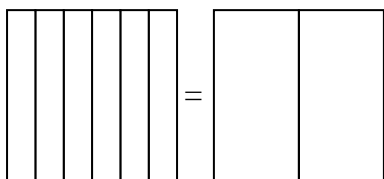
6)  $\frac{1}{2} =$



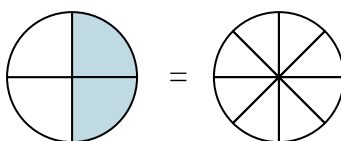
7)  $\frac{2}{8} =$



8)  $\frac{0}{6} =$



9)  $\frac{2}{4} =$

**Risposte**Es.  $\frac{3}{12}$ 

1. \_\_\_\_\_

2. \_\_\_\_\_

3. \_\_\_\_\_

4. \_\_\_\_\_

5. \_\_\_\_\_

6. \_\_\_\_\_

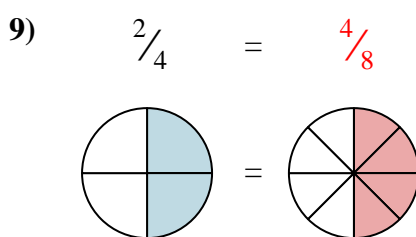
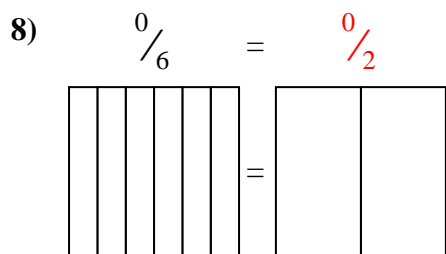
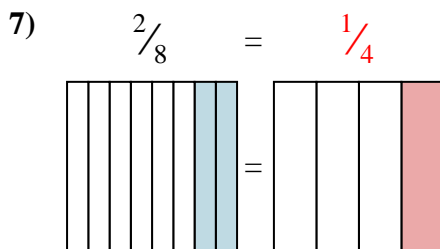
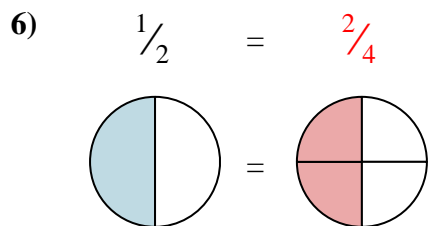
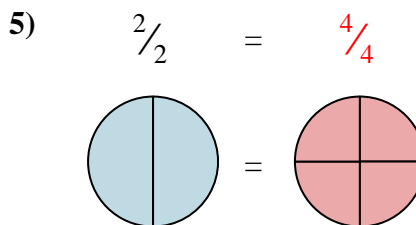
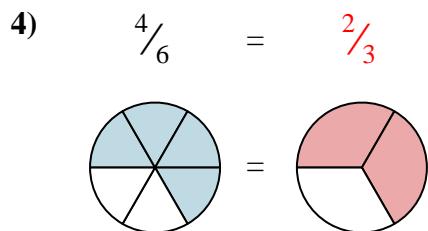
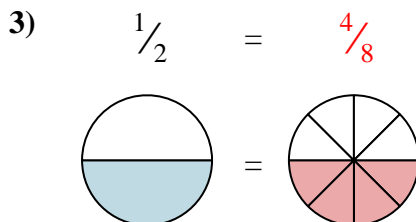
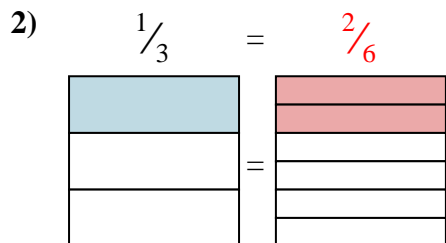
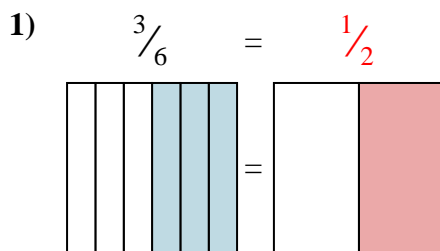
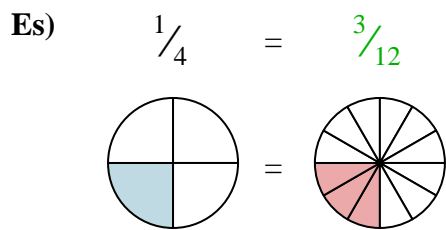
7. \_\_\_\_\_

8. \_\_\_\_\_

9. \_\_\_\_\_



Colora la rappresentazione grafica per trovare la frazione equivalente.



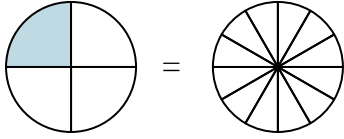
**Risposte**

- Es.  $\frac{3}{12}$
1.  $\frac{1}{2}$
2.  $\frac{2}{6}$
3.  $\frac{4}{8}$
4.  $\frac{2}{3}$
5.  $\frac{4}{4}$
6.  $\frac{2}{4}$
7.  $\frac{1}{4}$
8.  $\frac{0}{2}$
9.  $\frac{4}{8}$

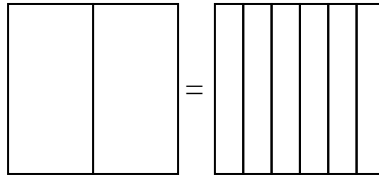


Colora la rappresentazione grafica per trovare la frazione equivalente.

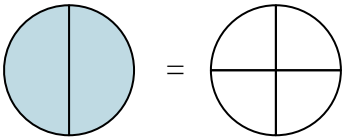
Es)  $\frac{1}{4} = \frac{3}{12}$



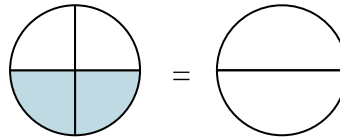
1)  $\frac{0}{2} =$



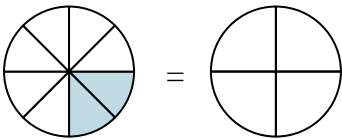
2)  $\frac{2}{2} =$



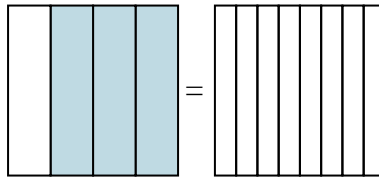
3)  $\frac{2}{4} =$



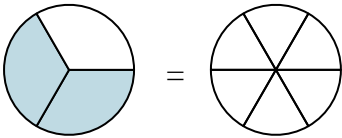
4)  $\frac{2}{8} =$



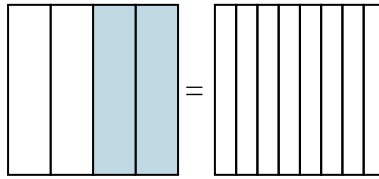
5)  $\frac{3}{4} =$



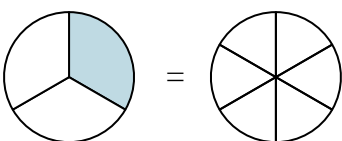
6)  $\frac{2}{3} =$



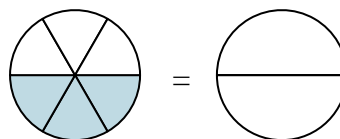
7)  $\frac{2}{4} =$



8)  $\frac{1}{3} =$



9)  $\frac{3}{6} =$

**Risposte**Es.  $\frac{3}{12}$ 

1. \_\_\_\_\_

2. \_\_\_\_\_

3. \_\_\_\_\_

4. \_\_\_\_\_

5. \_\_\_\_\_

6. \_\_\_\_\_

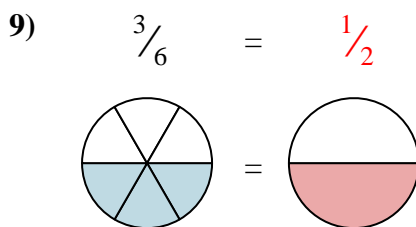
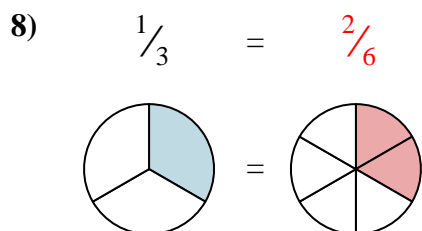
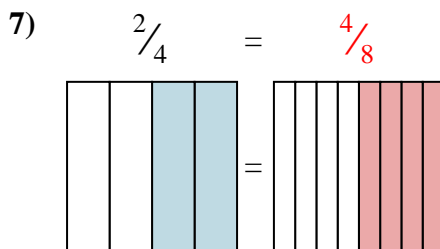
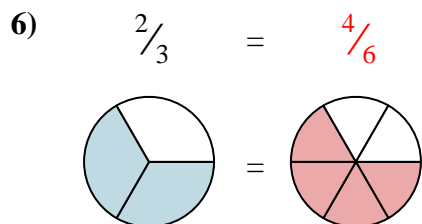
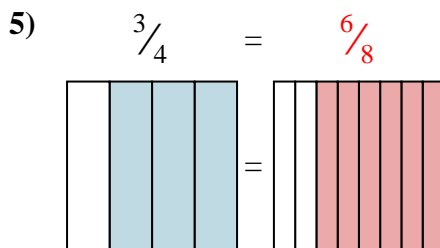
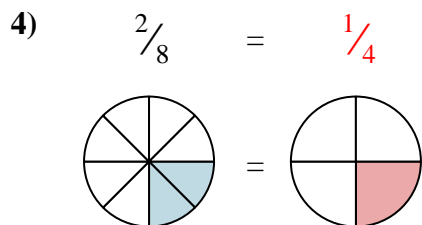
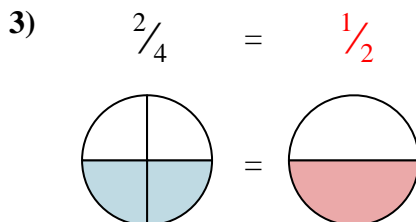
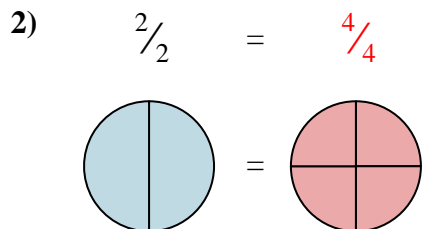
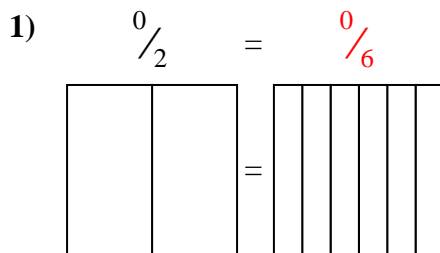
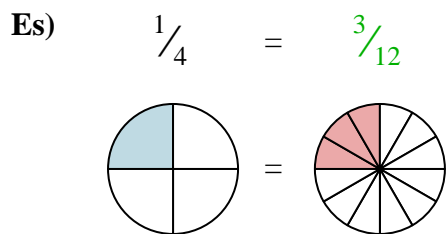
7. \_\_\_\_\_

8. \_\_\_\_\_

9. \_\_\_\_\_



Colora la rappresentazione grafica per trovare la frazione equivalente.

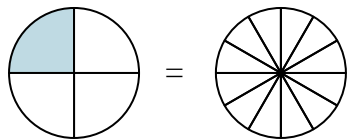
**Risposte**

- Es.  $\frac{3}{12}$
1.  $\frac{0}{6}$
2.  $\frac{4}{4}$
3.  $\frac{1}{2}$
4.  $\frac{1}{4}$
5.  $\frac{6}{8}$
6.  $\frac{4}{6}$
7.  $\frac{4}{8}$
8.  $\frac{2}{6}$
9.  $\frac{1}{2}$

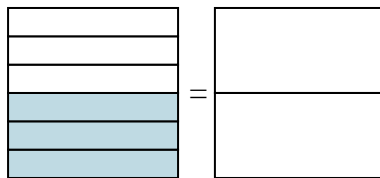


Colora la rappresentazione grafica per trovare la frazione equivalente.

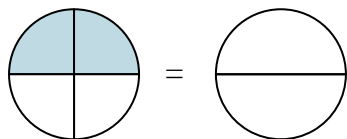
Es)  $\frac{1}{4} = \frac{3}{12}$



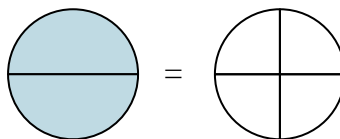
1)  $\frac{3}{6} =$



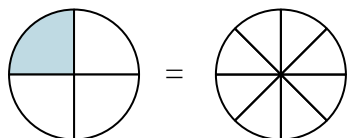
2)  $\frac{2}{4} =$



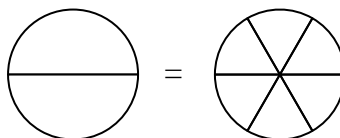
3)  $\frac{2}{2} =$



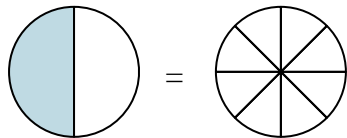
4)  $\frac{1}{4} =$



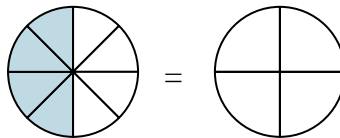
5)  $\frac{0}{2} =$



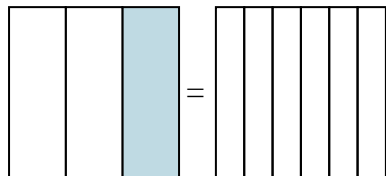
6)  $\frac{1}{2} =$



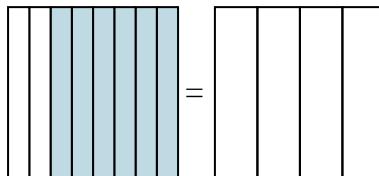
7)  $\frac{4}{8} =$



8)  $\frac{1}{3} =$



9)  $\frac{6}{8} =$



**Risposte**

Es.  $\frac{3}{12}$

1. \_\_\_\_\_

2. \_\_\_\_\_

3. \_\_\_\_\_

4. \_\_\_\_\_

5. \_\_\_\_\_

6. \_\_\_\_\_

7. \_\_\_\_\_

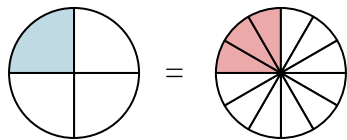
8. \_\_\_\_\_

9. \_\_\_\_\_

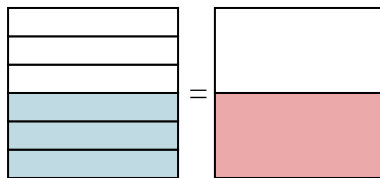


Colora la rappresentazione grafica per trovare la frazione equivalente.

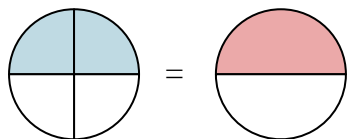
Es)  $\frac{1}{4} = \frac{3}{12}$



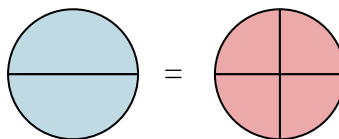
1)  $\frac{3}{6} = \frac{1}{2}$



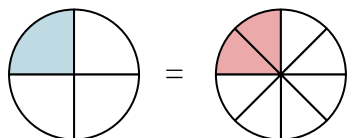
2)  $\frac{2}{4} = \frac{1}{2}$



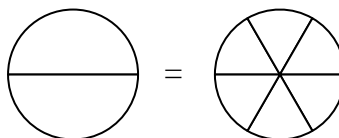
3)  $\frac{2}{2} = \frac{4}{4}$



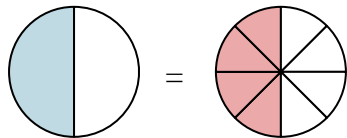
4)  $\frac{1}{4} = \frac{2}{8}$



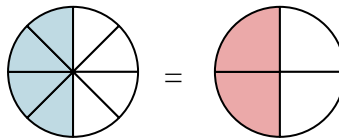
5)  $\frac{0}{2} = \frac{0}{6}$



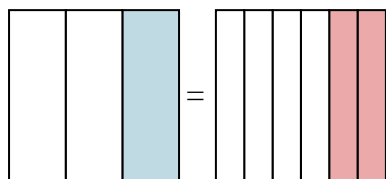
6)  $\frac{1}{2} = \frac{4}{8}$



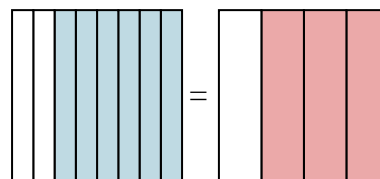
7)  $\frac{4}{8} = \frac{2}{4}$



8)  $\frac{1}{3} = \frac{2}{6}$



9)  $\frac{6}{8} = \frac{3}{4}$

**Risposte**

Es.  $\frac{3}{12}$

1.  $\frac{1}{2}$

2.  $\frac{1}{2}$

3.  $\frac{4}{4}$

4.  $\frac{2}{8}$

5.  $\frac{0}{6}$

6.  $\frac{4}{8}$

7.  $\frac{2}{4}$

8.  $\frac{2}{6}$

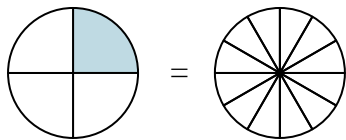
9.  $\frac{3}{4}$



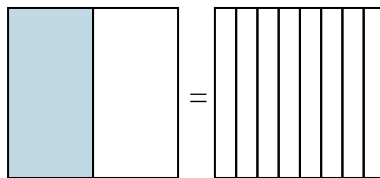


Colora la rappresentazione grafica per trovare la frazione equivalente.

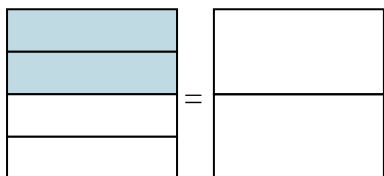
Es)  $\frac{1}{4} = \frac{3}{12}$



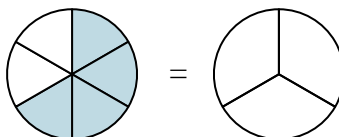
1)  $\frac{1}{2} =$



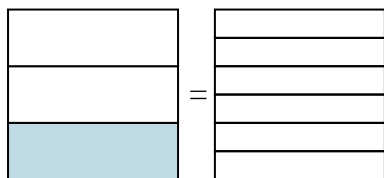
2)  $\frac{2}{4} =$



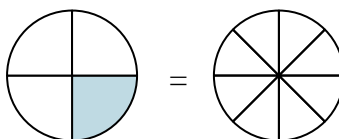
3)  $\frac{4}{6} =$



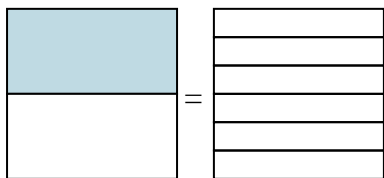
4)  $\frac{1}{3} =$



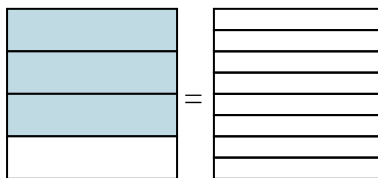
5)  $\frac{1}{4} =$



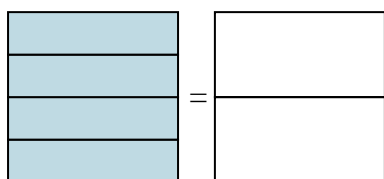
6)  $\frac{1}{2} =$



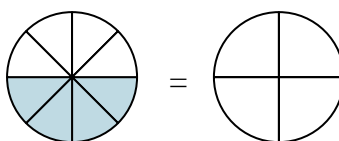
7)  $\frac{3}{4} =$



8)  $\frac{4}{4} =$



9)  $\frac{4}{8} =$



**Risposte**

Es.  $\frac{3}{12}$

1. \_\_\_\_\_

2. \_\_\_\_\_

3. \_\_\_\_\_

4. \_\_\_\_\_

5. \_\_\_\_\_

6. \_\_\_\_\_

7. \_\_\_\_\_

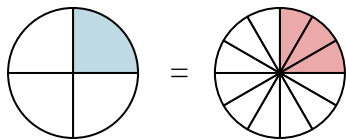
8. \_\_\_\_\_

9. \_\_\_\_\_

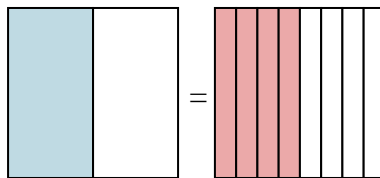


Colora la rappresentazione grafica per trovare la frazione equivalente.

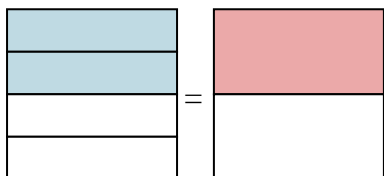
Es)  $\frac{1}{4} = \frac{3}{12}$



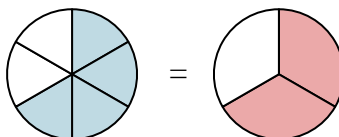
1)  $\frac{1}{2} = \frac{4}{8}$



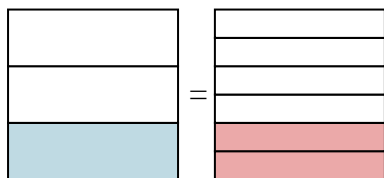
2)  $\frac{2}{4} = \frac{1}{2}$



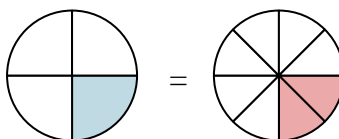
3)  $\frac{4}{6} = \frac{2}{3}$



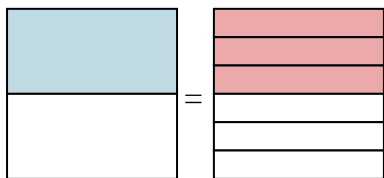
4)  $\frac{1}{3} = \frac{2}{6}$



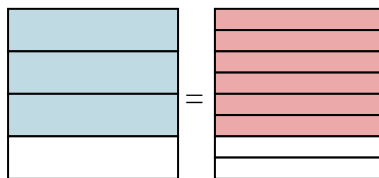
5)  $\frac{1}{4} = \frac{2}{8}$



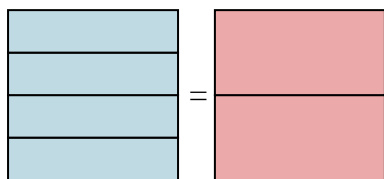
6)  $\frac{1}{2} = \frac{3}{6}$



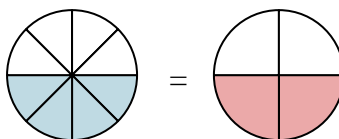
7)  $\frac{3}{4} = \frac{6}{8}$



8)  $\frac{4}{4} = \frac{2}{2}$



9)  $\frac{4}{8} = \frac{2}{4}$

**Risposte**

Es.  $\frac{3}{12}$

1.  $\frac{4}{8}$

2.  $\frac{1}{2}$

3.  $\frac{2}{3}$

4.  $\frac{2}{6}$

5.  $\frac{2}{8}$

6.  $\frac{3}{6}$

7.  $\frac{6}{8}$

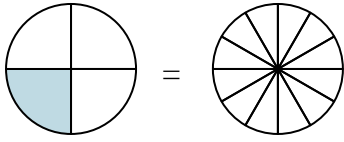
8.  $\frac{2}{2}$

9.  $\frac{2}{4}$

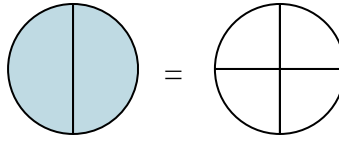


Colora la rappresentazione grafica per trovare la frazione equivalente.

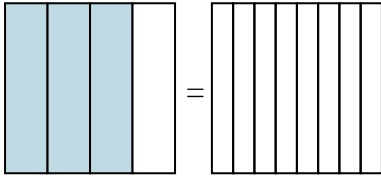
Es)  $\frac{1}{4} = \frac{3}{12}$



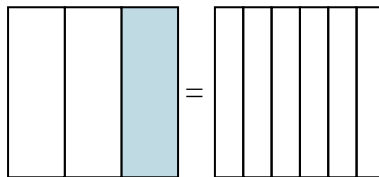
1)  $\frac{2}{2} =$



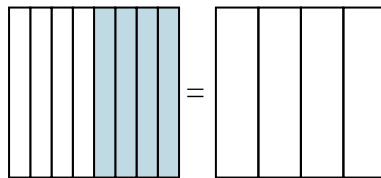
2)  $\frac{3}{4} =$



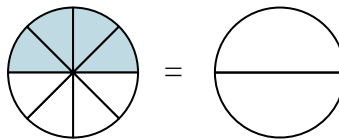
3)  $\frac{1}{3} =$



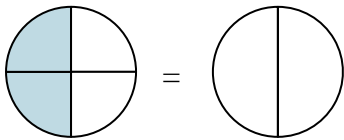
4)  $\frac{4}{8} =$



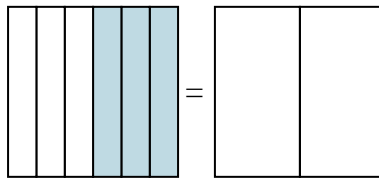
5)  $\frac{4}{8} =$



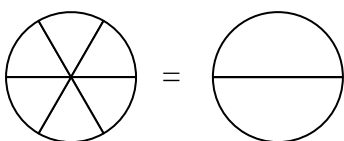
6)  $\frac{2}{4} =$



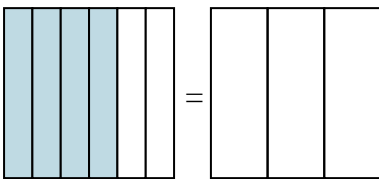
7)  $\frac{3}{6} =$



8)  $\frac{0}{6} =$



9)  $\frac{4}{6} =$



**Risposte**

Es.  $\frac{3}{12}$

1. \_\_\_\_\_

2. \_\_\_\_\_

3. \_\_\_\_\_

4. \_\_\_\_\_

5. \_\_\_\_\_

6. \_\_\_\_\_

7. \_\_\_\_\_

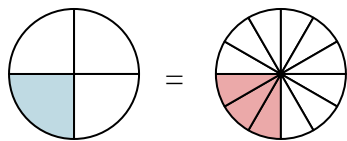
8. \_\_\_\_\_

9. \_\_\_\_\_

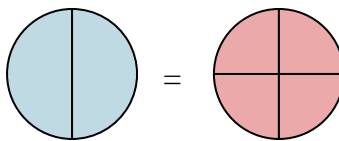


Colora la rappresentazione grafica per trovare la frazione equivalente.

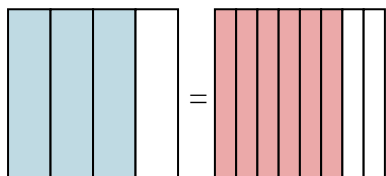
Es)  $\frac{1}{4} = \frac{3}{12}$



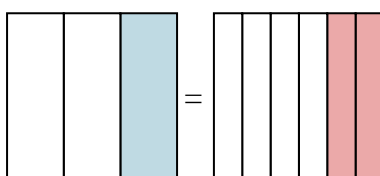
1)  $\frac{2}{2} = \frac{4}{4}$



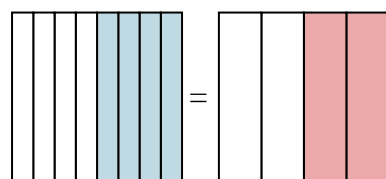
2)  $\frac{3}{4} = \frac{6}{8}$



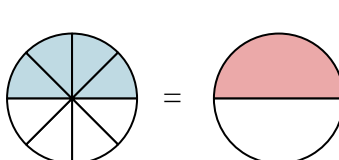
3)  $\frac{1}{3} = \frac{2}{6}$



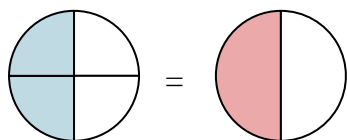
4)  $\frac{4}{8} = \frac{2}{4}$



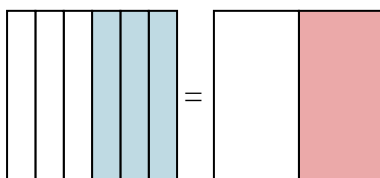
5)  $\frac{4}{8} = \frac{1}{2}$



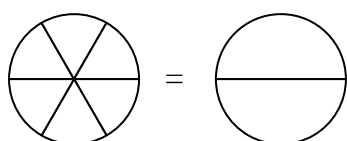
6)  $\frac{2}{4} = \frac{1}{2}$



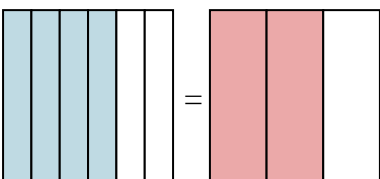
7)  $\frac{3}{6} = \frac{1}{2}$



8)  $\frac{0}{6} = \frac{0}{2}$



9)  $\frac{4}{6} = \frac{2}{3}$

**Risposte**

Es.  $\frac{3}{12}$

1.  $\frac{4}{4}$

2.  $\frac{6}{8}$

3.  $\frac{2}{6}$

4.  $\frac{2}{4}$

5.  $\frac{1}{2}$

6.  $\frac{1}{2}$

7.  $\frac{1}{2}$

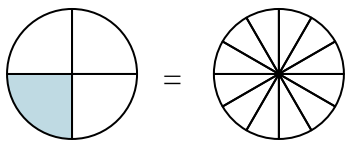
8.  $\frac{0}{2}$

9.  $\frac{2}{3}$

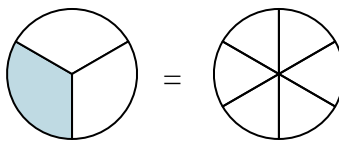


Colora la rappresentazione grafica per trovare la frazione equivalente.

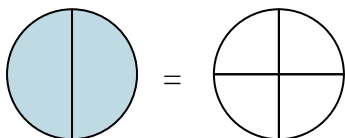
Es)  $\frac{1}{4} = \frac{3}{12}$



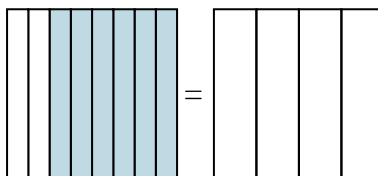
1)  $\frac{1}{3} =$



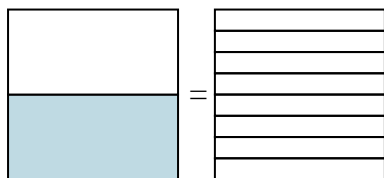
2)  $\frac{2}{2} =$



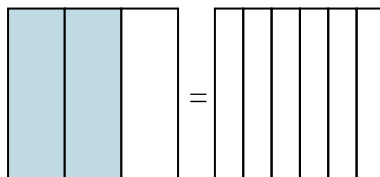
3)  $\frac{6}{8} =$



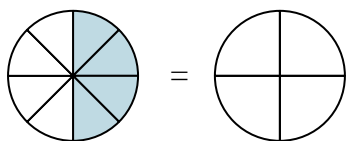
4)  $\frac{1}{2} =$



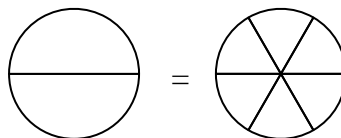
5)  $\frac{2}{3} =$



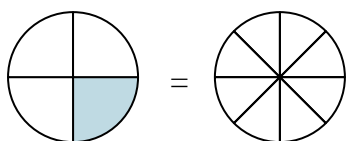
6)  $\frac{4}{8} =$



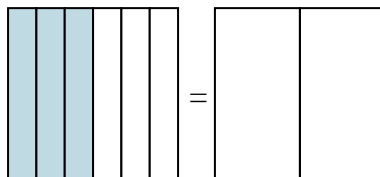
7)  $\frac{0}{2} =$



8)  $\frac{1}{4} =$



9)  $\frac{3}{6} =$

**Risposte**Es.  $\frac{3}{12}$ 

1. \_\_\_\_\_

2. \_\_\_\_\_

3. \_\_\_\_\_

4. \_\_\_\_\_

5. \_\_\_\_\_

6. \_\_\_\_\_

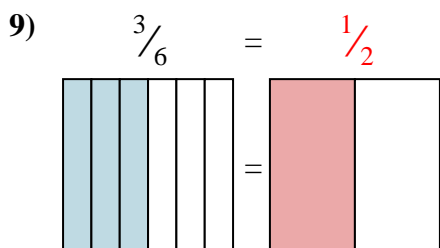
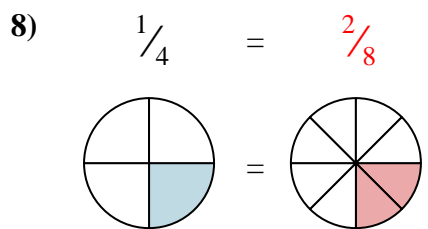
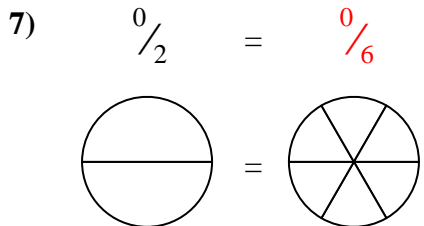
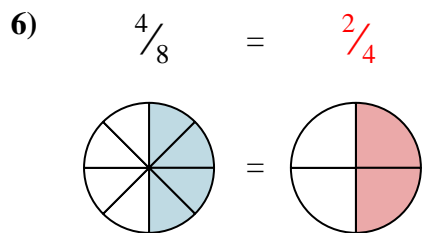
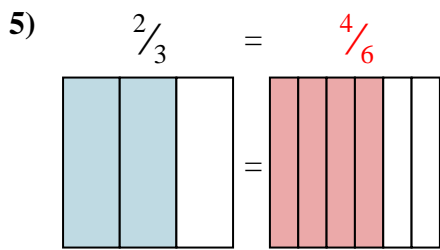
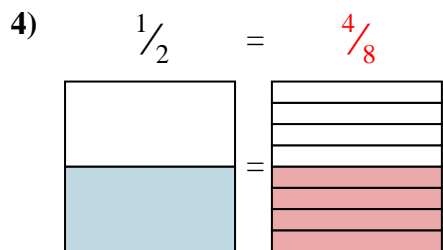
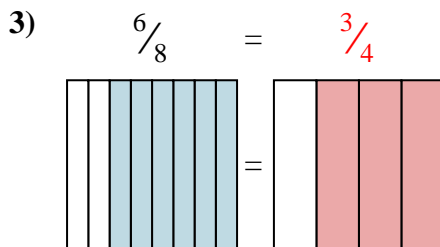
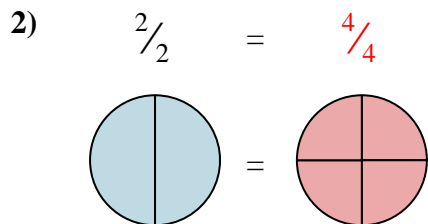
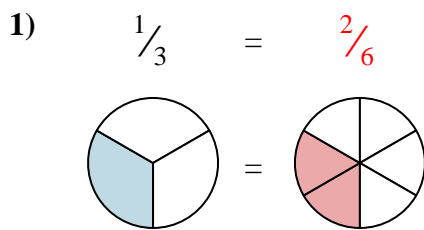
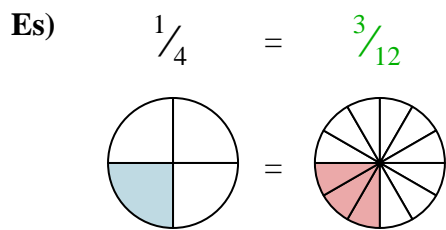
7. \_\_\_\_\_

8. \_\_\_\_\_

9. \_\_\_\_\_



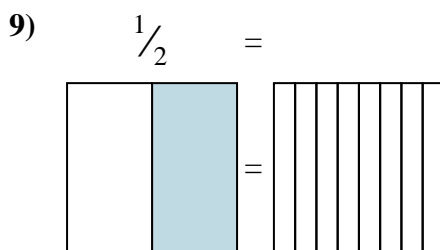
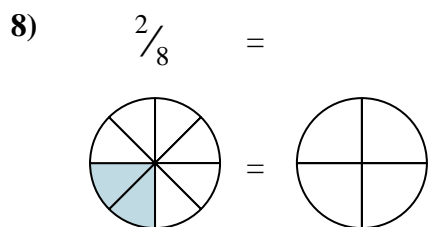
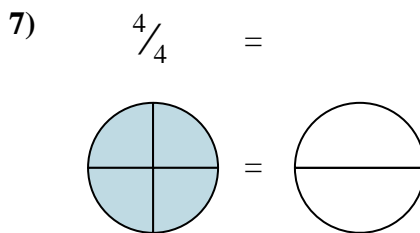
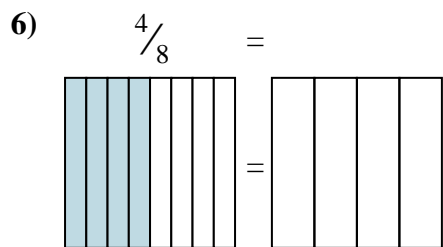
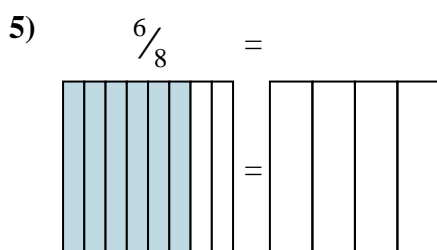
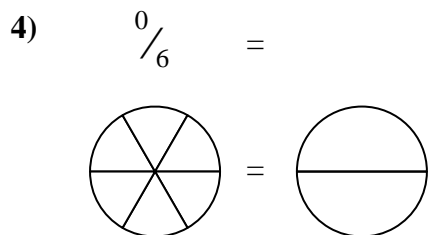
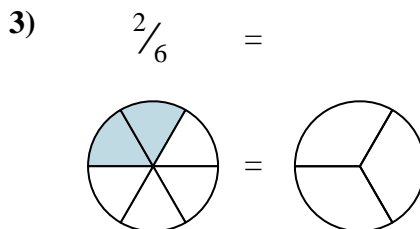
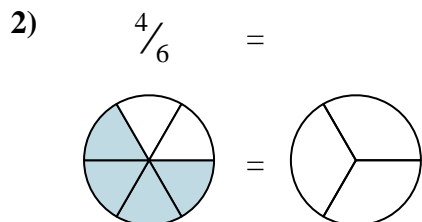
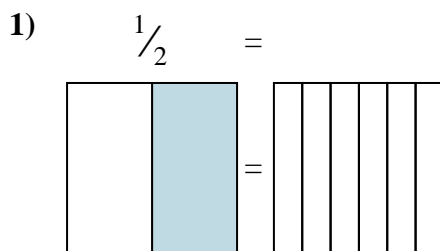
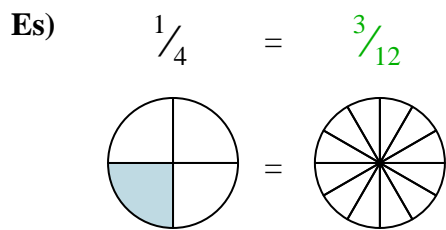
Colora la rappresentazione grafica per trovare la frazione equivalente.

**Risposte**

- Es.  $\frac{3}{12}$
1.  $\frac{2}{6}$
2.  $\frac{4}{4}$
3.  $\frac{3}{4}$
4.  $\frac{4}{8}$
5.  $\frac{4}{6}$
6.  $\frac{2}{4}$
7.  $\frac{0}{6}$
8.  $\frac{2}{8}$
9.  $\frac{1}{2}$



Colora la rappresentazione grafica per trovare la frazione equivalente.

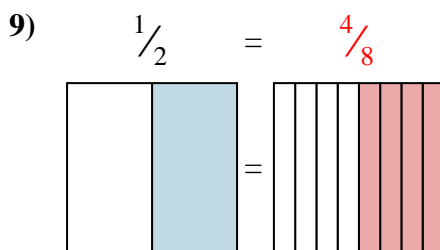
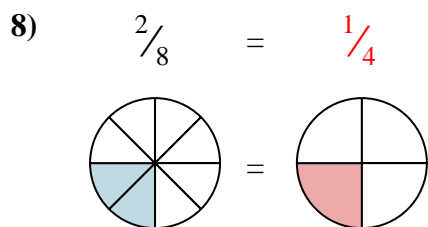
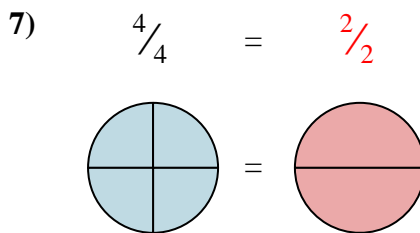
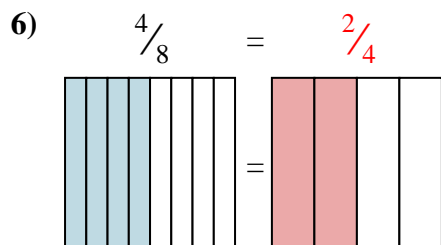
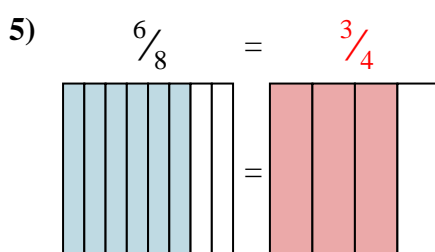
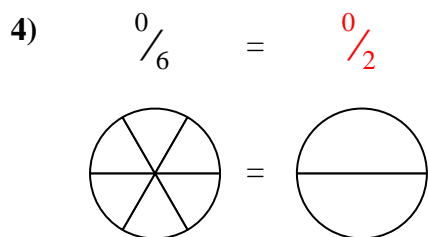
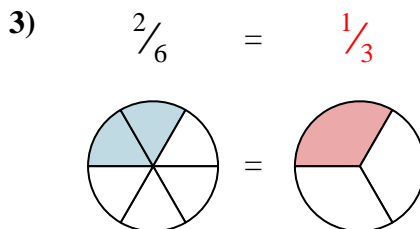
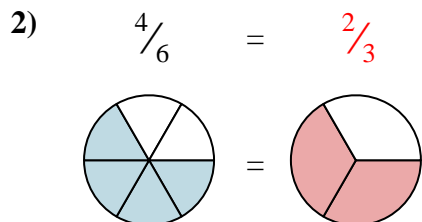
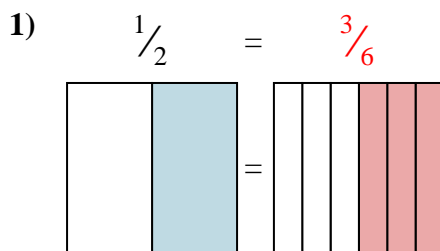
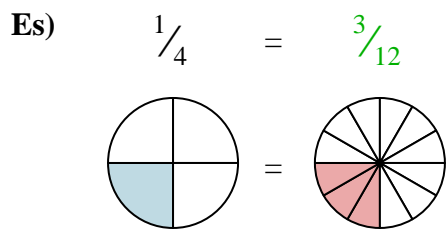


**Risposte**

- Es.  $\frac{3}{12}$
1. \_\_\_\_\_
2. \_\_\_\_\_
3. \_\_\_\_\_
4. \_\_\_\_\_
5. \_\_\_\_\_
6. \_\_\_\_\_
7. \_\_\_\_\_
8. \_\_\_\_\_
9. \_\_\_\_\_



Colora la rappresentazione grafica per trovare la frazione equivalente.

**Risposte**

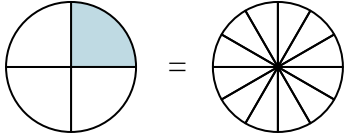
- Es.  $\frac{3}{12}$
1.  $\frac{3}{6}$
2.  $\frac{2}{3}$
3.  $\frac{1}{3}$
4.  $\frac{0}{2}$
5.  $\frac{3}{4}$
6.  $\frac{2}{4}$
7.  $\frac{2}{2}$
8.  $\frac{1}{4}$
9.  $\frac{4}{8}$



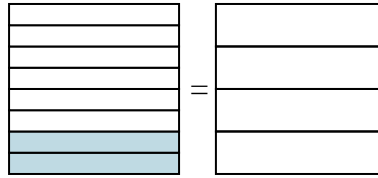


Colora la rappresentazione grafica per trovare la frazione equivalente.

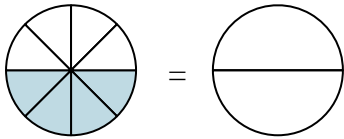
Es)  $\frac{1}{4} = \frac{3}{12}$



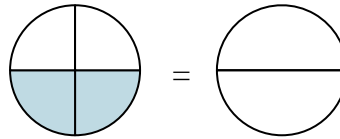
1)  $\frac{2}{8} =$



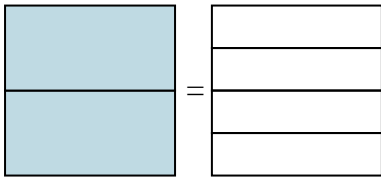
2)  $\frac{4}{8} =$



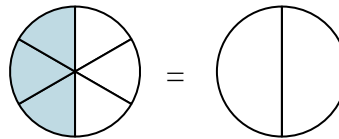
3)  $\frac{2}{4} =$



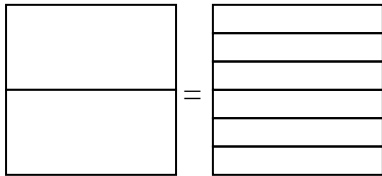
4)  $\frac{2}{2} =$



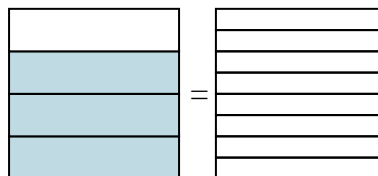
5)  $\frac{3}{6} =$



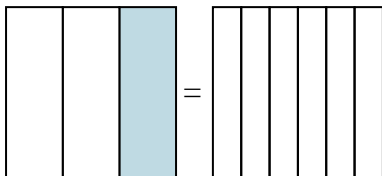
6)  $\frac{0}{2} =$



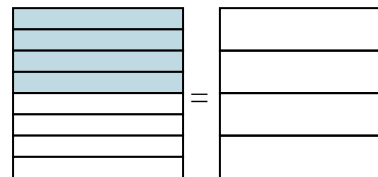
7)  $\frac{3}{4} =$



8)  $\frac{1}{3} =$



9)  $\frac{4}{8} =$



**Risposte**

Es.  $\frac{3}{12}$

1. \_\_\_\_\_

2. \_\_\_\_\_

3. \_\_\_\_\_

4. \_\_\_\_\_

5. \_\_\_\_\_

6. \_\_\_\_\_

7. \_\_\_\_\_

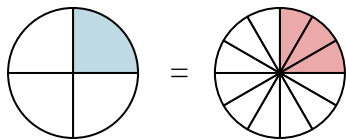
8. \_\_\_\_\_

9. \_\_\_\_\_

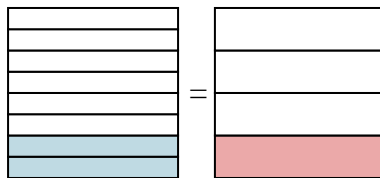


Colora la rappresentazione grafica per trovare la frazione equivalente.

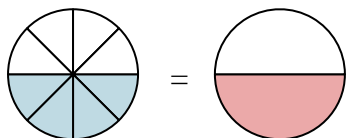
Es)  $\frac{1}{4} = \frac{3}{12}$



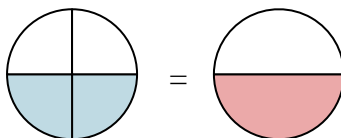
1)  $\frac{2}{8} = \frac{1}{4}$



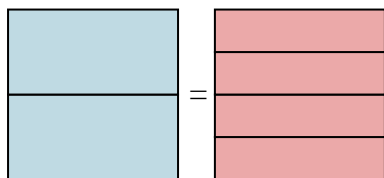
2)  $\frac{4}{8} = \frac{1}{2}$



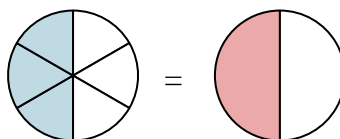
3)  $\frac{2}{4} = \frac{1}{2}$



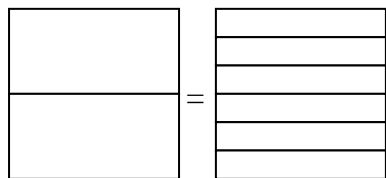
4)  $\frac{2}{2} = \frac{4}{4}$



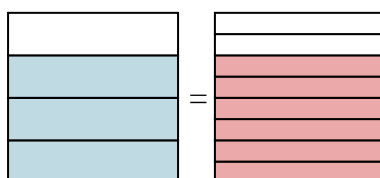
5)  $\frac{3}{6} = \frac{1}{2}$



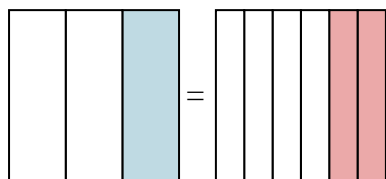
6)  $\frac{0}{2} = \frac{0}{6}$



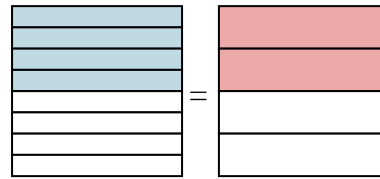
7)  $\frac{3}{4} = \frac{6}{8}$



8)  $\frac{1}{3} = \frac{2}{6}$



9)  $\frac{4}{8} = \frac{2}{4}$

**Risposte**

Es.  $\frac{3}{12}$

1.  $\frac{1}{4}$

2.  $\frac{1}{2}$

3.  $\frac{1}{2}$

4.  $\frac{4}{4}$

5.  $\frac{1}{2}$

6.  $\frac{0}{6}$

7.  $\frac{6}{8}$

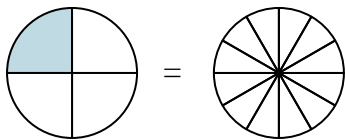
8.  $\frac{2}{6}$

9.  $\frac{2}{4}$

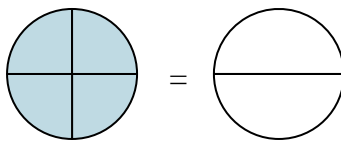


Colora la rappresentazione grafica per trovare la frazione equivalente.

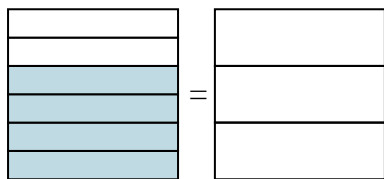
Es)  $\frac{1}{4} = \frac{3}{12}$



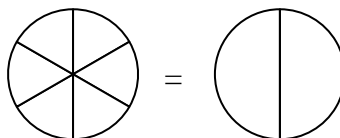
1)  $\frac{4}{4} =$



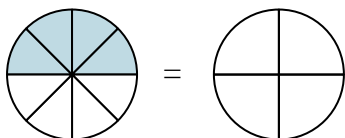
2)  $\frac{4}{6} =$



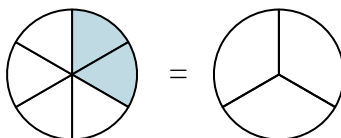
3)  $\frac{0}{6} =$



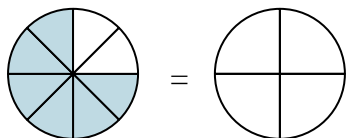
4)  $\frac{4}{8} =$



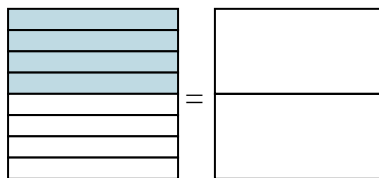
5)  $\frac{2}{6} =$



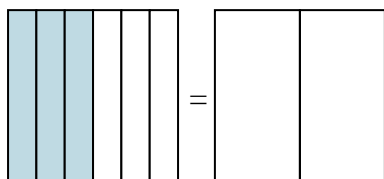
6)  $\frac{6}{8} =$



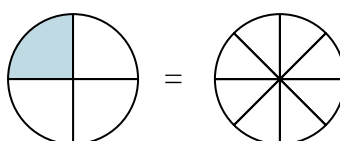
7)  $\frac{4}{8} =$



8)  $\frac{3}{6} =$



9)  $\frac{1}{4} =$



**Risposte**

Es.  $\frac{3}{12}$

1. \_\_\_\_\_

2. \_\_\_\_\_

3. \_\_\_\_\_

4. \_\_\_\_\_

5. \_\_\_\_\_

6. \_\_\_\_\_

7. \_\_\_\_\_

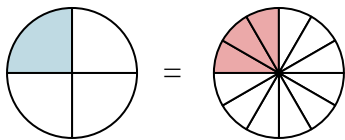
8. \_\_\_\_\_

9. \_\_\_\_\_

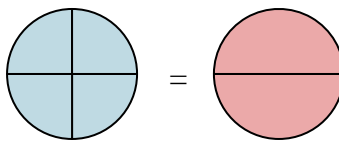


Colora la rappresentazione grafica per trovare la frazione equivalente.

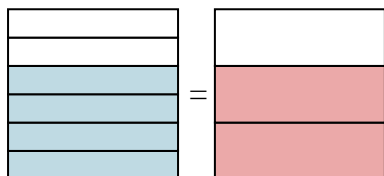
Es)  $\frac{1}{4} = \frac{3}{12}$



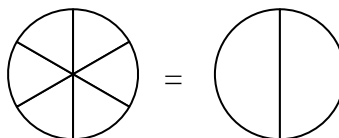
1)  $\frac{4}{4} = \frac{2}{2}$



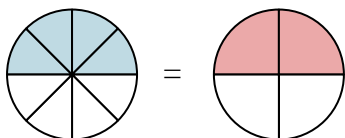
2)  $\frac{4}{6} = \frac{2}{3}$



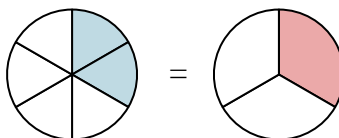
3)  $\frac{0}{6} = \frac{0}{2}$



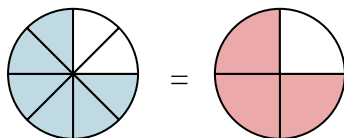
4)  $\frac{4}{8} = \frac{2}{4}$



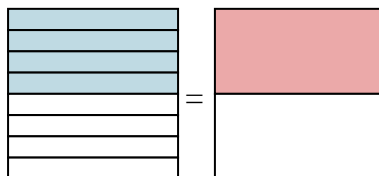
5)  $\frac{2}{6} = \frac{1}{3}$



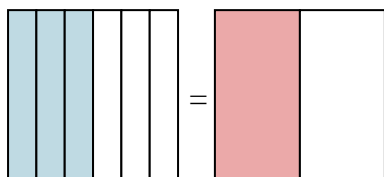
6)  $\frac{6}{8} = \frac{3}{4}$



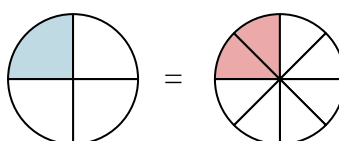
7)  $\frac{4}{8} = \frac{1}{2}$



8)  $\frac{3}{6} = \frac{1}{2}$



9)  $\frac{1}{4} = \frac{2}{8}$

**Risposte**

Es.  $\frac{3}{12}$

1.  $\frac{2}{2}$

2.  $\frac{2}{3}$

3.  $\frac{0}{2}$

4.  $\frac{2}{4}$

5.  $\frac{1}{3}$

6.  $\frac{3}{4}$

7.  $\frac{1}{2}$

8.  $\frac{1}{2}$

9.  $\frac{2}{8}$