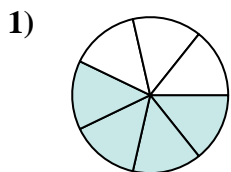
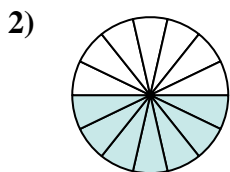




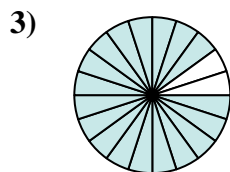
Determina quale lettera rappresenta la frazione equivalente.

Risposte

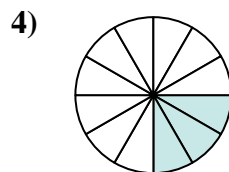
$$\frac{4}{7}$$



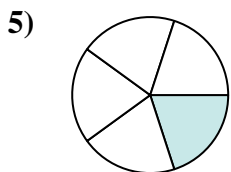
$$\frac{7}{14}$$



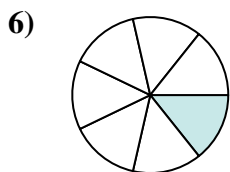
$$\frac{18}{20}$$



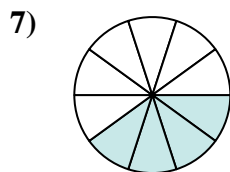
$$\frac{3}{12}$$



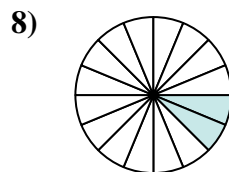
$$\frac{1}{5}$$



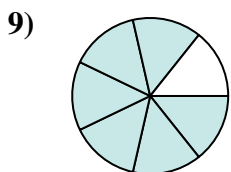
$$\frac{1}{7}$$



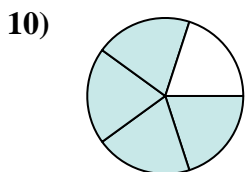
$$\frac{4}{10}$$



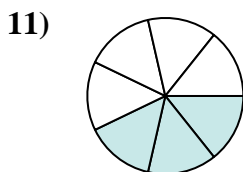
$$\frac{2}{16}$$



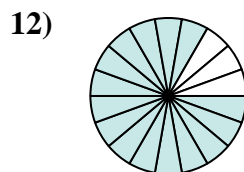
$$\frac{6}{7}$$



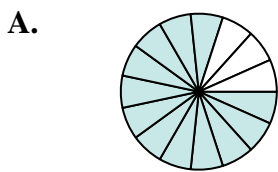
$$\frac{4}{5}$$



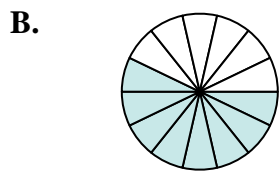
$$\frac{3}{7}$$



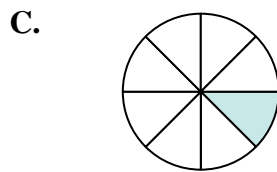
$$\frac{15}{18}$$



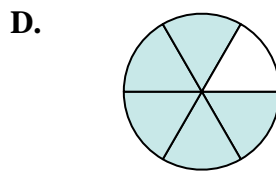
$$\frac{12}{15}$$



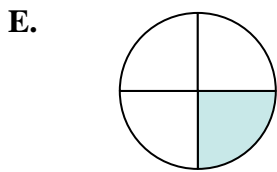
$$\frac{8}{14}$$



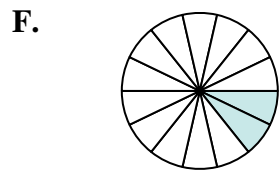
$$\frac{1}{8}$$



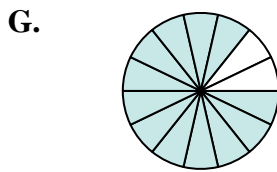
$$\frac{5}{6}$$



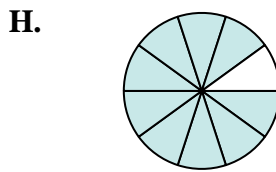
$$\frac{1}{4}$$



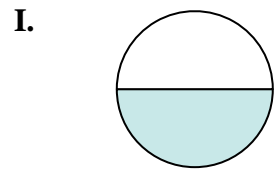
$$\frac{2}{14}$$



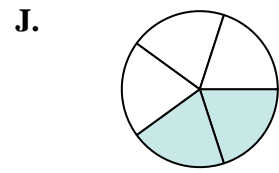
$$\frac{12}{14}$$




$$\frac{9}{10}$$



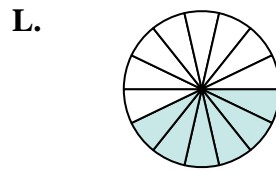
$$\frac{1}{2}$$



$$\frac{2}{5}$$



$$\frac{4}{20}$$

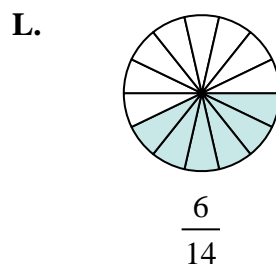
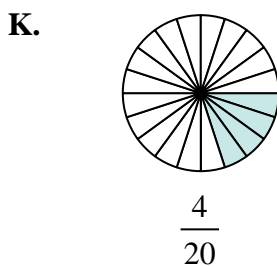
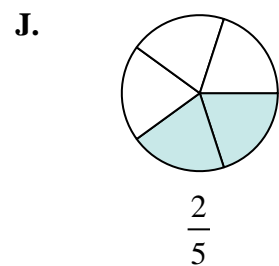
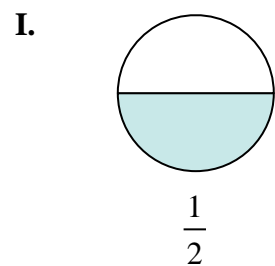
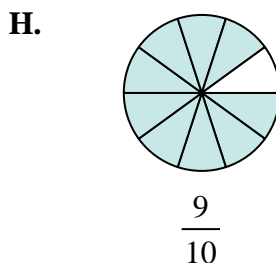
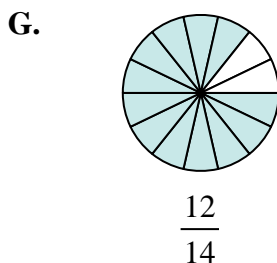
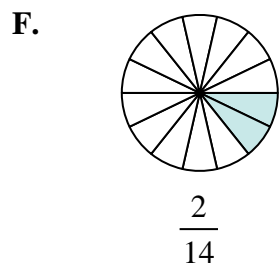
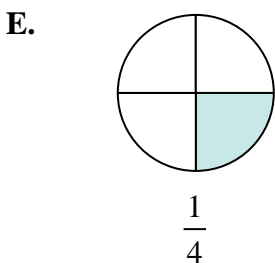
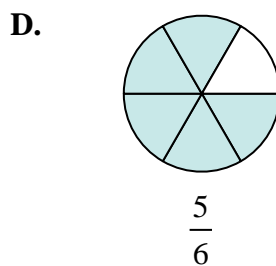
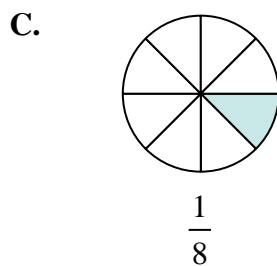
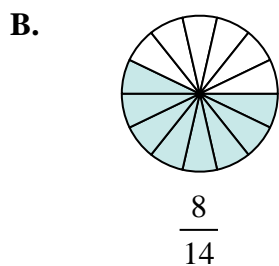
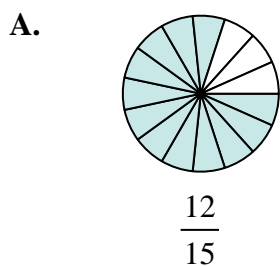
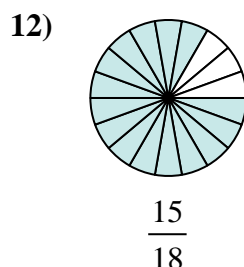
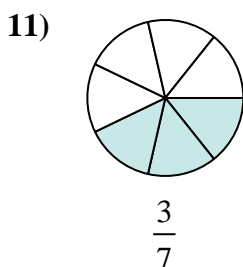
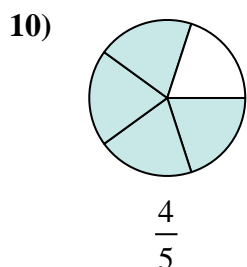
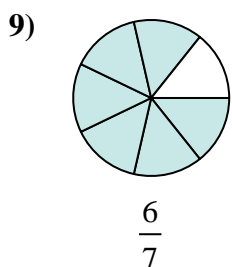
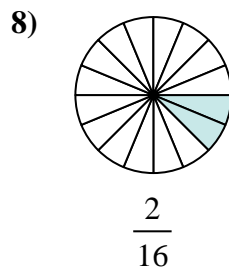
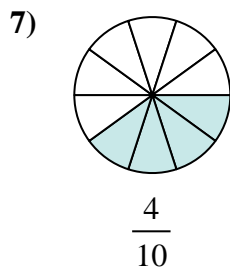
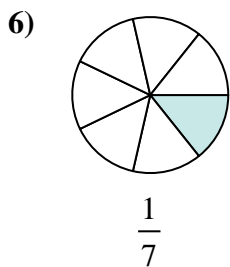
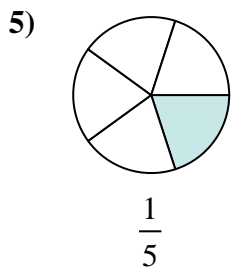
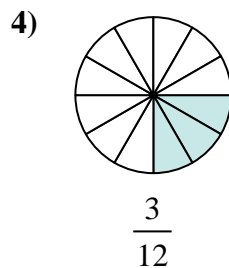
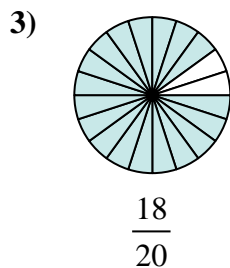
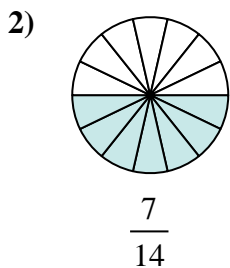
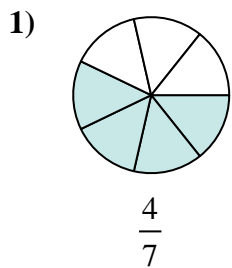


$$\frac{6}{14}$$

1. _____
2. _____
3. _____
4. _____
5. _____
6. _____
7. _____
8. _____
9. _____
10. _____
11. _____
12. _____



Determina quale lettera rappresenta la frazione equivalente.

**Risposte**1. **B**2. **I**3. **H**4. **E**5. **K**6. **F**7. **J**8. **C**9. **G**10. **A**11. **L**12. **D**