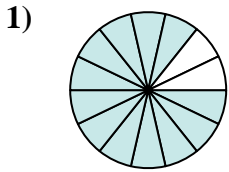
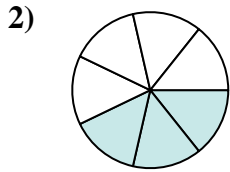




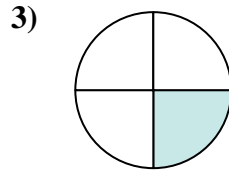
Determina quale lettera rappresenta la frazione equivalente.

Risposte

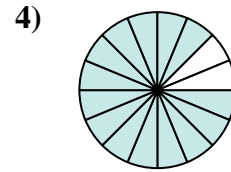
$$\frac{12}{14}$$



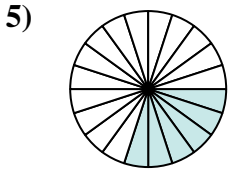
$$\frac{3}{7}$$



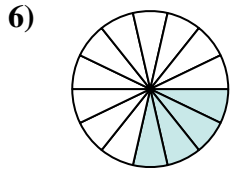
$$\frac{1}{4}$$



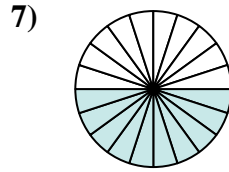
$$\frac{14}{16}$$



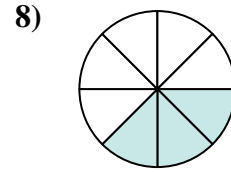
$$\frac{6}{20}$$



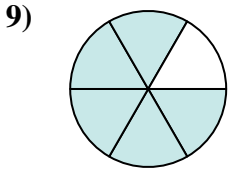
$$\frac{4}{14}$$



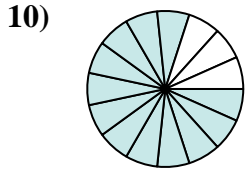
$$\frac{10}{20}$$



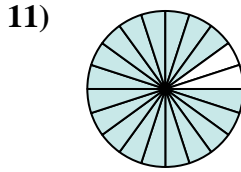
$$\frac{3}{8}$$



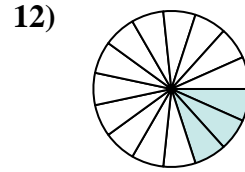
$$\frac{5}{6}$$



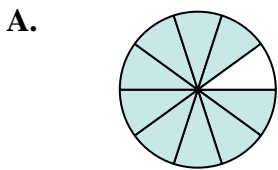
$$\frac{12}{15}$$



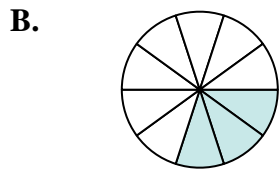
$$\frac{18}{20}$$



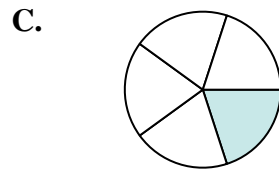
$$\frac{3}{15}$$



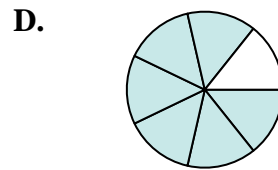
$$\frac{9}{10}$$



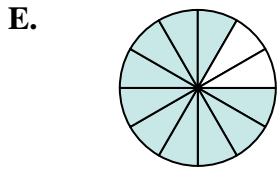
$$\frac{3}{10}$$



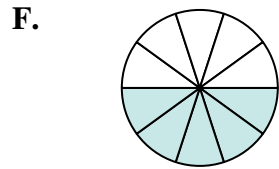
$$\frac{1}{5}$$



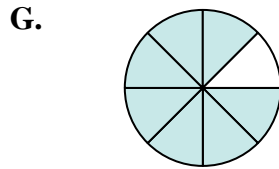
$$\frac{6}{7}$$



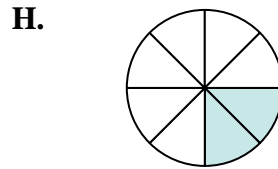
$$\frac{10}{12}$$



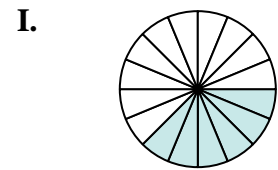
$$\frac{5}{10}$$



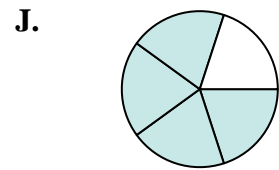
$$\frac{7}{8}$$



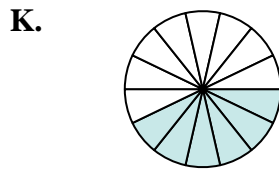
$$\frac{2}{8}$$



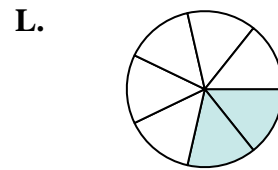
$$\frac{6}{16}$$



$$\frac{4}{5}$$



$$\frac{6}{14}$$



$$\frac{2}{7}$$

1. _____

2. _____

3. _____

4. _____

5. _____

6. _____

7. _____

8. _____

9. _____

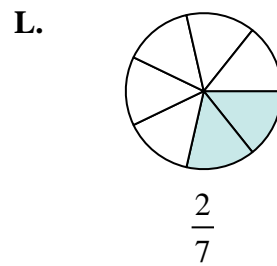
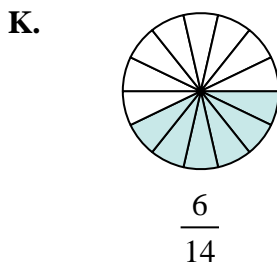
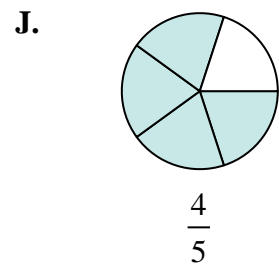
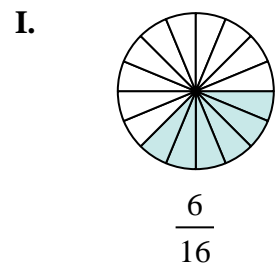
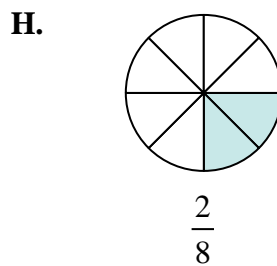
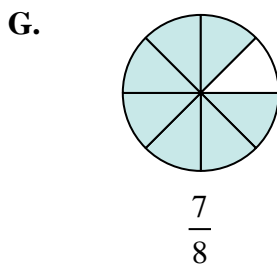
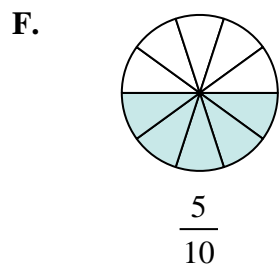
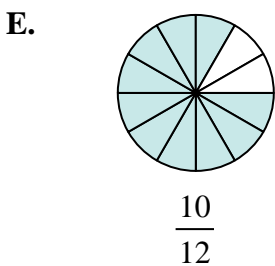
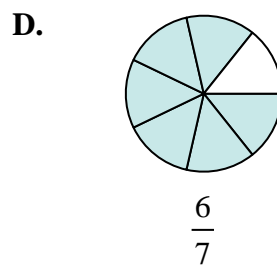
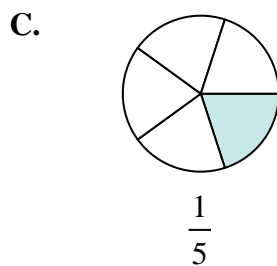
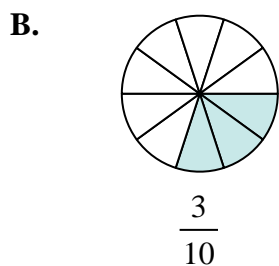
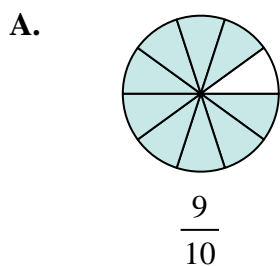
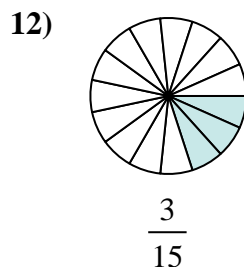
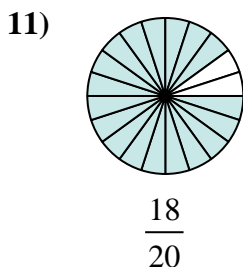
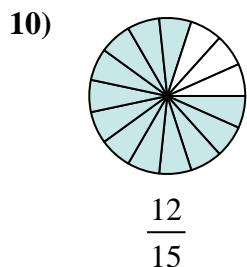
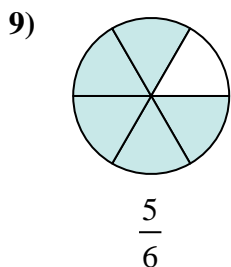
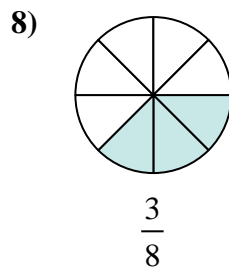
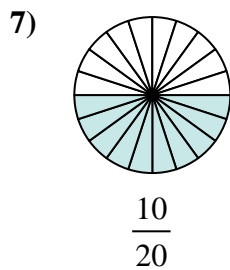
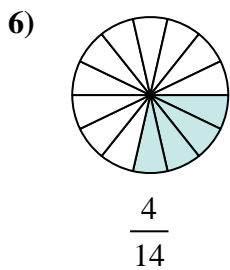
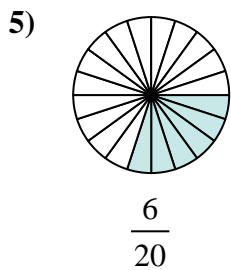
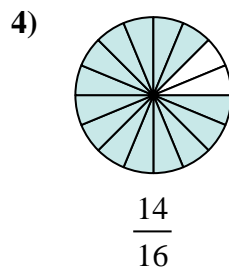
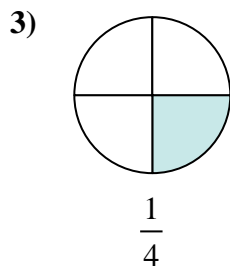
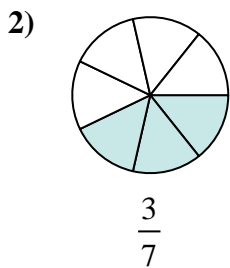
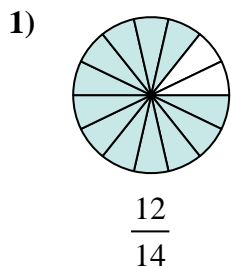
10. _____

11. _____

12. _____



Determina quale lettera rappresenta la frazione equivalente.

**Risposte**1. **D**2. **K**3. **H**4. **G**5. **B**6. **L**7. **F**8. **I**9. **E**10. **J**11. **A**12. **C**