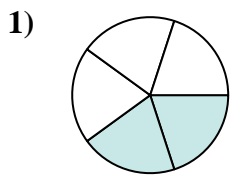
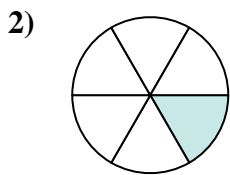




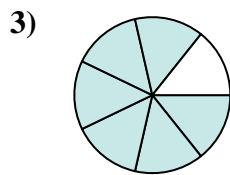
Determina quale lettera rappresenta la frazione equivalente.

Risposte

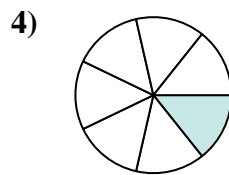
$\frac{2}{5}$



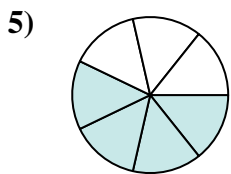
$\frac{1}{6}$



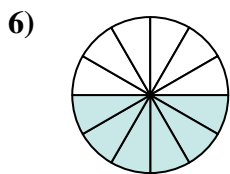
$\frac{6}{7}$



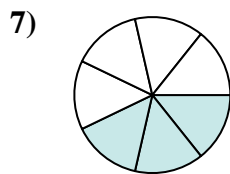
$\frac{1}{7}$



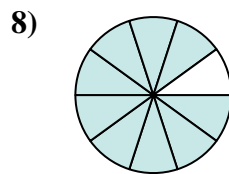
$\frac{4}{7}$



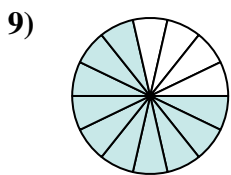
$\frac{6}{12}$



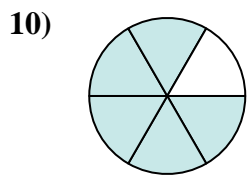
$\frac{3}{7}$



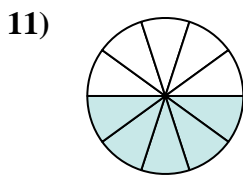
$\frac{9}{10}$



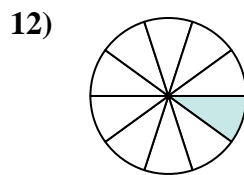
$\frac{10}{14}$



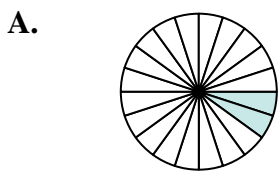
$\frac{5}{6}$



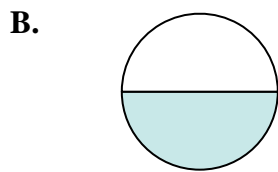
$\frac{5}{10}$



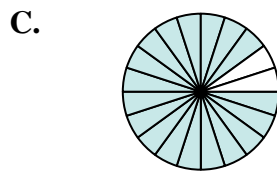
$\frac{1}{10}$



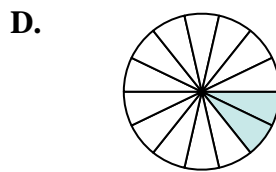
$\frac{2}{20}$



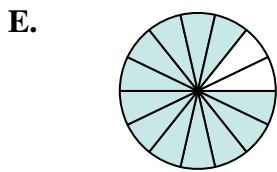
$\frac{1}{2}$



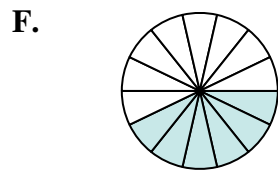
$\frac{18}{20}$



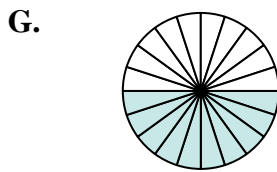
$\frac{2}{14}$



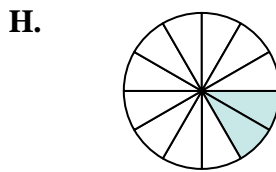
$\frac{12}{14}$



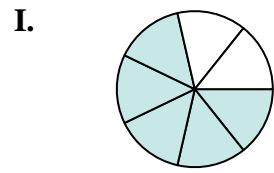
$\frac{6}{14}$



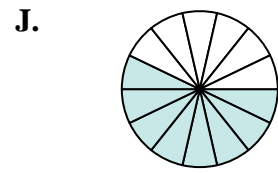
$\frac{10}{20}$



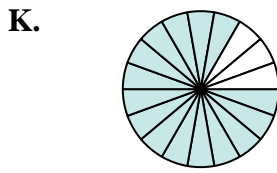
$\frac{2}{12}$




$\frac{5}{7}$



$\frac{8}{14}$



$\frac{15}{18}$



$\frac{8}{20}$

1. _____

2. _____

3. _____

4. _____

5. _____

6. _____

7. _____

8. _____

9. _____

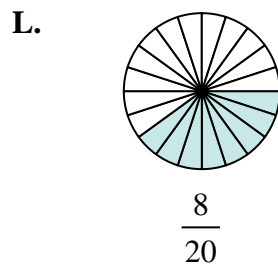
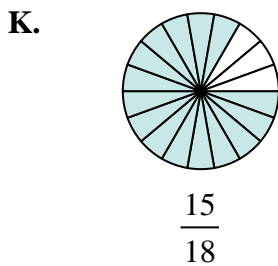
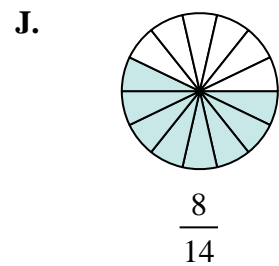
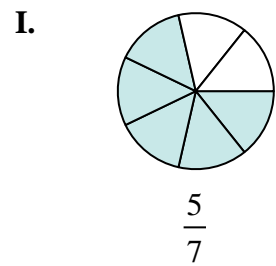
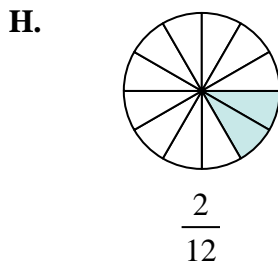
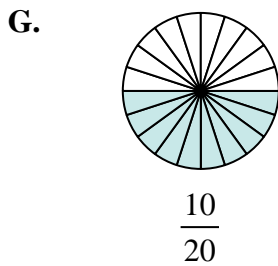
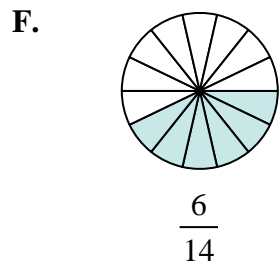
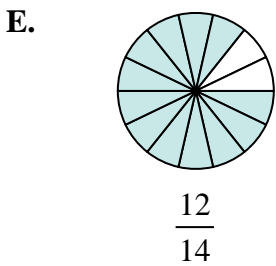
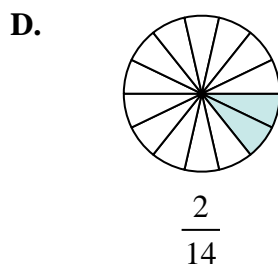
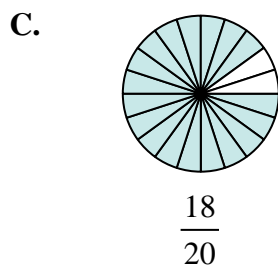
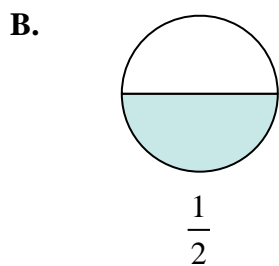
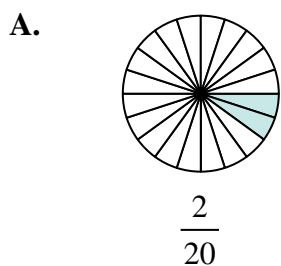
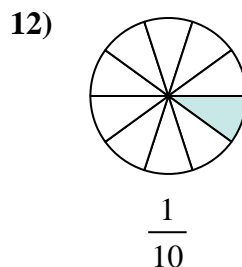
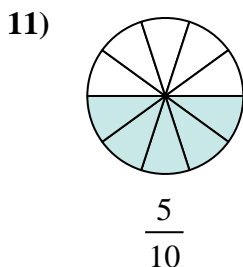
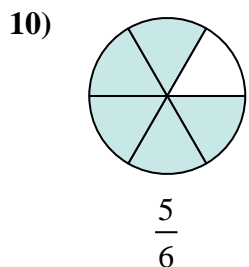
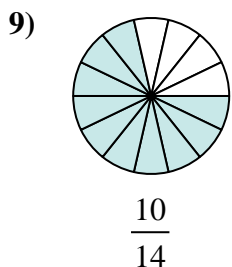
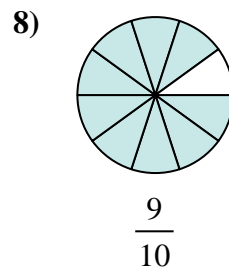
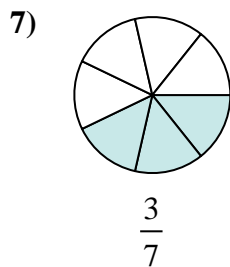
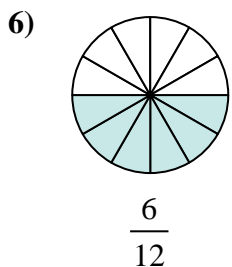
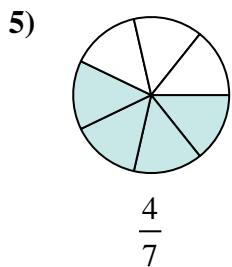
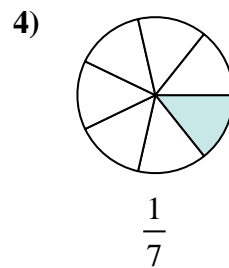
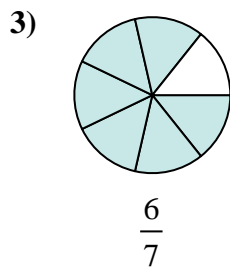
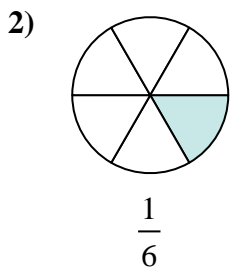
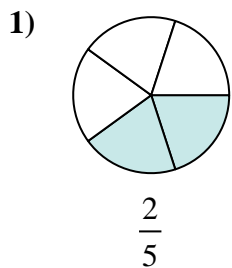
10. _____

11. _____

12. _____



Determina quale lettera rappresenta la frazione equivalente.

**Risposte**1. **L** 2. **H** 3. **E** 4. **D** 5. **J** 6. **B** 7. **F** 8. **C** 9. **I** 10. **K** 11. **G** 12. **A**