
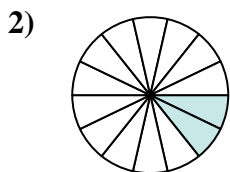




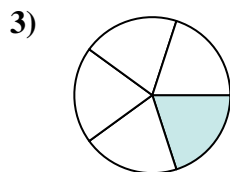
Determina quale lettera rappresenta la frazione equivalente.

**Risposte**

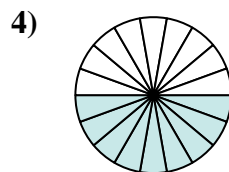
$$\frac{6}{20}$$



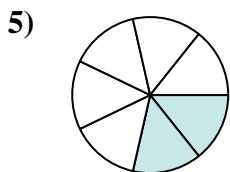
$$\frac{2}{14}$$



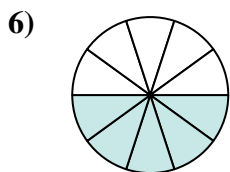
$$\frac{1}{5}$$



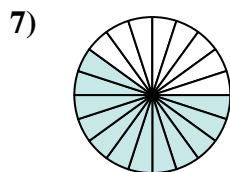
$$\frac{9}{18}$$



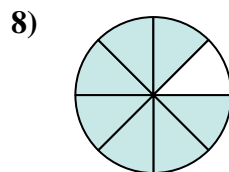
$$\frac{2}{7}$$



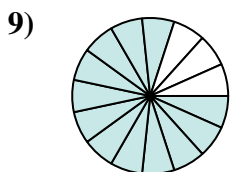
$$\frac{5}{10}$$



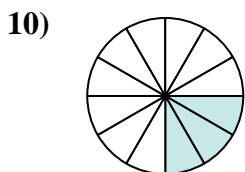
$$\frac{12}{20}$$



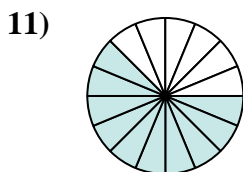
$$\frac{7}{8}$$



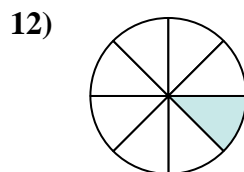
$$\frac{12}{15}$$



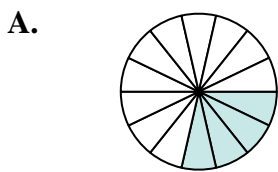
$$\frac{3}{12}$$




$$\frac{10}{16}$$



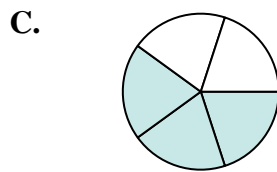
$$\frac{1}{8}$$



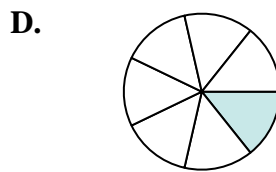
$$\frac{4}{14}$$



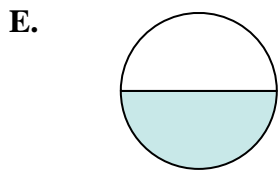
$$\frac{10}{20}$$



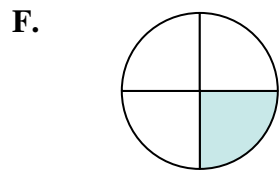
$$\frac{3}{5}$$



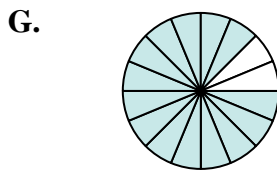
$$\frac{1}{7}$$



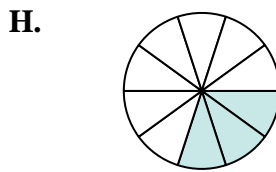
$$\frac{1}{2}$$



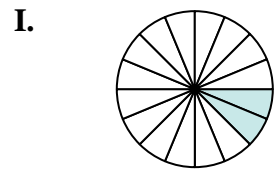
$$\frac{1}{4}$$



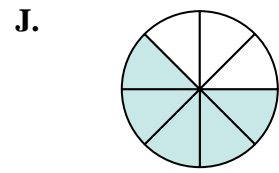
$$\frac{14}{16}$$




$$\frac{3}{10}$$



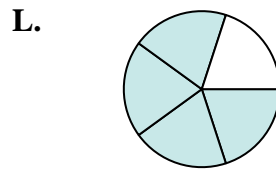
$$\frac{2}{16}$$



$$\frac{5}{8}$$



$$\frac{4}{20}$$



$$\frac{4}{5}$$

1. \_\_\_\_\_

2. \_\_\_\_\_

3. \_\_\_\_\_

4. \_\_\_\_\_

5. \_\_\_\_\_

6. \_\_\_\_\_

7. \_\_\_\_\_

8. \_\_\_\_\_

9. \_\_\_\_\_

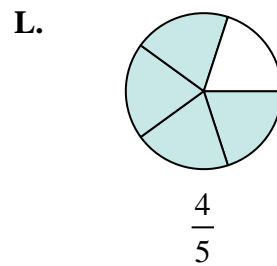
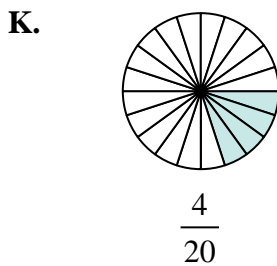
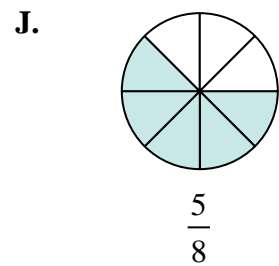
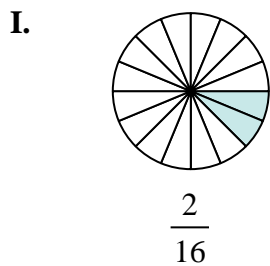
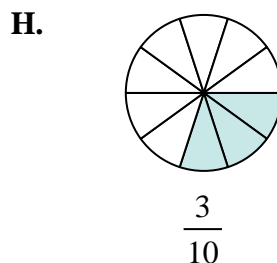
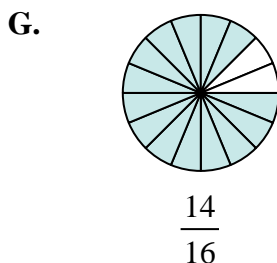
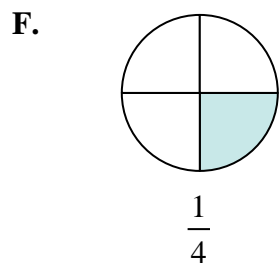
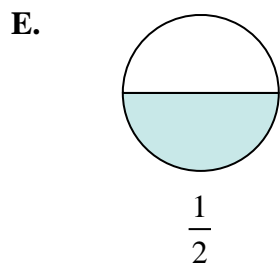
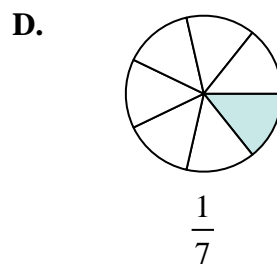
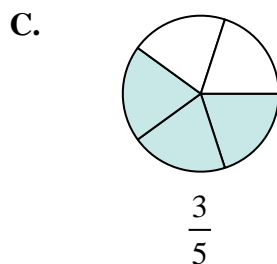
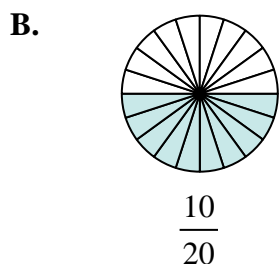
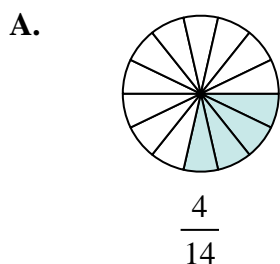
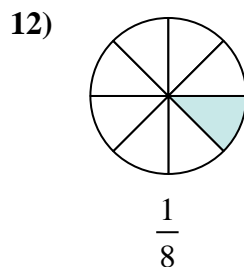
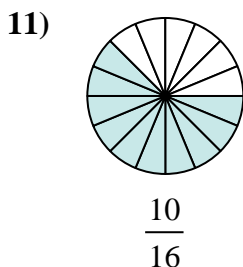
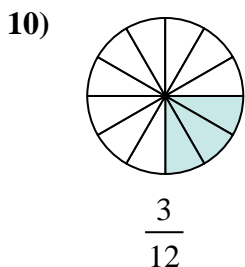
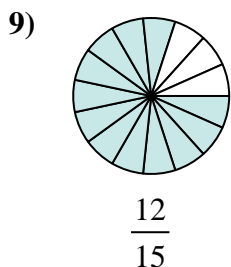
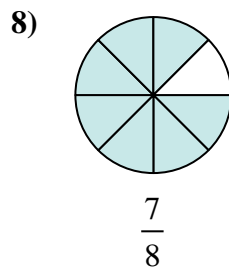
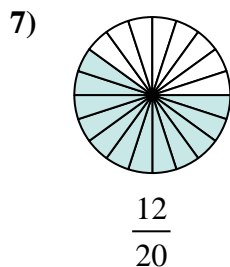
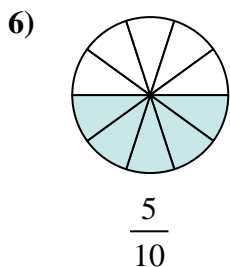
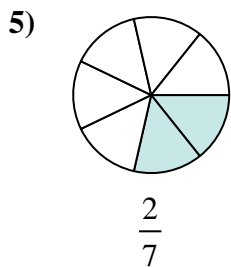
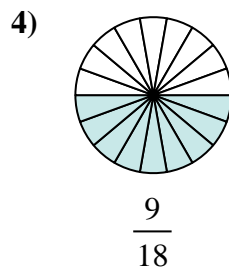
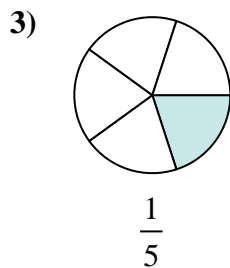
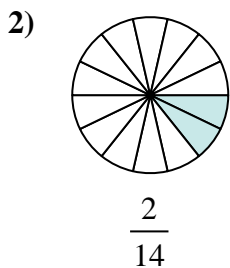
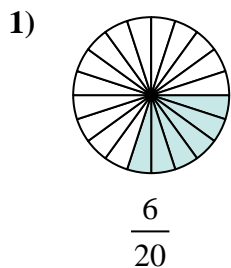
10. \_\_\_\_\_

11. \_\_\_\_\_

12. \_\_\_\_\_



Determina quale lettera rappresenta la frazione equivalente.

**Risposte**1.     **H**    2.     **D**    3.     **K**    4.     **E**    5.     **A**    6.     **B**    7.     **C**    8.     **G**    9.     **L**    10.     **F**    11.     **J**    12.     **I**