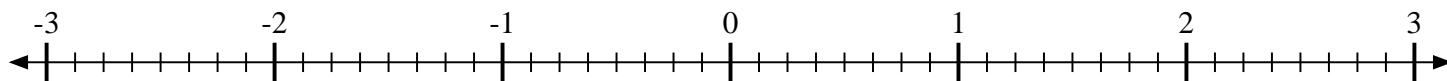
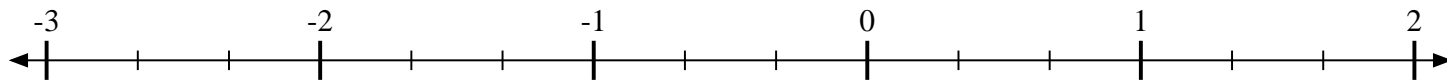


**Scrivi la posizione di ogni frazione.**

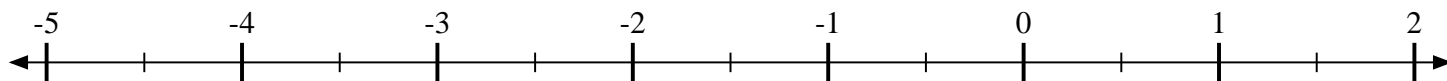
- 1) Indica la posizione di
- $-2\frac{6}{8}$



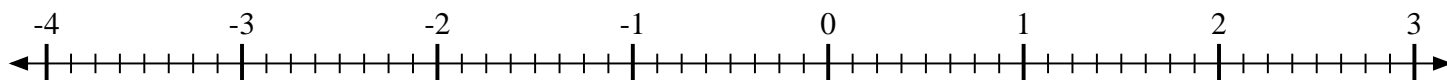
- 2) Indica la posizione di
- $-1\frac{2}{3}$



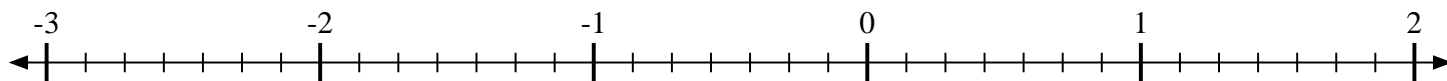
- 3) Indica la posizione di
- $1\frac{1}{2}$



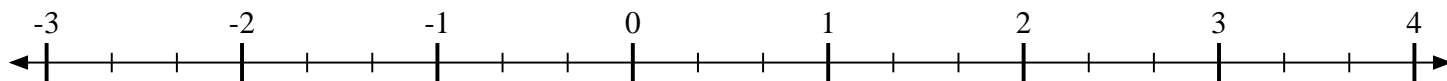
- 4) Indica la posizione di
- $-3\frac{6}{8}$



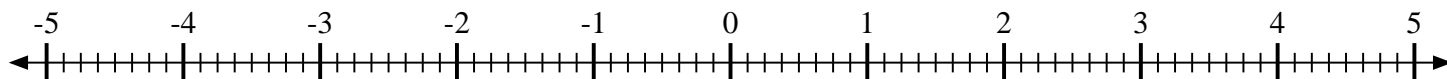
- 5) Indica la posizione di
- $1\frac{5}{7}$



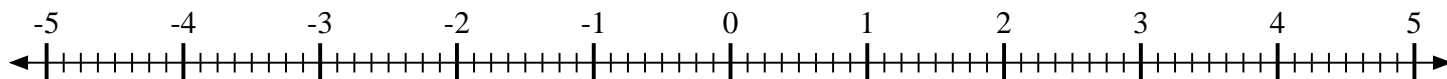
- 6) Indica la posizione di
- $2\frac{2}{3}$



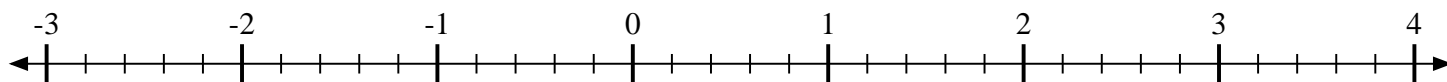
- 7) Indica la posizione di
- $2\frac{3}{8}$



- 8) Indica la posizione di
- $-2\frac{5}{8}$



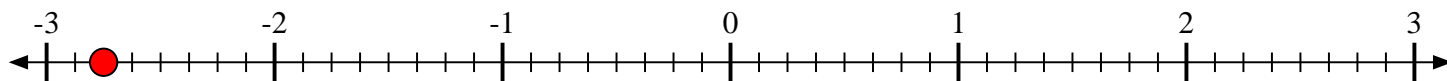
- 9) Indica la posizione di
- $-2\frac{1}{5}$



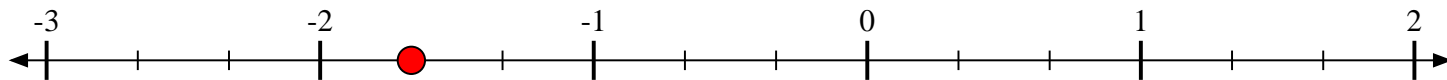


Scrivi la posizione di ogni frazione.

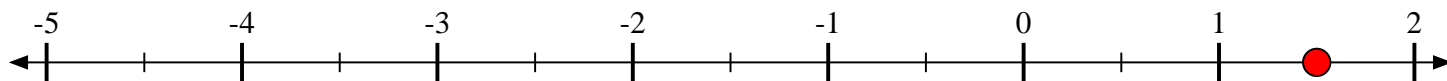
1) Indica la posizione di $-2\frac{6}{8}$



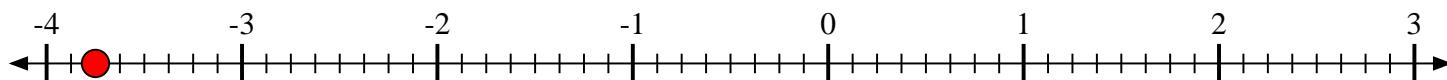
2) Indica la posizione di $-1\frac{2}{3}$



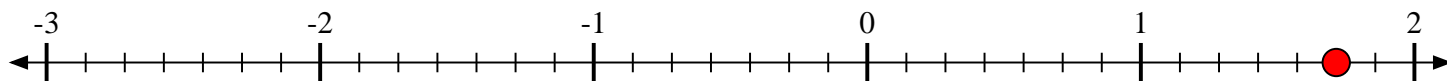
3) Indica la posizione di $1\frac{1}{2}$



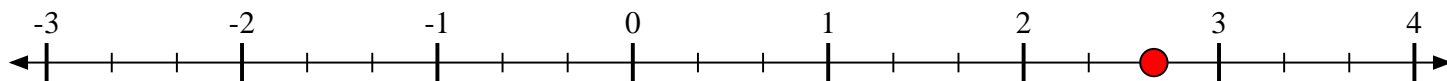
4) Indica la posizione di $-3\frac{6}{8}$



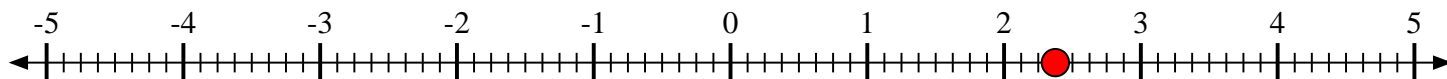
5) Indica la posizione di $1\frac{5}{7}$



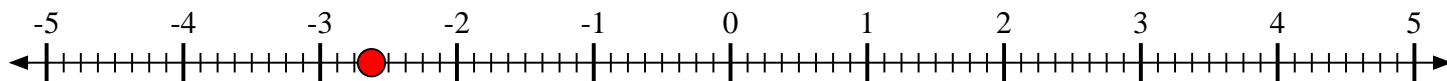
6) Indica la posizione di $2\frac{2}{3}$



7) Indica la posizione di $2\frac{3}{8}$



8) Indica la posizione di $-2\frac{5}{8}$



9) Indica la posizione di $-2\frac{1}{5}$

