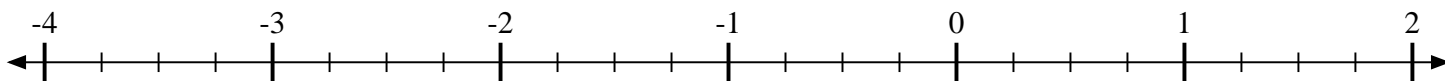
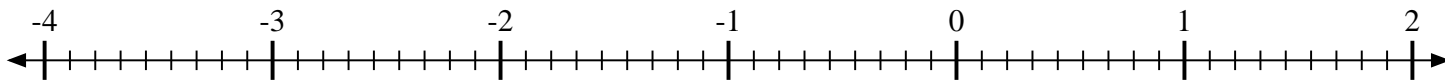


**Scrivi la posizione di ogni frazione.**

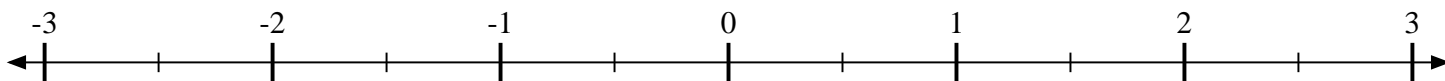
- 1) Indica la posizione di
- $-1\frac{2}{4}$



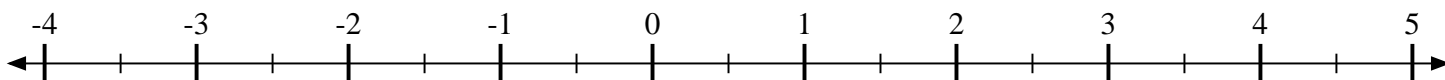
- 2) Indica la posizione di
- $\frac{2}{9}$



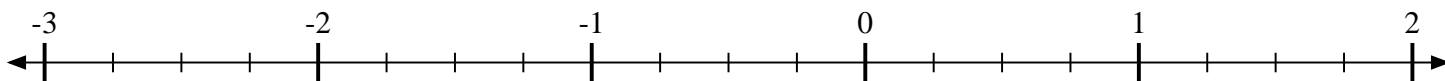
- 3) Indica la posizione di
- $\frac{1}{2}$



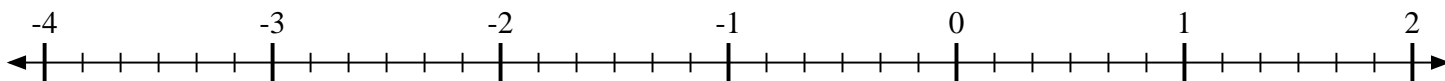
- 4) Indica la posizione di
- $3\frac{1}{2}$



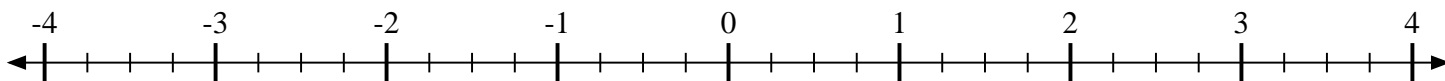
- 5) Indica la posizione di
- $-1\frac{2}{4}$



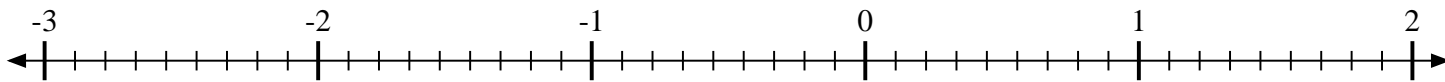
- 6) Indica la posizione di
- $-3\frac{2}{6}$



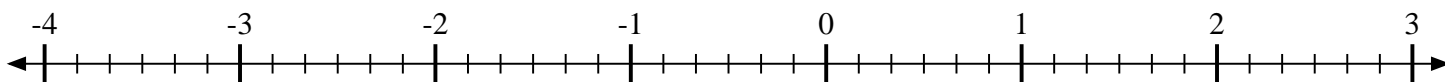
- 7) Indica la posizione di
- $-2\frac{2}{4}$



- 8) Indica la posizione di
- $\frac{8}{9}$



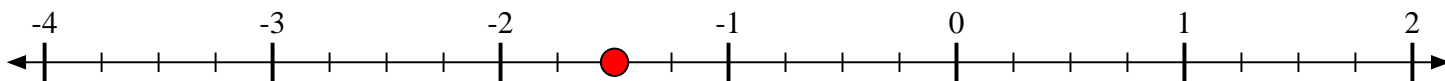
- 9) Indica la posizione di
- $-2\frac{3}{6}$



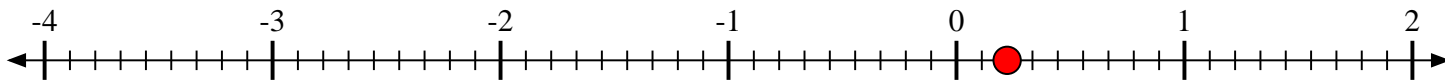


Scrivi la posizione di ogni frazione.

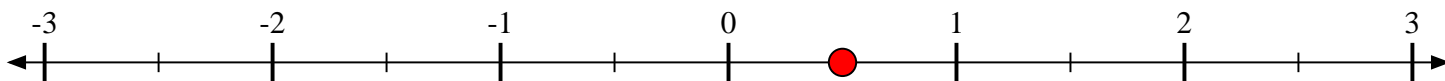
- 1) Indica la posizione di
- $-1\frac{2}{4}$



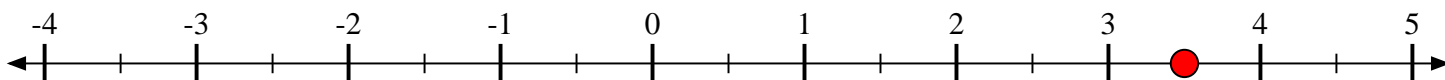
- 2) Indica la posizione di
- $\frac{2}{9}$



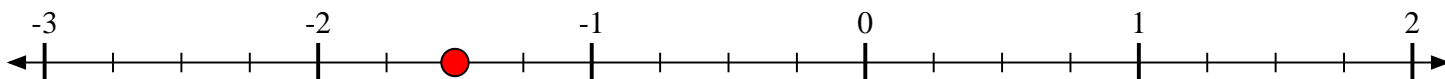
- 3) Indica la posizione di
- $\frac{1}{2}$



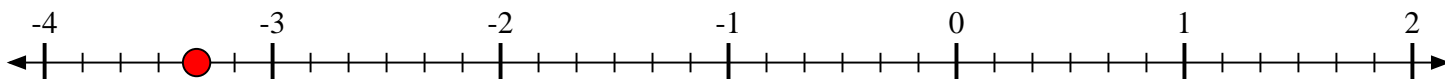
- 4) Indica la posizione di
- $3\frac{1}{2}$



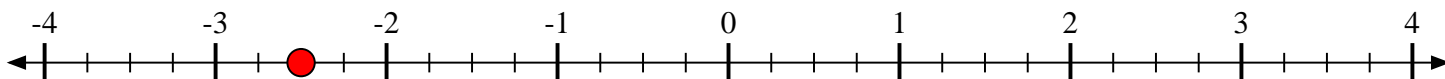
- 5) Indica la posizione di
- $-1\frac{2}{4}$



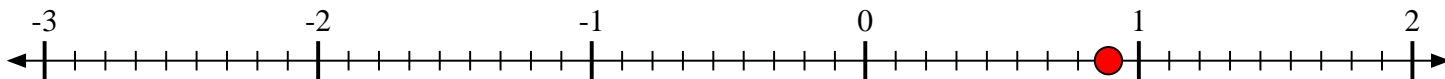
- 6) Indica la posizione di
- $-3\frac{2}{6}$



- 7) Indica la posizione di
- $-2\frac{2}{4}$



- 8) Indica la posizione di
- $\frac{8}{9}$



- 9) Indica la posizione di
- $-2\frac{3}{6}$

