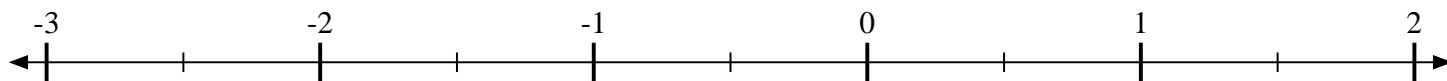
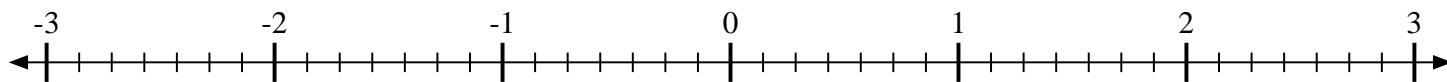
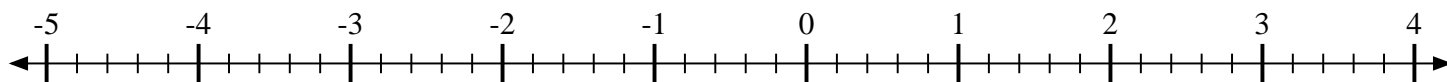
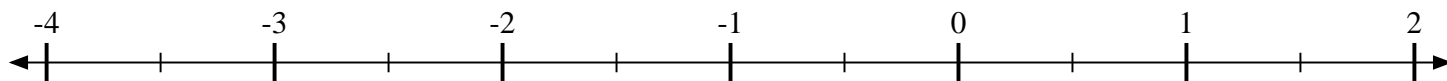
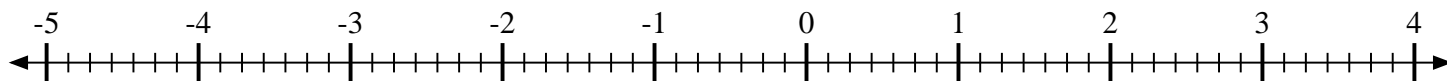
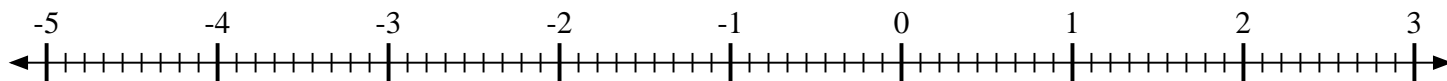
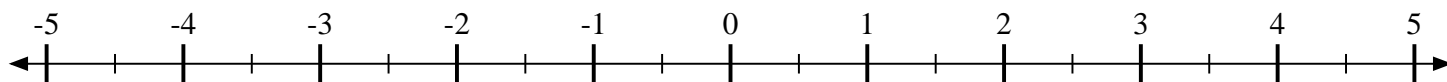
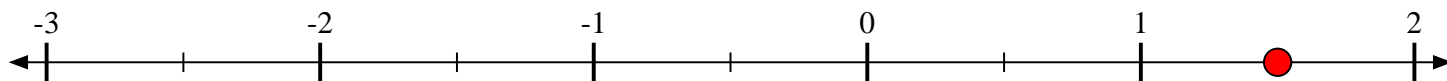
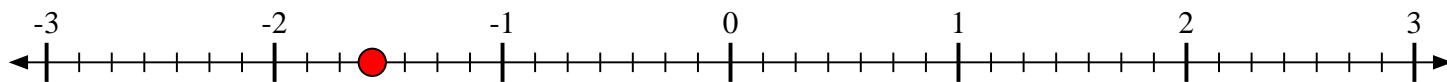
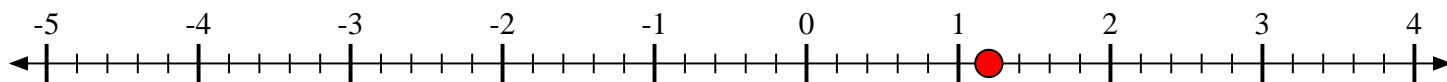
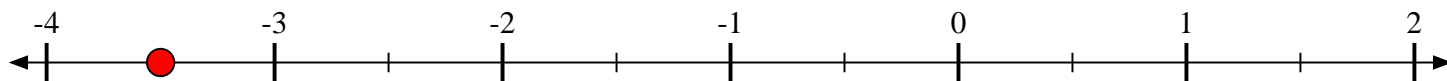
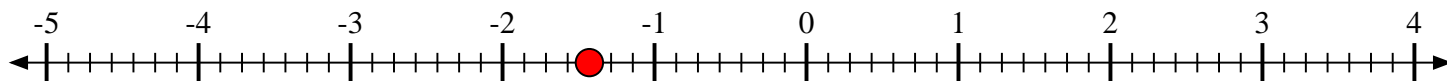
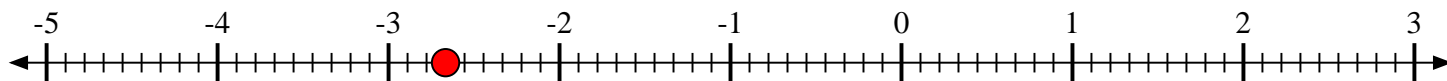


**Scrivi la posizione di ogni frazione.**1) Indica la posizione di $1\frac{1}{2}$ 2) Indica la posizione di $-1\frac{4}{7}$ 3) Indica la posizione di $-2\frac{4}{5}$ 4) Indica la posizione di $1\frac{1}{5}$ 5) Indica la posizione di $-3\frac{1}{2}$ 6) Indica la posizione di $-2\frac{2}{3}$ 7) Indica la posizione di $-1\frac{3}{7}$ 8) Indica la posizione di $-2\frac{6}{9}$ 9) Indica la posizione di $2\frac{1}{2}$ 



Scrivi la posizione di ogni frazione.

1) Indica la posizione di $1\frac{1}{2}$ 2) Indica la posizione di $-1\frac{4}{7}$ 3) Indica la posizione di $-2\frac{4}{5}$ 4) Indica la posizione di $1\frac{1}{5}$ 5) Indica la posizione di $-3\frac{1}{2}$ 6) Indica la posizione di $-2\frac{2}{3}$ 7) Indica la posizione di $-1\frac{3}{7}$ 8) Indica la posizione di $-2\frac{6}{9}$ 9) Indica la posizione di $2\frac{1}{2}$ 