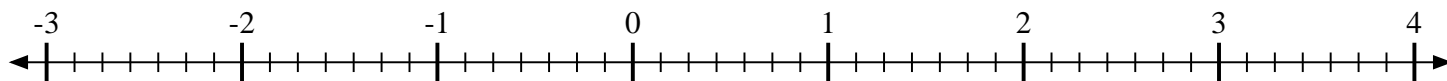
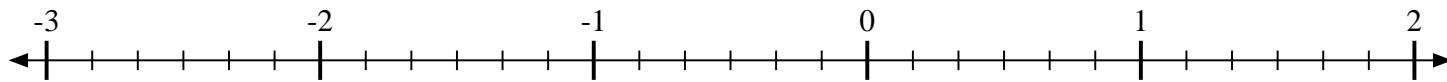
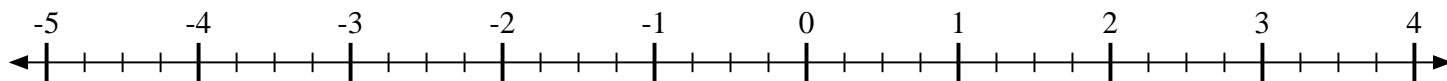
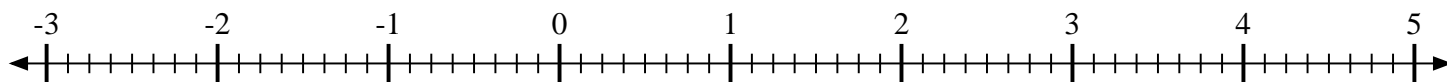
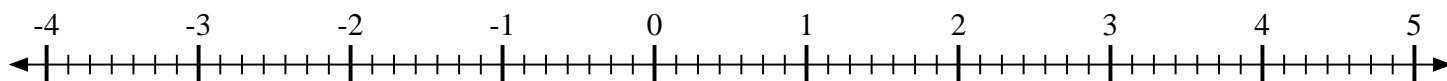
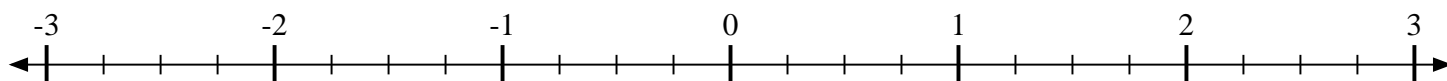
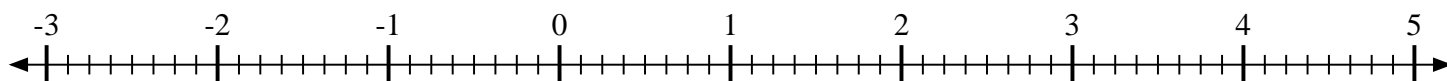
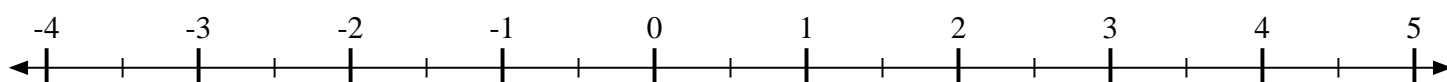
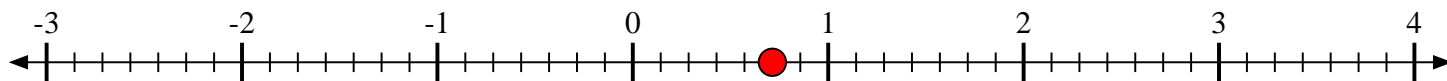
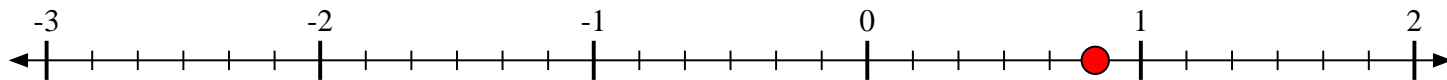
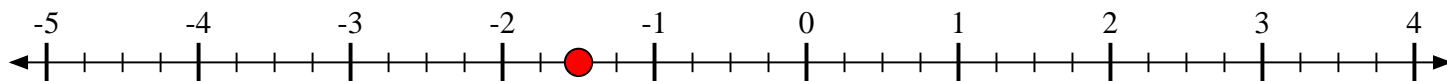
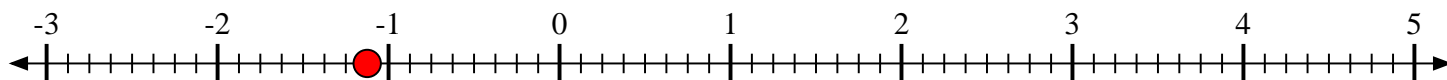
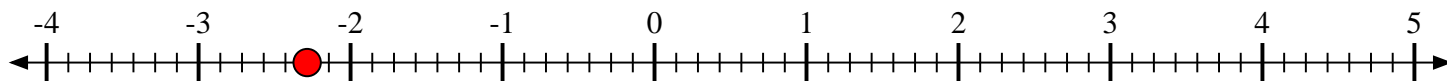
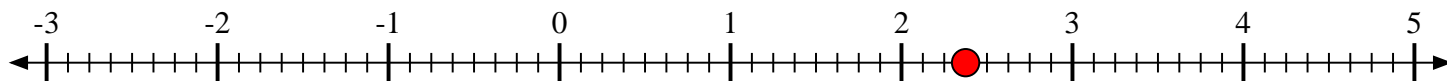


**Scrivi la posizione di ogni frazione.**1) Indica la posizione di  $\frac{5}{7}$ 2) Indica la posizione di  $\frac{5}{6}$ 3) Indica la posizione di  $-1\frac{2}{4}$ 4) Indica la posizione di  $-1\frac{1}{8}$ 5) Indica la posizione di  $1\frac{1}{4}$ 6) Indica la posizione di  $-2\frac{2}{7}$ 7) Indica la posizione di  $1\frac{1}{4}$ 8) Indica la posizione di  $2\frac{3}{8}$ 9) Indica la posizione di  $\frac{1}{2}$ 



Scrivi la posizione di ogni frazione.

1) Indica la posizione di  $\frac{5}{7}$ 2) Indica la posizione di  $\frac{5}{6}$ 3) Indica la posizione di  $-1\frac{2}{4}$ 4) Indica la posizione di  $-1\frac{1}{8}$ 5) Indica la posizione di  $1\frac{1}{4}$ 6) Indica la posizione di  $-2\frac{2}{7}$ 7) Indica la posizione di  $1\frac{1}{4}$ 8) Indica la posizione di  $2\frac{3}{8}$ 9) Indica la posizione di  $\frac{1}{2}$ 