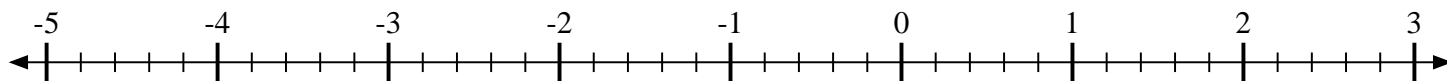
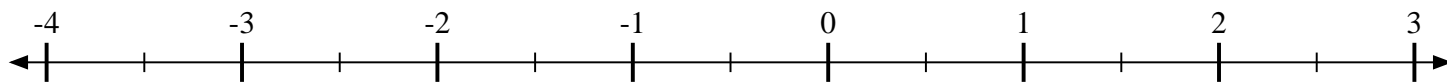


**Scrivi la posizione di ogni frazione.**

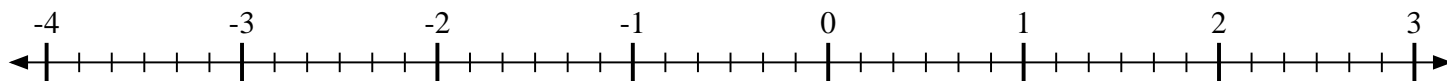
- 1) Indica la posizione di
- $-3\frac{4}{5}$



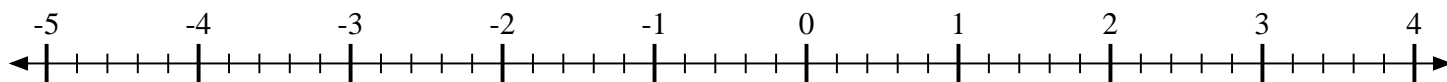
- 2) Indica la posizione di
- $-2\frac{1}{2}$



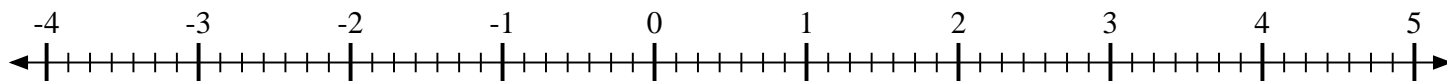
- 3) Indica la posizione di
- $-3\frac{4}{6}$



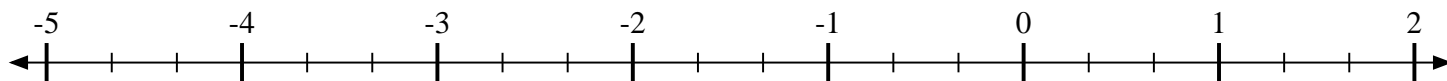
- 4) Indica la posizione di
- $-1\frac{4}{5}$



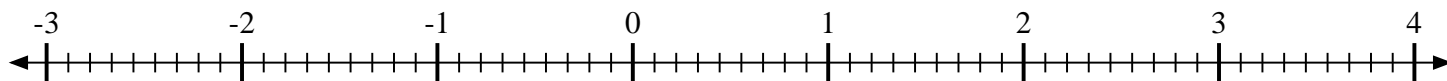
- 5) Indica la posizione di
- $1\frac{4}{7}$



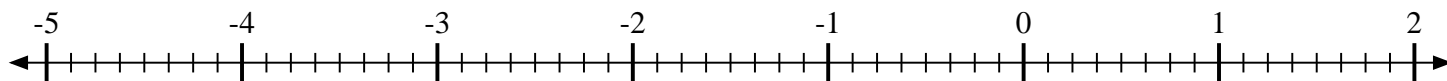
- 6) Indica la posizione di
- $-3\frac{2}{3}$



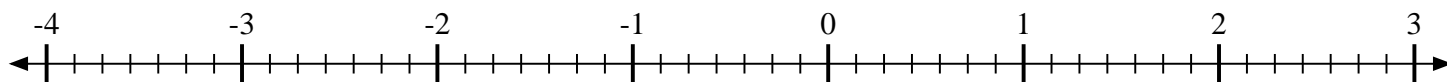
- 7) Indica la posizione di
- $2\frac{6}{9}$



- 8) Indica la posizione di
- $-4\frac{3}{8}$



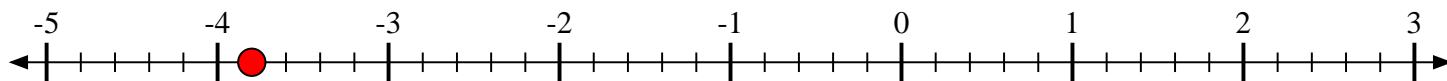
- 9) Indica la posizione di
- $-1\frac{1}{7}$



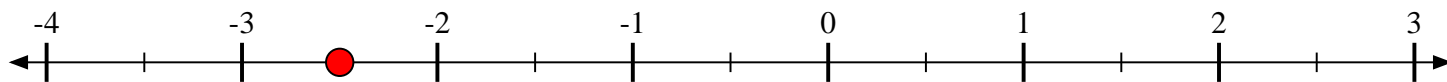


Scrivi la posizione di ogni frazione.

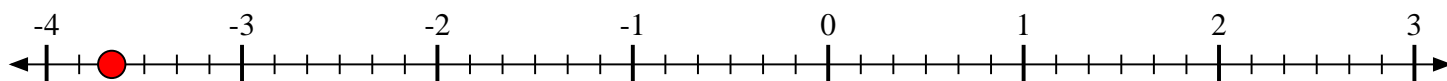
- 1) Indica la posizione di
- $-3\frac{4}{5}$



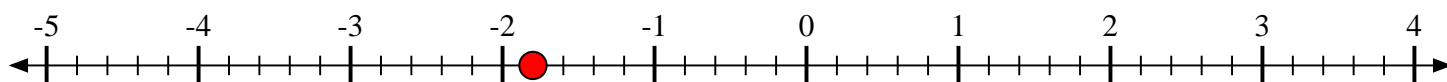
- 2) Indica la posizione di
- $-2\frac{1}{2}$



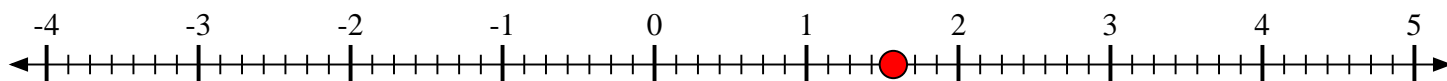
- 3) Indica la posizione di
- $-3\frac{4}{6}$



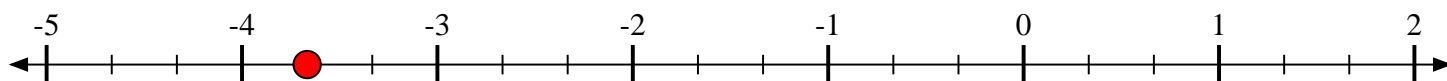
- 4) Indica la posizione di
- $-1\frac{4}{5}$



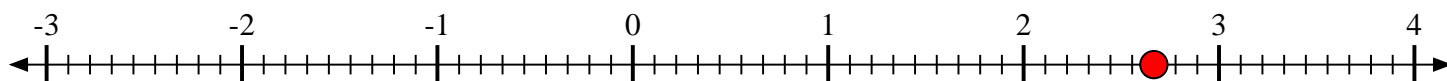
- 5) Indica la posizione di
- $1\frac{4}{7}$



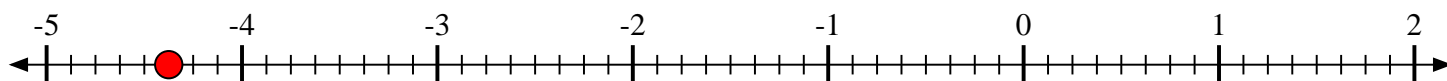
- 6) Indica la posizione di
- $-3\frac{2}{3}$



- 7) Indica la posizione di
- $2\frac{6}{9}$



- 8) Indica la posizione di
- $-4\frac{3}{8}$



- 9) Indica la posizione di
- $-1\frac{1}{7}$

