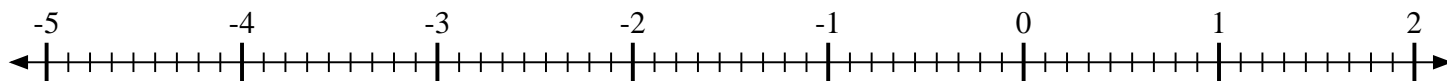
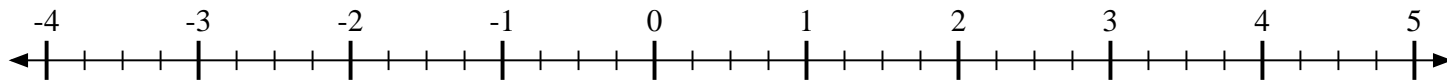
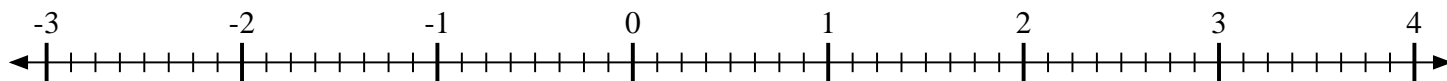
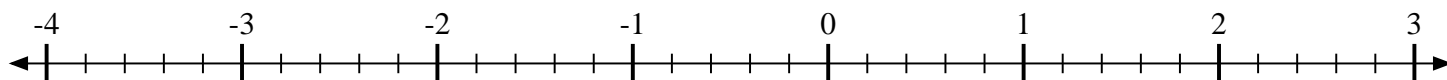
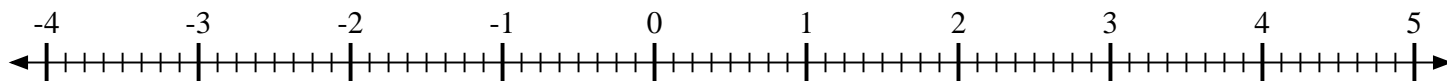
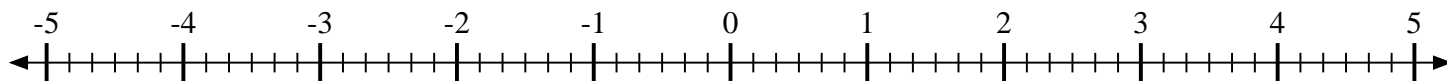
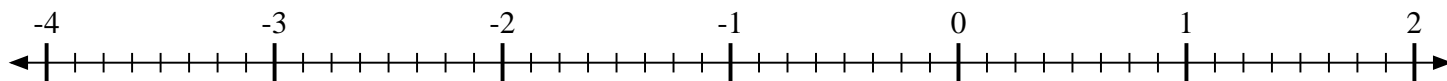
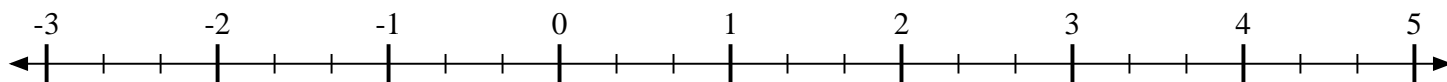
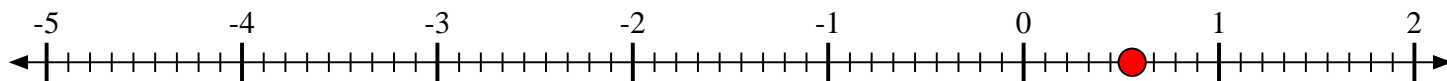


**Scrivi la posizione di ogni frazione.**1) Indica la posizione di $\frac{5}{9}$ 2) Indica la posizione di $-1\frac{1}{4}$ 3) Indica la posizione di $\frac{3}{8}$ 4) Indica la posizione di $2\frac{1}{5}$ 5) Indica la posizione di $1\frac{6}{8}$ 6) Indica la posizione di $\frac{1}{2}$ 7) Indica la posizione di $-1\frac{4}{6}$ 8) Indica la posizione di $-1\frac{7}{8}$ 9) Indica la posizione di $\frac{2}{3}$ 

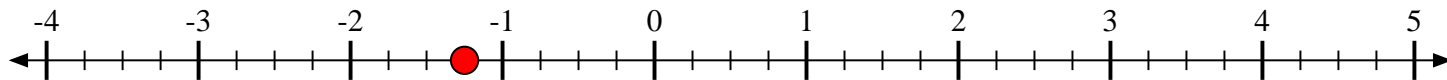


Scrivi la posizione di ogni frazione.

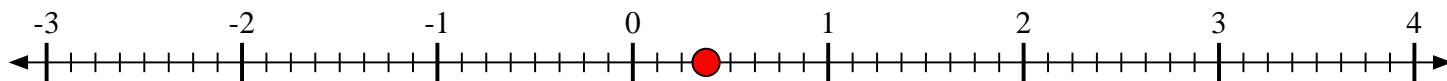
- 1) Indica la posizione di
- $\frac{5}{9}$



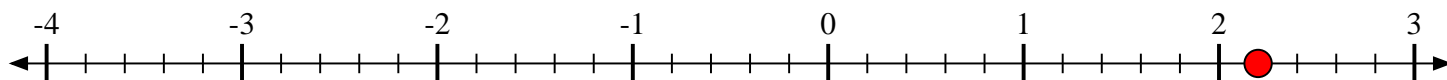
- 2) Indica la posizione di
- $-1\frac{1}{4}$



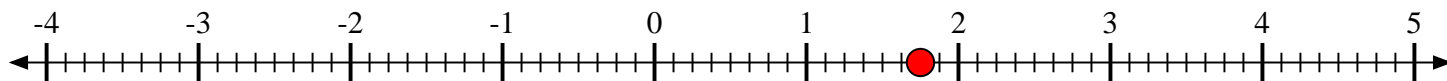
- 3) Indica la posizione di
- $\frac{3}{8}$



- 4) Indica la posizione di
- $2\frac{1}{5}$



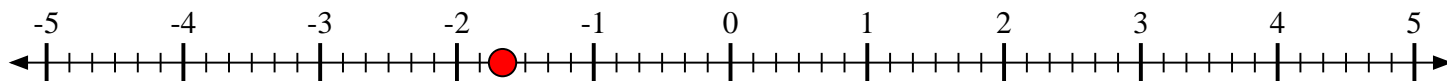
- 5) Indica la posizione di
- $1\frac{6}{8}$



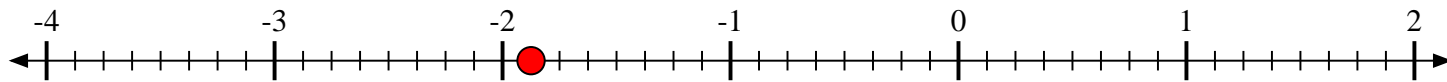
- 6) Indica la posizione di
- $\frac{1}{2}$



- 7) Indica la posizione di
- $-1\frac{4}{6}$



- 8) Indica la posizione di
- $-1\frac{7}{8}$



- 9) Indica la posizione di
- $\frac{2}{3}$

