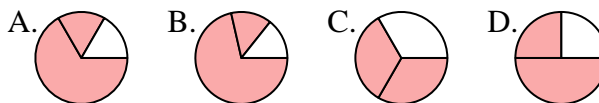




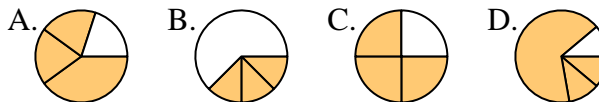
Determina quale lettera rappresenta correttamente la frazione.

Risposte

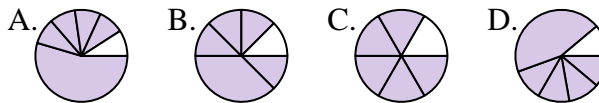
1) Quale risposta corrisponde a $\frac{2}{3}$?



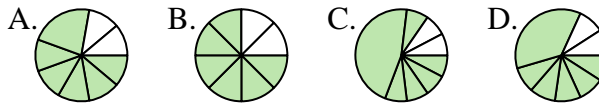
2) Quale risposta corrisponde a $\frac{3}{4}$?



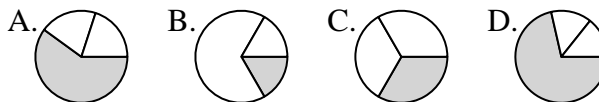
3) Quale risposta corrisponde a $\frac{5}{6}$?



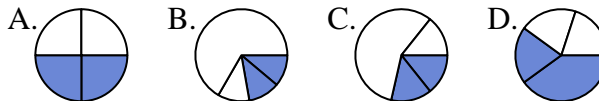
4) Quale risposta corrisponde a $\frac{6}{8}$?



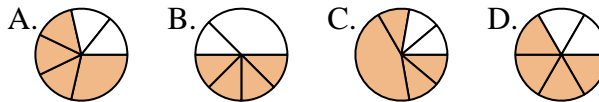
5) Quale risposta corrisponde a $\frac{1}{3}$?



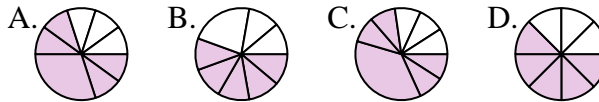
6) Quale risposta corrisponde a $\frac{2}{4}$?



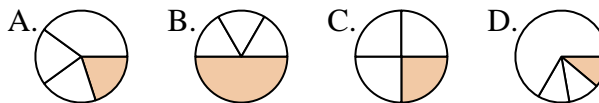
7) Quale risposta corrisponde a $\frac{4}{6}$?



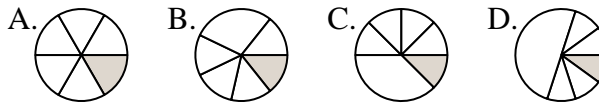
8) Quale risposta corrisponde a $\frac{5}{8}$?



9) Quale risposta corrisponde a $\frac{1}{4}$?



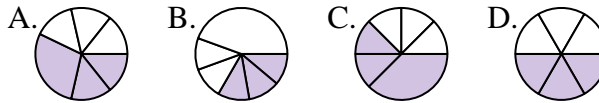
10) Quale risposta corrisponde a $\frac{1}{6}$?



11) Quale risposta corrisponde a $\frac{4}{8}$?



12) Quale risposta corrisponde a $\frac{3}{6}$?

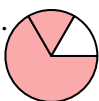

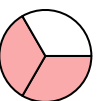
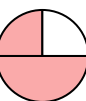


1. _____
2. _____
3. _____
4. _____
5. _____
6. _____
7. _____
8. _____
9. _____
10. _____
11. _____
12. _____







Determina quale lettera rappresenta correttamente la frazione.

Risposte

1) Quale risposta corrisponde a $\frac{2}{3}$?
 A.  B.  C.  D. 

1. **C**





2) Quale risposta corrisponde a $\frac{3}{4}$?
 A.  B.  C.  D. 

2. **C**

3) Quale risposta corrisponde a $\frac{5}{6}$?
 A.  B.  C.  D. 





3. **C**

4. **B**

4) Quale risposta corrisponde a $\frac{6}{8}$?
 A.  B.  C.  D. 





5. **C**

6. **A**

5) Quale risposta corrisponde a $\frac{1}{3}$?
 A.  B.  C.  D. 





7. **D**

8. **D**

6) Quale risposta corrisponde a $\frac{2}{4}$?
 A.  B.  C.  D. 

9. **C**

10. **A**



7) Quale risposta corrisponde a $\frac{4}{6}$?
 A.  B.  C.  D. 

11. **A**




8) Quale risposta corrisponde a $\frac{5}{8}$?
 A.  B.  C.  D. 

12. **D**

9) Quale risposta corrisponde a $\frac{1}{4}$?
 A.  B.  C.  D. 

10) Quale risposta corrisponde a $\frac{1}{6}$?
 A.  B.  C.  D. 

11) Quale risposta corrisponde a $\frac{4}{8}$?
 A.  B.  C.  D. 

12) Quale risposta corrisponde a $\frac{3}{6}$?
 A.  B.  C.  D. 