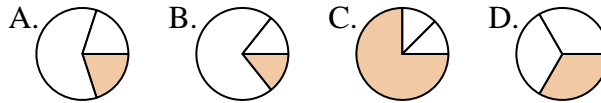




**Determina quale lettera rappresenta correttamente la frazione.**

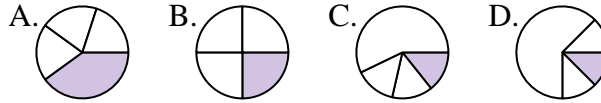
**Risposte**

1) Quale risposta corrisponde a  $\frac{1}{3}$ ?



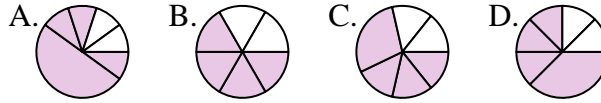
1. \_\_\_\_\_

2) Quale risposta corrisponde a  $\frac{1}{4}$ ?



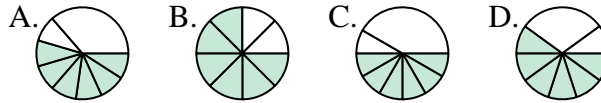
2. \_\_\_\_\_

3) Quale risposta corrisponde a  $\frac{4}{6}$ ?



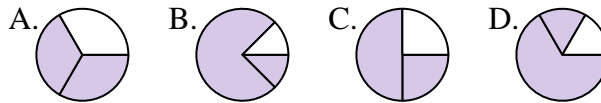
3. \_\_\_\_\_

4) Quale risposta corrisponde a  $\frac{6}{8}$ ?



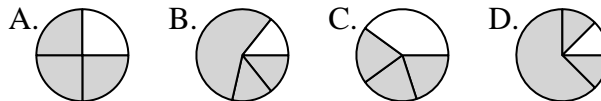
4. \_\_\_\_\_

5) Quale risposta corrisponde a  $\frac{2}{3}$ ?



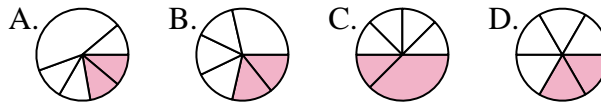
5. \_\_\_\_\_

6) Quale risposta corrisponde a  $\frac{3}{4}$ ?



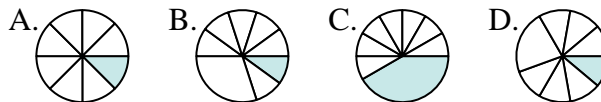
6. \_\_\_\_\_

7) Quale risposta corrisponde a  $\frac{2}{6}$ ?



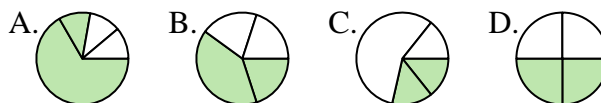
7. \_\_\_\_\_

8) Quale risposta corrisponde a  $\frac{1}{8}$ ?



8. \_\_\_\_\_

9) Quale risposta corrisponde a  $\frac{2}{4}$ ?



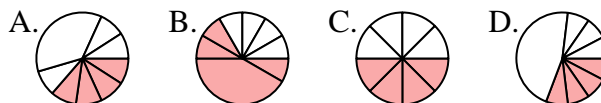
9. \_\_\_\_\_

10) Quale risposta corrisponde a  $\frac{1}{6}$ ?



10. \_\_\_\_\_

11) Quale risposta corrisponde a  $\frac{4}{8}$ ?



11. \_\_\_\_\_

12) Quale risposta corrisponde a  $\frac{3}{6}$ ?

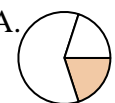
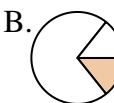
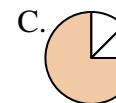
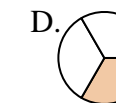


12. \_\_\_\_\_




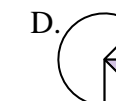


Determina quale lettera rappresenta correttamente la frazione.


**Risposte**

1) Quale risposta corrisponde a  $\frac{1}{3}$ ?  
 A.  B.  C.  D. 

1.     **D**    


2) Quale risposta corrisponde a  $\frac{1}{4}$ ?  
 A.  B.  C.  D. 

2.     **B**    

3) Quale risposta corrisponde a  $\frac{4}{6}$ ?  
 A.  B.  C.  D. 

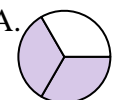

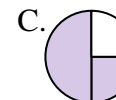
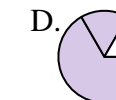
3.     **B**    

4.     **B**    

4) Quale risposta corrisponde a  $\frac{6}{8}$ ?  
 A.  B.  C.  D. 

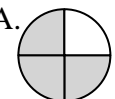

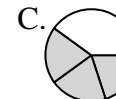
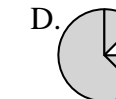
5.     **A**    

6.     **A**    

5) Quale risposta corrisponde a  $\frac{2}{3}$ ?  
 A.  B.  C.  D. 


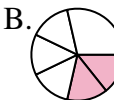
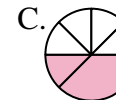
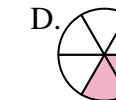
7.     **D**    

8.     **A**    

6) Quale risposta corrisponde a  $\frac{3}{4}$ ?  
 A.  B.  C.  D. 


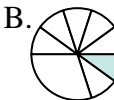
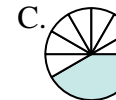
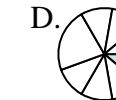
9.     **D**    




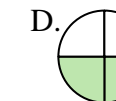
10.     **D**    



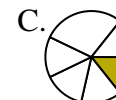
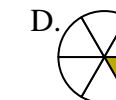
7) Quale risposta corrisponde a  $\frac{2}{6}$ ?  
 A.  B.  C.  D. 



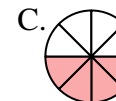

11.     **C**    



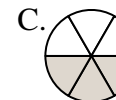
12.     **C**    

8) Quale risposta corrisponde a  $\frac{1}{8}$ ?  
 A.  B.  C.  D. 

9) Quale risposta corrisponde a  $\frac{2}{4}$ ?  
 A.  B.  C.  D. 

10) Quale risposta corrisponde a  $\frac{1}{6}$ ?  
 A.  B.  C.  D. 

11) Quale risposta corrisponde a  $\frac{4}{8}$ ?  
 A.  B.  C.  D. 

12) Quale risposta corrisponde a  $\frac{3}{6}$ ?  
 A.  B.  C.  D. 