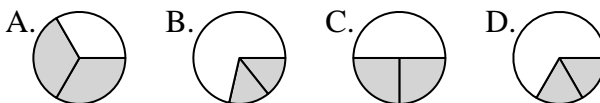




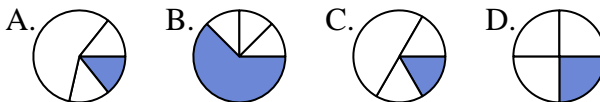
Determina quale lettera rappresenta correttamente la frazione.

Risposte

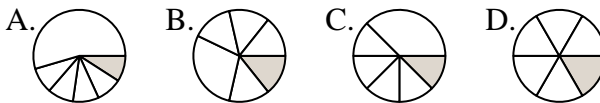
1) Quale risposta corrisponde a $\frac{2}{3}$?



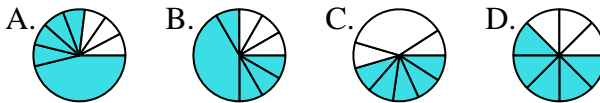
2) Quale risposta corrisponde a $\frac{1}{4}$?



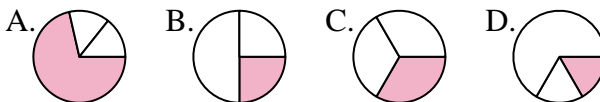
3) Quale risposta corrisponde a $\frac{1}{6}$?



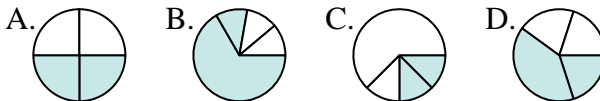
4) Quale risposta corrisponde a $\frac{5}{8}$?



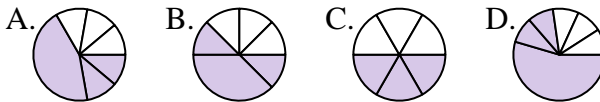
5) Quale risposta corrisponde a $\frac{1}{3}$?



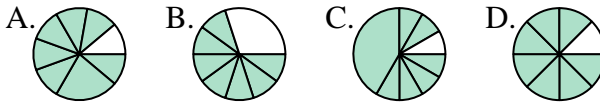
6) Quale risposta corrisponde a $\frac{2}{4}$?



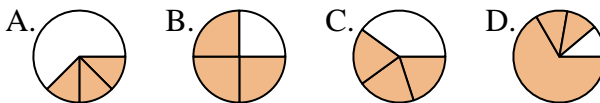
7) Quale risposta corrisponde a $\frac{3}{6}$?



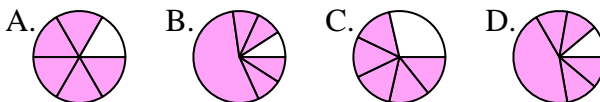
8) Quale risposta corrisponde a $\frac{7}{8}$?



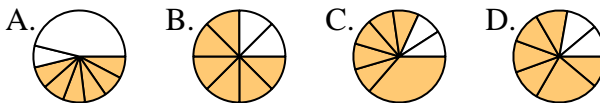
9) Quale risposta corrisponde a $\frac{3}{4}$?



10) Quale risposta corrisponde a $\frac{5}{6}$?



11) Quale risposta corrisponde a $\frac{6}{8}$?



12) Quale risposta corrisponde a $\frac{4}{6}$?

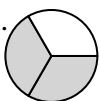
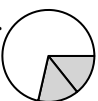
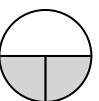



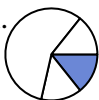

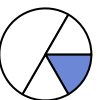

1. _____
2. _____
3. _____
4. _____
5. _____
6. _____
7. _____
8. _____
9. _____
10. _____
11. _____
12. _____


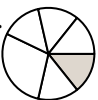
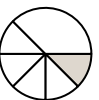







Determina quale lettera rappresenta correttamente la frazione.


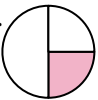
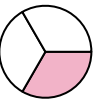

Risposte

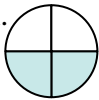



1) Quale risposta corrisponde a $\frac{2}{3}$?
 A.  B.  C.  D. 


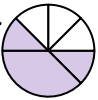
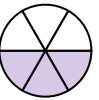

2) Quale risposta corrisponde a $\frac{1}{4}$?
 A.  B.  C.  D. 

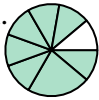



3) Quale risposta corrisponde a $\frac{1}{6}$?
 A.  B.  C.  D. 

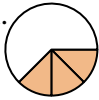
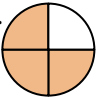
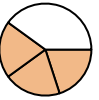

4) Quale risposta corrisponde a $\frac{5}{8}$?
 A.  B.  C.  D. 

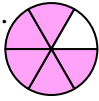

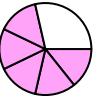

5) Quale risposta corrisponde a $\frac{1}{3}$?
 A.  B.  C.  D. 


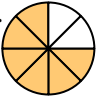


6) Quale risposta corrisponde a $\frac{2}{4}$?
 A.  B.  C.  D. 



7) Quale risposta corrisponde a $\frac{3}{6}$?
 A.  B.  C.  D. 

8) Quale risposta corrisponde a $\frac{7}{8}$?
 A.  B.  C.  D. 

9) Quale risposta corrisponde a $\frac{3}{4}$?
 A.  B.  C.  D. 

10) Quale risposta corrisponde a $\frac{5}{6}$?
 A.  B.  C.  D. 

11) Quale risposta corrisponde a $\frac{6}{8}$?
 A.  B.  C.  D. 

12) Quale risposta corrisponde a $\frac{4}{6}$?
 A.  B.  C.  D. 

1. **A**

2. **D**

3. **D**

4. **D**

5. **C**

6. **A**

7. **C**

8. **D**

9. **B**

10. **A**

11. **B**

12. **B**