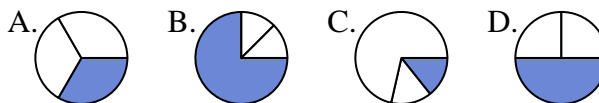




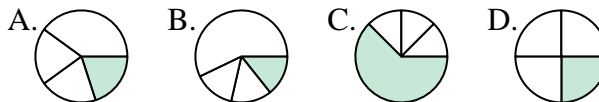
Determina quale lettera rappresenta correttamente la frazione.

Risposte

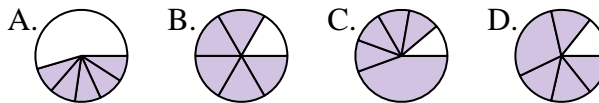
1) Quale risposta corrisponde a $\frac{1}{3}$?



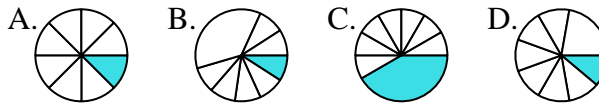
2) Quale risposta corrisponde a $\frac{1}{4}$?



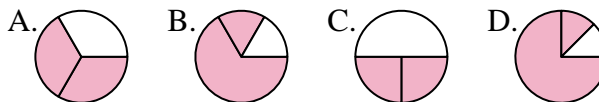
3) Quale risposta corrisponde a $\frac{5}{6}$?



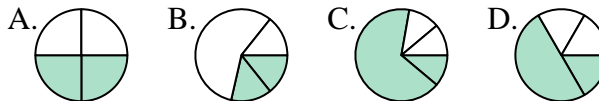
4) Quale risposta corrisponde a $\frac{1}{8}$?



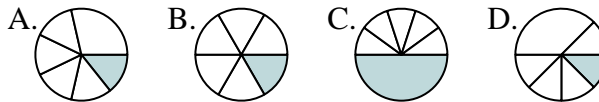
5) Quale risposta corrisponde a $\frac{2}{3}$?



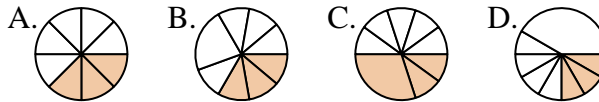
6) Quale risposta corrisponde a $\frac{2}{4}$?



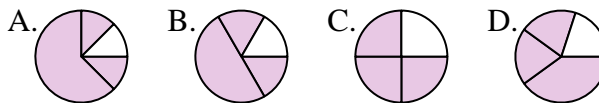
7) Quale risposta corrisponde a $\frac{1}{6}$?



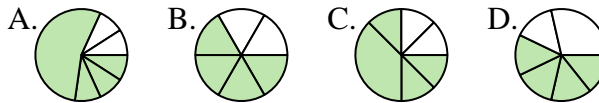
8) Quale risposta corrisponde a $\frac{3}{8}$?



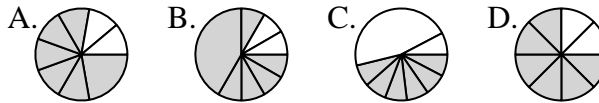
9) Quale risposta corrisponde a $\frac{3}{4}$?



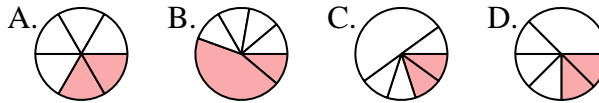
10) Quale risposta corrisponde a $\frac{4}{6}$?



11) Quale risposta corrisponde a $\frac{6}{8}$?



12) Quale risposta corrisponde a $\frac{2}{6}$?



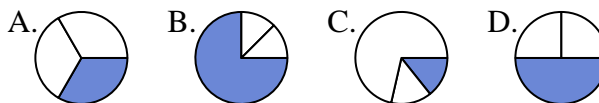
1. _____
2. _____
3. _____
4. _____
5. _____
6. _____
7. _____
8. _____
9. _____
10. _____
11. _____
12. _____



Determina quale lettera rappresenta correttamente la frazione.

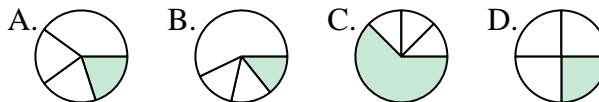
Risposte

1) Quale risposta corrisponde a $\frac{1}{3}$?



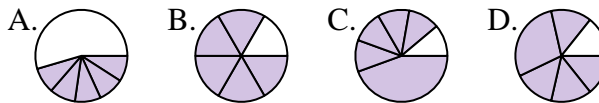
1. **A**

2) Quale risposta corrisponde a $\frac{1}{4}$?



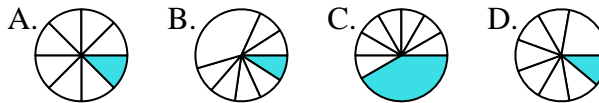
2. **D**

3) Quale risposta corrisponde a $\frac{5}{6}$?



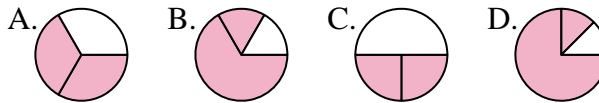
3. **B**

4) Quale risposta corrisponde a $\frac{1}{8}$?



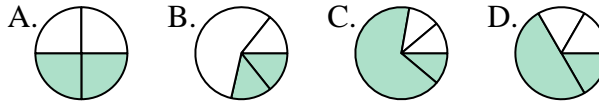
4. **A**

5) Quale risposta corrisponde a $\frac{2}{3}$?



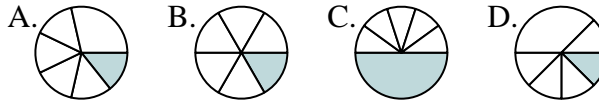
5. **A**

6) Quale risposta corrisponde a $\frac{2}{4}$?



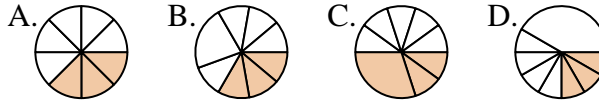
6. **A**

7) Quale risposta corrisponde a $\frac{1}{6}$?



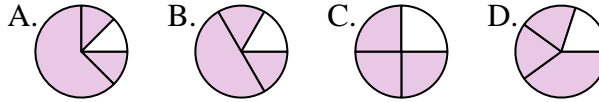
7. **B**

8) Quale risposta corrisponde a $\frac{3}{8}$?



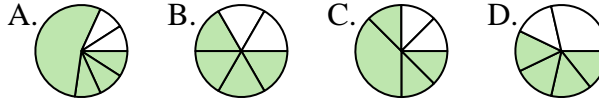
8. **A**

9) Quale risposta corrisponde a $\frac{3}{4}$?



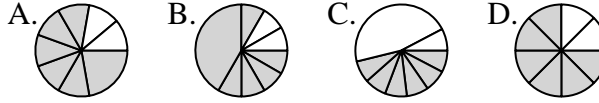
9. **C**

10) Quale risposta corrisponde a $\frac{4}{6}$?



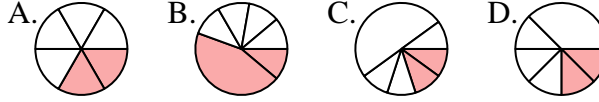
10. **B**

11) Quale risposta corrisponde a $\frac{6}{8}$?



11. **D**

12) Quale risposta corrisponde a $\frac{2}{6}$?



12. **A**