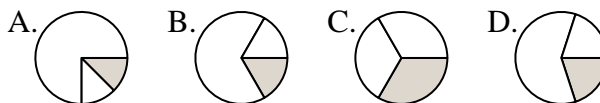




**Determina quale lettera rappresenta correttamente la frazione.**

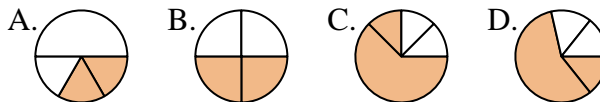
**Risposte**

1) Quale risposta corrisponde a  $\frac{1}{3}$ ?



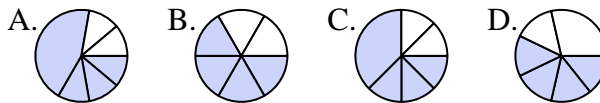
1. \_\_\_\_\_

2) Quale risposta corrisponde a  $\frac{2}{4}$ ?



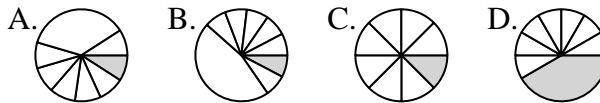
2. \_\_\_\_\_

3) Quale risposta corrisponde a  $\frac{4}{6}$ ?



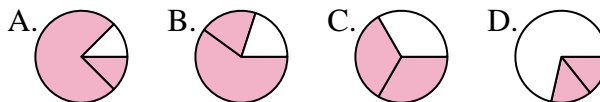
4. \_\_\_\_\_

4) Quale risposta corrisponde a  $\frac{1}{8}$ ?



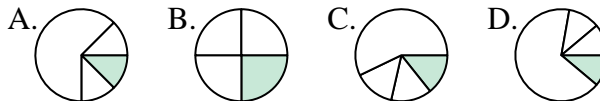
6. \_\_\_\_\_

5) Quale risposta corrisponde a  $\frac{2}{3}$ ?



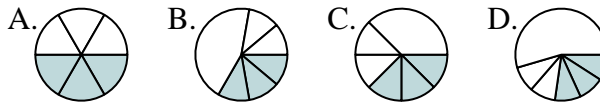
7. \_\_\_\_\_

6) Quale risposta corrisponde a  $\frac{1}{4}$ ?



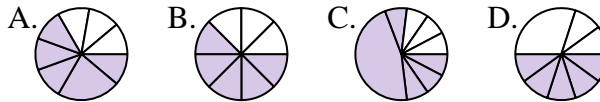
9. \_\_\_\_\_

7) Quale risposta corrisponde a  $\frac{3}{6}$ ?



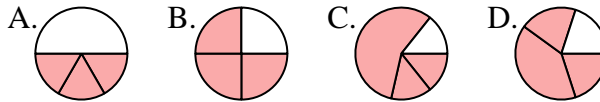
11. \_\_\_\_\_

8) Quale risposta corrisponde a  $\frac{5}{8}$ ?

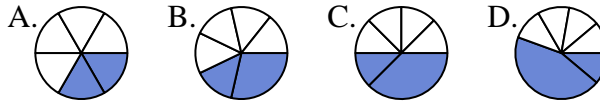


12. \_\_\_\_\_

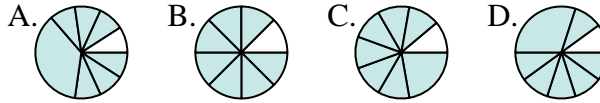
9) Quale risposta corrisponde a  $\frac{3}{4}$ ?



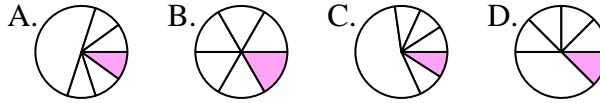
10) Quale risposta corrisponde a  $\frac{2}{6}$ ?



11) Quale risposta corrisponde a  $\frac{7}{8}$ ?



12) Quale risposta corrisponde a  $\frac{1}{6}$ ?





Determina quale lettera rappresenta correttamente la frazione.

**Risposte**

1) Quale risposta corrisponde a  $\frac{1}{3}$ ?  
 A. B. C. D.

1.     **C**    

2) Quale risposta corrisponde a  $\frac{2}{4}$ ?  
 A. B. C. D.

2.     **B**    

3) Quale risposta corrisponde a  $\frac{4}{6}$ ?  
 A. B. C. D.

3.     **B**    

4) Quale risposta corrisponde a  $\frac{1}{8}$ ?  
 A. B. C. D.

4.     **C**    

5) Quale risposta corrisponde a  $\frac{2}{3}$ ?  
 A. B. C. D.

5.     **C**    

6) Quale risposta corrisponde a  $\frac{1}{4}$ ?  
 A. B. C. D.

6.     **B**    

7) Quale risposta corrisponde a  $\frac{3}{6}$ ?  
 A. B. C. D.

7.     **A**    

8) Quale risposta corrisponde a  $\frac{5}{8}$ ?  
 A. B. C. D.

8.     **B**    

9) Quale risposta corrisponde a  $\frac{3}{4}$ ?  
 A. B. C. D.

9.     **B**    

10) Quale risposta corrisponde a  $\frac{2}{6}$ ?  
 A. B. C. D.

10.     **A**    

11) Quale risposta corrisponde a  $\frac{7}{8}$ ?  
 A. B. C. D.

11.     **B**    

12) Quale risposta corrisponde a  $\frac{1}{6}$ ?  
 A. B. C. D.

12.     **B**