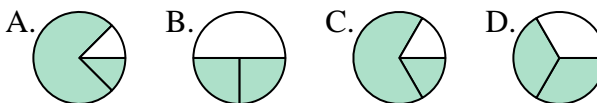




Determina quale lettera rappresenta correttamente la frazione.

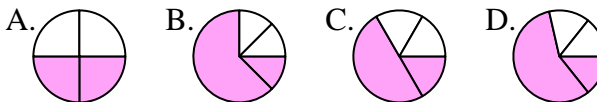
Risposte

1) Quale risposta corrisponde a $\frac{2}{3}$?



1. _____

2) Quale risposta corrisponde a $\frac{2}{4}$?



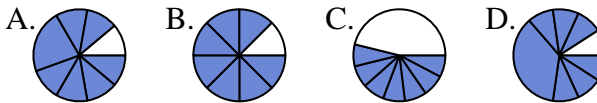
2. _____

3) Quale risposta corrisponde a $\frac{4}{6}$?



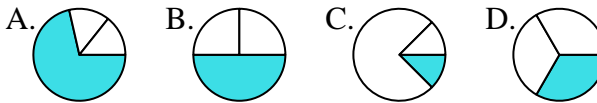
3. _____

4) Quale risposta corrisponde a $\frac{7}{8}$?



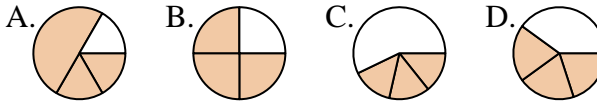
4. _____

5) Quale risposta corrisponde a $\frac{1}{3}$?



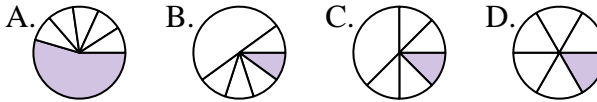
5. _____

6) Quale risposta corrisponde a $\frac{3}{4}$?



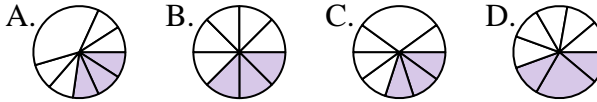
6. _____

7) Quale risposta corrisponde a $\frac{1}{6}$?



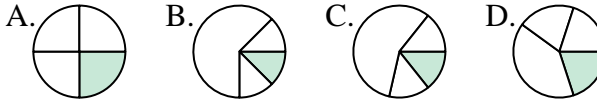
7. _____

8) Quale risposta corrisponde a $\frac{3}{8}$?



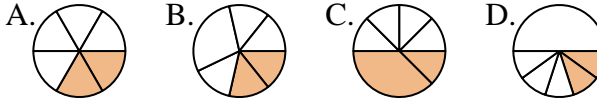
8. _____

9) Quale risposta corrisponde a $\frac{1}{4}$?



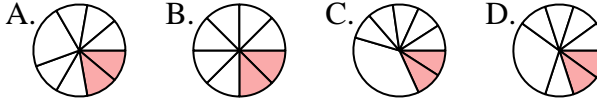
9. _____

10) Quale risposta corrisponde a $\frac{2}{6}$?



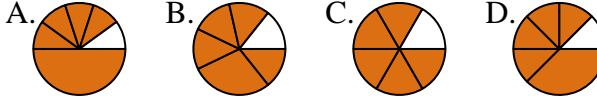
10. _____

11) Quale risposta corrisponde a $\frac{2}{8}$?



11. _____

12) Quale risposta corrisponde a $\frac{5}{6}$?



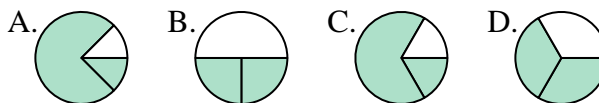
12. _____



Determina quale lettera rappresenta correttamente la frazione.

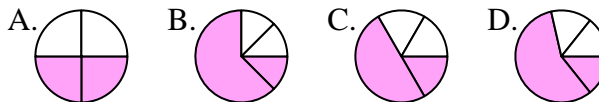
Risposte

1) Quale risposta corrisponde a $\frac{2}{3}$?



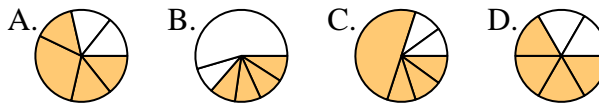
1. **D**

2) Quale risposta corrisponde a $\frac{2}{4}$?



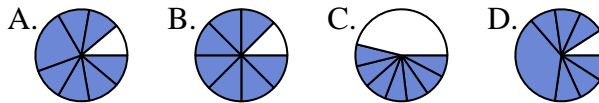
2. **A**

3) Quale risposta corrisponde a $\frac{4}{6}$?



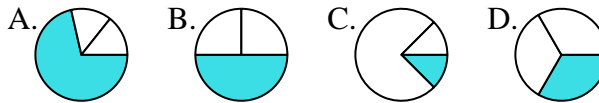
3. **D**

4) Quale risposta corrisponde a $\frac{7}{8}$?



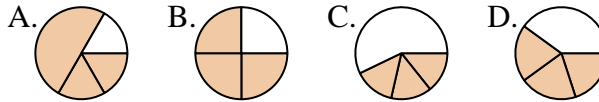
4. **B**

5) Quale risposta corrisponde a $\frac{1}{3}$?



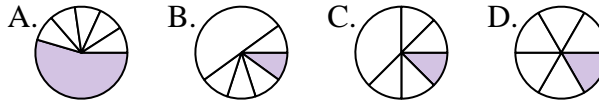
5. **D**

6) Quale risposta corrisponde a $\frac{3}{4}$?



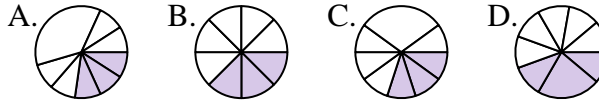
6. **B**

7) Quale risposta corrisponde a $\frac{1}{6}$?



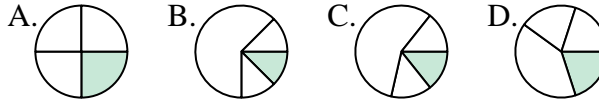
7. **D**

8) Quale risposta corrisponde a $\frac{3}{8}$?



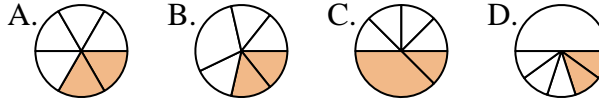
8. **B**

9) Quale risposta corrisponde a $\frac{1}{4}$?



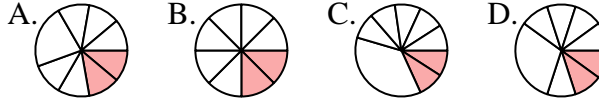
9. **A**

10) Quale risposta corrisponde a $\frac{2}{6}$?



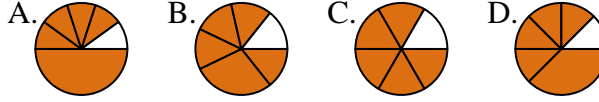
10. **A**

11) Quale risposta corrisponde a $\frac{2}{8}$?



11. **B**

12) Quale risposta corrisponde a $\frac{5}{6}$?



12. **C**