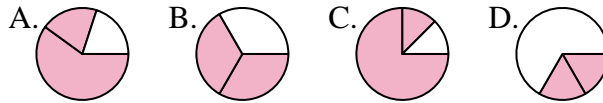




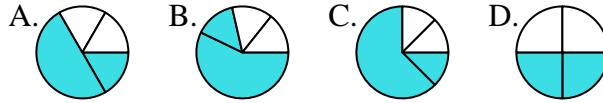
Determina quale lettera rappresenta correttamente la frazione.

Risposte

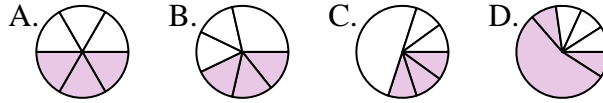
1) Quale risposta corrisponde a $\frac{2}{3}$?



2) Quale risposta corrisponde a $\frac{2}{4}$?



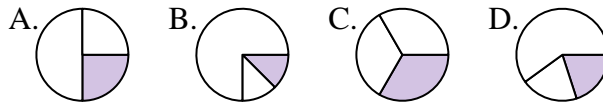
3) Quale risposta corrisponde a $\frac{3}{6}$?



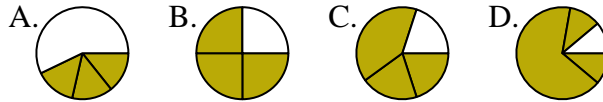
4) Quale risposta corrisponde a $\frac{6}{8}$?



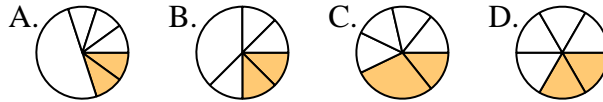
5) Quale risposta corrisponde a $\frac{1}{3}$?



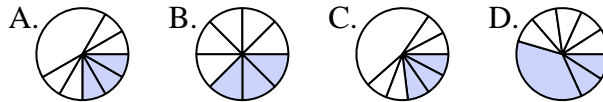
6) Quale risposta corrisponde a $\frac{3}{4}$?



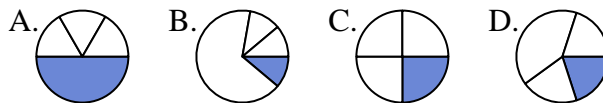
7) Quale risposta corrisponde a $\frac{2}{6}$?



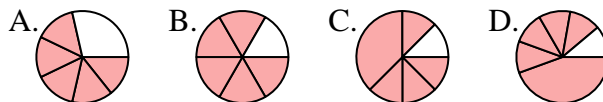
8) Quale risposta corrisponde a $\frac{3}{8}$?



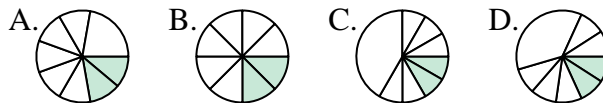
9) Quale risposta corrisponde a $\frac{1}{4}$?



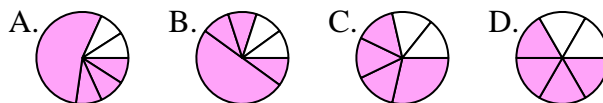
10) Quale risposta corrisponde a $\frac{5}{6}$?



11) Quale risposta corrisponde a $\frac{2}{8}$?



12) Quale risposta corrisponde a $\frac{4}{6}$?

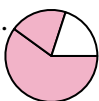
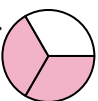




1. _____
2. _____
3. _____
4. _____
5. _____
6. _____
7. _____
8. _____
9. _____
10. _____
11. _____
12. _____





Determina quale lettera rappresenta correttamente la frazione.





Risposte

1) Quale risposta corrisponde a $\frac{2}{3}$?
 A.  B.  C.  D. 





1. **B**

2) Quale risposta corrisponde a $\frac{2}{4}$?
 A.  B.  C.  D. 

2. **D**

3) Quale risposta corrisponde a $\frac{3}{6}$?
 A.  B.  C.  D. 

3. **A**

4) Quale risposta corrisponde a $\frac{6}{8}$?
 A.  B.  C.  D. 





4. **A**

5) Quale risposta corrisponde a $\frac{1}{3}$?
 A.  B.  C.  D. 





5. **C**

6) Quale risposta corrisponde a $\frac{3}{4}$?
 A.  B.  C.  D. 





6. **B**

7) Quale risposta corrisponde a $\frac{2}{6}$?
 A.  B.  C.  D. 





7. **D**

8) Quale risposta corrisponde a $\frac{3}{8}$?
 A.  B.  C.  D. 





8. **B**

9) Quale risposta corrisponde a $\frac{1}{4}$?
 A.  B.  C.  D. 





9. **C**

10) Quale risposta corrisponde a $\frac{5}{6}$?
 A.  B.  C.  D. 

10. **B**

11) Quale risposta corrisponde a $\frac{2}{8}$?
 A.  B.  C.  D. 

11. **B**

12) Quale risposta corrisponde a $\frac{4}{6}$?
 A.  B.  C.  D. 

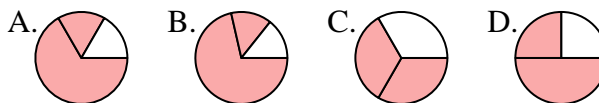
12. **D**



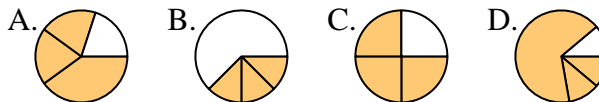
Determina quale lettera rappresenta correttamente la frazione.

Risposte

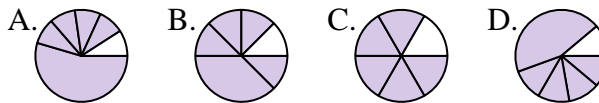
1) Quale risposta corrisponde a $\frac{2}{3}$?



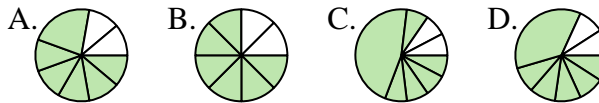
2) Quale risposta corrisponde a $\frac{3}{4}$?



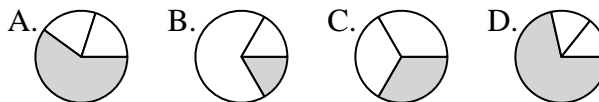
3) Quale risposta corrisponde a $\frac{5}{6}$?



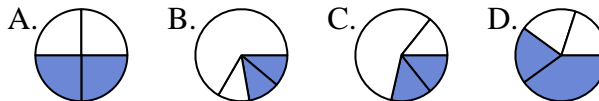
4) Quale risposta corrisponde a $\frac{6}{8}$?



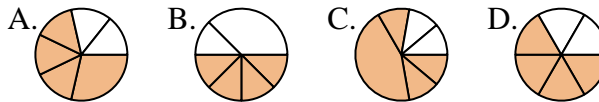
5) Quale risposta corrisponde a $\frac{1}{3}$?



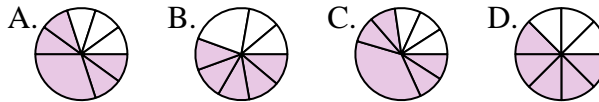
6) Quale risposta corrisponde a $\frac{2}{4}$?



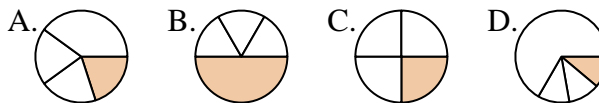
7) Quale risposta corrisponde a $\frac{4}{6}$?



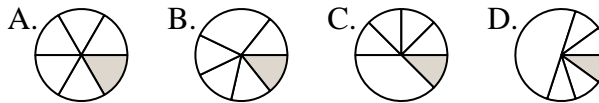
8) Quale risposta corrisponde a $\frac{5}{8}$?



9) Quale risposta corrisponde a $\frac{1}{4}$?



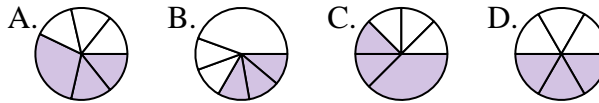
10) Quale risposta corrisponde a $\frac{1}{6}$?



11) Quale risposta corrisponde a $\frac{4}{8}$?



12) Quale risposta corrisponde a $\frac{3}{6}$?

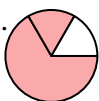

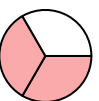
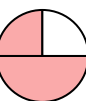


1. _____
2. _____
3. _____
4. _____
5. _____
6. _____
7. _____
8. _____
9. _____
10. _____
11. _____
12. _____







Determina quale lettera rappresenta correttamente la frazione.

Risposte

1) Quale risposta corrisponde a $\frac{2}{3}$?
 A.  B.  C.  D. 

1. **C**





2) Quale risposta corrisponde a $\frac{3}{4}$?
 A.  B.  C.  D. 

2. **C**

3) Quale risposta corrisponde a $\frac{5}{6}$?
 A.  B.  C.  D. 





3. **C**

4. **B**

4) Quale risposta corrisponde a $\frac{6}{8}$?
 A.  B.  C.  D. 





5. **C**

6. **A**

5) Quale risposta corrisponde a $\frac{1}{3}$?
 A.  B.  C.  D. 





7. **D**

8. **D**

6) Quale risposta corrisponde a $\frac{2}{4}$?
 A.  B.  C.  D. 

9. **C**

10. **A**




7) Quale risposta corrisponde a $\frac{4}{6}$?
 A.  B.  C.  D. 

11. **A**





8) Quale risposta corrisponde a $\frac{5}{8}$?
 A.  B.  C.  D. 

12. **D**

9) Quale risposta corrisponde a $\frac{1}{4}$?
 A.  B.  C.  D. 

10) Quale risposta corrisponde a $\frac{1}{6}$?
 A.  B.  C.  D. 

11) Quale risposta corrisponde a $\frac{4}{8}$?
 A.  B.  C.  D. 

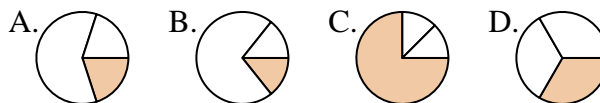
12) Quale risposta corrisponde a $\frac{3}{6}$?
 A.  B.  C.  D. 



Determina quale lettera rappresenta correttamente la frazione.

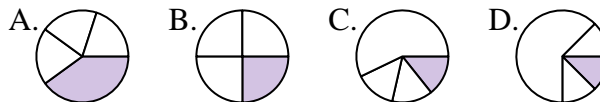
Risposte

1) Quale risposta corrisponde a $\frac{1}{3}$?



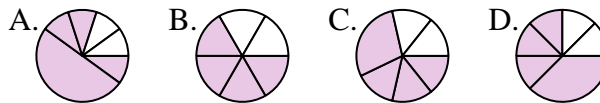
1. _____

2) Quale risposta corrisponde a $\frac{1}{4}$?



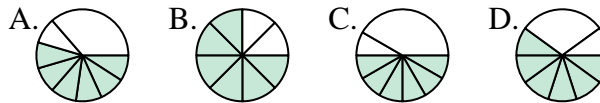
2. _____

3) Quale risposta corrisponde a $\frac{4}{6}$?



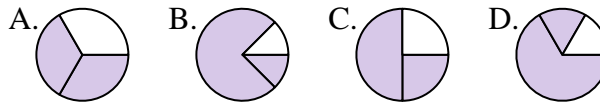
3. _____

4) Quale risposta corrisponde a $\frac{6}{8}$?



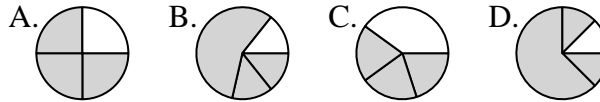
4. _____

5) Quale risposta corrisponde a $\frac{2}{3}$?



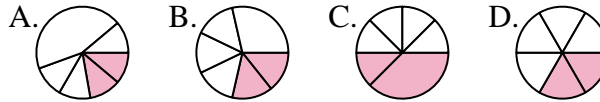
5. _____

6) Quale risposta corrisponde a $\frac{3}{4}$?



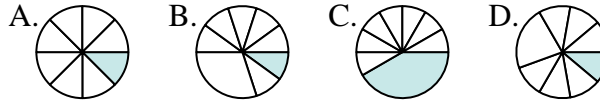
6. _____

7) Quale risposta corrisponde a $\frac{2}{6}$?



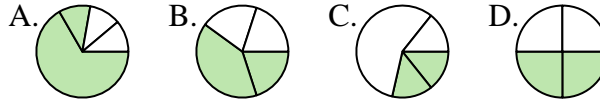
7. _____

8) Quale risposta corrisponde a $\frac{1}{8}$?



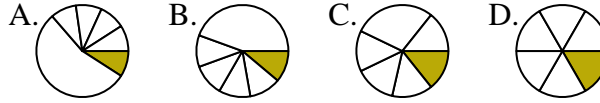
8. _____

9) Quale risposta corrisponde a $\frac{2}{4}$?



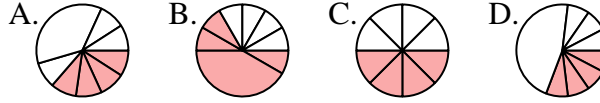
9. _____

10) Quale risposta corrisponde a $\frac{1}{6}$?



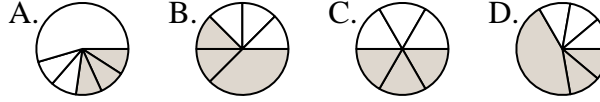
10. _____

11) Quale risposta corrisponde a $\frac{4}{8}$?



11. _____

12) Quale risposta corrisponde a $\frac{3}{6}$?

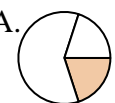
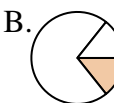
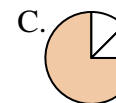
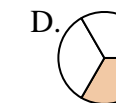


12. _____




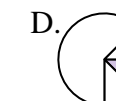


Determina quale lettera rappresenta correttamente la frazione.


Risposte

1) Quale risposta corrisponde a $\frac{1}{3}$?
 A.  B.  C.  D. 

1. **D**

2) Quale risposta corrisponde a $\frac{1}{4}$?
 A.  B.  C.  D. 

2. **B**

3) Quale risposta corrisponde a $\frac{4}{6}$?
 A.  B.  C.  D. 

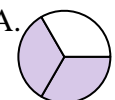

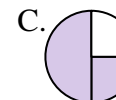
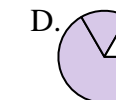
3. **B**

4. **B**

4) Quale risposta corrisponde a $\frac{6}{8}$?
 A.  B.  C.  D. 

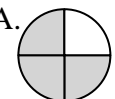

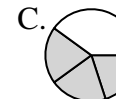
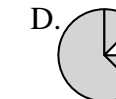
5. **A**

6. **A**

5) Quale risposta corrisponde a $\frac{2}{3}$?
 A.  B.  C.  D. 


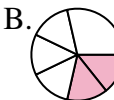
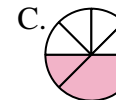
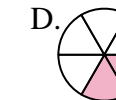
7. **D**

8. **A**

6) Quale risposta corrisponde a $\frac{3}{4}$?
 A.  B.  C.  D. 


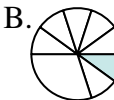
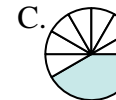
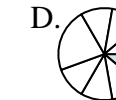
9. **D**




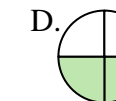
10. **D**



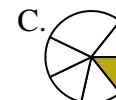
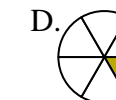
7) Quale risposta corrisponde a $\frac{2}{6}$?
 A.  B.  C.  D. 



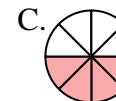

11. **C**



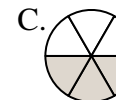

12. **C**

8) Quale risposta corrisponde a $\frac{1}{8}$?
 A.  B.  C.  D. 

9) Quale risposta corrisponde a $\frac{2}{4}$?
 A.  B.  C.  D. 

10) Quale risposta corrisponde a $\frac{1}{6}$?
 A.  B.  C.  D. 

11) Quale risposta corrisponde a $\frac{4}{8}$?
 A.  B.  C.  D. 

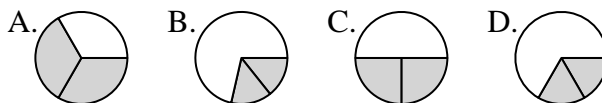
12) Quale risposta corrisponde a $\frac{3}{6}$?
 A.  B.  C.  D. 



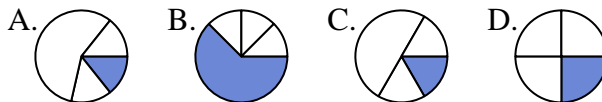
Determina quale lettera rappresenta correttamente la frazione.

Risposte

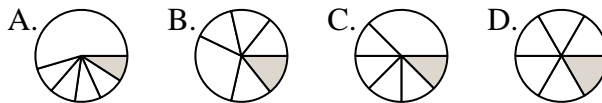
1) Quale risposta corrisponde a $\frac{2}{3}$?



2) Quale risposta corrisponde a $\frac{1}{4}$?



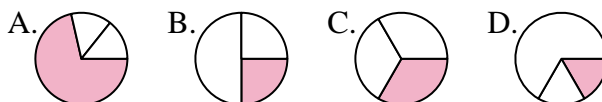
3) Quale risposta corrisponde a $\frac{1}{6}$?



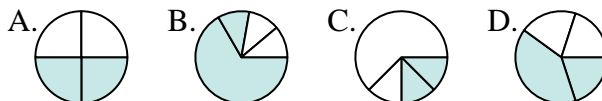
4) Quale risposta corrisponde a $\frac{5}{8}$?



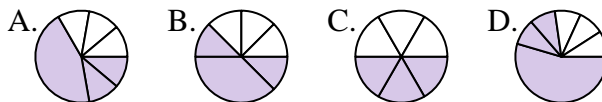
5) Quale risposta corrisponde a $\frac{1}{3}$?



6) Quale risposta corrisponde a $\frac{2}{4}$?



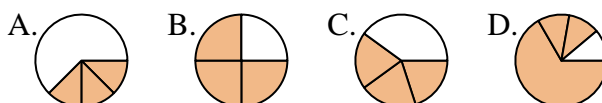
7) Quale risposta corrisponde a $\frac{3}{6}$?



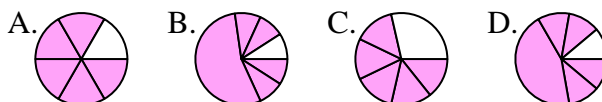
8) Quale risposta corrisponde a $\frac{7}{8}$?



9) Quale risposta corrisponde a $\frac{3}{4}$?



10) Quale risposta corrisponde a $\frac{5}{6}$?



11) Quale risposta corrisponde a $\frac{6}{8}$?



12) Quale risposta corrisponde a $\frac{4}{6}$?

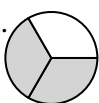
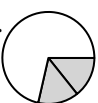
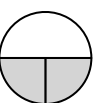





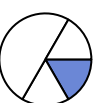

1. _____
2. _____
3. _____
4. _____
5. _____
6. _____
7. _____
8. _____
9. _____
10. _____
11. _____
12. _____


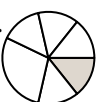
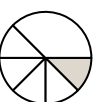



Determina quale lettera rappresenta correttamente la frazione.


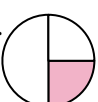
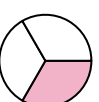

Risposte

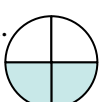



1) Quale risposta corrisponde a $\frac{2}{3}$?
 A.  B.  C.  D. 


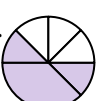
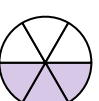

2) Quale risposta corrisponde a $\frac{1}{4}$?
 A.  B.  C.  D. 

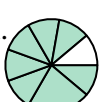



3) Quale risposta corrisponde a $\frac{1}{6}$?
 A.  B.  C.  D. 

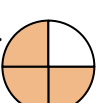
4) Quale risposta corrisponde a $\frac{5}{8}$?
 A.  B.  C.  D. 

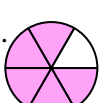

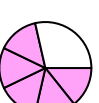

5) Quale risposta corrisponde a $\frac{1}{3}$?
 A.  B.  C.  D. 

6) Quale risposta corrisponde a $\frac{2}{4}$?
 A.  B.  C.  D. 


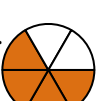


7) Quale risposta corrisponde a $\frac{3}{6}$?
 A.  B.  C.  D. 

8) Quale risposta corrisponde a $\frac{7}{8}$?
 A.  B.  C.  D. 

9) Quale risposta corrisponde a $\frac{3}{4}$?
 A.  B.  C.  D. 

10) Quale risposta corrisponde a $\frac{5}{6}$?
 A.  B.  C.  D. 

11) Quale risposta corrisponde a $\frac{6}{8}$?
 A.  B.  C.  D. 

12) Quale risposta corrisponde a $\frac{4}{6}$?
 A.  B.  C.  D. 

1. **A**

2. **D**

3. **D**

4. **D**

5. **C**

6. **A**

7. **C**

8. **D**

9. **B**

10. **A**

11. **B**

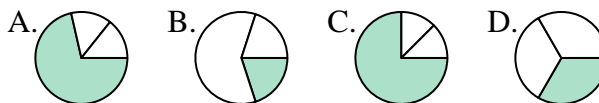
12. **B**



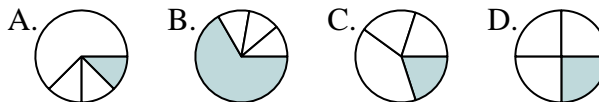
Determina quale lettera rappresenta correttamente la frazione.

Risposte

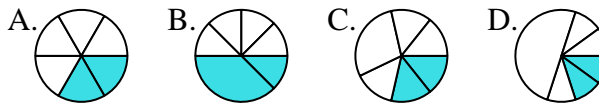
1) Quale risposta corrisponde a $\frac{1}{3}$?



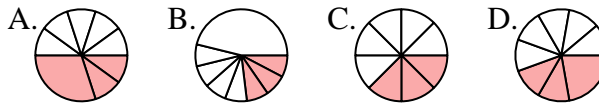
2) Quale risposta corrisponde a $\frac{1}{4}$?



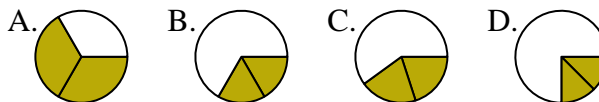
3) Quale risposta corrisponde a $\frac{2}{6}$?



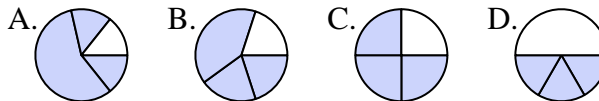
4) Quale risposta corrisponde a $\frac{3}{8}$?



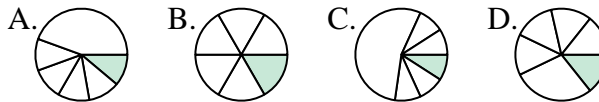
5) Quale risposta corrisponde a $\frac{2}{3}$?



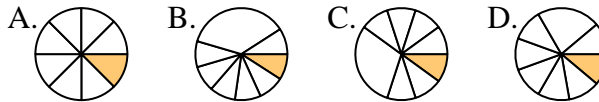
6) Quale risposta corrisponde a $\frac{3}{4}$?



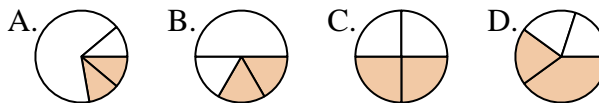
7) Quale risposta corrisponde a $\frac{1}{6}$?



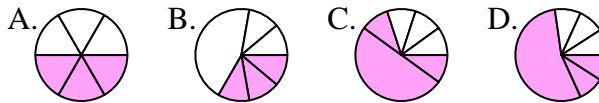
8) Quale risposta corrisponde a $\frac{1}{8}$?



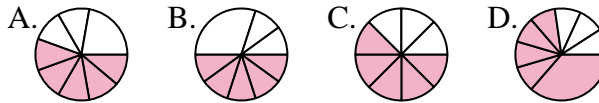
9) Quale risposta corrisponde a $\frac{2}{4}$?



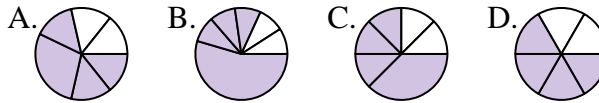
10) Quale risposta corrisponde a $\frac{3}{6}$?



11) Quale risposta corrisponde a $\frac{5}{8}$?



12) Quale risposta corrisponde a $\frac{4}{6}$?



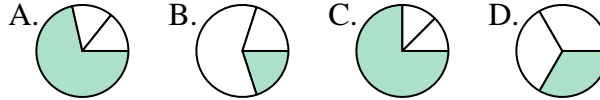
1. _____
2. _____
3. _____
4. _____
5. _____
6. _____
7. _____
8. _____
9. _____
10. _____
11. _____
12. _____



Determina quale lettera rappresenta correttamente la frazione.

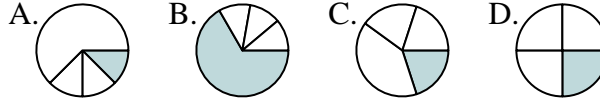
Risposte

1) Quale risposta corrisponde a $\frac{1}{3}$?



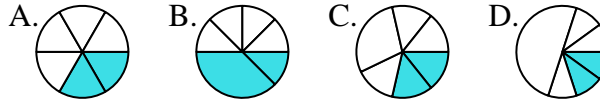
1. **D**

2) Quale risposta corrisponde a $\frac{1}{4}$?



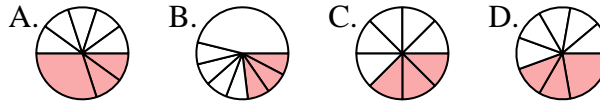
2. **D**

3) Quale risposta corrisponde a $\frac{2}{6}$?



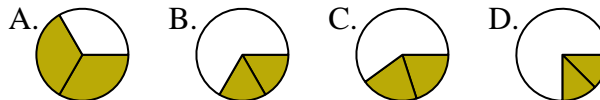
3. **A**

4) Quale risposta corrisponde a $\frac{3}{8}$?



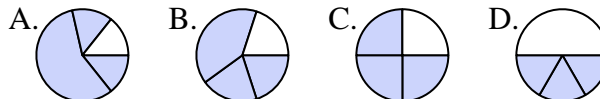
4. **C**

5) Quale risposta corrisponde a $\frac{2}{3}$?



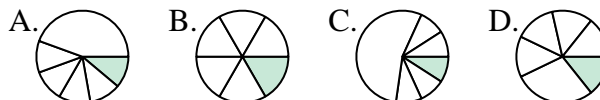
5. **A**

6) Quale risposta corrisponde a $\frac{3}{4}$?



6. **C**

7) Quale risposta corrisponde a $\frac{1}{6}$?



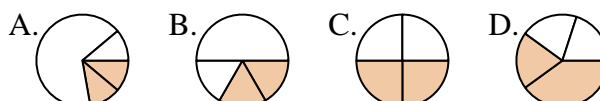
7. **B**

8) Quale risposta corrisponde a $\frac{1}{8}$?



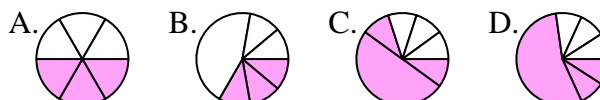
8. **A**

9) Quale risposta corrisponde a $\frac{2}{4}$?



9. **C**

10) Quale risposta corrisponde a $\frac{3}{6}$?



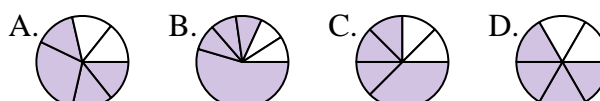
10. **A**

11) Quale risposta corrisponde a $\frac{5}{8}$?



11. **C**

12) Quale risposta corrisponde a $\frac{4}{6}$?



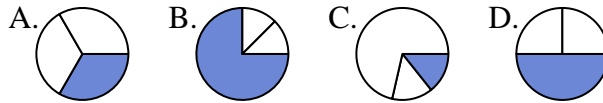
12. **D**



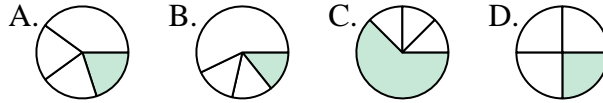
Determina quale lettera rappresenta correttamente la frazione.

Risposte

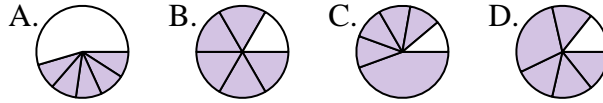
1) Quale risposta corrisponde a $\frac{1}{3}$?



2) Quale risposta corrisponde a $\frac{1}{4}$?



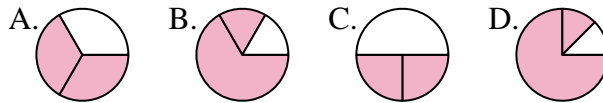
3) Quale risposta corrisponde a $\frac{5}{6}$?



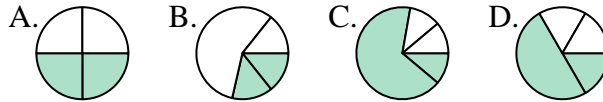
4) Quale risposta corrisponde a $\frac{1}{8}$?



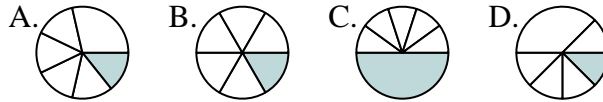
5) Quale risposta corrisponde a $\frac{2}{3}$?



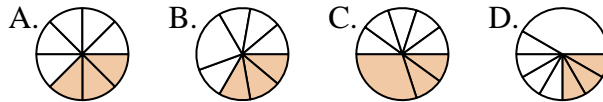
6) Quale risposta corrisponde a $\frac{2}{4}$?



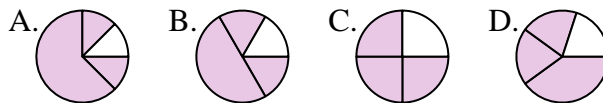
7) Quale risposta corrisponde a $\frac{1}{6}$?



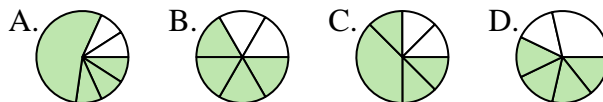
8) Quale risposta corrisponde a $\frac{3}{8}$?



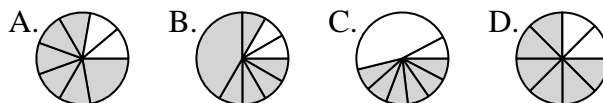
9) Quale risposta corrisponde a $\frac{3}{4}$?



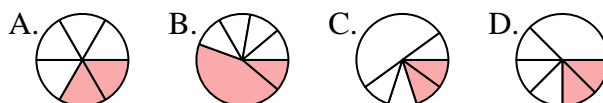
10) Quale risposta corrisponde a $\frac{4}{6}$?



11) Quale risposta corrisponde a $\frac{6}{8}$?



12) Quale risposta corrisponde a $\frac{2}{6}$?



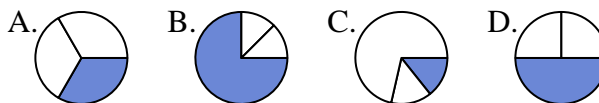
1. _____
2. _____
3. _____
4. _____
5. _____
6. _____
7. _____
8. _____
9. _____
10. _____
11. _____
12. _____



Determina quale lettera rappresenta correttamente la frazione.

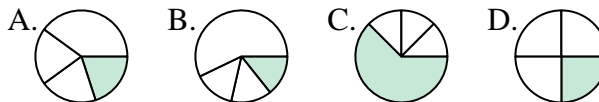
Risposte

1) Quale risposta corrisponde a $\frac{1}{3}$?



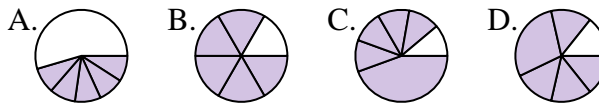
1. **A**

2) Quale risposta corrisponde a $\frac{1}{4}$?



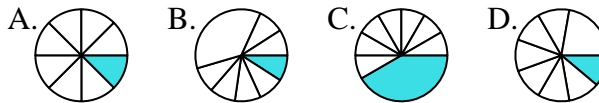
2. **D**

3) Quale risposta corrisponde a $\frac{5}{6}$?



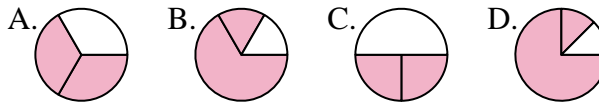
3. **B**

4) Quale risposta corrisponde a $\frac{1}{8}$?



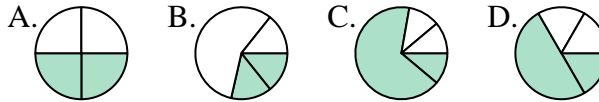
4. **A**

5) Quale risposta corrisponde a $\frac{2}{3}$?



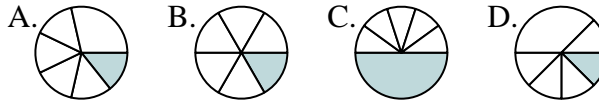
5. **A**

6) Quale risposta corrisponde a $\frac{2}{4}$?



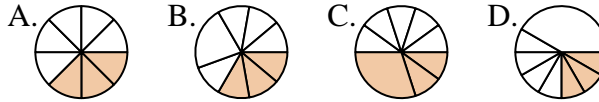
6. **A**

7) Quale risposta corrisponde a $\frac{1}{6}$?



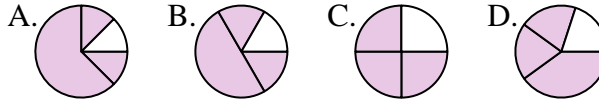
7. **B**

8) Quale risposta corrisponde a $\frac{3}{8}$?



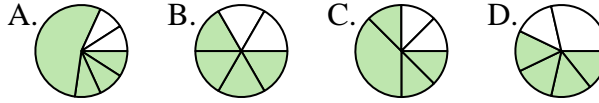
8. **A**

9) Quale risposta corrisponde a $\frac{3}{4}$?



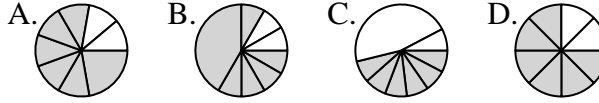
9. **C**

10) Quale risposta corrisponde a $\frac{4}{6}$?



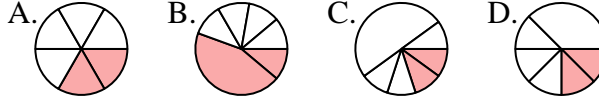
10. **B**

11) Quale risposta corrisponde a $\frac{6}{8}$?



11. **D**

12) Quale risposta corrisponde a $\frac{2}{6}$?



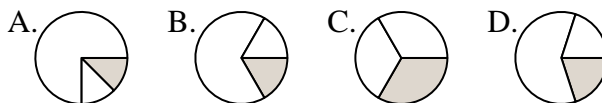
12. **A**



Determina quale lettera rappresenta correttamente la frazione.

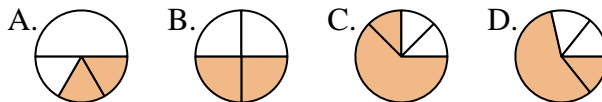
Risposte

1) Quale risposta corrisponde a $\frac{1}{3}$?



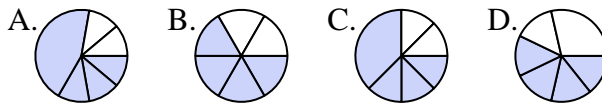
1. _____

2) Quale risposta corrisponde a $\frac{2}{4}$?



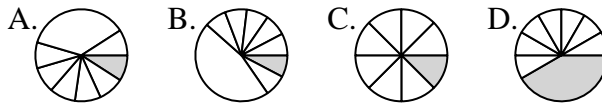
2. _____

3) Quale risposta corrisponde a $\frac{4}{6}$?



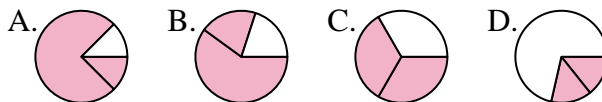
4. _____

4) Quale risposta corrisponde a $\frac{1}{8}$?



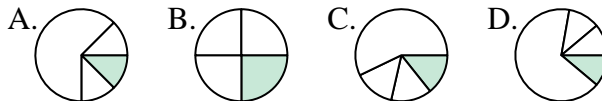
6. _____

5) Quale risposta corrisponde a $\frac{2}{3}$?



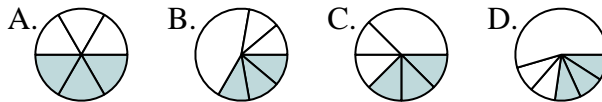
7. _____

6) Quale risposta corrisponde a $\frac{1}{4}$?



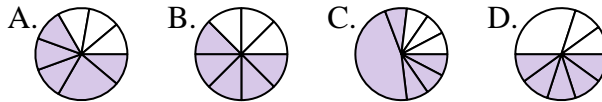
9. _____

7) Quale risposta corrisponde a $\frac{3}{6}$?



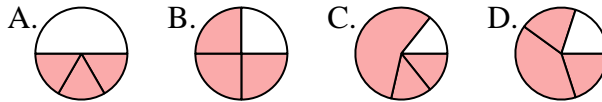
11. _____

8) Quale risposta corrisponde a $\frac{5}{8}$?

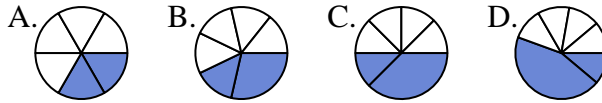


12. _____

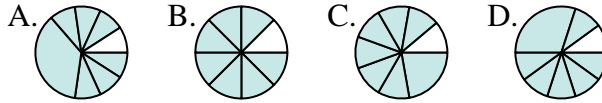
9) Quale risposta corrisponde a $\frac{3}{4}$?



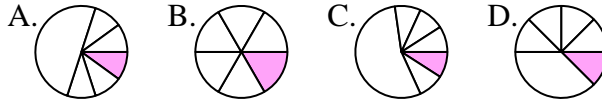
10) Quale risposta corrisponde a $\frac{2}{6}$?



11) Quale risposta corrisponde a $\frac{7}{8}$?



12) Quale risposta corrisponde a $\frac{1}{6}$?






Determina quale lettera rappresenta correttamente la frazione.


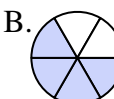
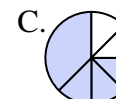
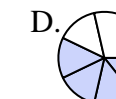
Risposte

1) Quale risposta corrisponde a $\frac{1}{3}$?
 A.  B.  C.  D. 



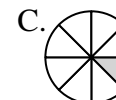
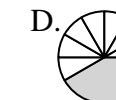
1. **C**

2) Quale risposta corrisponde a $\frac{2}{4}$?
 A.  B.  C.  D. 



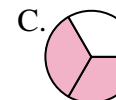
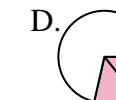
2. **B**

3) Quale risposta corrisponde a $\frac{4}{6}$?
 A.  B.  C.  D. 



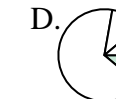
3. **B**

4) Quale risposta corrisponde a $\frac{1}{8}$?
 A.  B.  C.  D. 



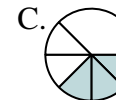
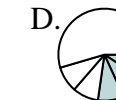
4. **C**

5) Quale risposta corrisponde a $\frac{2}{3}$?
 A.  B.  C.  D. 

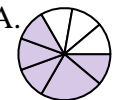
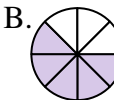
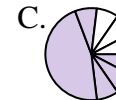
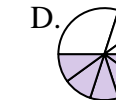
5. **C**

6) Quale risposta corrisponde a $\frac{1}{4}$?
 A.  B.  C.  D. 

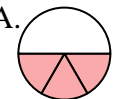
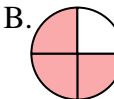
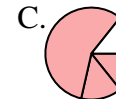
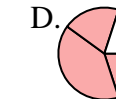
6. **B**

7) Quale risposta corrisponde a $\frac{3}{6}$?
 A.  B.  C.  D. 



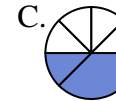
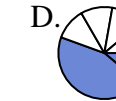
7. **A**

8) Quale risposta corrisponde a $\frac{5}{8}$?
 A.  B.  C.  D. 


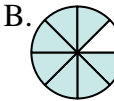
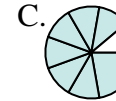
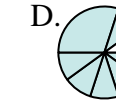
8. **B**

9) Quale risposta corrisponde a $\frac{3}{4}$?
 A.  B.  C.  D. 


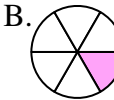
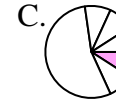
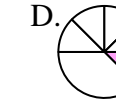
9. **B**

10) Quale risposta corrisponde a $\frac{2}{6}$?
 A.  B.  C.  D. 

10. **A**

11) Quale risposta corrisponde a $\frac{7}{8}$?
 A.  B.  C.  D. 

11. **B**

12) Quale risposta corrisponde a $\frac{1}{6}$?
 A.  B.  C.  D. 

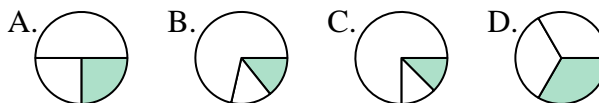
12. **B**



Determina quale lettera rappresenta correttamente la frazione.

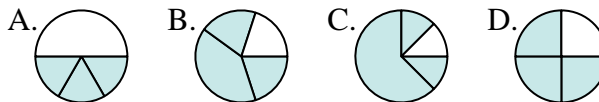
Risposte

1) Quale risposta corrisponde a $\frac{1}{3}$?



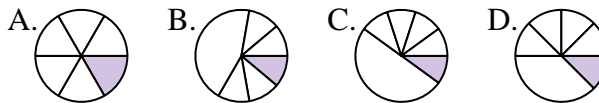
1. _____

2) Quale risposta corrisponde a $\frac{3}{4}$?



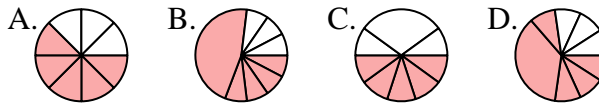
2. _____

3) Quale risposta corrisponde a $\frac{1}{6}$?



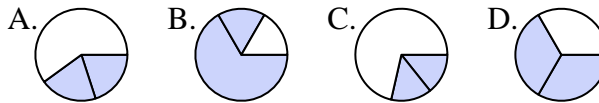
4. _____

4) Quale risposta corrisponde a $\frac{5}{8}$?



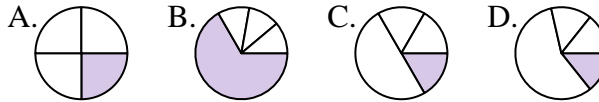
6. _____

5) Quale risposta corrisponde a $\frac{2}{3}$?



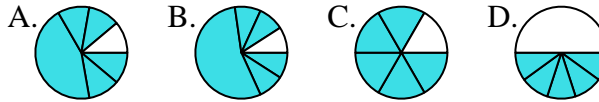
7. _____

6) Quale risposta corrisponde a $\frac{1}{4}$?



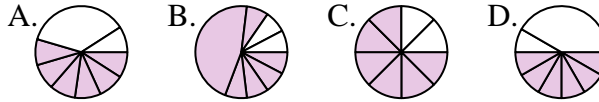
9. _____

7) Quale risposta corrisponde a $\frac{5}{6}$?



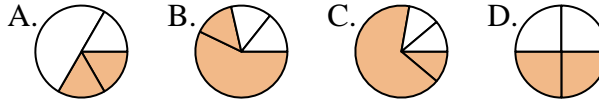
11. _____

8) Quale risposta corrisponde a $\frac{6}{8}$?

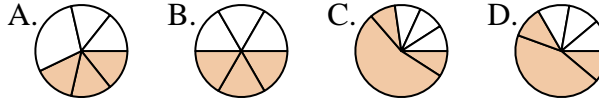


12. _____

9) Quale risposta corrisponde a $\frac{2}{4}$?



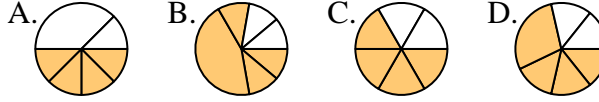
10) Quale risposta corrisponde a $\frac{3}{6}$?



11) Quale risposta corrisponde a $\frac{2}{8}$?



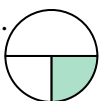



12) Quale risposta corrisponde a $\frac{4}{6}$?







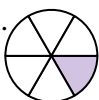





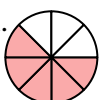

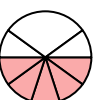

Determina quale lettera rappresenta correttamente la frazione.

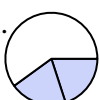

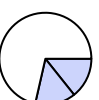
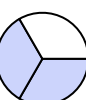
Risposte

1) Quale risposta corrisponde a $\frac{1}{3}$?
 A.  B.  C.  D. 





2) Quale risposta corrisponde a $\frac{3}{4}$?
 A.  B.  C.  D. 

3) Quale risposta corrisponde a $\frac{1}{6}$?
 A.  B.  C.  D. 

4) Quale risposta corrisponde a $\frac{5}{8}$?
 A.  B.  C.  D. 

5) Quale risposta corrisponde a $\frac{2}{3}$?
 A.  B.  C.  D. 

6) Quale risposta corrisponde a $\frac{1}{4}$?
 A.  B.  C.  D. 

7) Quale risposta corrisponde a $\frac{5}{6}$?
 A.  B.  C.  D. 

8) Quale risposta corrisponde a $\frac{6}{8}$?
 A.  B.  C.  D. 

9) Quale risposta corrisponde a $\frac{2}{4}$?
 A.  B.  C.  D. 

10) Quale risposta corrisponde a $\frac{3}{6}$?
 A.  B.  C.  D. 

11) Quale risposta corrisponde a $\frac{2}{8}$?
 A.  B.  C.  D. 

12) Quale risposta corrisponde a $\frac{4}{6}$?
 A.  B.  C.  D. 

1. **D**

2. **D**

3. **A**

4. **A**

5. **D**

6. **A**

7. **C**

8. **C**

9. **D**

10. **B**

11. **C**

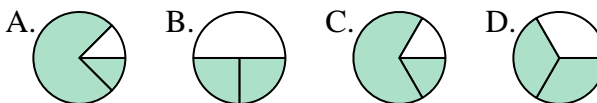
12. **C**



Determina quale lettera rappresenta correttamente la frazione.

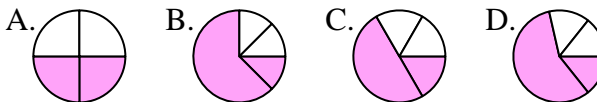
Risposte

1) Quale risposta corrisponde a $\frac{2}{3}$?



1. _____

2) Quale risposta corrisponde a $\frac{2}{4}$?



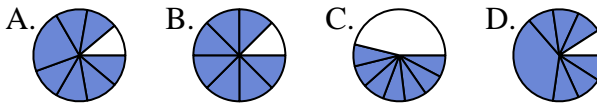
2. _____

3) Quale risposta corrisponde a $\frac{4}{6}$?



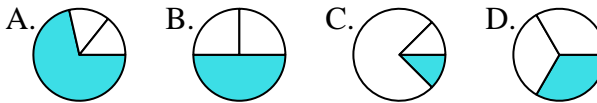
3. _____

4) Quale risposta corrisponde a $\frac{7}{8}$?



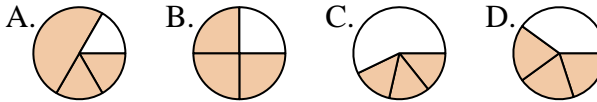
4. _____

5) Quale risposta corrisponde a $\frac{1}{3}$?



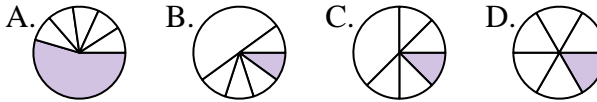
5. _____

6) Quale risposta corrisponde a $\frac{3}{4}$?



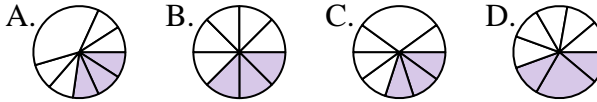
6. _____

7) Quale risposta corrisponde a $\frac{1}{6}$?



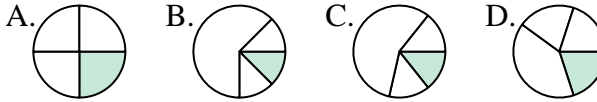
7. _____

8) Quale risposta corrisponde a $\frac{3}{8}$?



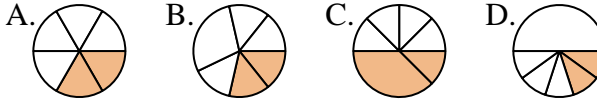
8. _____

9) Quale risposta corrisponde a $\frac{1}{4}$?



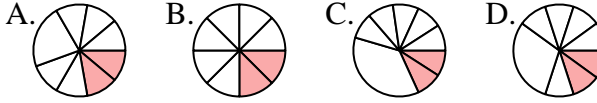
9. _____

10) Quale risposta corrisponde a $\frac{2}{6}$?



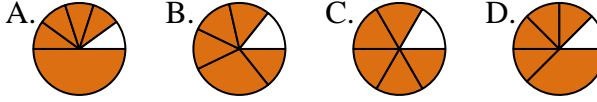
10. _____

11) Quale risposta corrisponde a $\frac{2}{8}$?



11. _____

12) Quale risposta corrisponde a $\frac{5}{6}$?



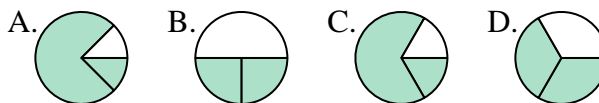
12. _____



Determina quale lettera rappresenta correttamente la frazione.

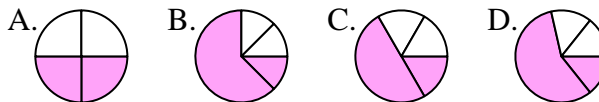
Risposte

1) Quale risposta corrisponde a $\frac{2}{3}$?



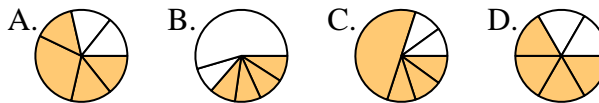
1. **D**

2) Quale risposta corrisponde a $\frac{2}{4}$?



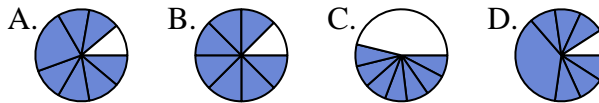
2. **A**

3) Quale risposta corrisponde a $\frac{4}{6}$?



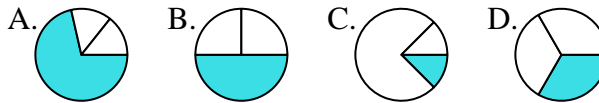
3. **D**

4) Quale risposta corrisponde a $\frac{7}{8}$?



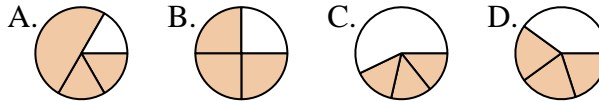
4. **B**

5) Quale risposta corrisponde a $\frac{1}{3}$?



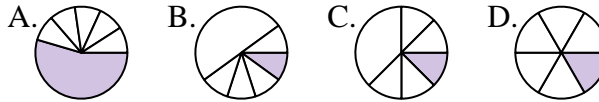
5. **D**

6) Quale risposta corrisponde a $\frac{3}{4}$?



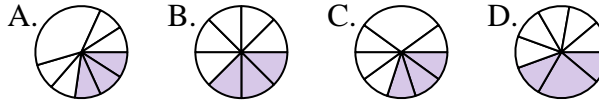
6. **B**

7) Quale risposta corrisponde a $\frac{1}{6}$?



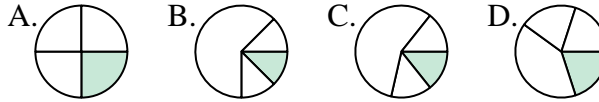
7. **D**

8) Quale risposta corrisponde a $\frac{3}{8}$?



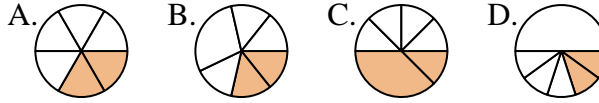
8. **B**

9) Quale risposta corrisponde a $\frac{1}{4}$?



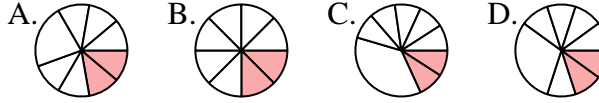
9. **A**

10) Quale risposta corrisponde a $\frac{2}{6}$?



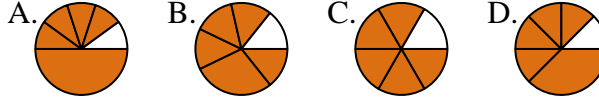
10. **A**

11) Quale risposta corrisponde a $\frac{2}{8}$?



11. **B**

12) Quale risposta corrisponde a $\frac{5}{6}$?



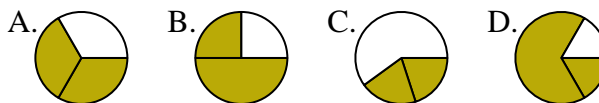
12. **C**



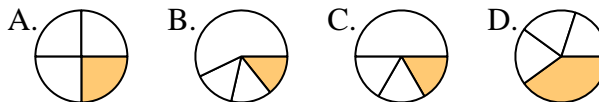
Determina quale lettera rappresenta correttamente la frazione.

Risposte

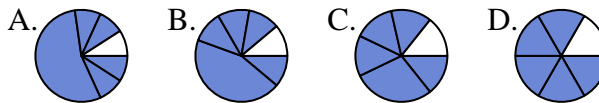
1) Quale risposta corrisponde a $\frac{2}{3}$?



2) Quale risposta corrisponde a $\frac{1}{4}$?



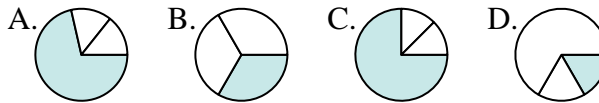
3) Quale risposta corrisponde a $\frac{5}{6}$?



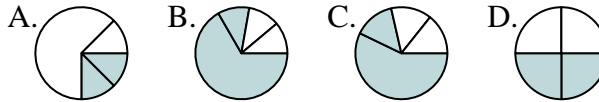
4) Quale risposta corrisponde a $\frac{3}{8}$?



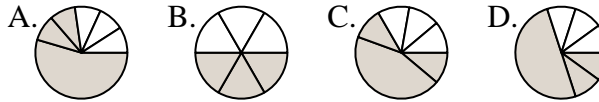
5) Quale risposta corrisponde a $\frac{1}{3}$?



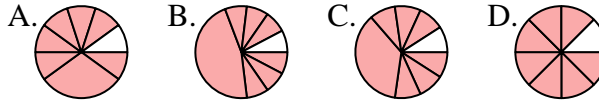
6) Quale risposta corrisponde a $\frac{2}{4}$?



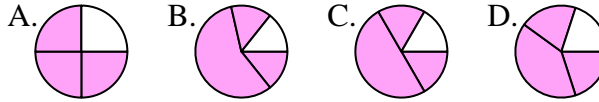
7) Quale risposta corrisponde a $\frac{3}{6}$?



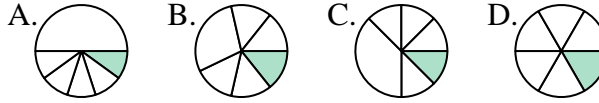
8) Quale risposta corrisponde a $\frac{7}{8}$?



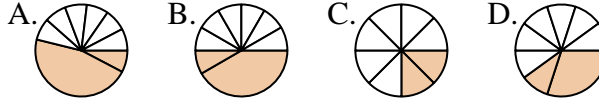
9) Quale risposta corrisponde a $\frac{3}{4}$?



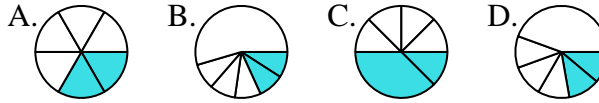
10) Quale risposta corrisponde a $\frac{1}{6}$?



11) Quale risposta corrisponde a $\frac{2}{8}$?



12) Quale risposta corrisponde a $\frac{2}{6}$?







1. _____
2. _____
3. _____
4. _____
5. _____
6. _____
7. _____
8. _____
9. _____
10. _____
11. _____
12. _____



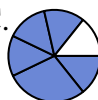
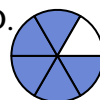






Determina quale lettera rappresenta correttamente la frazione.


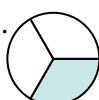


Risposte





1) Quale risposta corrisponde a $\frac{2}{3}$?
 A.  B.  C.  D. 


2) Quale risposta corrisponde a $\frac{1}{4}$?
 A.  B.  C.  D. 

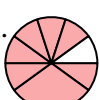
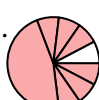


3) Quale risposta corrisponde a $\frac{5}{6}$?
 A.  B.  C.  D. 

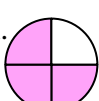
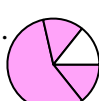
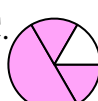

4) Quale risposta corrisponde a $\frac{3}{8}$?
 A.  B.  C.  D. 


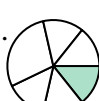


5) Quale risposta corrisponde a $\frac{1}{3}$?
 A.  B.  C.  D. 

6) Quale risposta corrisponde a $\frac{2}{4}$?
 A.  B.  C.  D. 

7) Quale risposta corrisponde a $\frac{3}{6}$?
 A.  B.  C.  D. 

8) Quale risposta corrisponde a $\frac{7}{8}$?
 A.  B.  C.  D. 

9) Quale risposta corrisponde a $\frac{3}{4}$?
 A.  B.  C.  D. 

10) Quale risposta corrisponde a $\frac{1}{6}$?
 A.  B.  C.  D. 

11) Quale risposta corrisponde a $\frac{2}{8}$?
 A.  B.  C.  D. 

12) Quale risposta corrisponde a $\frac{2}{6}$?
 A.  B.  C.  D. 

1. **A**

2. **A**

3. **D**

4. **D**

5. **B**

6. **D**

7. **B**

8. **D**

9. **A**

10. **D**

11. **C**

12. **A**