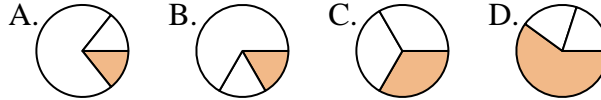




**Determina quale lettera rappresenta correttamente la frazione.**

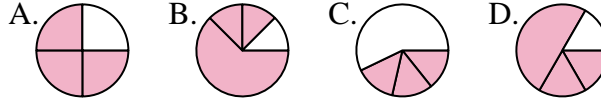
**Risposte**

1) Quale risposta corrisponde a  $\frac{1}{3}$ ?



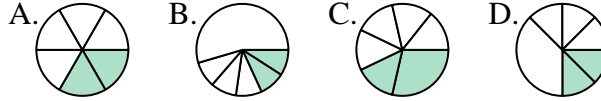
1. \_\_\_\_\_

2) Quale risposta corrisponde a  $\frac{3}{4}$ ?



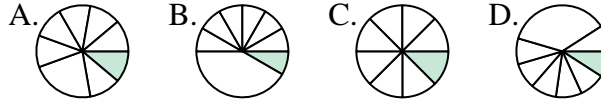
2. \_\_\_\_\_

3) Quale risposta corrisponde a  $\frac{2}{6}$ ?



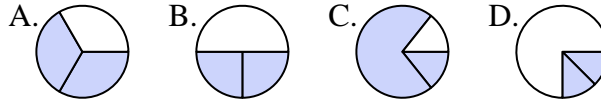
3. \_\_\_\_\_

4) Quale risposta corrisponde a  $\frac{1}{8}$ ?



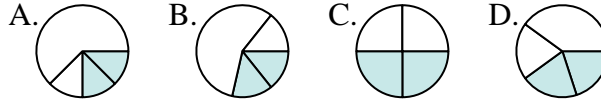
4. \_\_\_\_\_

5) Quale risposta corrisponde a  $\frac{2}{3}$ ?



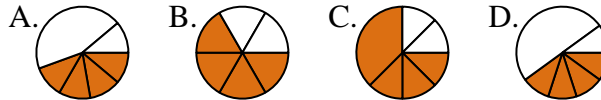
5. \_\_\_\_\_

6) Quale risposta corrisponde a  $\frac{2}{4}$ ?



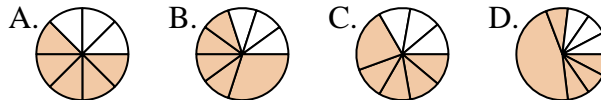
6. \_\_\_\_\_

7) Quale risposta corrisponde a  $\frac{4}{6}$ ?



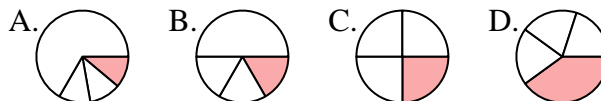
7. \_\_\_\_\_

8) Quale risposta corrisponde a  $\frac{5}{8}$ ?



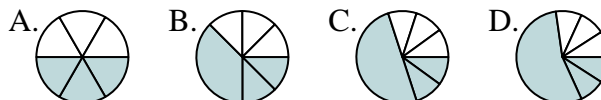
8. \_\_\_\_\_

9) Quale risposta corrisponde a  $\frac{1}{4}$ ?



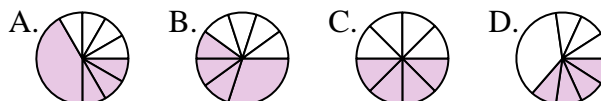
9. \_\_\_\_\_

10) Quale risposta corrisponde a  $\frac{3}{6}$ ?



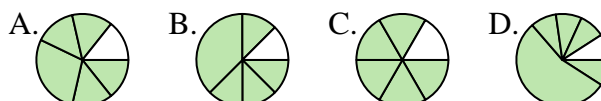
10. \_\_\_\_\_

11) Quale risposta corrisponde a  $\frac{4}{8}$ ?



11. \_\_\_\_\_

12) Quale risposta corrisponde a  $\frac{5}{6}$ ?

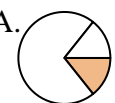
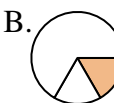
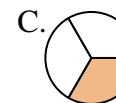
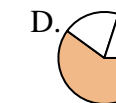


12. \_\_\_\_\_

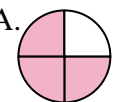

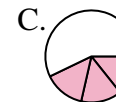
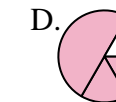


Determina quale lettera rappresenta correttamente la frazione.



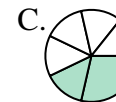
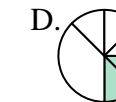
**Risposte**

1) Quale risposta corrisponde a  $\frac{1}{3}$ ?  
 A.  B.  C.  D. 



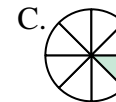
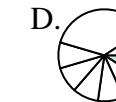
1.     **C**    

2) Quale risposta corrisponde a  $\frac{3}{4}$ ?  
 A.  B.  C.  D. 

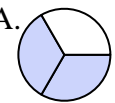
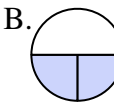
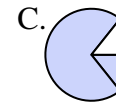
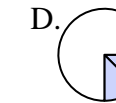
2.     **A**    

3) Quale risposta corrisponde a  $\frac{2}{6}$ ?  
 A.  B.  C.  D. 


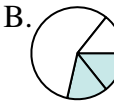
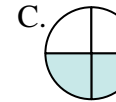
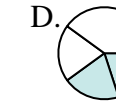
3.     **A**    

4) Quale risposta corrisponde a  $\frac{1}{8}$ ?  
 A.  B.  C.  D. 


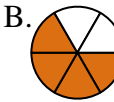
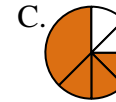
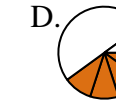
4.     **C**    

5) Quale risposta corrisponde a  $\frac{2}{3}$ ?  
 A.  B.  C.  D. 


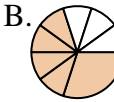
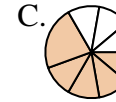
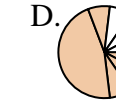
5.     **A**    

6) Quale risposta corrisponde a  $\frac{2}{4}$ ?  
 A.  B.  C.  D. 


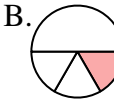
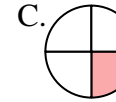
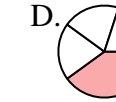
6.     **C**    

7) Quale risposta corrisponde a  $\frac{4}{6}$ ?  
 A.  B.  C.  D. 

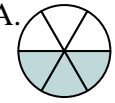
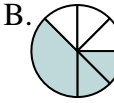

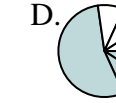
7.     **B**    

8) Quale risposta corrisponde a  $\frac{5}{8}$ ?  
 A.  B.  C.  D. 


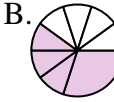
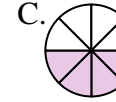
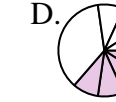
8.     **A**    

9) Quale risposta corrisponde a  $\frac{1}{4}$ ?  
 A.  B.  C.  D. 

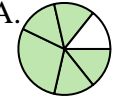
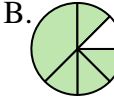
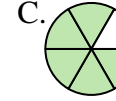
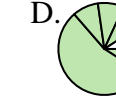
9.     **C**    

10) Quale risposta corrisponde a  $\frac{3}{6}$ ?  
 A.  B.  C.  D. 

10.     **A**    

11) Quale risposta corrisponde a  $\frac{4}{8}$ ?  
 A.  B.  C.  D. 

11.     **C**    

12) Quale risposta corrisponde a  $\frac{5}{6}$ ?  
 A.  B.  C.  D. 

12.     **C**