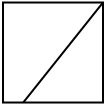
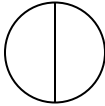
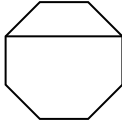
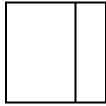
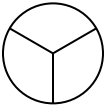
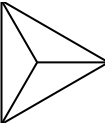
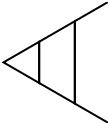

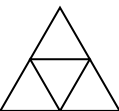
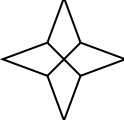
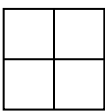

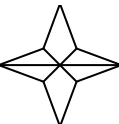
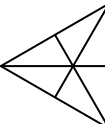
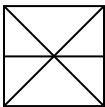
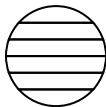
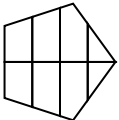
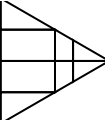
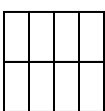
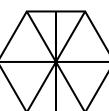
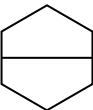


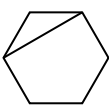
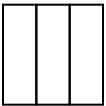
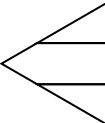
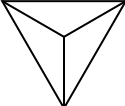
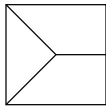

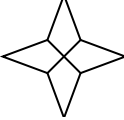
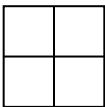
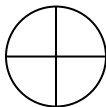




Determina quale scelta (scelte) mostri la forma suddivisa in modo che ogni parte abbia la stessa area. Se nessuna, scrivi 'nessuna'.

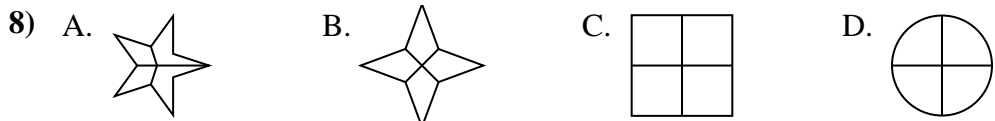
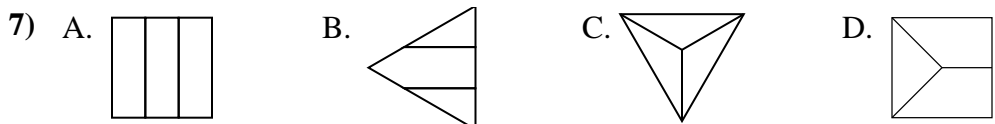
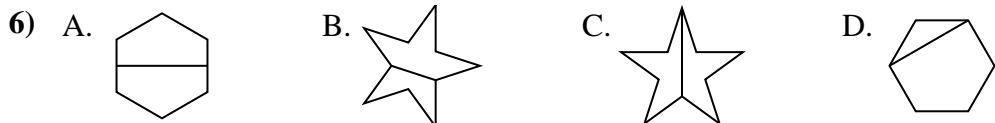
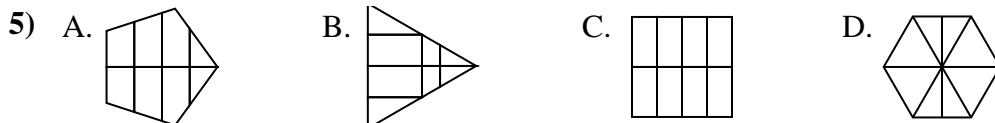
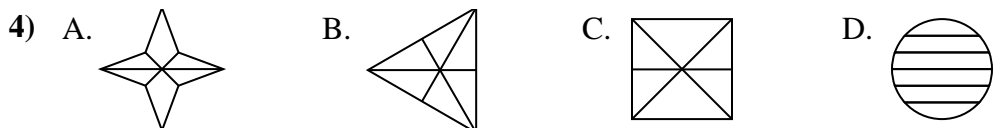
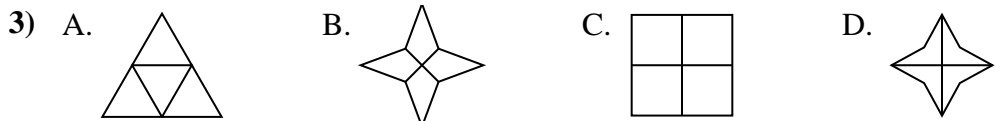
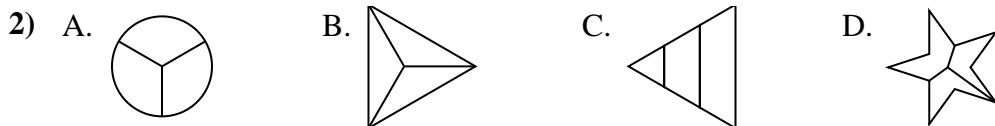
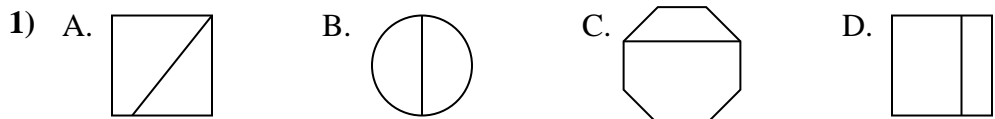
Risposte

- 1) A.  B.  C.  D. 
- 2) A.  B.  C.  D. 
- 3) A.  B.  C.  D. 
- 4) A.  B.  C.  D. 
- 5) A.  B.  C.  D. 
- 6) A.  B.  C.  D. 
- 7) A.  B.  C.  D. 
- 8) A.  B.  C.  D. 

1. _____
2. _____
3. _____
4. _____
5. _____
6. _____
7. _____
8. _____



Determina quale scelta (scelte) mostri la forma suddivisa in modo che ogni parte abbia la stessa area. Se nessuna, scrivi 'nessuna'.



Risposte

1. **B**

2. **A,B**

3. **A,B,C,D**

4. **B**

5. **C**

6. **A,C**

7. **A,C**

8. **B,C,D**