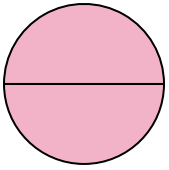




Determina quale lettera descrive la parte colorata.


**Risposte**

1)



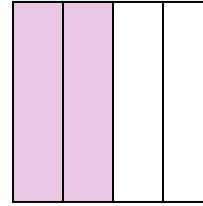
- A. two-halves
- B. one-quarter
- C. two-quarters

2)



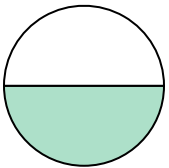
- A. one-half
- B. three-fourths
- C. two-halves

3)



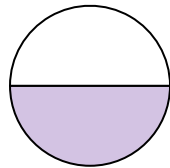
- A. two-fourths
- B. one-fourth
- C. three-fourths

4)



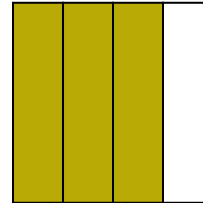
- A. two-fourths
- B. three-fourths
- C. one-half

5)



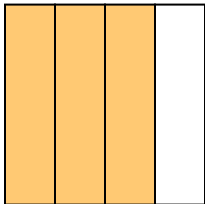
- A. three-fourths
- B. one-half
- C. two-quarters

6)



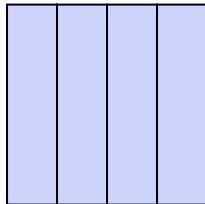
- A. one-fourth
- B. two-fourths
- C. three-fourths

7)



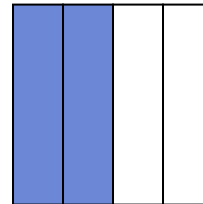
- A. two-fourths
- B. four-quarters
- C. three-quarters

8)



- A. two-quarters
- B. one-half
- C. four-quarters

9)



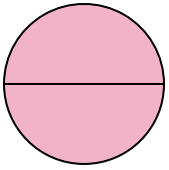
- A. two-halves
- B. two-fourths
- C. one-fourth

- 1. \_\_\_\_\_
- 2. \_\_\_\_\_
- 3. \_\_\_\_\_
- 4. \_\_\_\_\_
- 5. \_\_\_\_\_
- 6. \_\_\_\_\_
- 7. \_\_\_\_\_
- 8. \_\_\_\_\_
- 9. \_\_\_\_\_




Determina quale lettera descrive la parte colorata.

1)



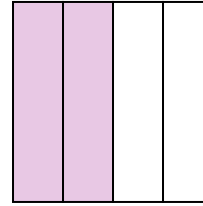
- A. two-halves
- B. one-quarter
- C. two-quarters

2)



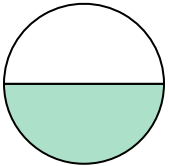
- A. one-half
- B. three-fourths
- C. two-halves

3)



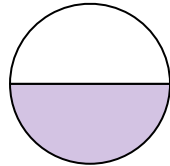
- A. two-fourths
- B. one-fourth
- C. three-fourths

4)



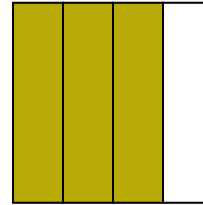
- A. two-fourths
- B. three-fourths
- C. one-half

5)



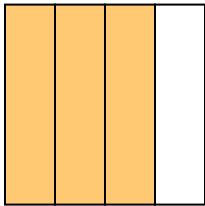
- A. three-fourths
- B. one-half
- C. two-quarters

6)



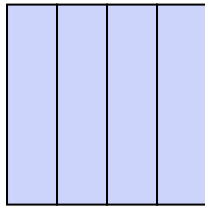
- A. one-fourth
- B. two-fourths
- C. three-fourths

7)



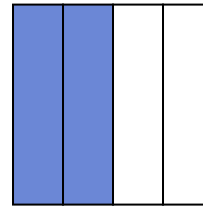
- A. two-fourths
- B. four-quarters
- C. three-quarters

8)



- A. two-quarters
- B. one-half
- C. four-quarters

9)



- A. two-halves
- B. two-fourths
- C. one-fourth

**Risposte**

1.   **A**  

2.   **C**  

3.   **A**  

4.   **C**  

5.   **B**  

6.   **C**  

7.   **C**  

8.   **C**  

9.   **B**