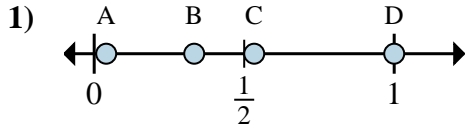


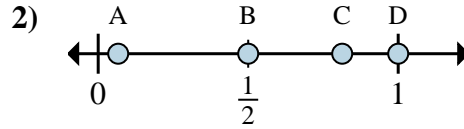


Determina quale lettera rappresenta correttamente la posizione della frazione sulla linea numerata.

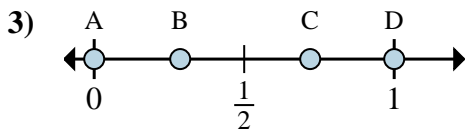
Risposte



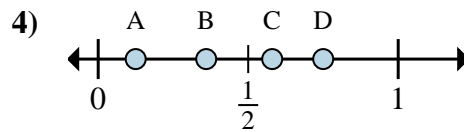
- a. Quale lettera rappresenta meglio $\frac{1}{3}$?
- b. Quale lettera rappresenta meglio $\frac{3}{3}$?



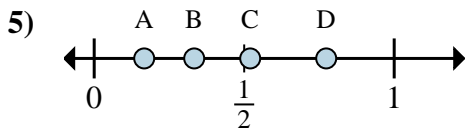
- a. Quale lettera rappresenta meglio $\frac{1}{2}$?
- b. Quale lettera rappresenta meglio $\frac{2}{2}$?



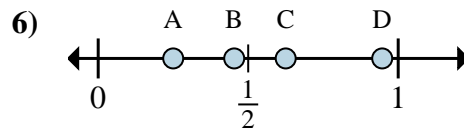
- a. Quale lettera rappresenta meglio $\frac{0}{6}$?
- b. Quale lettera rappresenta meglio $\frac{6}{6}$?



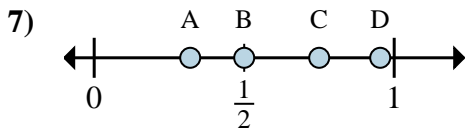
- a. Quale lettera rappresenta meglio $\frac{1}{8}$?
- b. Quale lettera rappresenta meglio $\frac{6}{8}$?



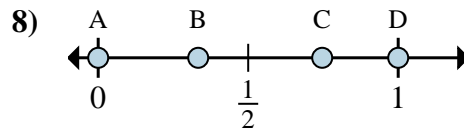
- a. Quale lettera rappresenta meglio $\frac{2}{6}$?
- b. Quale lettera rappresenta meglio $\frac{1}{6}$?



- a. Quale lettera rappresenta meglio $\frac{5}{8}$?
- b. Quale lettera rappresenta meglio $\frac{2}{8}$?



- a. Quale lettera rappresenta meglio $\frac{3}{4}$?
- b. Quale lettera rappresenta meglio $\frac{2}{4}$?



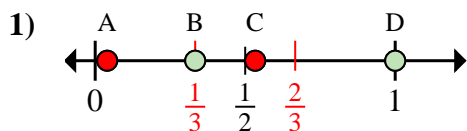
- a. Quale lettera rappresenta meglio $\frac{0}{6}$?
- b. Quale lettera rappresenta meglio $\frac{6}{6}$?

- 1. _____
- 2. _____
- 3. _____
- 4. _____
- 5. _____
- 6. _____
- 7. _____
- 8. _____

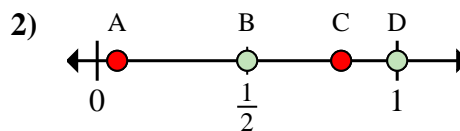


Determina quale lettera rappresenta correttamente la posizione della frazione sulla linea numerata.

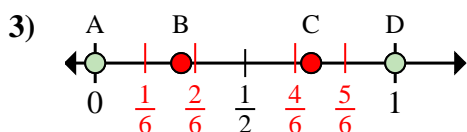
Risposte



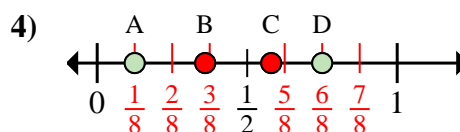
- a. Quale lettera rappresenta meglio $\frac{1}{3}$?
- b. Quale lettera rappresenta meglio $\frac{3}{3}$?



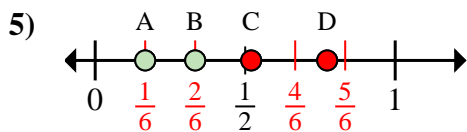
- a. Quale lettera rappresenta meglio $\frac{1}{2}$?
- b. Quale lettera rappresenta meglio $\frac{2}{2}$?



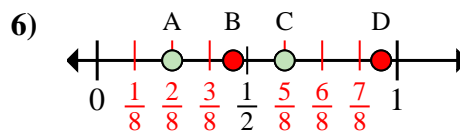
- a. Quale lettera rappresenta meglio $\frac{0}{6}$?
- b. Quale lettera rappresenta meglio $\frac{6}{6}$?



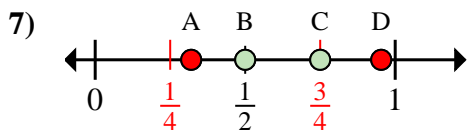
- a. Quale lettera rappresenta meglio $\frac{1}{8}$?
- b. Quale lettera rappresenta meglio $\frac{6}{8}$?



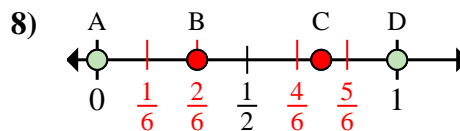
- a. Quale lettera rappresenta meglio $\frac{2}{6}$?
- b. Quale lettera rappresenta meglio $\frac{1}{6}$?



- a. Quale lettera rappresenta meglio $\frac{5}{8}$?
- b. Quale lettera rappresenta meglio $\frac{2}{8}$?



- a. Quale lettera rappresenta meglio $\frac{3}{4}$?
- b. Quale lettera rappresenta meglio $\frac{2}{4}$?



- a. Quale lettera rappresenta meglio $\frac{0}{6}$?
- b. Quale lettera rappresenta meglio $\frac{6}{6}$?

- 1. B D
- 2. B D
- 3. A D
- 4. A D
- 5. B A
- 6. C A
- 7. C B
- 8. A D